

CAMBRIDGE TECHNICALS LEVEL 3 (2016)

Examiners' report

ENGINEERING

05822–05825, 05873

Unit 1 January 2022 series

Contents

Introduction	3
Unit 1 series overview	4
Question 1 (a)	5
Question 1 (b)	5
Question 1 (c)	5
Question 1 (d)	6
Question 1 (e)	6
Question 2 (a)	6
Question 2 (b)	7
Question 3 (a) (i)	8
Question 3 (a) (ii)	8
Question 3 (b)	9
Question 4 (i)	9
Question 4 (ii)	10
Question 4 (iii)	10
Question 4 (iv)	10
Question 5 (i)	11
Question 5 (ii)	12
Question 6 (i)	13
Question 6 (ii)	14
Question 6 (iii)	15
Question 6 (iv)	15
Question 7 (i)	16
Question 7 (ii)	17
Question 7 (iii)	17
Copyright information	17

Introduction

Our examiners' reports are produced to offer constructive feedback on candidates' performance in the examinations. They provide useful guidance for future candidates.

The reports will include a general commentary on candidates' performance, identify technical aspects examined in the questions and highlight good performance and where performance could be improved. The reports will also explain aspects which caused difficulty and why the difficulties arose, whether through a lack of knowledge, poor examination technique, or any other identifiable and explainable reason.

Where overall performance on a question/question part was considered good, with no particular areas to highlight, these questions have not been included in the report.

A full copy of the question paper and the mark scheme can be downloaded from OCR.

Would you prefer a Word version?

Did you know that you can save this PDF as a Word file using Acrobat Professional?

Simply click on **File > Export to** and select **Microsoft Word**

(If you have opened this PDF in your browser you will need to save it first. Simply right click anywhere on the page and select **Save as . . .** to save the PDF. Then open the PDF in Acrobat Professional.)

If you do not have access to Acrobat Professional there are a number of **free** applications available that will also convert PDF to Word (search for PDF to Word converter).

Unit 1 series overview

Many candidates performed well in this paper with a number obtaining full marks. It was clear however that a number of candidates had not covered all the topics of the specification. To progress well in engineering, all topics of this unit need to be covered. It is clear that many candidates have a good understanding of all topics but equally clear that a number have a poor or no understanding of some topics, which have not been underpinned by confidence in basic mathematics.

<i>Candidates who did well on this paper generally did the following:</i>	<i>Candidates who did less well on this paper generally did the following:</i>
<ul style="list-style-type: none">• Had an understanding of all the topics in the specification.• Had written their responses carefully.	<ul style="list-style-type: none">• Missed out on some topics of the specification.• Did not lay out their work clearly so that the development of the response to its conclusion was not clear.

Question 1 (a)

1 (a) Remove the brackets and simplify $(3x - 1) - 2(1 - x)$.

.....
.....
..... [2]

The most common error here was to expand the second bracket, failing to change the sign. Candidates also did not multiply throughout the second bracket by 2.

Question 1 (b)

(b) Factorise $4x + 6xy$.

.....
..... [2]

A number of candidates extracted one factor but not both.

Question 1 (c)

(c) Express as a single fraction $\frac{x}{2} + \frac{2x}{3}$.

.....
.....
..... [2]

This part was usually well done; only a very small number of candidates did not use the lowest common multiple of the denominators.

Question 1 (d)

(d) Solve the equation $2x - 1 = 3 + 5x$.

.....
.....
..... [2]

Candidates should understand that the demand “solve the equation” means that an exact answer is required. So, $x = -1.3$ was not accepted unless $x = -\frac{4}{3}$ could be seen earlier in the working. There are standard steps to solve equations and those that followed them usually obtained the correct outcome.

Question 1 (e)

(e) Rearrange $s = vt - \frac{1}{2}at^2$ to make v the subject.

.....
.....
..... [3]

A significant majority of candidates did not score any marks in this transposing question. Isolating the v term was the first step and then dividing by t . A variety of ways of writing the expression for v were accepted.

Question 2 (a)

2 (a) Use the quadratic formula to solve the equation $x^2 + 3x - 7 = 0$.
Give your answers correct to 3 significant figures.

.....
.....
.....
..... [3]

This question requires the use of the quadratic formula which is given in the formula booklet (3.1 on page 9). Most candidates who did not score marks in this part did not remember the formula well and did not copy it from the formula booklet. The most significant error was to fail to take the denominator under the whole of the numerator.

Additionally, the question asked for roots "correct to 3 significant figures". Failure to do so lost the last mark.

Key point call out

Instructions state that "answers should be given to a degree of accuracy appropriate to the context". Even if there is no context to the question it would be unusual for an answer which is not exact to be required that is more than 2 decimal places or 3 significant figures.

Question 2 (b)

- (b) An engineer is buying electrical components that are made in two types, type A and type B.

3 of type A and 4 of type B will cost £39.

4 of type A and 3 of type B will cost £38.

Let the cost of a type A be £ a and the cost of a type B be £ b .

Form two equations in a and b and solve simultaneously to find the cost of each type.

.....
.....
.....
.....
..... [5]

This was a straightforward question on simultaneous equations.

Many responses showed poor algebra. The question asked for the cost of two types of components. The correct response was "Type A cost £5 and type B cost £6", but this was rarely seen. Most wrote $a = 5$, $b = 6$ but many also wrote $a = £5$, $b = £6$, displaying a lack of understanding of algebra.

It is worth pointing out that the question asked candidates to form two equations. A few candidates found the answer correctly with no working, either because they worked on another paper which was not handed in or using their calculators. Failure to write two equations in these instances cost 2 marks.

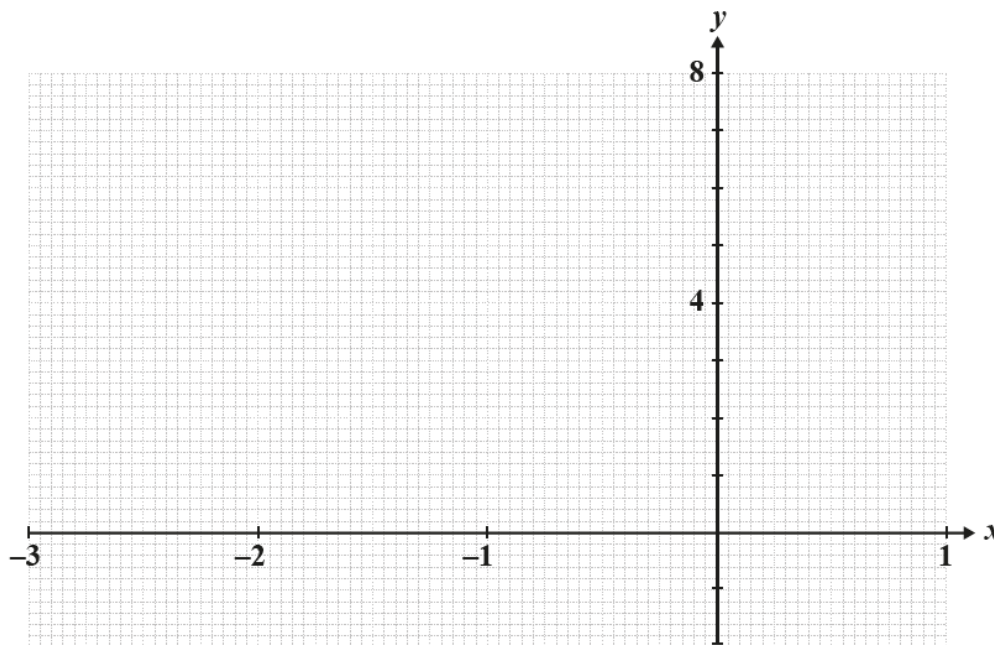
Key point call out

Candidates should think carefully about the use of variables in equations to satisfy given conditions. In this case a and b have no units, so it is not correct to say that $a = £5$. From the equations, $a = 5$ and so the cost of type A is £5.

Question 3 (a) (i)

3 (a) A curve has equation $y = x^3 + 3x^2 - 1$.

(i) Plot the curve in the region $-3 \leq x \leq 1$.



[3]

A few candidates did not understand what a cubic curve looked like and so were unable to correct their arithmetic for the plotting of points. Others drew straight lines between the correct points.

Question 3 (a) (ii)

(ii) Hence write down the roots of the equation $x^3 + 3x^2 - 1 = 0$ correct to 1 decimal place.

.....

..... [2]

Some candidates did not understand the word “roots” and wrote some coordinates instead. Three roots were required.

Question 4 (ii)

(ii) Find the time taken before the voltage across the capacitor is 0.12 Volts.

.....
.....
..... [3]

Without an appropriate expression from part (i) of the form V_0e^{-kt} it was not possible to complete this part of the question, although the substitution $V = 0.12$ earned the first mark.

Question 4 (iii)

(iii) Find the voltage across the capacitor in the long term.

.....
..... [1]

There is a lack of understanding of “decay” so “approaches 0” or just 0 was not often seen.

Question 4 (iv)

(iv) Find an expression for the rate of change of the voltage with respect to time, $\frac{dV}{dt}$.

.....
.....
.....
.....
.....
..... [2]

This last part involved calculus of the exponential function. Given that these two topics were not well understood, few candidates were able to give the correct response.

Question 5 (ii)

- (ii) The width of the road is 5 m.

Find the volume of material required to make **one** bump.

.....

.....

..... [2]

The first part was a “show that” question which usually means that the answer can be used in a subsequent part even if not derived. Candidates often earned full marks for this part using the given answer of part (i) even though they did not score in that part.

Candidates should be encouraged to think about units in all their problem solving. There are many answers in this question paper which have units. A requirement to give the units, even if not explicitly asked to do so, will occur at least once in the paper and the units (m³) were required here for the second mark.

Key point call out

Candidates should be encouraged to think about the units of values in problem solving. Sometimes the question will say “Show the units of your answer”. That will often be when the answer could be given in different units. For instance a length could be 60 cm or 600 mm or 0.6 m. So the answer 60 would not be good enough. In other cases, the need to write down the units will be expected but not demanded. In this case, a volume is required, so the answer should be $\frac{8}{3} \text{ m}^3$. To say that the volume is $\frac{8}{3}$ is not good enough. Some candidates did not understand the situation and, because (i) is an area the answer here was given as $\frac{8}{3} \text{ m}^2$.

Question 6 (i)

- 6 The data in the table shows the lengths, l mm of 150 brass rods.

Length (mm)	Frequency	Cumulative frequency
$l < 189$	0	0
$189 \leq l < 190$	10	10
$190 \leq l < 191$	12	
$191 \leq l < 192$	17	
$192 \leq l < 193$	24	
$193 \leq l < 194$	26	
$194 \leq l < 195$	25	
$195 \leq l < 196$	20	
$196 \leq l < 197$	11	
$197 \leq l < 198$	5	150

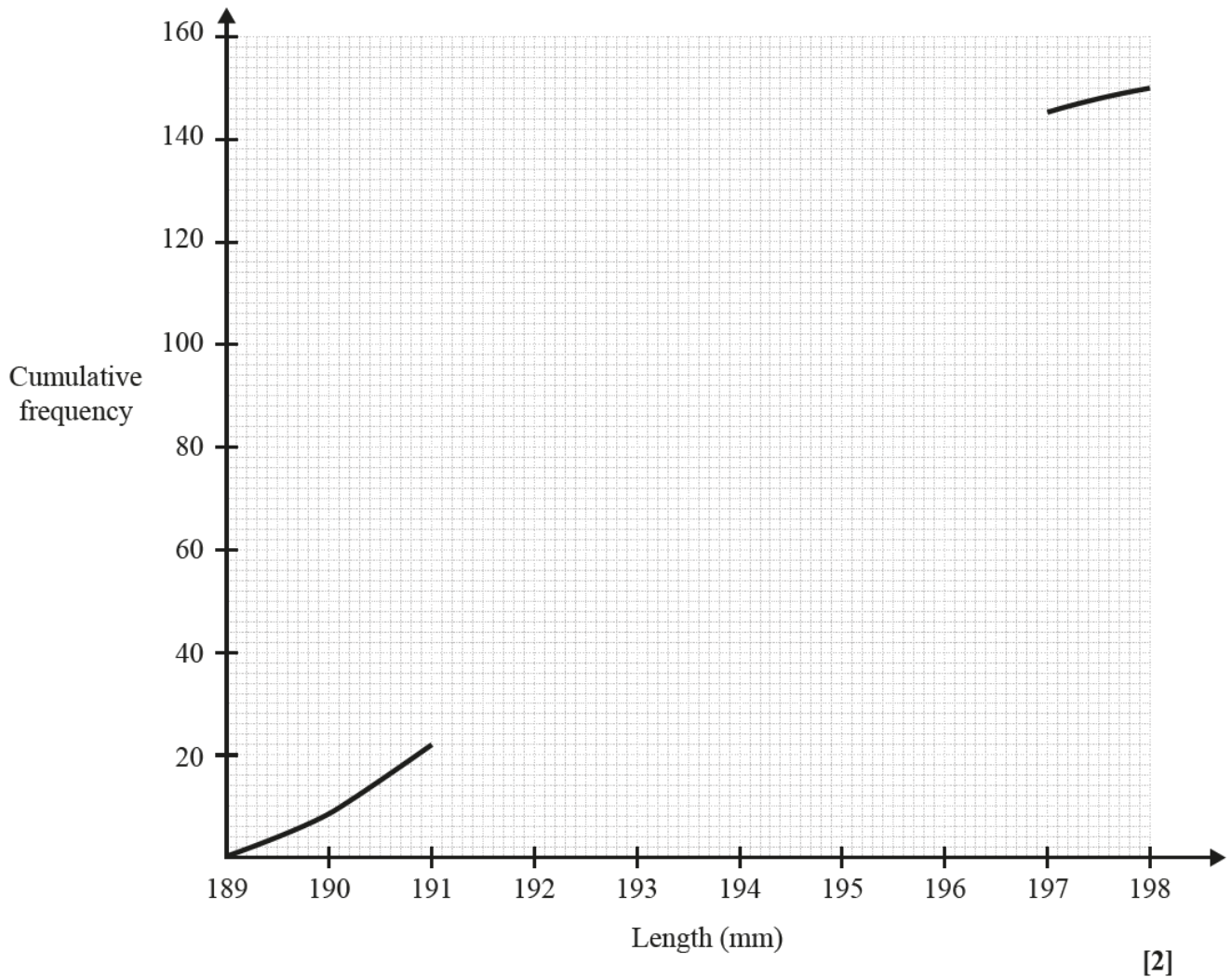
- (i) Complete the cumulative frequency column in the table above.

[2]

The vast majority of candidates understood what was required in this question and completed the cumulative frequency table correctly.

Question 6 (ii)

(ii) Complete the cumulative frequency curve on the grid below.



[2]

The resulting curve was also well done. A small number of candidates drew straight lines between the plotted points even though the question asked for a curve. A few also plotted at midpoints of the ranges instead of at the end.

Question 6 (iii)

(iii) Find the median length of the brass rods from your curve.

.....
..... [2]

Many found a value for the answer from the cumulative frequency of 80 instead of the halfway mark for the data which was 75. Candidates should be encouraged to draw straight lines from a given value on one axis to the curve and thence to the other axis. It was not always clear in this question where the answer came from.

Question 6 (iv)

(iv) You are given that the arithmetic mean is 193.2 mm and the standard deviation is 1.8 mm. The brass rods are only acceptable if they have a length within 2 standard deviations of the mean.

Find the number of brass rods that are rejected because they are either too long or too short.

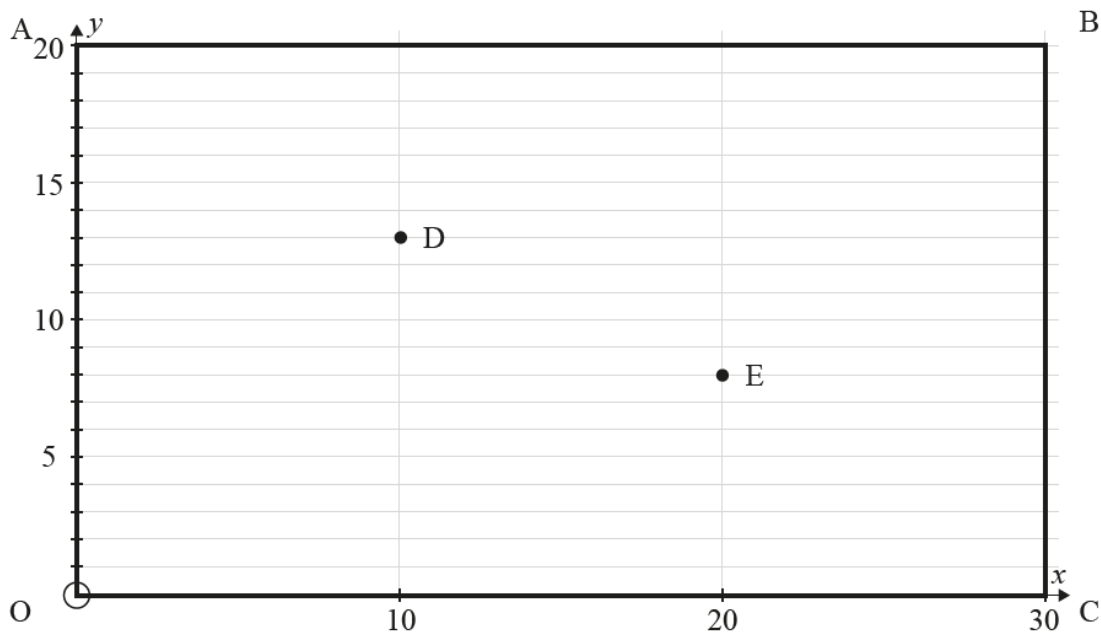
.....
.....
.....
..... [3]

The standard deviation in this part was given. Nonetheless a number of candidates attempted to calculate the standard deviation for the data, presumably taking a considerable amount of time either by a long calculation or by inputting the data into their calculator.

The focus of this question was not, however, to assess the ability to compute a standard deviation but to find a range of acceptable values from the curve. Again, there were some responses with no working and no indication of what was being found from the graph. Many candidates also misread the question and took the range of values within one standard deviation rather than the two required by the question.

Question 7 (i)

- 7 A metal plate, OABC, is rectangular with sides of length 30 cm by 20 cm. The plate is 2 cm thick. Two circles with radius 5 cm need to be cut out from the plate. On a coordinate system the plate has coordinates O(0, 0), A(0, 20), B(30, 20) and C(30, 0) as shown in the diagram. The two circles are to have centres D and E at (10, 13) and (20, 8).



- (i) Write down the equations of the two circles in the form $(x - a)^2 + (y - b)^2 = r^2$.
-
-
- [2]

Coordinate geometry of circles is often misunderstood; the requirement here was to substitute the coordinates of the centre and the radius of each circle. Many candidates substituted values for x and y instead of a and b .

Question 7 (ii)

(ii) Calculate the volume of the metal plate remaining when the circles have been cut out.

.....
.....
.....
.....
..... [4]

Part (ii) was a good source of marks, even for the weaker responses. The volume of the two cylinders taken out of the cuboid simply required the subtraction of one volume from another. Many candidates worked in areas to give an answer for the area of the rectangle left, followed by (sometimes, but not always) the depth of 2 cm. Others worked in volumes throughout but unfortunately then didn't go on to multiply the area of a circle by 2 to give the volume and then another 2 because there were two circles.

Question 7 (iii)

(iii) By finding the distance DE, determine the smallest distance between the circles.

.....
.....
..... [3]

This part was an application of Pythagoras theorem and many candidates obtained the correct answer for the distance between the centres of the circles. This was not the question, however, and many did not realise that to find the shortest distance between the edges of the circle required them to subtract 10 from their answer.

Copyright information

Any reference to existing companies or organisations is entirely coincidental and is not intended as a depiction of those companies or organisations.

Supporting you

Review of results

If any of your students' results are not as expected, you may wish to consider one of our review of results services. For full information about the options available visit the [OCR website](#).

Supporting you through 2021-2022

Our priority is supporting you and your students this spring and to support you as you prepare for summer 2022. We'll update our [website information](#) regularly with resources, guidance and key information.

Take a look at our support for:

- [Teachers](#)
- [Students](#)
- [Exams officers](#)

Keep up-to-date

We are sending a weekly roundup to tell you about important updates. You can also sign up for your subject specific updates. If you haven't already, [sign up here](#).

OCR Professional Development

Attend one of our popular CPD courses to hear directly from a senior assessor or drop in to a Q&A session. All our courses for the academic year 2021-2022 are being delivered live via an online platform, so you can attend from any location.

Please find details for all our courses on the relevant subject page on our [website](#) or visit [OCR professional development](#).

Signed up for Exambuilder?

ExamBuilder is the question builder platform for a range of our GCSE, A Level, Cambridge Nationals, Cambridge Technicals and Functional Skills qualifications. See the full list of available qualifications in the [sign up form](#).

ExamBuilder is **free for all OCR centres** with an Interchange account and gives you unlimited users per centre. We need an [Interchange](#) username to validate the identity of your centre's first user account for ExamBuilder.

If you do not have an Interchange account please contact your centre administrator (usually the Exams Officer) to request a username, or nominate an existing Interchange user in your department.

Supporting you

Active Results

Review students' exam performance with our free online results analysis tool.

For the spring 2022 series, results analysis is available for Cambridge Nationals (moderated units) only.

It allows you to:

- review and run analysis reports on exam performance
- analyse results at question and/or topic level
- compare your centre with OCR national averages
- identify trends across the centre
- facilitate effective planning and delivery of courses
- identify areas of the curriculum where students excel or struggle
- help pinpoint strengths and weaknesses of students and teaching departments.

Find out more at ocr.org.uk/activeresults.

Need to get in touch?

If you ever have any questions about OCR qualifications or services (including administration, logistics and teaching) please feel free to get in touch with our customer support centre.

Call us on
01223 553998

Alternatively, you can email us on
support@ocr.org.uk

For more information visit

 **ocr.org.uk/qualifications/resource-finder**

 **ocr.org.uk**

 **/ocrexams**

 **/ocrexams**

 **/company/ocr**

 **/ocrexams**

We really value your feedback

Click to send us an autogenerated email about this resource. Add comments if you want to. Let us know how we can improve this resource or what else you need. Your email address will not be used or shared for any marketing purposes.



I like this



I dislike this

Please note – web links are correct at date of publication but other websites may change over time. If you have any problems with a link you may want to navigate to that organisation's website for a direct search.



OCR is part of Cambridge University Press & Assessment, a department of the University of Cambridge.

For staff training purposes and as part of our quality assurance programme your call may be recorded or monitored. © OCR 2022 Oxford Cambridge and RSA Examinations is a Company Limited by Guarantee. Registered in England. Registered office The Triangle Building, Shaftesbury Road, Cambridge, CB2 8EA. Registered company number 3484466. OCR is an exempt charity.

OCR operates academic and vocational qualifications regulated by Ofqual, Qualifications Wales and CCEA as listed in their qualifications registers including A Levels, GCSEs, Cambridge Technicals and Cambridge Nationals.

OCR provides resources to help you deliver our qualifications. These resources do not represent any particular teaching method we expect you to use. We update our resources regularly and aim to make sure content is accurate but please check the OCR website so that you have the most up to date version. OCR cannot be held responsible for any errors or omissions in these resources.

Though we make every effort to check our resources, there may be contradictions between published support and the specification, so it is important that you always use information in the latest specification. We indicate any specification changes within the document itself, change the version number and provide a summary of the changes. If you do notice a discrepancy between the specification and a resource, please [contact us](#).

You can copy and distribute this resource freely if you keep the OCR logo and this small print intact and you acknowledge OCR as the originator of the resource.

OCR acknowledges the use of the following content: N/A

Whether you already offer OCR qualifications, are new to OCR or are thinking about switching, you can request more information using our [Expression of Interest form](#).

Please [get in touch](#) if you want to discuss the accessibility of resources we offer to support you in delivering our qualifications.