

Candidate Forename		Candidate Surname	
-------------------------------	--	------------------------------	--

Centre Number						Candidate Number				
--------------------------	--	--	--	--	--	-----------------------------	--	--	--	--

**OXFORD CAMBRIDGE AND RSA EXAMINATIONS
ADVANCED SUBSIDIARY GCE**

4771

MATHEMATICS (MEI)

Decision Mathematics 1

PRINTED ANSWER BOOK

WEDNESDAY 17 JUNE 2009: Morning

DURATION: 1 hour 30 minutes

SUITABLE FOR VISUALLY IMPAIRED CANDIDATES

READ INSTRUCTIONS OVERLEAF

INSTRUCTIONS TO CANDIDATES

- **Write your name clearly in capital letters, your Centre Number and Candidate Number in the boxes on the first page.**
- **Use black ink. Pencil may be used for graphs and diagrams only.**
- **Write your answers in the spaces provided on the answer book. If extra paper is required use a 4 page answer booklet making sure that you label your work clearly. Attach any extra answer booklets to this Printed Answer Book.**

BLANK PAGE

1 (i)

(ii)

Vertex 6 ●

● Vertex 1

Vertex 5 ●

● Vertex 2

Vertex 4 ●

● Vertex 3

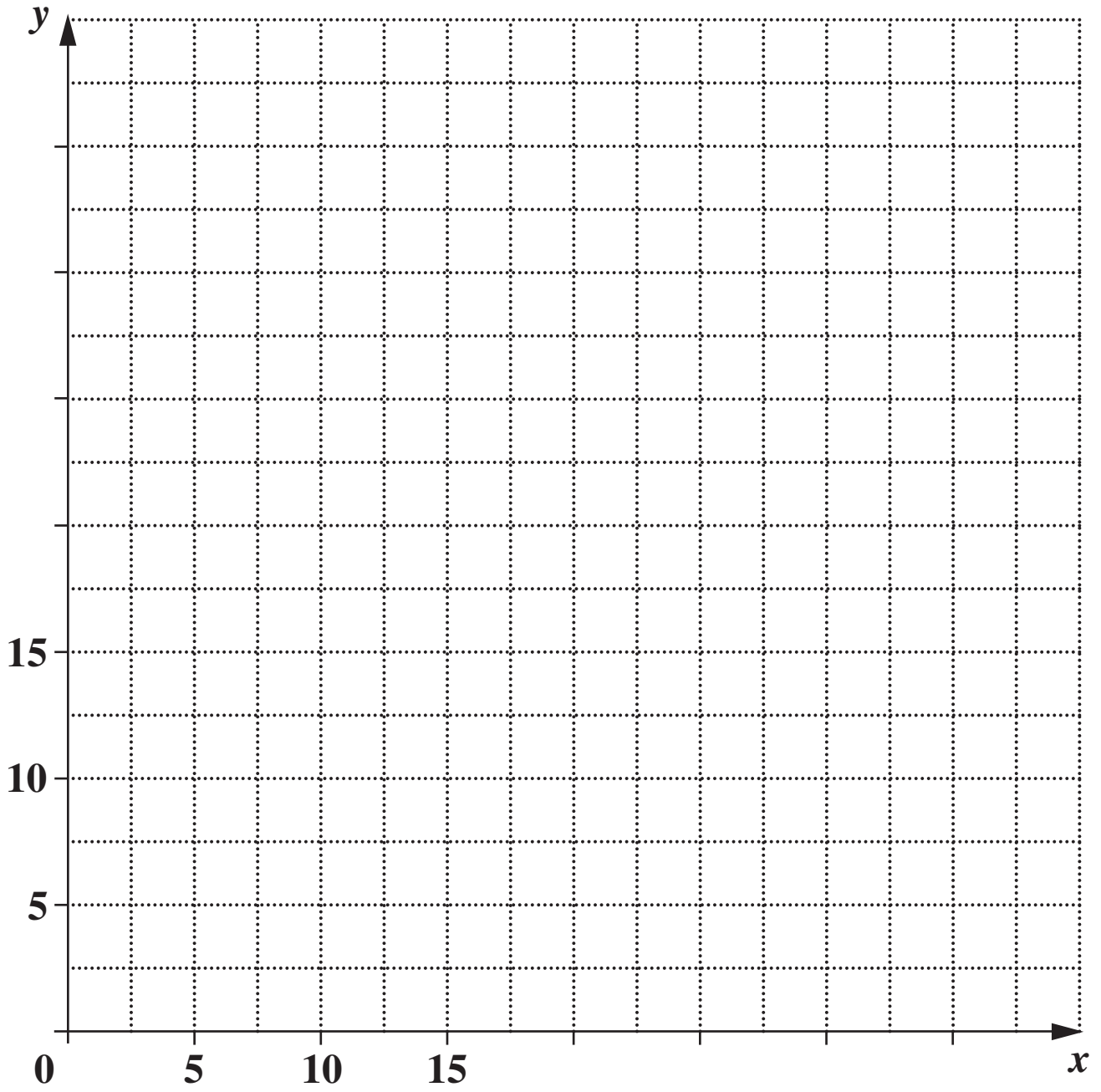
(iii)

2 (i)

(ii)

(iii)

3 (i)

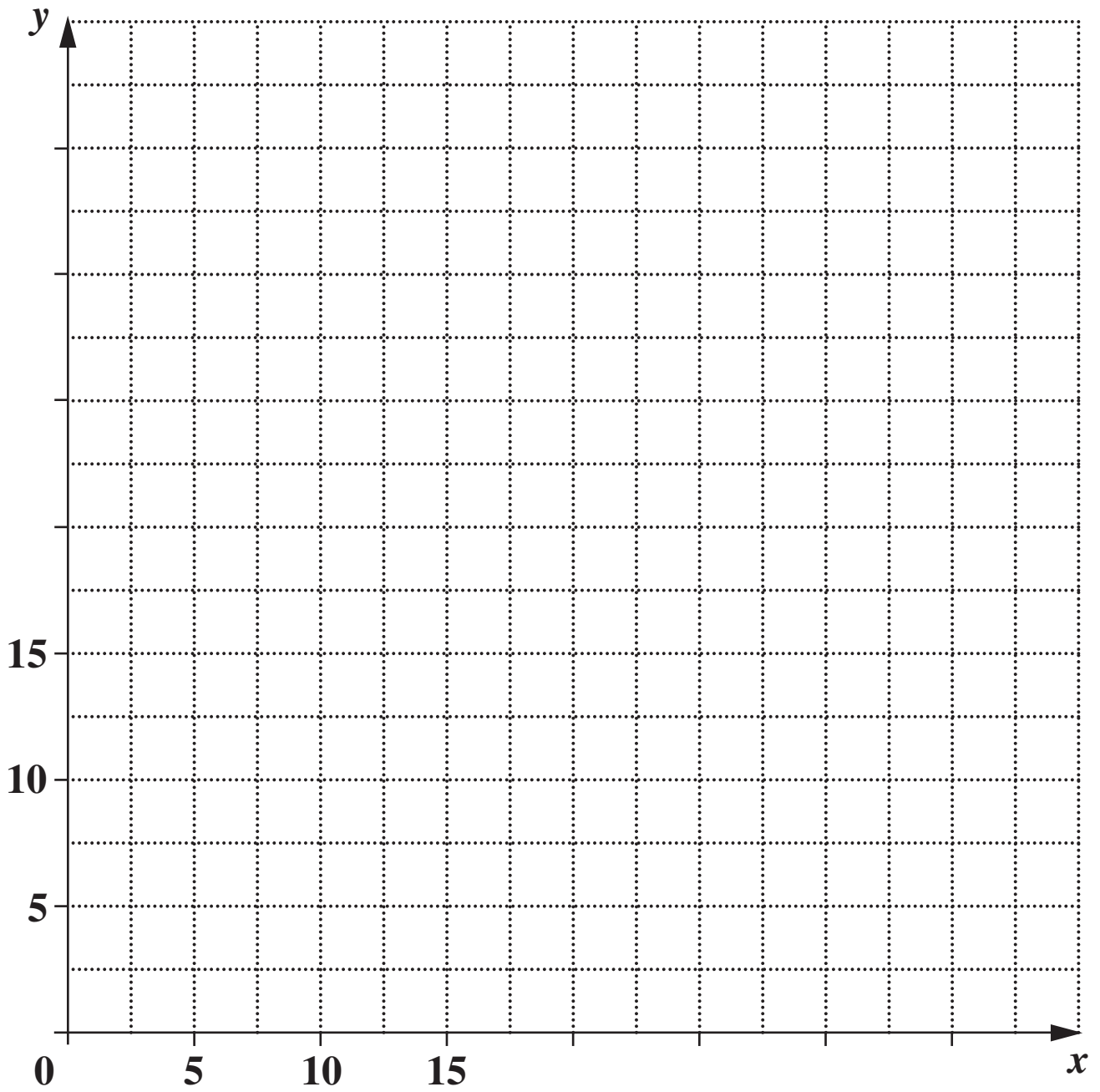


Solution:

(ii)

3 (i)

**SPARE COPY OF GRAPH PAPER
FOR QUESTION 3(i)**



Solution:

(ii) Random digits

run 1	1	5	6	4	9	4	6	0	0	9
run 2	8	7	8	6	6	3	2	9	7	1
run 3	2	1	9	4	9	1	8	2	5	1
run 4	6	8	7	9	4	6	0	6	6	8
run 5	6	0	5	7	7	1	7	8	5	1
run 6	6	7	7	9	7	2	2	7	4	7
run 7	5	7	7	3	2	7	1	1	5	5
run 8	0	7	3	9	6	8	0	9	2	3
run 9	9	4	2	9	2	3	2	6	0	1
run 10	2	8	5	8	6	9	1	4	8	3

Simulation runs

run 1	A
run 2	A
run 3	A
run 4	A
run 5	A
run 6	A
run 7	A
run 8	A
run 9	A
run 10	A

Probability of exiting at A: _____

Probability of exiting at B: _____

Mean number of runs between vertices: _____

(iii)

(iv) Random digits

run 1	4	6	5	6	1	1	6	5	2	2
run 2	7	4	1	2	5	2	4	8	8	6
run 3	1	5	8	8	2	7	8	8	9	3
run 4	4	4	8	9	4	1	4	9	1	0
run 5	2	0	3	3	1	5	7	5	1	6
run 6	6	5	3	0	4	5	8	2	9	2
run 7	2	3	5	8	2	3	7	4	7	6
run 8	3	5	1	7	6	9	4	0	4	6
run 9	0	9	1	6	4	2	2	4	5	3
run 10	0	5	0	6	9	1	3	6	0	0

Simulation runs

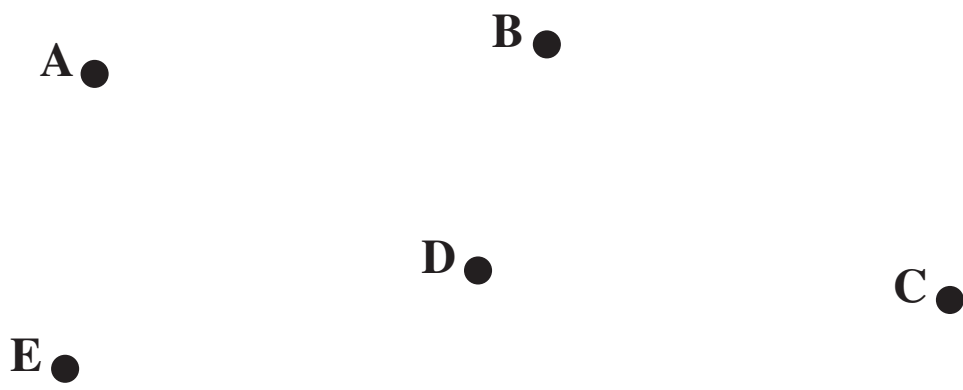
run 1 A
run 2 A
run 3 A
run 4 A
run 5 A
run 6 A
run 7 A
run 8 A
run 9 A
run 10 A

Probability of exiting at A: _____

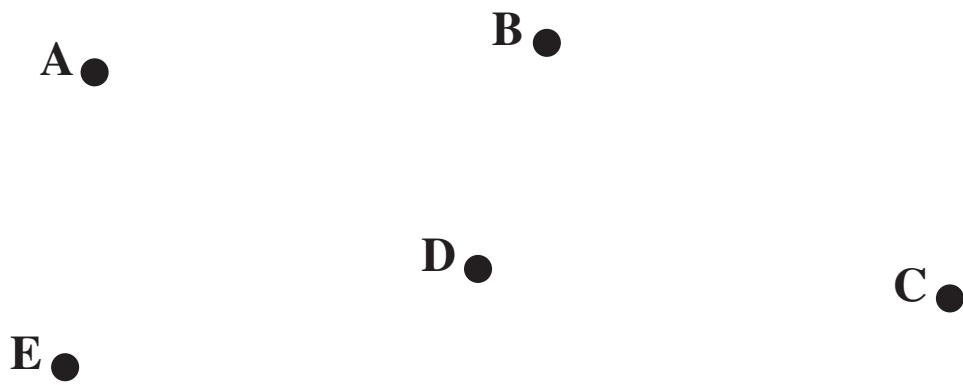
Probability of exiting at B: _____

Probability of exiting at C: _____

5 (i)



(ii)



Order of inclusion:

Total length:

(iii)

A ●

B ●

D ●

C ●

E ●

Total length:

Advice:

(iv)

6 (i)&(ii)

Minimum completion time:

Critical activities:



Copyright Information

OCR is committed to seeking permission to reproduce all third-party content that it uses in its assessment materials. OCR has attempted to identify and contact all copyright holders whose work is used in this paper. To avoid the issue of disclosure of answer-related information to candidates, all copyright acknowledgements are reproduced in the OCR Copyright Acknowledgements Booklet. This is produced for each series of examinations, is given to all schools that receive assessment material and is freely available to download from our public website (www.ocr.org.uk) after the live examination series.

If OCR has unwittingly failed to correctly acknowledge or clear any third-party content in this assessment material, OCR will be happy to correct its mistake at the earliest possible opportunity.

For queries or further information please contact the Copyright Team, First Floor, 9 Hills Road, Cambridge CB2 1PB.

OCR is part of the Cambridge Assessment Group; Cambridge Assessment is the brand name of University of Cambridge Local Examinations Syndicate (UCLES), which is itself a department of the University of Cambridge.