

# Solutionbank C1

## Edexcel Modular Mathematics for AS and A-Level

### Algebraic fractions

#### Exercise A, Question 1

#### Question:

The line  $L$  has equation  $y = 5 - 2x$ .

(a) Show that the point  $P(3, -1)$  lies on  $L$ .

(b) Find an equation of the line, perpendicular to  $L$ , which passes through  $P$ . Give your answer in the form  $ax + by + c = 0$ , where  $a$ ,  $b$  and  $c$  are integers.

#### Solution:

(a)

For  $x = 3$ ,

$$y = 5 - (2 \times 3) = 5 - 6 = -1$$

So  $(3, -1)$  lies on  $L$ .

Substitute  $x = 3$   
into the equation of  $L$ .  
Give a conclusion.

(b)

$$y = -2x + 5$$

Gradient of  $L$  is  $-2$ .

Perpendicular to  $L$ ,

gradient is  $\frac{1}{2}$  (

$$\frac{1}{2} \times -2 = -1)$$

Compare with  
 $y = mx + c$  to find  
the gradient  $m$   
For a perpendicular

line, the gradient

$$\text{is } -\frac{1}{m}$$

Use  $y - y_1 = m$

$$y - (-1) = \frac{1}{2}(x - 3)$$

$$(x - x_1)$$

$$y + 1 = \frac{1}{2}x - \frac{3}{2}$$

Multiply by 2

$$2y + 2 = x - 3$$

$$0 = x - 2y - 5$$

$$x - 2y - 5 = 0$$

$$(a = 1, b = -2, c = -5)$$

where  $a$ ,  $b$  and  $c$   
are integers.

This is the required  
form  $ax + by + c = 0$ ,

# Solutionbank C1

## Edexcel Modular Mathematics for AS and A-Level

### Algebraic fractions

#### Exercise A, Question 2

**Question:**

The points  $A$  and  $B$  have coordinates  $(-2, 1)$  and  $(5, 2)$  respectively.

(a) Find, in its simplest surd form, the length  $AB$ .

(b) Find an equation of the line through  $A$  and  $B$ , giving your answer in the form  $ax + by + c = 0$ , where  $a$ ,  $b$  and  $c$  are integers.

The line through  $A$  and  $B$  meets the  $y$ -axis at the point  $C$ .

(c) Find the coordinates of  $C$ .

**Solution:**

(a)

$A : (-2, 1)$ ,  $B$   
 $(5, 2)$

$AB$

The distance between

$$= \sqrt{(5 - (-2))^2 + (2 - 1)^2}$$

$$= \sqrt{(7^2 + 1^2)} = \sqrt{50}$$

two points is

$$\sqrt{(x_2 - x_1)^2 + (y_2 - y_1)^2}$$

$\sqrt{50}$   
 $AB$

(Pythagoras's  
Theorem )

$$= \sqrt{(25 \times 2)} = 5\sqrt{2}$$

$$= 5\sqrt{2}$$

Use  $\sqrt{(ab)} = \sqrt{a}\sqrt{b}$

(b)

$$m = \frac{2-1}{5-(-2)} = \frac{1}{7}$$

Find the gradient  
of the line, using

$$m = \frac{y_2 - y_1}{x_2 - x_1}$$

$$y - 1 = \frac{1}{7}(x - (-2))$$

$$(x - x_1)$$

Use  $y - y_1 = m$

$$y - 1 = \frac{1}{7}x + \frac{2}{7}$$

Multiply by 7

$$7y - 7 = x + 2$$

$$0 = x - 7y + 9$$

$$x - 7y + 9 = 0$$

This is the required  
form  $ax + by + c = 0$ ,

$(a = 1, b = -7, c = 9)$

where  $a$ ,  $b$  and  $c$   
are integers.

(c)

$x = 0$ :

Use  $x = 0$  to find

$$0 - 7y + 9 = 0$$

where the line meets

$$9 = 7y$$

the  $y$ -axis.

$$y = \frac{9}{7} \text{ or } y = 1\frac{2}{7}$$

$C$  is the point  $(0, 1\frac{2}{7})$

# Solutionbank C1

## Edexcel Modular Mathematics for AS and A-Level

### Algebraic fractions Exercise A, Question 3

**Question:**

The line  $l_1$  passes through the point  $(9, -4)$  and has gradient  $\frac{1}{3}$ .

(a) Find an equation for  $l_1$  in the form  $ax + by + c = 0$ , where  $a, b$  and  $c$  are integers.

The line  $l_2$  passes through the origin  $O$  and has gradient  $-2$ . The lines  $l_1$  and  $l_2$  intersect at the point  $P$ .

(b) Calculate the coordinates of  $P$ .

Given that  $l_1$  crosses the  $y$ -axis at the point  $C$ ,

(c) calculate the exact area of  $\triangle OCP$ .

**Solution:**

(a)

$$\begin{aligned}
 y - (-4) &= \frac{1}{3}(x - 9) && \text{Use } y - y_1 = m(x - x_1) \\
 y + 4 &= \frac{1}{3}(x - 9) \\
 y + 4 &= \frac{1}{3}x - 3 && \text{Multiply by 3} \\
 3y + 12 &= x - 9 \\
 0 &= x - 3y - 21 \\
 x - 3y - 21 &= 0 && \text{This is the required} \\
 (a = 1, b = -3, c = -21) &&& \text{form } ax + by + c = 0, \text{ where } a, b \text{ and } c \text{ are integers.}
 \end{aligned}$$

(b)

Equation of  $l_2 : y = -2x$

The equation of a straight line through the origin

is  $y = mx$ .

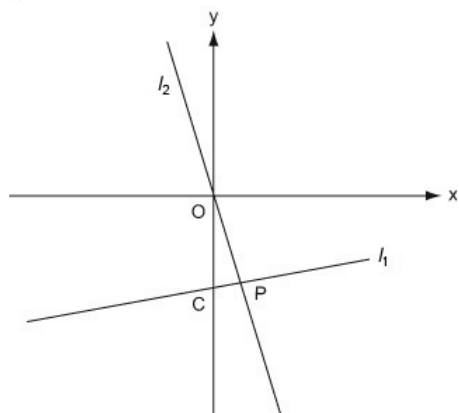
$$\begin{aligned}
 l_1 : x - 3y - 21 &= 0 \\
 x - 3(-2x) - 21 &= 0 \\
 x + 6x - 21 &= 0 \\
 7x &= 21 \\
 x &= 3 \\
 y = -2 \times 3 &= -6
 \end{aligned}$$

Substitute  $y = -2x$  into the equation of  $l_1$

Substitute back into  $y = -2x$

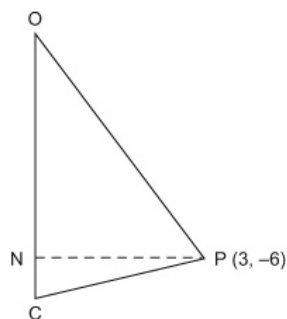
Coordinates of  $P :$   
 $(3, -6)$

(c)



Use a rough sketch to show the given information

Be careful not to make any wrong assumptions. Here, for example,  $\angle OPC$  is *not*  $90^\circ$



Use OC as the base and PN as the perpendicular height

Where  $l_1$  meets the  $y$ -axis,  $x = 0$ .

$$\begin{aligned} 0 - 3y - 21 &= 0 \\ 3y &= -21 \\ y &= -7 \end{aligned}$$

So OC = 7 and PN = 3

Put  $x = 0$  in the equation of  $l_1$

The distance of  $P$  from the  $y$ -axis is the same as its  $x$ -coordinate

$$\begin{aligned} \text{Area of } \triangle OCP &= \frac{1}{2} (\text{base} \times \text{height}) \\ &= \frac{1}{2} (7 \times 3) \\ &= 10 \frac{1}{2} \end{aligned}$$

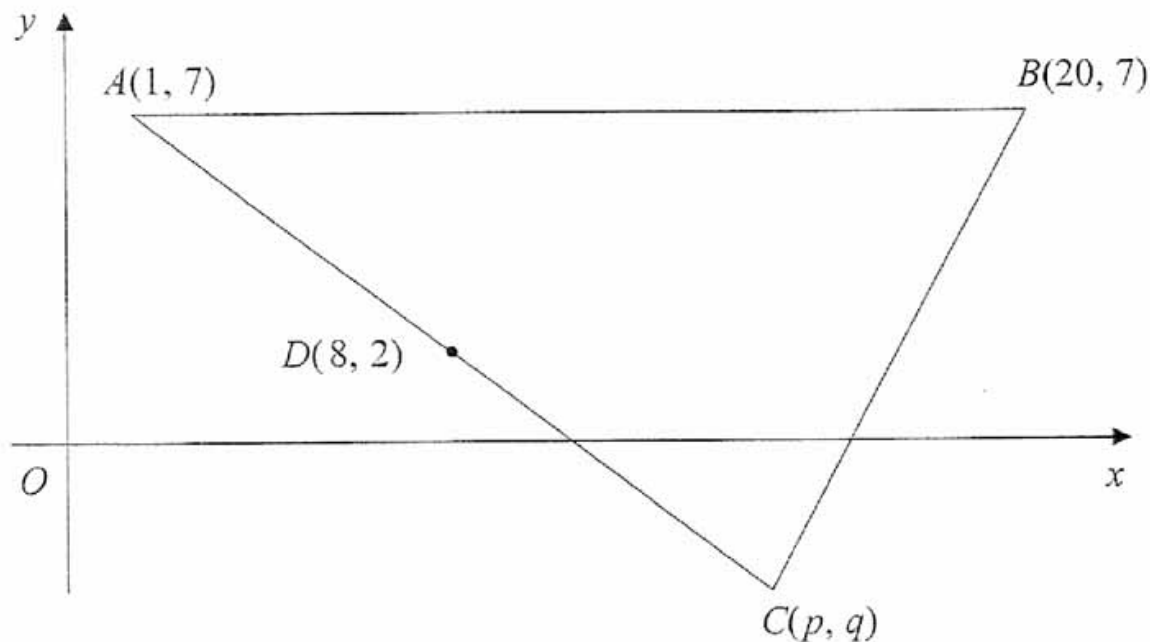
# Solutionbank C1

## Edexcel Modular Mathematics for AS and A-Level

### Algebraic fractions

#### Exercise A, Question 4

Question:



The points  $A(1, 7)$ ,  $B(20, 7)$  and  $C(p, q)$  form the vertices of a triangle  $ABC$ , as shown in the figure. The point  $D(8, 2)$  is the mid-point of  $AC$ .

(a) Find the value of  $p$  and the value of  $q$ .

The line  $l$ , which passes through  $D$  and is perpendicular to  $AC$ , intersects  $AB$  at  $E$ .

(b) Find an equation for  $l$ , in the form  $ax + by + c = 0$ , where  $a, b$  and  $c$  are integers.

(c) Find the exact  $x$ -coordinate of  $E$ .

**Solution:**

(a)

$$\left( \frac{1+p}{2}, \frac{7+q}{2} \right) = (8, 2) \qquad \left( \frac{x_1+x_2}{2}, \frac{y_1+y_2}{2} \right)$$

is the mid-point  
of the line from  
 $(x_1, y_1)$  to

$$(x_2, y_2)$$

$$\frac{1+p}{2} = 8 \qquad \text{Equate the } x\text{-coordinates}$$

$$1+p = 16$$

$$p = 15$$

$$\frac{7+q}{2} = 2 \qquad \text{Equate the } y\text{-coordinates}$$

$$7+q = 4$$

$$q = -3$$

(b)

Gradient of AC :

$$m = \frac{2-7}{8-1} = \frac{-5}{7}$$

Use the points A

and D, with

$$m = \frac{y_2 - y_1}{x_2 - x_1},$$

to find the gradient of AC ( or

AD ) .

For a perpendicular

Gradient of  $l$  is

$$-\frac{1}{\left(\frac{-5}{7}\right)} = \frac{7}{5}$$

gradient

line, the

$$\text{is } -\frac{1}{m}$$

The

$$y - 2 = \frac{7}{5}(x - 8)$$

line  $l$  passes

through  $D(8, 2)$

. So

use this point in

$$y - y_1 = m$$

$$(x - x_1)$$

$$\begin{aligned} y - 2 &= \frac{7x}{5} - \frac{56}{5} \\ 5y - 10 &= 7x - 56 \\ 0 &= 7x - 5y - 46 \\ 7x - 5y - 46 &= 0 \end{aligned}$$

by 5

Multiply

$$(a = 7, b = -5, c = -46)$$

required form

$$ax + by + c = 0,$$

where  $a, b$  and  $c$

are integers.

in the

This is

(c)

The equation of AB

is  $y = 7$

At E :

Substitute  $y = 7$  into

$$7x - (5 \times 7) - 46 = 0$$

of  $l$  to

the equation

$$7x - 35 - 46 = 0$$

E.

find the point

$$7x = 81$$

$$x = 11 \frac{4}{7}$$

# Solutionbank C1

## Edexcel Modular Mathematics for AS and A-Level

### Algebraic fractions

#### Exercise A, Question 5

#### Question:

The straight line  $l_1$  has equation  $y = 3x - 6$ .

The straight line  $l_2$  is perpendicular to  $l_1$  and passes through the point  $(6, 2)$ .

(a) Find an equation for  $l_2$  in the form  $y = mx + c$ , where  $m$  and  $c$  are constants.

The lines  $l_1$  and  $l_2$  intersect at the point  $C$ .

(b) Use algebra to find the coordinates of  $C$ .

The lines  $l_1$  and  $l_2$  cross the  $x$ -axis at the point  $A$  and  $B$  respectively.

(c) Calculate the exact area of triangle  $ABC$ .

#### Solution:

(a)

The gradient  
of  $l_1$  is 3.

with  $y = mx + c$ .

Compare

So the gradient

of  $l_2$  is  $-\frac{1}{3}$

For a perpendicular

line, the gradient

is  $-\frac{1}{m}$

Eqn. of  $l_2$  :

$$y - 2 = -\frac{1}{3}(x - 6)$$

$(x - x_1)$

Use  $y - y_1 = m$

$$y - 2 = -\frac{1}{3}x + 2$$

$$y = -\frac{1}{3}x + 4$$

This is the required

form  $y = mx + c$ .

(b)

$$y = 3x - 6$$

equations

Solve these

$$y = -\frac{1}{3}x + 4$$

simultaneously

$$3x - 6 = -\frac{1}{3}x + 4$$

$$3x + \frac{1}{3}x = 4 + 6$$

$$\frac{10}{3}x = 10$$

by 3 and

Multiply

$$x = 3$$

divide by 10

$y =$

$$(3 \times 3) - 6 = 3$$

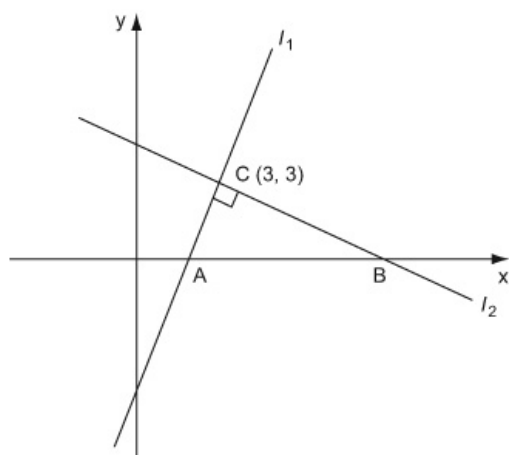
Substitute back

The point

$C$  is  $(3, 3)$

into  $y = 3x - 6$

(c)



Use a rough sketch to show the given information.

Where  $l_1$  meets the  $x$ -axis,  $y = 0$  :

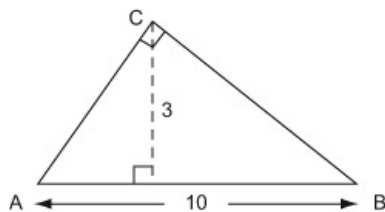
$$\begin{aligned} 0 &= 3x - 6 \\ 3x &= 6 \\ x &= 2 \end{aligned}$$

A is the point  $(2, 0)$

Where  $l_2$  meets the  $x$ -axis,  $y = 0$  :

$$\begin{aligned} 0 &= -\frac{1}{3}x + 4 \\ \frac{1}{3}x &= 4 \\ x &= 12 \end{aligned}$$

B is the point  $(12, 0)$



$$AB = 10 \quad (12 - 2)$$

The perpendicular height, using AB as the base, is 3

$$\begin{aligned} \text{Area of } \triangle ABC &= \frac{1}{2} (\text{base} \times \text{height}) \\ &= \frac{1}{2} (10 \times 3) \\ &= 15 \end{aligned}$$

Put  $y = 0$  to find

where the lines meet the  $x$ -axis

Although  $\angle C$  is a right-angle, it is easier to use AB as the base.

The distance of C from the  $x$ -axis is the same as its  $y$ -coordinate.



# Solutionbank C1

## Edexcel Modular Mathematics for AS and A-Level

### Algebraic fractions

#### Exercise A, Question 6

#### Question:

The line  $l_1$  has equation  $6x - 4y - 5 = 0$ .

The line  $l_2$  has equation  $x + 2y - 3 = 0$ .

(a) Find the coordinates of  $P$ , the point of intersection of  $l_1$  and  $l_2$ .

The line  $l_1$  crosses the  $y$ -axis at the point  $M$  and the line  $l_2$  crosses the  $y$ -axis at the point  $N$ .

(b) Find the area of  $\triangle MNP$ .

#### Solution:

(a)

$$6x - 4y - 5 = 0 \quad (\text{i})$$

$$x + 2y - 3 = 0 \quad (\text{ii})$$

$$x = 3 - 2y \quad \text{equation (ii)}$$

$$6(3 - 2y) - 4y - 5 = 0$$

$$18 - 12y - 4y - 5 = 0$$

$$18 - 5 = 12y + 4y$$

$$16y = 13$$

$$y = \frac{13}{16}$$

$$x = 3 - 2\left(\frac{13}{16}\right) = 3 - \frac{26}{16}$$

$$x = 1\frac{3}{8}$$

$P$  is the point  $\left(1\frac{3}{8}, \frac{13}{16}\right)$

$$\frac{13}{16}$$

(b)

Solve the equations

simultaneously

Find  $x$  in terms of  $y$  from

Substitute into equation (i)

Substitute back into  $x = 3 - 2y$

Where  $l_1$  meets the  $y$ -axis,  $x = 0$

$$0 - 4y - 5$$

$$4y$$

$$y$$

where the

$$= 0$$

$$= -5$$

$$= -\frac{5}{4}$$

Put  $x = 0$  to find

lines meet the  $y$ -

axis .

$M$  is the point  $(0, -\frac{5}{4})$

Where  $l_2$  meets the  $y$ -axis,  $x = 0$  :

$$0 + 2y - 3$$

$$2y$$

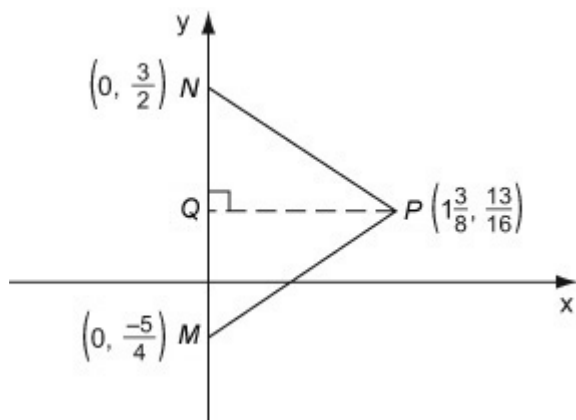
$$y$$

$$= 0$$

$$= 3$$

$$= \frac{3}{2}$$

$N$  is the point  $(0, \frac{3}{2})$



Use a rough sketch to show the information

Use  $MN$  as the base and  $PQ$  as the perpendicular height.

$$MN = \frac{3}{2} + \frac{5}{4} = \frac{11}{4}$$

the same as its

The distance of  $P$  from the  $y$ -axis is

$x$ -coordinate

$$PQ = 1 \frac{3}{8} = \frac{11}{8}$$

$$\begin{aligned} \text{Area of } \triangle MNP &= \frac{1}{2} \\ &= \frac{1}{2} (\text{base} \times \text{height}) \\ &= \frac{1}{2} \left( \frac{11}{4} \times \frac{11}{8} \right) \\ &= \frac{121}{64} \\ &= 1 \frac{57}{64} \end{aligned}$$

# Solutionbank C1

## Edexcel Modular Mathematics for AS and A-Level

### Algebraic fractions

#### Exercise A, Question 7

#### Question:

The 5th term of an arithmetic series is 4 and the 15th term of the series is 39.

- (a) Find the common difference of the series.
- (b) Find the first term of the series.
- (c) Find the sum of the first 15 terms of the series.

#### Solution:

(a)

$$n^{\text{th}} \text{ term} = a + (n - 1)d$$

$$n = 5 : \quad a + 4d = 4 \quad (\text{i})$$

$$n = 15 : \quad a + 14d = 39 \quad (\text{ii}) \quad \text{formula.}$$

Substitute the given values into the  $n^{\text{th}}$  term

Subtract (ii)-(i)

$$10d = 35$$

Solve simultaneously.

$$d = 3 \frac{1}{2}$$

Common difference is  $3 \frac{1}{2}$

$$\frac{1}{2}$$

(b)

$$a + (4 \times 3 \frac{1}{2}) = 4$$

Substitute back into equation (i).

$$a + 14 = 4$$

$$a = -10$$

First term is  $-10$

(c)

$$S_n = \frac{1}{2}n(2a + (n-1)d)$$

$$n = 15, a = -10, d = 3\frac{1}{2}$$

Substitute the values

into the sum formula.

$$\begin{aligned} S_{15} &= \frac{1}{2} \times 15 ( -20 + \\ & ( 14 \times 3\frac{1}{2} ) ) \\ &= \frac{15}{2} ( -20 + 49 ) \\ &= \frac{15}{2} \times 29 \\ &= 217\frac{1}{2} \end{aligned}$$

# Solutionbank C1

## Edexcel Modular Mathematics for AS and A-Level

### Algebraic fractions

#### Exercise A, Question 8

#### Question:

An athlete prepares for a race by completing a practice run on each of 11 consecutive days. On each day after the first day, he runs farther than he ran on the previous day. The lengths of his 11 practice runs form an arithmetic sequence with first term  $a$  km and common difference  $d$  km.

He runs 9 km on the 11<sup>th</sup> day, and he runs a total of 77 km over the 11 day period.

Find the value of  $a$  and the value of  $d$ .

#### Solution:

$n^{\text{th}}$  term =  $a + (n - 1)d$  distance run on the 11th day is the 11th term of the arithmetic sequence.

$S_n = \frac{1}{2}n(2a + (n - 1)d)$  total distance run is the sum of the arithmetic series.

$$\frac{1}{2} \times 11(2a + 10d) = 77$$

$$\frac{1}{2}(2a + 10d) = 7$$

$$a + 5d = 7$$

$$a + 10d = 9 \quad (\text{i})$$

$$a + 5d = 7 \quad (\text{ii})$$

Subtract (i)-(ii):

$$5d = 2$$

$$d = \frac{2}{5}$$

$$a + (10 \times \frac{2}{5}) = 9$$

$$a + 4 = 9$$

$$a = 5$$

The

11th

The

of

simpler to divide each

the equation by 11.

simultaneously

back

equation (i).

It is

side of

Solve

Substitute

into

# Solutionbank C1

## Edexcel Modular Mathematics for AS and A-Level

### Algebraic fractions

#### Exercise A, Question 9

#### Question:

The  $r$ th term of an arithmetic series is  $(2r - 5)$ .

- (a) Write down the first three terms of this series.
- (b) State the value of the common difference.

(c) Show that  $\sum_{r=1}^n (2r - 5) = n(n - 4)$ .

#### Solution:

(a)

$$\begin{aligned} r = 1 : \quad 2r - 5 &= -3 \\ r = 2 : \quad 2r - 5 &= -1 \\ r = 3 : \quad 2r - 5 &= 1 \end{aligned}$$

First three terms are  $-3, -1, 1$

(b)

Common difference  $d = 2$

The terms increase  
by 2 each time  
(  $U_{k+1} = U_k + 2$  )

(c)

$$\sum_{r=1}^n (2r - 5) = S_n$$

$(2r - 5)$  is just

$$S_n = \frac{1}{2}n(2a + (n - 1)d)$$

$a = -3, d = 2$  to  $n$  terms

$$\begin{aligned} S_n &= \frac{1}{2}n(-6 + 2(n - 1)) \\ &= \frac{1}{2}n(-6 + 2n - 2) \\ &= \frac{1}{2}n(2n - 8) \\ &= \frac{1}{2}n2(n - 4) \\ &= n(n - 4) \end{aligned}$$

$$\sum_{r=1}^n$$

series

sum of the

the

# Solutionbank C1

## Edexcel Modular Mathematics for AS and A-Level

### Algebraic fractions

#### Exercise A, Question 10

#### Question:

Ahmed plans to save £250 in the year 2001, £300 in 2002, £350 in 2003, and so on until the year 2020. His planned savings form an arithmetic sequence with common difference £50.

- (a) Find the amount he plans to save in the year 2011.
- (b) Calculate his total planned savings over the 20 year period from 2001 to 2020.

Ben also plans to save money over the same 20 year period. He saves £ $A$  in the year 2001 and his planned yearly savings form an arithmetic sequence with common difference £60.

Given that Ben's total planned savings over the 20 year period are equal to Ahmed's total planned savings over the same period,

- (c) calculate the value of  $A$ .

#### Solution:

(a)

$$a = 250 \quad \text{(Year 2001)}$$

$$d = 50$$

arithmetic series

Write down the values  
of  $a$  and  $d$  for the

Taking 2001 as Year 1  
( $n = 1$ ),

2011 is Year 11  
( $n = 11$ ).

Year 11 savings:

$$\begin{aligned} a + (n - 1)d &= 250 + (11 - 1)50 && \text{Use the term} \\ &= 250 + (10 \times 50) && \text{formula } a + (n - 1)d \\ &= 750 \end{aligned}$$

Year 11 savings : £ 750

(b)

$$S_n = \frac{1}{2}n(2a + (n-1)d)$$

Using  $n = 20$ ,

$$\begin{aligned} S_{20} &= \frac{1}{2} \times 20 (500 + \\ & (19 \times 50) ) \\ &= 10 (500 + 950) \\ &= 10 \times 1450 \\ &= 14500 \end{aligned}$$

series.

The total savings  
will be the sum of  
the arithmetic

Total savings : £ 14  
500

(c)

$$a = A \quad (\text{Year 2001})$$

$$d = 60$$

$$S_{20} = \frac{1}{2} \times 20 (2A + (19 \times 60) )$$

$$\begin{aligned} S_{20} &= 10 (2A + 1140) \\ &= 20A + 11400 \end{aligned}$$

$$20A + 11400 = 14500$$

$$20A = 14500 - 11400$$

$$20A = 3100$$

$$A = 155$$

Write down the values  
of  $a$  and  $d$  for Ben's series.

Use the sum formula.

Equate Ahmed's  
and Ben's total savings.



# Solutionbank C1

## Edexcel Modular Mathematics for AS and A-Level

### Algebraic fractions

#### Exercise A, Question 11

#### Question:

A sequence  $a_1, a_2, a_3, \dots$  is defined by

$$a_1 = 3,$$

$$a_{n+1} = 3a_n - 5, \quad n \geq 1.$$

(a) Find the value of  $a_2$  and the value of  $a_3$ .

(b) Calculate the value of  $\sum_{r=1}^5 a_r$ .

#### Solution:

(a)

$$a_{n+1} = 3a_n - 5$$

$$n = 1 : a_2 = 3a_1 - 5$$

$$a_1 = 3, \text{ so } a_2 = 9 - 5$$

$$a_2 = 4$$

$$n = 2 : a_3 = 3a_2 - 5$$

$$a_2 = 4, \text{ so } a_3 = 12 - 5$$

$$a_3 = 7$$

Use the given  
formula, with  
 $n = 1$  and  $n = 2$

(b)

$$\sum_{a=1}^5 a_r = a_1 + a_2 + a_3 + a_4 + a_5$$

$$n = 3 : a_4 = 3a_3 - 5$$

$$a_3 = 7, \text{ so } a_4 = 21 - 5$$

$$a_4 = 16$$

$$n = 4 : a_5 = 3a_4 - 5$$

$$a_4 = 16, \text{ so } a_5 = 48 - 5$$

$$a_5 = 43$$

$$\sum_{a=1}^5 a_r = 3 + 4 + 7 + 16 + 43$$

$$= 73$$

This is not an arithmetic series.

The first three terms are 3, 4, 7.

The differences between

the terms are not the same.

You cannot use a standard formula, so work out each separate term and

then add them together to find

the required sum.

# Solutionbank C1

## Edexcel Modular Mathematics for AS and A-Level

### Algebraic fractions

#### Exercise A, Question 12

#### Question:

A sequence  $a_1, a_2, a_3, \dots$  is defined by

$$\begin{aligned} a_1 &= k, \\ a_{n+1} &= 3a_n + 5, \quad n \geq 1, \end{aligned}$$

where  $k$  is a positive integer.

(a) Write down an expression for  $a_2$  in terms of  $k$ .

(b) Show that  $a_3 = 9k + 20$ .

(c) (i) Find  $\sum_{r=1}^4 a_r$  in terms of  $k$ .

(ii) Show that  $\sum_{r=1}^4 a_r$  is divisible by 10.

#### Solution:

(a)

$$a_{n+1} = 3a_n + 5$$

$$n = 1 : a_2 = 3a_1 + 5$$

$$a_2 = 3k + 5$$

Use the given

formula with  $n = 1$

(b)

$$n = 2 : a_3 = 3a_2 + 5$$

$$= 3(3k + 5) + 5$$

$$= 9k + 15 + 5$$

$$a_3 = 9k + 20$$

(c)(i)

$$\sum_{r=1}^4 a_r = a_1 + a_2 + a_3 + a_4$$

$$n = 3 : a_4 = 3a_3 + 5$$

$$= 3(9k + 20) + 5$$

$$= 27k + 65$$

$$\sum_{r=1}^4 a_r = k + (3k + 5) + (9k + 20) + (27k + 65)$$

$$= 40k + 90$$

(ii)

4

$$\sum_{r=1}^4 a_r = 10(4k + 9)$$

There is a factor 10, so the sum is divisible by 10.

This is *not* an arithmetic series.

You cannot use a standard formula, so

work out each separate term and then add them together

to find the required sum.

Give a conclusion.

# Solutionbank C1

## Edexcel Modular Mathematics for AS and A-Level

### Algebraic fractions

#### Exercise A, Question 13

#### Question:

A sequence  $a_1, a_2, a_3, \dots$  is defined by

$$\begin{aligned} a_1 &= k \\ a_{n+1} &= 2a_n - 3, \quad n \geq 1 \end{aligned}$$

(a) Show that  $a_5 = 16k - 45$

Given that  $a_5 = 19$ , find the value of

(b)  $k$

(c)  $\sum_{r=1}^6 a_r$

#### Solution:

(a)

$$a_{n+1} = 2a_n - 3$$

$$n = 1 : a_2 = 2a_1 - 3$$

$$= 2k - 3$$

$$n = 2 : a_3 = 2a_2 - 3$$

$$= 2(2k - 3) - 3$$

$$= 4k - 6 - 3$$

$$= 4k - 9$$

$$n = 3 : a_4 = 2a_3 - 3$$

$$= 2(4k - 9) - 3$$

$$= 8k - 18 - 3$$

$$= 8k - 21$$

$$n = 4 : a_5 = 2a_4 - 3$$

$$= 2(8k - 21) - 3$$

$$= 16k - 42 - 3$$

$$a_5 = 16k - 45$$

Use the given formula

with  $n = 1, 2, 3$  and 4.

(b)

$$a_5 = 19,$$

$$\text{so } 16k - 45 = 19$$

$$16k = 19 + 45$$

$$16k = 64$$

$$k = 4$$

(c)

6

$$\sum_{r=1} a_r = a_1 + a_2 + a_3 + a_4 + a_5 + a_6$$

This  
is *not* an arithmetic series.

$$a_1 = k = 4$$

$$a_2 = 2k - 3 = 5$$

$$a_3 = 4k - 9 = 7$$

$$a_4 = 8k - 21 = 11$$

$$a_5 = 16k - 45 = 19$$

From the original formula,

$$a_6 = 2a_5 - 3 = (2 \times 19) - 3 = 35$$

6

$$\sum_{r=1} a_r = 4 + 5 + 7 + 11 + 19 + 35$$

$$= 81$$

You  
cannot use a standard  
formula,  
so work  
out each separate term and  
then add  
them together  
to find  
the required sum.

# Solutionbank C1

## Edexcel Modular Mathematics for AS and A-Level

### Algebraic fractions

#### Exercise A, Question 14

#### Question:

An arithmetic sequence has first term  $a$  and common difference  $d$ .

(a) Prove that the sum of the first  $n$  terms of the series is

$$\frac{1}{2}n \left[ 2a + (n-1)d \right]$$

Sean repays a loan over a period of  $n$  months. His monthly repayments form an arithmetic sequence.

He repays £149 in the first month, £147 in the second month, £145 in the third month, and so on. He makes his final repayment in the  $n$ th month, where  $n > 21$ .

(b) Find the amount Sean repays in the 21st month.

Over the  $n$  months, he repays a total of £5000.

(c) Form an equation in  $n$ , and show that your equation may be written as

$$n^2 - 150n + 5000 = 0$$

(d) Solve the equation in part (c).

(e) State, with a reason, which of the solutions to the equation in part (c) is not a sensible solution to the repayment problem.

#### Solution:

(a)

$$S_n = a + (a+d) + (a+2d) + \dots + (a + (n-1)d)$$

You need to know this proof. Make

Reversing the sum :

sure that you understand it, and do

$$S_n = (a + (n-1)d) + \dots + (a+2d) + (a+d) + a$$

not miss out any of the steps.

Adding these two :

When you add, each pair of terms

$$2S_n = (2a + (n-1)d) + \dots + (2a + (n-1)d)$$

$$2S_n = n(2a + (n-1)d)$$

adds up to  $2a + (n-1)d$ ,  
and there are  $n$  pairs of terms.

$$S_n = \frac{1}{2}n(2a + (n-1)d)$$

(b)

$$a = 149 \quad (\text{First month})$$

$$d = -2$$

Write down the values of  $a$  and  $d$  for the arithmetic

series.

21st month:

$$\begin{aligned} a + (n - 1)d &= 149 + (20 \times -2) \\ &= 149 - 40 \\ &= 109 \end{aligned}$$

Use the term formula

$$a + (n - 1)d$$

He repays £ 109 in the 21st month

(c)

$$S_n = \frac{1}{2}n(2a + (n - 1)d) \quad \text{sum of}$$

The total he repays will be the arithmetic series.

$$\begin{aligned} &= \frac{1}{2}n(298 - 2(n - 1)) \\ &= \frac{1}{2}n(298 - 2n + 2) \end{aligned}$$

$$= \frac{1}{2}n(300 - 2n)$$

$$= \frac{1}{2}n(300 - 2n)$$

$$= \frac{1}{2}n(150 - n)$$

$$= n(150 - n)$$

$$n(150 - n) = 5000$$

Equate  $S_n$  to 5000

$$150n - n^2 = 5000$$

$$n^2 - 150n + 5000 = 0$$

(d)

$$\begin{aligned} (n - 50) \\ (n - 100) \end{aligned} = 0$$

try to factorise the quadratic.

Always

$n = 50$  or  $n = 100$  quadratic formula would be

The

awkward

here with such large numbers.

(e)



$n = 100$  is not sensible .

For example, his repayment  
in month 100 (  $n = 100$  )

would be  $a + ( n - 1 ) d$

Check back in the  
context of

$$= 149 + ( 99 \times - 2 )$$

$$= 149 - 198$$

$$= - 49$$

the

the problem to see if

solution is sensible.

A negative repayment is not  
sensible .

# Solutionbank C1

## Edexcel Modular Mathematics for AS and A-Level

### Algebraic fractions

#### Exercise A, Question 15

#### Question:

A sequence is given by

$$a_1 = 2$$

$$a_{n+1} = a_n^2 - ka_n, \quad n \geq 1,$$

where  $k$  is a constant.

(a) Show that  $a_3 = 6k^2 - 20k + 16$

Given that  $a_3 = 2$ ,

(b) find the possible values of  $k$ .

For the larger of the possible values of  $k$ , find the value of

(c)  $a_2$

(d)  $a_5$

(e)  $a_{100}$

#### Solution:

(a)

$$a_{n+1} = a_n^2 - ka_n$$

$$n = 1 : a_2 = a_1^2 - ka_1$$

$$= 4 - 2k$$

$$n = 2 : a_3 = a_2^2 - ka_2$$

$$= (4 - 2k)^2 - k(4 - 2k)$$

$$= 16 - 16k + 4k^2 - 4k + 2k^2$$

$$a_3 = 6k^2 - 20k + 16$$

Use the given formula  
with  $n = 1$  and 2.

(b)

$$a_3 = 2 :$$

$$6k^2 - 20k + 16 = 2$$

$$6k^2 - 20k + 14 = 0$$

$$3k^2 - 10k + 7 = 0$$

$$(3k - 7) = 0$$

$$(k - 1) = 0$$

$$k =$$

$$\frac{7}{3} \text{ or } k = 1 \quad \text{using the quadratic formula.}$$

by 2 to make solution easier

Divide

factorise the quadratic rather

Try to

than

(c)

The larger  $k$  value is  $\frac{7}{3}$ 

$$a_2 = 4 - 2k = 4 - \left(2 \times \frac{7}{3}\right)$$

$$= 4 - \frac{14}{3} = -\frac{2}{3}$$

(d)

$$a_{n+1} = a_n^2 - \frac{7}{3}a_n$$

$$n = 3 : a_4 = a_3^2 - \frac{7}{3}a_3$$

But  $a_3 = 2$  is given, so

$$a_4 = 2^2 - \left(\frac{7}{3} \times 2\right)$$

$$= 4 - \frac{14}{3} = \frac{-2}{3}$$

$$n = 4 : a_5 = a_4^2 - \frac{7}{3}a_4$$

$$= \left(\frac{-2}{3}\right)^2 - \left(\frac{7}{3} \times \frac{-2}{3}\right)$$

$$= \frac{4}{9} + \frac{14}{9} = \frac{18}{9}$$

$$a_5 = 2$$

(e)

$$a_2 = \frac{-2}{3}, a_3 = 2$$

$$a_4 = \frac{-2}{3}, a_5 = 2$$

For even values

$$\text{of } n, a_n = \frac{-2}{3}.$$

$$\text{So } a_{100} = \frac{-2}{3}.$$

Use the formula

with  $k = \frac{7}{3}$ , for  $n = 3$  and 4.

sequence is

the values “oscillating” between

$$\frac{-2}{3} \text{ and}$$

If  $n$  is even,  $a_n =$ If  $n$  is odd,  $a_n = 2$ .

# Solutionbank C1

## Edexcel Modular Mathematics for AS and A-Level

### Algebraic fractions

#### Exercise A, Question 16

#### Question:

Given that

$$y = 4x^3 - 1 + 2x^{\frac{1}{2}}, \quad x > 0,$$

find  $\frac{dy}{dx}$ .

#### Solution:

$$y = 4x^3 - 1 + 2x^{\frac{1}{2}} \qquad \frac{dy}{dx} = nx^{n-1}$$

For  $y = x^n$ ,

$$\frac{dy}{dx} = (4 \times 3x^2) + (2 \times \frac{1}{2}x^{-\frac{1}{2}})$$

Differentiating

the constant

$-1$  gives

zero.

It is better to

$$\frac{dy}{dx} = 12x^2 + x^{-\frac{1}{2}}$$

write down an

unsimplified

version of the answer first

(in case you

make a mistake

when

simplifying).

(  
Or:

$$\frac{dy}{dx} = 12x^2 +$$

$$\frac{1}{x^{\frac{1}{2}}}$$

is not necessary to change your

It

Or:

$$\frac{dy}{dx} = 12x^2 +$$

$$\frac{1}{\sqrt{x}}$$

answer into

one of these forms.

# Solutionbank C1

## Edexcel Modular Mathematics for AS and A-Level

### Algebraic fractions

#### Exercise A, Question 17

#### Question:

Given that  $y = 2x^2 - \frac{6}{x^3}$ ,  $x \neq 0$ ,

(a) find  $\frac{dy}{dx}$ ,

(b) find  $\int y \, dx$ .

#### Solution:

(a)

$$y = 2x^2 - \frac{6}{x^3}$$

$$= 2x^2 - 6x^{-3}$$

$$\frac{dy}{dx} = (2 \times 2x^1) - (6 \times -3x^{-4})$$

$$\frac{dy}{dx} = 4x + 18x^{-4}$$

( Or:

$$\frac{dy}{dx} = 4x + \frac{18}{x^4}$$

is not necessary to change

It

into this form.

Use

For  $y = x^n$ ,

Write down

of the answer

first.

your answer

(b)

$$\int (2x^2 - 6x^{-3}) dx$$
$$= \frac{2x^3}{3} - \frac{6x^{-2}}{-2} + C \quad \text{constant}$$

$$= \frac{2x^3}{3} + 3x^{-2} + C \quad \text{version}$$

$$\left( \text{Or: } \frac{2x^3}{3} + \frac{3}{x^2} + C \right)$$

$$\text{Use } \int x^n dx = \frac{x^{n+1}}{n+1} + C$$

Do not forget to include the

of integration, C.

Write down an unsimplified

of the answer first

It is not necessary to change

your answer into this form.

# Solutionbank C1

## Edexcel Modular Mathematics for AS and A-Level

### Algebraic fractions

#### Exercise A, Question 18

**Question:**

Given that  $y = 3x^2 + 4\sqrt{x}$ ,  $x > 0$ , find

(a)  $\frac{dy}{dx}$ ,

(b)  $\frac{d^2y}{dx^2}$ ,

(c)  $\int y \, dx$ .

**Solution:**

(a)

$y = 3x^2 + 4\sqrt{x}$  Use  $\sqrt{x} = x^{\frac{1}{2}}$

$= 3x^2 + 4x^{\frac{1}{2}}$

$= (3 \times 2x^1) + (4 \times \frac{1}{2}x^{-\frac{1}{2}})$

$\frac{dy}{dx} = nx^{n-1}$

For  $y = x^n$ ,

$\frac{dy}{dx}$

$\frac{dy}{dx}$

$= 6x + 2x^{-\frac{1}{2}}$

an  
version  
first.

Write down  
unsimplified  
of the answer

(

$\frac{dy}{dx} = 6x +$

Or:

$\frac{2}{x^{\frac{1}{2}}}$

It

is not necessary to change

Or:

$\frac{dy}{dx} = 6x + \frac{2}{\sqrt{x}}$

your answer

into one of these forms

(b)

$$\frac{dy}{dx} = 6x + 2x^{-\frac{1}{2}}$$

again

Differentiate

$$\frac{d^2y}{dx^2} = 6 + \left( 2 \times \frac{-1}{2} x^{-\frac{3}{2}} \right)$$

$$= 6 - x^{-\frac{3}{2}}$$

(

Or:

$$\frac{d^2y}{dx^2} = 6 -$$

$$\frac{1}{x^{\frac{3}{2}}}$$

$$\frac{3}{2}$$

is not necessary to change your

It

Or:

$$\frac{d^2y}{dx^2} = 6 -$$

$$\frac{1}{x\sqrt{x}}$$

answer

into one of these forms.

x

$$\frac{3}{2} = x^1 \times x^{\frac{1}{2}} = x\sqrt{x}$$

(c)

$$\int \left( 3x^2 + 4x^{\frac{1}{2}} \right) dx$$

$$= \frac{3x^3}{3} + \frac{4x^{\frac{3}{2}}}{\left( \frac{3}{2} \right)} + C$$

$$= x^3 + 4 \left( \frac{2}{3} \right) x^{\frac{3}{2}} + C$$

$$= x^3 + \frac{8}{3} x^{\frac{3}{2}} + C$$

$$\left( \text{Or: } x^3 + \frac{8}{3} x\sqrt{x} + C \right)$$

$$\text{Use } \int x^n dx = \frac{x^{n+1}}{n+1} + C \text{ Do}$$

not forget to include the constant

of integration, C

Write down an unsimplified version

of the answer first.

It is not necessary to change your answer into this form.



# Solutionbank C1

## Edexcel Modular Mathematics for AS and A-Level

### Algebraic fractions

#### Exercise A, Question 19

#### Question:

(i) Given that  $y = 5x^3 + 7x + 3$ , find

(a)  $\frac{dy}{dx}$ ,

(b)  $\frac{d^2y}{dx^2}$ .

(ii) Find  $\int \left( 1 + 3\sqrt{x} - \frac{1}{x^2} \right) dx$ .

#### Solution:

(i)

$$y = 5x^3 + 7x + 3$$

(a)

$$\frac{dy}{dx} = (5 \times 3x^2) + (7 \times 1x^0)$$

$$\frac{dy}{dx} = nx^{n-1}.$$

For  $y = x^n$ ,

Differentiating the constant

3 gives zero.

$$\frac{dy}{dx} = 15x^2 + 7$$

Use  $x^0 = 1$

Differentiating  $Kx$  gives  $K$ .

(b)

$$\frac{dy}{dx} = 15x^2 + 7$$

Differentiate again

$$\begin{aligned} \frac{d^2y}{dx^2} &= (15 \times 2x^1) \\ &= 30x \end{aligned}$$

(ii)

$$\int \left( 1 + 3\sqrt{x} - \frac{1}{x^2} \right) dx$$

$$= \int \left( 1 + 3x^{\frac{1}{2}} - x^{-2} \right) dx$$

include the  
integration C.

$$= x + \frac{3x^{\frac{3}{2}}}{\left(\frac{3}{2}\right)} - \frac{x^{-1}}{(-1)} + C$$

$$= x + \left( 3 \times \frac{2}{3} x^{\frac{3}{2}} \right) + x^{-1} + C$$

$$= x + 2x^{\frac{3}{2}} + x^{-1} + C$$

$$\left( \text{Or: } x + 2x\sqrt{x} + \frac{1}{x} + C \right)$$

$$\frac{1}{x^n} = x^{-n}$$

$$\frac{x^{n+1}}{n+1} + C.$$

Do not forget to  
constant of

Use  $\sqrt{x} = x^{\frac{1}{2}}$  and

Use  $\int x^n dx =$

change  
form.

It is not necessary to  
your answer into this

# Solutionbank C1

## Edexcel Modular Mathematics for AS and A-Level

### Algebraic fractions

#### Exercise A, Question 20

#### Question:

The curve  $C$  has equation  $y = 4x + 3x^{\frac{3}{2}} - 2x^2$ ,  $x > 0$ .

(a) Find an expression for  $\frac{dy}{dx}$ .

(b) Show that the point  $P(4, 8)$  lies on  $C$ .

(c) Show that an equation of the normal to  $C$  at the point  $P$  is  $3y = x + 20$ .

The normal to  $C$  at  $P$  cuts the  $x$ -axis at the point  $Q$ .

(d) Find the length  $PQ$ , giving your answer in a simplified surd form.

#### Solution:

(a)

$$y = 4x + 3x^{\frac{3}{2}} - 2x^2$$

$$\frac{3}{2} - 2x^2$$

$$\frac{dy}{dx} = (4 \times 1x^0) + (3 \times \frac{3}{2}x^{\frac{1}{2}}) - (2 \times 2x^1) \quad \text{For } y = x^n, \quad \frac{dy}{dx} = nx^{n-1}$$

$$\frac{dy}{dx} = 4 + \frac{9}{2}x^{\frac{1}{2}} - 4x$$

(b)

For  $x = 4$ ,

$$y = (4 \times 4) + (3 \times 4^{\frac{3}{2}}) - (2 \times 4^2) \quad x^{\frac{3}{2}} = x^1 \times x^{\frac{1}{2}} = x \sqrt{x}$$

$$= 16 + (3 \times 4 \times 2) - 32$$

$$= 16 + 24 - 32 = 8$$

So  $P(4, 8)$  lies on  $C$

(c)

The value

For  $x = 4$ , of  $\frac{dy}{dx}$

$$\begin{aligned} \frac{dy}{dx} &= 4 + \left( \frac{9}{2} \times 4 \frac{1}{2} \right) - (4 \times 4) \\ &= 4 + \left( \frac{9}{2} \times 2 \right) - 16 \\ &= 4 + 9 - 16 = -3 \end{aligned}$$

is the gradient of the tangent.

The gradient of the normal is perpendicular to the

The normal tangent, so

at P is  $\frac{1}{3}$  the gradient is  $-\frac{1}{m}$

Equation of the normal :

$$y - 8 = \frac{1}{3} (x - 4) \quad (x - x_1)$$

Use  $y - y_1 = m$

$$y - 8 = \frac{x}{3} - \frac{4}{3}$$

Multiply by 3

$$\begin{aligned} 3y - 24 &= x - 4 \\ 3y &= x + 20 \end{aligned}$$

(d)

$$\begin{aligned} y = 0 : \quad 0 &= x + 20 \\ x &= -20 \end{aligned}$$

Use  $y = 0$  to find where the normal cuts

the  $x$ -axis.

Q is the point  $(-20, 0)$

$$\begin{aligned} PQ &= \frac{\sqrt{(4 - -20)^2 + (8 - 0)^2}}{\sqrt{(y_2 - y_1)^2}} \\ &= \sqrt{24^2 + 8^2} \\ &= \sqrt{576 + 64} \\ &= \sqrt{640} \\ &= \sqrt{64 \times 10} \\ &= 8\sqrt{10} \end{aligned}$$

points is

The distance between two

$$\sqrt{(x_2 - x_1)^2 +$$

$$(y_2 - y_1)^2}$$

To simplify the surd, find a factor which is an exact square ( here  $64 = 8^2$  )

# Solutionbank C1

## Edexcel Modular Mathematics for AS and A-Level

### Algebraic fractions

#### Exercise A, Question 21

#### Question:

The curve  $C$  has equation  $y = 4x^2 + \frac{5-x}{x}$ ,  $x \neq 0$ . The point  $P$  on  $C$  has  $x$ -coordinate 1.

(a) Show that the value of  $\frac{dy}{dx}$  at  $P$  is 3.

(b) Find an equation of the tangent to  $C$  at  $P$ .

This tangent meets the  $x$ -axis at the point  $(k, 0)$ .

(c) Find the value of  $k$ .

#### Solution:

(a)

$$y = 4x^2 + \frac{5-x}{x}$$

$$= 4x^2 + 5x^{-1} - 1$$

$$\frac{dy}{dx} = (4 \times 2x^1) + (5x - 1x^{-2})$$

constant  $-1$  gives zero

$$\frac{dy}{dx} = 8x - 5x^{-2}$$

At  $P$ ,  $x = 1$ , so

$$\frac{dy}{dx} = (8 \times 1) - (5 \times 1^{-2})$$

$$= 8 - 5 = 3$$

Divide  $5 - x$  by  $x$

For  $y = x^n$ ,  $\frac{dy}{dx} = nx^{n-1}$

Differentiating the

$$1^{-2} = \frac{1}{1^2} = \frac{1}{1} = 1$$

(b)

At  $x = 1$ ,  $\frac{dy}{dx} = 3$

The value of  $\frac{dy}{dx}$

is the gradient of the

tangent

$$\text{At } x = 1, \quad y = (4 \times 1^2) + \frac{5-1}{1}$$

$$y = 4 + 4 = 8$$

Equation of the tangent :

$$y - 8 = 3(x - 1)$$

$(x - x_1)$

Use  $y - y_1 = m$

$$y = 3x + 5$$

(c)

$$y = 0 : \quad 0 = 3x + 5$$

$$3x = -5$$

$$x = -\frac{5}{3}$$

Use  $y = 0$  to find where the tangent

meets the  $x$ -axis

$$\text{So } K = -\frac{5}{3}$$

# Solutionbank C1

## Edexcel Modular Mathematics for AS and A-Level

### Algebraic fractions

#### Exercise A, Question 22

**Question:**

The curve  $C$  has equation  $y = \frac{1}{3}x^3 - 4x^2 + 8x + 3$ .

The point  $P$  has coordinates  $(3, 0)$ .

(a) Show that  $P$  lies on  $C$ .

(b) Find the equation of the tangent to  $C$  at  $P$ , giving your answer in the form  $y = mx + c$ , where  $m$  and  $c$  are constants.

Another point  $Q$  also lies on  $C$ . The tangent to  $C$  at  $Q$  is parallel to the tangent to  $C$  at  $P$ .

(c) Find the coordinates of  $Q$ .

**Solution:**

(a)

$$y = \frac{1}{3}x^3 - 4x^2 + 8x + 3$$

At  $x = 3$ ,

$$\begin{aligned}y &= \left(\frac{1}{3} \times 3^3\right) - (4 \times 3^2) + (8 \times 3) + 3 \\&= 9 - 36 + 24 + 3 \\&= 0\end{aligned}$$

So  $P(3, 0)$  lies on  $C$

(b)

$$\frac{dy}{dx} = \left( \frac{1}{3} \times 3x^2 \right) - (4 \times 2x^1) + (8 \times 1x^0)$$

For  $y = x^n$ ,  
 $\frac{dy}{dx} = nx^{n-1}$

Differentiating the constant 3 gives zero.

$$= x^2 - 8x + 8$$

At  $x = 3$ ,

$$\frac{dy}{dx} = 3^2 - (8 \times 3) + 8$$

$$= 9 - 24 + 8 = -7$$

The value of  $\frac{dy}{dx}$  is the gradient of the

tangent.

Equation of the tangent :

$$y - 0 = -7(x - 3)$$

$$(x - x_1)$$

Use  $y - y_1 = m$

$$y = -7x + 21$$

This is in the

required form  $y = mx + c$

(c)

At  $Q$ ,  $\frac{dy}{dx} = -7$

If the tangents are

parallel, they have the same gradient.

$$x^2 - 8x + 8 = -7$$

$$x^2 - 8x + 15 = 0$$

$$(x - 3)(x - 5) = 0$$

$$x = 3 \text{ or } x = 5$$

$x = 3$  at the point P

For  $Q$ ,  $x = 5$

$$y = \left( \frac{1}{3} \times 5^3 \right) - (4 \times 5^2) + (8 \times 5) + 3$$

Substitute  $x = 5$

$$= \frac{125}{3} - 100 + 40 + 3$$

back into the equation

of C

$$= -15 \frac{1}{3}$$

Q is the point  $(5, -15 \frac{1}{3})$

$$\frac{1}{3}$$

# Solutionbank C1

## Edexcel Modular Mathematics for AS and A-Level

### Algebraic fractions

#### Exercise A, Question 23

#### Question:

$$f\left(\frac{1}{x}\right) = \frac{(2x+1)(x+4)}{\sqrt{x}}, \quad x > 0$$

(a) Show that  $f(x)$  can be written in the form  $Px^{\frac{3}{2}} + Qx^{\frac{1}{2}} + Rx^{-\frac{1}{2}}$ , stating the values of the constants  $P$ ,  $Q$  and  $R$ .

(b) Find  $f'(x)$ .

(c) Show that the tangent to the curve with equation  $y = f(x)$  at the point where  $x = 1$  is parallel to the line with equation  $2y = 11x + 3$ .

#### Solution:

(a)

$$f\left(\frac{1}{x}\right) = \frac{(2x+1)(x+4)}{\sqrt{x}}$$

$$= \frac{2x^2 + 9x + 4}{\sqrt{x}}$$

Divide each term by

$x$

$$\frac{1}{2}, \text{ remembering}$$

$$= 2x^{\frac{3}{2}} + 9x^{\frac{1}{2}} + 4x^{-\frac{1}{2}}.$$

that  $x^m \div x^n = x^{m-n}$

$$P = 2, \quad Q = 9, \quad R = 4$$

(b)

$$f'(x) = \left(2 \times \frac{3}{2}x^{\frac{1}{2}}\right) + \left(9 \times \frac{1}{2}x^{-\frac{1}{2}}\right) + \left(4 \times \frac{-1}{2}x^{-\frac{3}{2}}\right)$$

$f'(x)$  is the derivative of  $f(x)$ ,

$$f'(x) = 3x^{\frac{1}{2}} + \frac{9}{2}x^{-\frac{1}{2}} - 2x^{-\frac{3}{2}}$$

so differentiate

(c)



At  $x = 1$ ,

$$f'(1) = (3 \times 1^{\frac{1}{2}}) + (\frac{9}{2} \times 1^{\frac{-1}{2}}) - (2 \times 1^{\frac{-3}{2}})$$

of the tangent at  $x = 1$

$$= 3 + \frac{9}{2} - 2 = \frac{11}{2}$$

The line  $2y$

$$= 11x + 3 \text{ is}$$

$y$

$$= \frac{11}{2}x + \frac{3}{2}$$

The gradient is  $\frac{11}{2}$

So the tangent to the curve where

$x = 1$  is parallel to this line,

since the gradients are equal.

$f'(1)$  is the gradient

$$1^n = 1 \text{ for any } n.$$

Compare with  $y = mx + c$

Give a conclusion,

with a reason.

# Solutionbank C1

## Edexcel Modular Mathematics for AS and A-Level

### Algebraic fractions

#### Exercise A, Question 24

#### Question:

The curve  $C$  with equation  $y = f(x)$  passes through the point  $(3, 5)$ .

Given that  $f'(x) = x^2 + 4x - 3$ , find  $f(x)$ .

#### Solution:

$f'(x)$	$= x^2 + 4x - 3$		To find $f(x)$
			from $f'(x)$ , integrate.
$f(x)$	$= \frac{x^3}{3} + \frac{4x^2}{2} - 3x + C$		Use $\int x^n dx =$
	$= \frac{x^3}{3} + 2x^2 - 3x + C$	$\frac{x^{n+1}}{n+1} + C.$	
		the	Do not forget to include
		constant of	
	integration $C$ .		
When $x = 3$ , $f(x)$		The curve	
$= 5$ , so	passes		
$\frac{3^3}{3} + (2 \times 3^2) -$		through	
$(3 \times 3) + C = 5$	$(3, 5)$ ,		
$9 + 18 - 9 + C$	$= 5$		so $f(3) = 5$ .
$C$	$= -13$		
$f(x)$	$= \frac{x^3}{3} + 2x^2 - 3x - 13$		

# Solutionbank C1

## Edexcel Modular Mathematics for AS and A-Level

### Algebraic fractions

#### Exercise A, Question 25

#### Question:

The curve with equation  $y = f(x)$  passes through the point (1, 6). Given that

$$f'(x) = 3 + \frac{5x^2 + 2}{x^{\frac{1}{2}}}, \quad x > 0,$$

find  $f(x)$  and simplify your answer.

#### Solution:

$$f'(x) = 3 + \frac{5x^2 + 2}{x^{\frac{1}{2}}}$$

Divide  $5x^2 + 2$  by  $x^{\frac{1}{2}}$ ,

remembering that

$$x^m \div x^n = x^{m-n}$$

$$= 3 + 5x^{\frac{3}{2}} + 2x^{-\frac{1}{2}}$$

$f'(x)$ , integrate.

To find  $f(x)$  from

$$f(x) = 3x + \frac{5x^{\frac{5}{2}}}{(\frac{5}{2})} + \frac{2x^{\frac{1}{2}}}{(\frac{1}{2})} + C$$

Use  $\int x^n dx = \frac{x^{n+1}}{n+1} + C$ .

$$= 3x + (5 \times \frac{2}{5} x^{\frac{5}{2}}) + (2 \times \frac{2}{1} x^{\frac{1}{2}}) + C$$

Do not forget to include

$$= 3x + 2x^{\frac{5}{2}} + 4x^{\frac{1}{2}} + C$$

the constant of integration  $C$ .

When  $x = 1$ ,  $f(x) = 6$ , so

The curve passes

$$(3 \times 1) + (2 \times 1^{\frac{5}{2}}) +$$

through (1, 6),

$$(4 \times 1^{\frac{1}{2}}) + C = 6$$

$$\text{so } f(1) = 6$$

$$3 + 2 + 4 + C$$

$$= 6$$

$$1^n = 1 \text{ for any } n.$$

$$C$$

$$= -3$$

$$f(x) = 3x + 2x^{\frac{5}{2}} + 4x^{\frac{1}{2}} - 3$$

# Solutionbank C1

## Edexcel Modular Mathematics for AS and A-Level

### Algebraic fractions

#### Exercise A, Question 26

#### Question:

For the curve  $C$  with equation  $y = f(x)$ ,

$$\frac{dy}{dx} = x^3 + 2x - 7$$

(a) Find  $\frac{d^2y}{dx^2}$

(b) Show that  $\frac{d^2y}{dx^2} \geq 2$  for all values of  $x$ .

Given that the point  $P(2, 4)$  lies on  $C$ ,

(c) find  $y$  in terms of  $x$ ,

(d) find an equation for the normal to  $C$  at  $P$  in the form  $ax + by + c = 0$ , where  $a$ ,  $b$  and  $c$  are integers.

#### Solution:

(a)

$$\frac{dy}{dx} = x^3 + 2x - 7$$

Differentiate to find

$$\frac{d^2y}{dx^2} = 3x^2 + 2$$

the second derivative

(b)

$$x^2 \geq 0 \text{ for any (real) } x.$$

The square of a

$$\text{So } 3x^2 \geq 0$$

real number

$$\text{So } 3x^2 + 2 \geq 2$$

cannot be negative.

$$\text{So } \frac{d^2y}{dx^2} \geq 2 \text{ for all values of } x.$$

Give a conclusion.

(c)

$$\frac{dy}{dx} = x^3 + 2x - 7$$

Integrate  $\frac{dy}{dx}$  to

find  $y$  in terms

of  $x$ .

$$y = \frac{x^4}{4} + \frac{2x^2}{2} - 7x + C$$

include

Do not forget to

$$= \frac{x^4}{4} + x^2 - 7x + C$$

integration  $C$ .

the constant of

When  $x = 2$ ,  $y = 4$ , so

Use the fact that

$$4 = \frac{2^4}{4} + 2^2 - (7 \times 2) + C$$

the curve.

$P(2, 4)$  lies on

$$4 = 4 + 4 - 14 + C$$

$$C = +10$$

$$y = \frac{x^4}{4} + x^2 + 7x + 10$$

(d)

For  $x = 2$ ,

$$\begin{aligned}\frac{dy}{dx} &= 2^3 + (2 \times 2) - 7 \\ &= 8 + 4 - 7 = 5\end{aligned}$$

The gradient of the normal

at P is  $-\frac{1}{5}$

Equation of the normal :

$$y - 4 = \frac{-1}{5} (x - 2)$$

$$y - 4 = \frac{-x}{5} + \frac{2}{5}$$

$$5y - 20 = -x + 2$$

$$x + 5y - 22 = 0$$

The normal is

perpendicular to the tangent,

so the gradient is  $-\frac{1}{m}$

This is in the required form

$ax + by + c = 0$ , where  $a$ ,

$b$  and  $c$  are integers .

The value of

$$\frac{dy}{dx}$$

is the gradient

of the tangent .

Use  $y - y_1 = m$

Multiply by 5

# Solutionbank C1

## Edexcel Modular Mathematics for AS and A-Level

### Algebraic fractions

#### Exercise A, Question 27

#### Question:

For the curve  $C$  with equation  $y = f(x)$ ,

$$\frac{dy}{dx} = \frac{1-x^2}{x^4}$$

Given that  $C$  passes through the point  $\left(\frac{1}{2}, \frac{2}{3}\right)$ ,

(a) find  $y$  in terms of  $x$ .

(b) find the coordinates of the point on  $C$  at which  $\frac{dy}{dx} = 0$ .

#### Solution:

(a)

$$\frac{dy}{dx} = \frac{1-x^2}{x^4}$$

$$= x^{-4} - x^{-2}$$

$$y = \frac{x^{-3}}{-3} - \frac{x^{-1}}{-1} + C$$

$$= \frac{-x^{-3}}{3} + x^{-1} + C$$

constant of integration  $C$ .

$$y = \frac{-1}{3x^3} + \frac{1}{x} + C$$

will make it easier

calculate values

the next stage.

When  $x =$

$$\frac{1}{2}, y =$$

$$\frac{2}{3}, \text{ so}$$

$$\frac{2}{3} = -\frac{8}{3} + 2 + C$$

$$C = \frac{2}{3} + \frac{8}{3} - 2 = \frac{4}{3}$$

$$y = \frac{-1}{3x^3} + \frac{1}{x} + \frac{4}{3}$$

(b)

Divide  $1 - x^2$  by  $x^4$

Integrate  $\frac{dy}{dx}$  to

of  $x$ . Do not forget

find  $y$  in terms

to include

the

Use  $x^{-n} = \frac{1}{x^n}$ .

This

to

at

Use the fact that

$\left(\frac{1}{2}, \frac{2}{3}\right)$  lies on

the curve.

$$\frac{1-x^2}{x^4} = 0$$

is

If a fraction

equal

to zero, its

numerator

$$1-x^2 = 0$$

must be zero.

$$x^2 = 1$$

$$x = 1 \text{ or } x = -1$$

$$x = 1 : y = \frac{-1}{3} + 1 + \frac{4}{3}$$

$$y = 2$$

$$x = -1 : y = \frac{1}{3} - 1 + \frac{4}{3}$$

$$y = \frac{2}{3}$$

The points are

(1, 2)

and  $(-1, \frac{2}{3})$

# Solutionbank C1

## Edexcel Modular Mathematics for AS and A-Level

### Algebraic fractions

#### Exercise A, Question 28

#### Question:

The curve  $C$  with equation  $y = f(x)$  passes through the point  $(5, 65)$ .

Given that  $f'(x) = 6x^2 - 10x - 12$ ,

(a) use integration to find  $f(x)$ .

(b) Hence show that  $f(x) = x(2x + 3)(x - 4)$ .

(c) Sketch  $C$ , showing the coordinates of the points where  $C$  crosses the  $x$ -axis.

#### Solution:

(a)

$$f'(x) = 6x^2 - 10x - 12 \quad \text{find } f(x) \text{ from } f'(x), \text{ integrate}$$

$$f(x) = \frac{6x^3}{3} - \frac{10x^2}{2} - 12x + C \quad \text{not forget to}$$

When  $x = 5$ ,  $y = 65$ , so include the constant of integration  $C$ .

$$65 = \frac{6 \times 125}{3} - \frac{10 \times 25}{2} - 60 + C \quad \text{the fact that the curve passes through } (5, 65)$$

$$65 = 250 - 125 - 60 + C$$

$$C = 65 + 125 + 60 - 250$$

$$C = 0$$

$$f(x) = 2x^3 - 5x^2 - 12x$$

(b)

$$f(x) = x(2x^2 - 5x - 12)$$

$$f(x) = x(2x + 3)(x - 4)$$

(c)

Curve meets  $x$ -axis where  $y = 0$

$$x(2x + 3)(x - 4) = 0$$

$$x = 0, x = -\frac{3}{2}, x = 4$$

When  $x \rightarrow \infty$ ,  $y \rightarrow \infty$

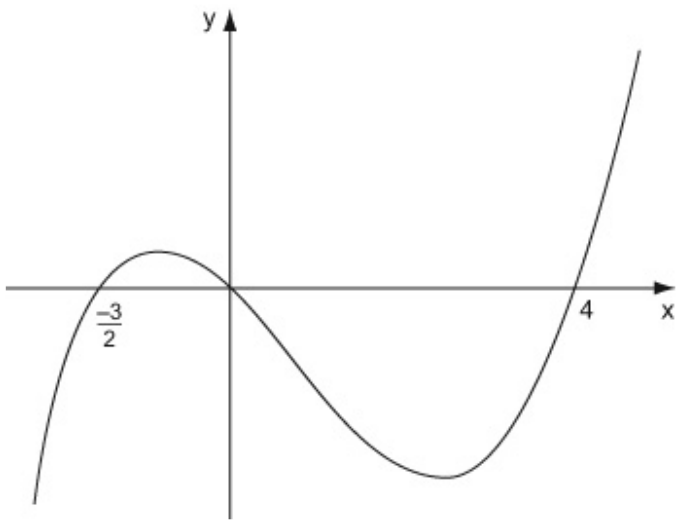
When  $x \rightarrow -\infty$ ,  $y \rightarrow -\infty$

Put  $y = 0$  and

solve for  $x$

Check what happens to  $y$  for large positive and negative values of  $x$ .





Crosses  $x$ -axis at  $(-\frac{3}{2}, 0)$ ,  $(0, 0)$ ,  $(4, 0)$

© Pearson Education Ltd 2008

# Solutionbank C1

## Edexcel Modular Mathematics for AS and A-Level

### Algebraic fractions

#### Exercise A, Question 29

#### Question:

The curve  $C$  has equation  $y = x^2 \left( x - 6 \right) + \frac{4}{x}, x > 0$ .

The points  $P$  and  $Q$  lie on  $C$  and have  $x$ -coordinates 1 and 2 respectively.

(a) Show that the length of  $PQ$  is  $\sqrt{170}$ .

(b) Show that the tangents to  $C$  at  $P$  and  $Q$  are parallel.

(c) Find an equation for the normal to  $C$  at  $P$ , giving your answer in the form  $ax + by + c = 0$ , where  $a$ ,  $b$  and  $c$  are integers.

#### Solution:

(a)

$$y = x^2 (x - 6) + \frac{4}{x}$$

At  $P$ ,  $x = 1$ ,

$$y = 1(1 - 6) + \frac{4}{1} = -1$$

$P$  is  $(1, -1)$

At  $Q$ ,  $x = 2$ ,

$$y = 4(2 - 6) + \frac{4}{2} = -14$$

$Q$  is  $(2, -14)$

$$\begin{aligned} PQ &= \sqrt{(2 - 1)^2 + (-14 - (-1))^2} \\ &= \sqrt{1^2 + (-13)^2} \\ &= \sqrt{1 + 169} = \sqrt{170} \end{aligned}$$

The distance between two points is

$$\sqrt{(x_2 - x_1)^2 + (y_2 - y_1)^2}$$

(b)

$$\begin{aligned} y &= x^3 - 6x^2 + 4x^{-1} \\ \frac{dy}{dx} &= 3x^2 - (6 \times 2x^{-1}) + (4x - 1x^{-2}) \\ &= 3x^2 - 12x - 4x^{-2} \end{aligned}$$

At  $x = 1$ ,

The value of  $\frac{dy}{dx}$

$$\frac{dy}{dx} = 3 - 12 - 4 = -13$$

is the gradient of

the tangent.

At  $x = 2$ ,

$$\begin{aligned} \frac{dy}{dx} &= (3 \times 4) - (12 \times 2) - (4 \times 2^{-2}) \\ &= 12 - 24 - \frac{4}{4} = -13 \end{aligned}$$

At  $P$  and also at  $Q$  the gradient is  $-13$ , so the tangents are parallel (equal gradients).

Give a conclusion

(c)

The gradient of the normal is perpendicular to the tangent at P is –

$$\frac{1}{-13} = \frac{1}{13} \quad \text{the gradient is } -\frac{1}{m}$$

Equation of the normal:

$$y - (-1) = \frac{1}{13}(x - 1)$$

$$y + 1 = \frac{x}{13} - \frac{1}{13}$$

$$13y + 13 = x - 1$$

$$x - 13y - 14 = 0$$

integers.

The normal

tangent, so

$b$  and  $c$  are

$$\text{Use } y - y_1 = m(x - x_1)$$

Multiply by 13

This is in the required form  $ax + by + c = 0$ , where  $a$ ,

# Solutionbank C1

## Edexcel Modular Mathematics for AS and A-Level

### Algebraic fractions

#### Exercise A, Question 30

#### Question:

- (a) Factorise completely  $x^3 - 7x^2 + 12x$ .
- (b) Sketch the graph of  $y = x^3 - 7x^2 + 12x$ , showing the coordinates of the points at which the graph crosses the  $x$ -axis.

The graph of  $y = x^3 - 7x^2 + 12x$  crosses the positive  $x$ -axis at the points  $A$  and  $B$ .

The tangents to the graph at  $A$  and  $B$  meet at the point  $P$ .

- (c) Find the coordinates of  $P$ .

#### Solution:

(a)

$$x^3 - 7x^2 + 12x$$

$$= x(x^2 - 7x + 12)$$

$$= x(x - 3)(x - 4)$$

$x$  is a common factor

(b)

Curve meets  $x$ -axis where  $y = 0$ .

$$x(x - 3)(x - 4) = 0$$

$$x = 0, x = 3, x = 4$$

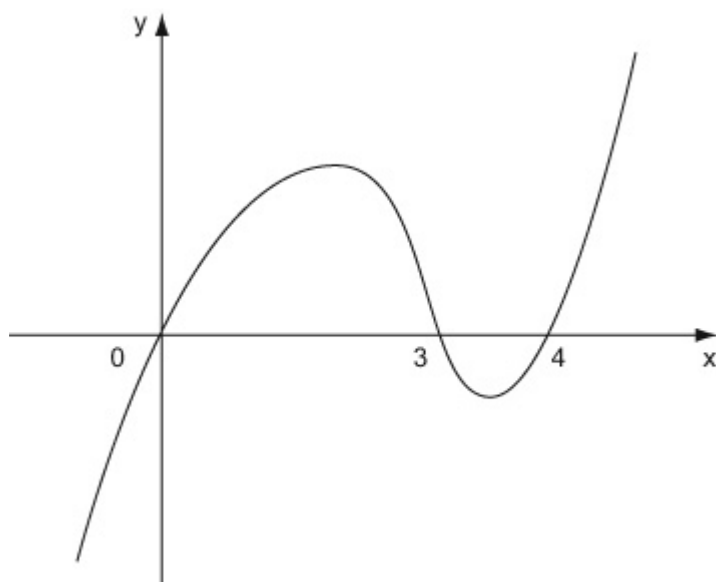
When  $x \rightarrow \infty, y \rightarrow \infty$

When  $x \rightarrow -\infty, y \rightarrow -\infty$

Put  $y = 0$  and  
solve for  $x$ .

Check what happens to  
 $y$  for large

positive and negative values of  $x$



Crosses  $x$ -axis at  $(0, 0)$ ,  $(3, 0)$ ,  $(4, 0)$

(c)

$A$  and  $B$  are

$$(3, 0)$$

and

$$(4, 0)$$

$$\frac{dy}{dx} = 3x^2 - 14x + 12$$

At  $x = 3$ ,  
(A)

value of  $\frac{dy}{dx}$

$$\frac{dy}{dx} = 27 - 42 + 12 = -3$$

At  $x = 4$   
(B)

$$\frac{dy}{dx} = 48 - 56 + 12 = 4$$

Tangent at A:

$$y - 0 = -3(x - 3)$$

$$(x - x_1)$$

Use  $y - y_1 = m$

$$y = -3x + 9 \quad (\text{i})$$

Tangent at B:

$$y - 0 = 4(x - 4)$$

$$y = 4x - 16 \quad (\text{ii})$$

Subtract

$$(\text{ii}) -$$

$$(\text{i}) :$$

$$0 = 7x - 25$$

simultaneously to

Solve (i) and (ii)

$$x = \frac{25}{7}$$

intersection

find the

point

of the tangents

Substituting  
back into (i):

$$y = -\frac{75}{7} + 9 = -\frac{12}{7}$$

P is the

point  $(\frac{25}{7},$

$\frac{-12}{7})$