



UNIVERSITY OF CAMBRIDGE INTERNATIONAL EXAMINATIONS
General Certificate of Education
Advanced Subsidiary Level and Advanced Level

MATHEMATICS

9709/11

Paper 1 Pure Mathematics 1 (P1)

October/November 2013

1 hour 45 minutes

Additional Materials: Answer Booklet/Paper
Graph Paper
List of Formulae (MF9)



READ THESE INSTRUCTIONS FIRST

If you have been given an Answer Booklet, follow the instructions on the front cover of the Booklet.

Write your Centre number, candidate number and name on all the work you hand in.

Write in dark blue or black pen.

You may use a soft pencil for any diagrams or graphs.

Do not use staples, paper clips, highlighters, glue or correction fluid.

Answer **all** the questions.

Give non-exact numerical answers correct to 3 significant figures, or 1 decimal place in the case of angles in degrees, unless a different level of accuracy is specified in the question.

The use of an electronic calculator is expected, where appropriate.

You are reminded of the need for clear presentation in your answers.

At the end of the examination, fasten all your work securely together.

The number of marks is given in brackets [] at the end of each question or part question.

The total number of marks for this paper is 75.

Questions carrying smaller numbers of marks are printed earlier in the paper, and questions carrying larger numbers of marks later in the paper.

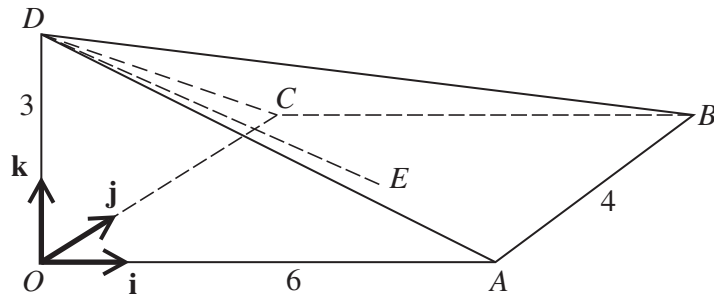
This document consists of **4** printed pages.



- 1 (i) Find the first three terms when $(2 + 3x)^6$ is expanded in ascending powers of x . [3]
- (ii) In the expansion of $(1 + ax)(2 + 3x)^6$, the coefficient of x^2 is zero. Find the value of a . [2]

- 2 A curve has equation $y = f(x)$. It is given that $f'(x) = \frac{1}{\sqrt{x+6}} + \frac{6}{x^2}$ and that $f(3) = 1$. Find $f(x)$. [5]

3



The diagram shows a pyramid $OABCD$ in which the vertical edge OD is 3 units in length. The point E is the centre of the horizontal rectangular base $OABC$. The sides OA and AB have lengths of 6 units and 4 units respectively. The unit vectors \mathbf{i} , \mathbf{j} and \mathbf{k} are parallel to \overrightarrow{OA} , \overrightarrow{OC} and \overrightarrow{OD} respectively.

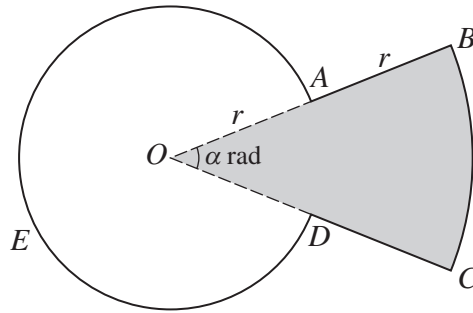
- (i) Express each of the vectors \overrightarrow{DB} and \overrightarrow{DE} in terms of \mathbf{i} , \mathbf{j} and \mathbf{k} . [2]
- (ii) Use a scalar product to find angle BDE . [4]
- 4 (i) Solve the equation $4 \sin^2 x + 8 \cos x - 7 = 0$ for $0^\circ \leq x \leq 360^\circ$. [4]
- (ii) Hence find the solution of the equation $4 \sin^2(\frac{1}{2}\theta) + 8 \cos(\frac{1}{2}\theta) - 7 = 0$ for $0^\circ \leq \theta \leq 360^\circ$. [2]

5 The function f is defined by

$$f : x \mapsto x^2 + 1 \text{ for } x \geq 0.$$

- (i) Define in a similar way the inverse function f^{-1} . [3]
- (ii) Solve the equation $ff(x) = \frac{185}{16}$. [3]

6



The diagram shows a metal plate made by fixing together two pieces, $OABCD$ (shaded) and $OAED$ (unshaded). The piece $OABCD$ is a minor sector of a circle with centre O and radius $2r$. The piece $OAED$ is a major sector of a circle with centre O and radius r . Angle AOD is α radians. Simplifying your answers where possible, find, in terms of α , π and r ,

(i) the perimeter of the metal plate, [3]

(ii) the area of the metal plate. [3]

It is now given that the shaded and unshaded pieces are equal in area.

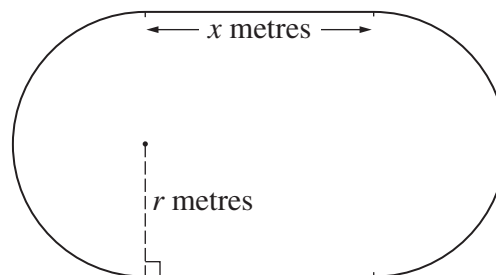
(iii) Find α in terms of π . [2]

7 The point A has coordinates $(-1, 6)$ and the point B has coordinates $(7, 2)$.

(i) Find the equation of the perpendicular bisector of AB , giving your answer in the form $y = mx + c$. [4]

(ii) A point C on the perpendicular bisector has coordinates (p, q) . The distance OC is 2 units, where O is the origin. Write down two equations involving p and q and hence find the coordinates of the possible positions of C . [5]

8



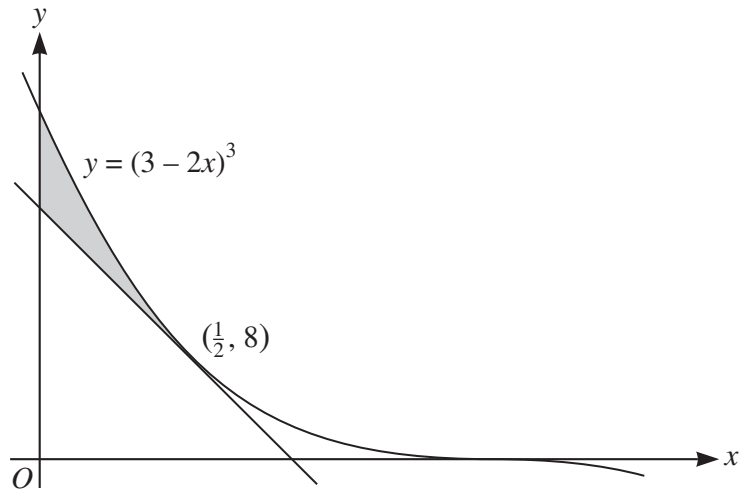
The inside lane of a school running track consists of two straight sections each of length x metres, and two semicircular sections each of radius r metres, as shown in the diagram. The straight sections are perpendicular to the diameters of the semicircular sections. The perimeter of the inside lane is 400 metres.

(i) Show that the area, $A \text{ m}^2$, of the region enclosed by the inside lane is given by $A = 400r - \pi r^2$. [4]

(ii) Given that x and r can vary, show that, when A has a stationary value, there are no straight sections in the track. Determine whether the stationary value is a maximum or a minimum. [5]

- 9 (a) In an arithmetic progression the sum of the first ten terms is 400 and the sum of the next ten terms is 1000. Find the common difference and the first term. [5]
- (b) A geometric progression has first term a , common ratio r and sum to infinity 6. A second geometric progression has first term $2a$, common ratio r^2 and sum to infinity 7. Find the values of a and r . [5]

10



The diagram shows the curve $y = (3 - 2x)^3$ and the tangent to the curve at the point $(\frac{1}{2}, 8)$.

- (i) Find the equation of this tangent, giving your answer in the form $y = mx + c$. [5]
- (ii) Find the area of the shaded region. [6]