



UNIVERSITY OF CAMBRIDGE INTERNATIONAL EXAMINATIONS  
 General Certificate of Education  
 Advanced Subsidiary Level and Advanced Level

CANDIDATE  
 NAME

CENTRE  
 NUMBER

--	--	--	--	--	--

CANDIDATE  
 NUMBER

--	--	--	--



**MARINE SCIENCE**

**9693/01**

Paper 1 AS Structured Questions

**October/November 2012**

**1 hour 30 minutes**

Candidates answer on the Question Paper.

No Additional Materials are required.

**READ THESE INSTRUCTIONS FIRST**

Write your Centre number, candidate number and name on all the work you hand in.  
 Write in dark blue or black pen.  
 You may use a pencil for any diagrams, graphs or rough work.  
 Do not use staples, paper clips, highlighters, glue or correction fluid.  
**DO NOT WRITE IN ANY BARCODES.**

Answer **all** questions.  
 Write your answers in the spaces provided on the question paper.

At the end of the examination, fasten all your work securely together.  
 The number of marks is given in brackets [ ] at the end of each question or part question.

For Examiner's Use	
1	
2	
3	
4	
5	
6	
7	
<b>Total</b>	

This document consists of **15** printed pages and **1** blank page.



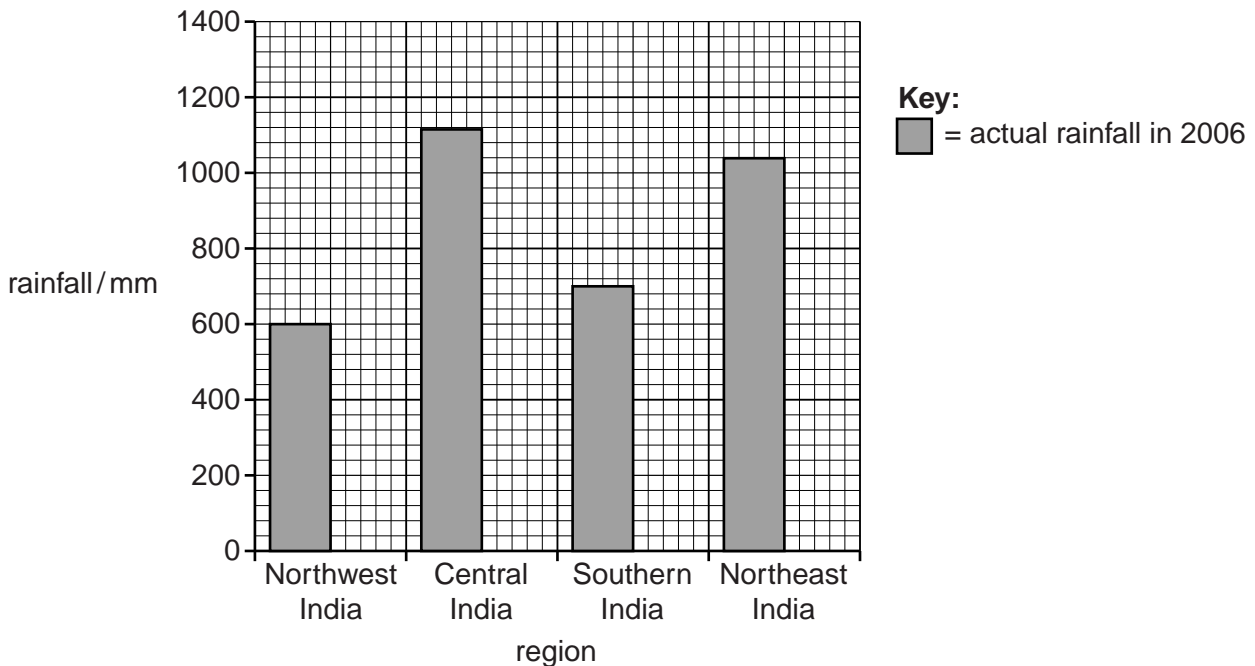
- 1 (a) Table 1.1 shows the mean rainfall during the Southwest monsoon in India calculated over a period of years.

Table 1.1 also shows the actual rainfall during the Southwest monsoon in 2006.

**Table 1.1**

region	mean rainfall / mm	actual rainfall in 2006 / mm
Northwest India	640	600
Central India	960	1120
Southern India	720	700
Northeast India	1400	1040
Total for all of India		

- (i) Calculate the total mean rainfall and the total actual rainfall in 2006 and write your answers in Table 1.1. [2]
- (ii) The data for actual rainfall in 2006 has been plotted on Fig. 1.1.



**Fig. 1.1**

Plot the data for the mean rainfall on Fig. 1.1.  
Use shaded bars for your plots.

[4]

- (iii) State the region of India in which the difference between the mean rainfall and the actual rainfall was greatest.

..... [1]

(b) State what is meant by the term *monsoon*.

.....  
..... [1]

For  
Examiner's  
Use

(c) (i) State **two** features of tropical cyclones.

1 .....  
.....  
2 .....  
..... [2]

(ii) State **two** conditions necessary for the formation of tropical cyclones.

1 .....  
.....  
2 .....  
..... [2]

[Total: 12]

2 (a) Suggest **two** factors, other than feeding relationships, which affect the population of marine organisms.

1 .....

.....

2 .....

..... [2]

(b) Fig. 2.1 is a pyramid of biomass showing the mass of organisms at each trophic level that supports one whale.

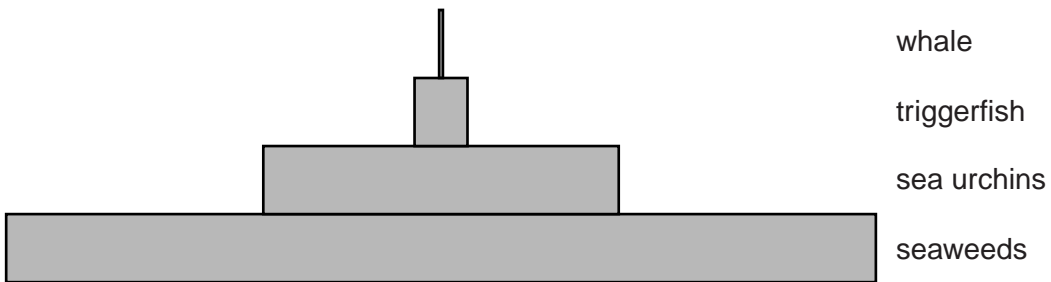


Fig. 2.1

(i) State the trophic level occupied by the seaweeds.

..... [1]

(ii) Large numbers of the sea urchins were harvested from the sea.

Explain the possible effects this could have on the populations of the other organisms in Fig. 2.1.

.....

.....

.....

.....

.....

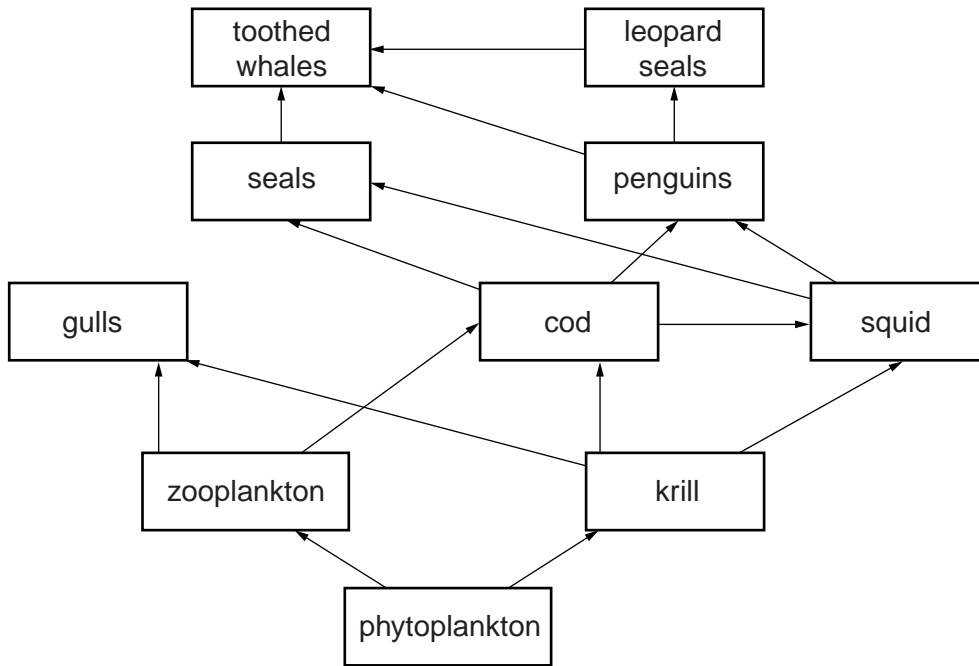
.....

.....

..... [4]

(c) Fig. 2.2 shows part of a marine food web.

For  
Examiner's  
Use



**Fig. 2.2**

Complete Table 2.1 by placing a tick in the boxes to indicate if each organism is a producer, prey, a primary consumer or a secondary consumer. [3]

**Table 2.1**

organism	producer	prey	primary consumer	secondary consumer
zooplankton				
cod				
seals				

[Total: 10]

3 (a) (i) Outline how carbon in the atmosphere becomes part of the phytoplankton in the sea.

.....  
.....  
.....  
.....  
.....  
.....  
.....[3]

(ii) Explain how the carbon in the phytoplankton may become part of the carbon dioxide breathed out by humans.

.....  
.....  
.....  
.....  
.....  
.....[3]

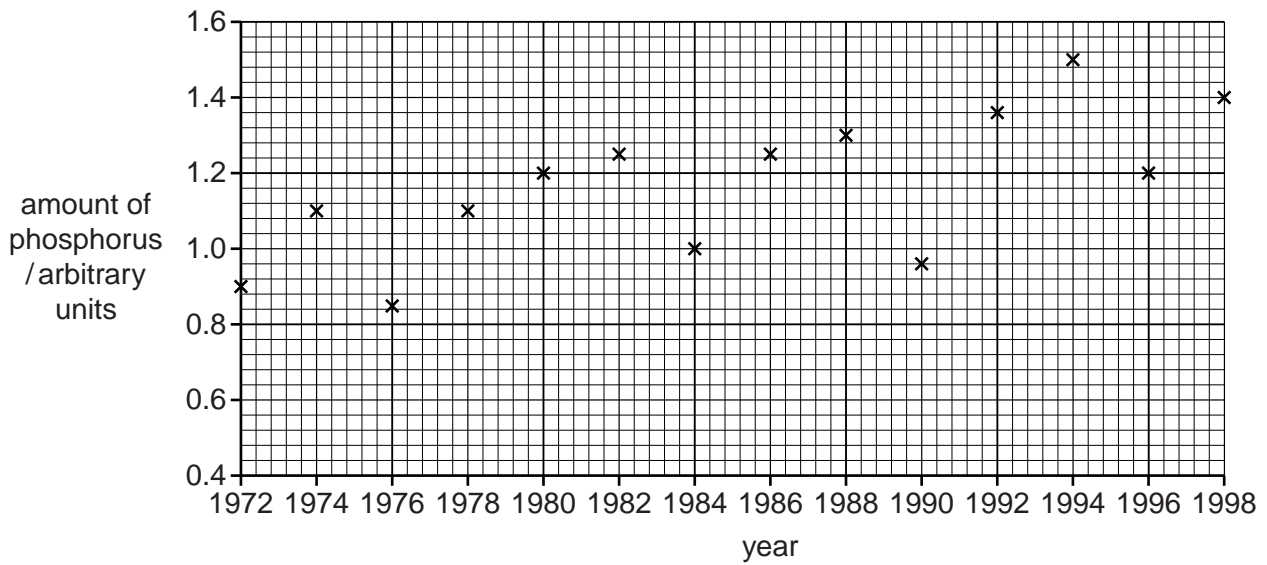
(b) State **two** biological uses for phosphorus in marine organisms.

1 .....

2 ..... [2]

(c) Fig. 3.1 shows the amount of phosphorus in the Baltic Sea from 1972 to 1998.

For  
Examiner's  
Use



**Fig. 3.1**

(i) State the two-year period in which the decrease in the amount of phosphorus was the greatest.

..... to ..... [1]

(ii) Calculate the mean change in the amount of phosphorus per year between 1990 and 1994.  
Show your working.

..... [2]

(iii) Suggest how the change you have calculated in (ii) may have affected the productivity of phytoplankton in the Baltic Sea.

..... [1]

[Total: 12]





(ii) Suggest why the largest production occurred in the Pacific Ocean.

*For  
Examiner's  
Use*

.....

.....

.....

.....

.....

.....

.....

.....

.....

.....

.....

..... [4]

[Total: 9]

5 (a) Fig. 5.1 shows two atolls **A** and **B**.

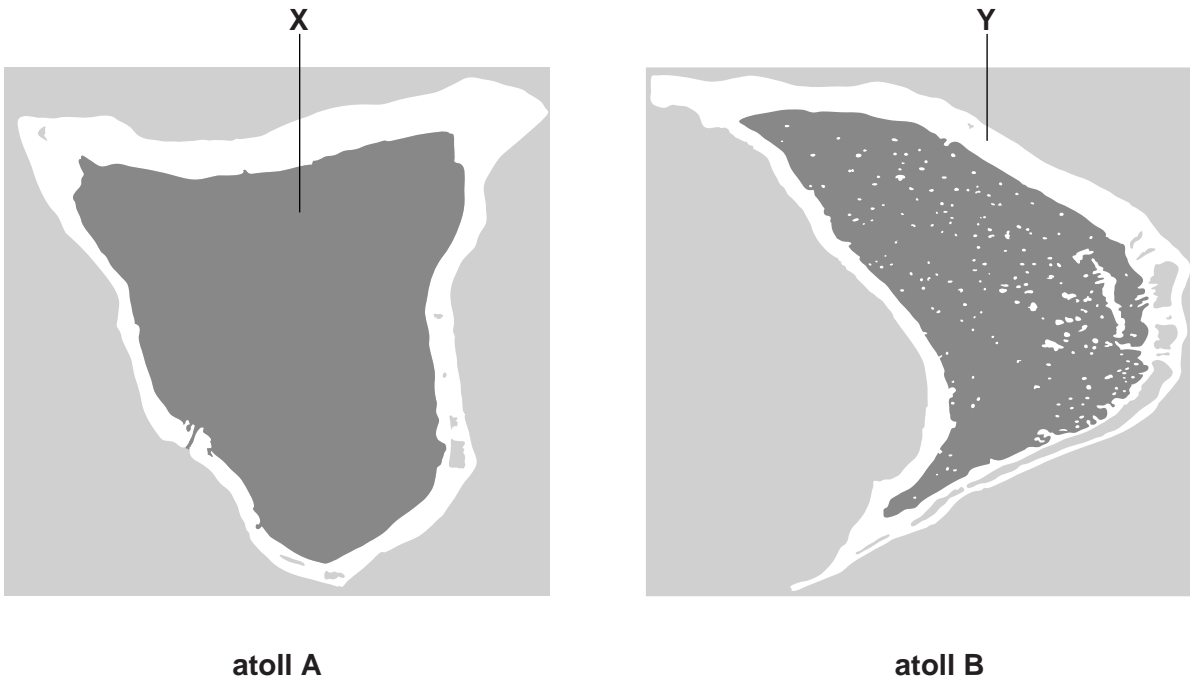


Fig. 5.1

(i) Name the parts of the atolls labelled **X** and **Y**.

**X** .....

**Y** ..... [2]

(ii) Other than size, state **two** ways in which atoll **A** differs from atoll **B**.

1 .....

.....

2 .....

..... [2]





(ii) Calculate the tidal range shown in Fig. 6.1.

*For  
Examiner's  
Use*

..... [1]

(iii) State **three** factors that affect the tidal range.

1 .....

2 .....

3 ..... [3]

[Total: 11]

7 (a) State **three** pieces of evidence which support the theory of plate tectonics.

- 1 .....
- .....
- 2 .....
- .....
- 3 .....
- ..... [3]

(b) Describe how tectonic processes lead to the formation of ocean trenches.

- .....
- .....
- .....
- ..... [2]

(c) (i) Outline how hydrothermal vents are formed.

- .....
- .....
- .....
- .....
- .....
- ..... [3]

(ii) Table 7.1 shows the location and depth of several hydrothermal vents.

For  
Examiner's  
Use

**Table 7.1**

name of hydrothermal vent	longitude	latitude	depth/metres
Gakkel Ridge	7° 45′	85° 01′	3600
Kerbit Deep	36° 27′	24° 52′	1570
Suakin Deep	38° 73′	19° 53′	2830
Jean Charcot Deep	35° 58′	25° 25′	1500
Ashadze	44° 26′	12° 46′	4100
Mariana Trough	144° 59′	18° 21′	3675
Discovery Deep	38° 05′	21° 28′	2200
Carlsberg Ridge	61° 00′	5° 00′	3500

Give the names of the **two** hydrothermal vents which are closest to each other.

..... and .....[1]

[Total: 9]

**BLANK PAGE**

---

Permission to reproduce items where third-party owned material protected by copyright is included has been sought and cleared where possible. Every reasonable effort has been made by the publisher (UCLES) to trace copyright holders, but if any items requiring clearance have unwittingly been included, the publisher will be pleased to make amends at the earliest possible opportunity.

University of Cambridge International Examinations is part of the Cambridge Assessment Group. Cambridge Assessment is the brand name of University of Cambridge Local Examinations Syndicate (UCLES), which is itself a department of the University of Cambridge.