

Surname	Centre Number	Candidate Number
Other Names		0



GCSE

4321/01

HUMANITIES

UNIT 1: People and their Environments

P.M. THURSDAY, 16 May 2013

1 hour

Questions answered	Examiner's use only
Question 1 (Section A)	30
Question 2 or 3 (Section B)	20
TOTAL	50

INSTRUCTIONS TO CANDIDATES

Use black ink or black ball-point pen.

Write your name, centre number and candidate number in the spaces at the top of this page.

Answer Question 1 (Section A) **and** *either* Question 2 *or* Question 3 (Section B).

Write your answers in the spaces provided in this booklet. Use supplementary sheets when there is insufficient room in this booklet. Write your name at the top of each supplementary sheet, indicating clearly the number of the question you answer. Put the supplementary sheets inside this booklet.

INFORMATION FOR CANDIDATES

The number of marks is given in brackets at the end of each question or part-question.

You will be awarded marks for the quality of your written communication.

Your answers must be relevant and must make full use of the information given to be awarded full marks for a question.

You are reminded that you should always support your answers using your knowledge and understanding of the topic chosen.

PEOPLE AND THEIR ENVIRONMENTS

Answer Question 1 (Section A) and either Question 2 or Question 3 (Section B).

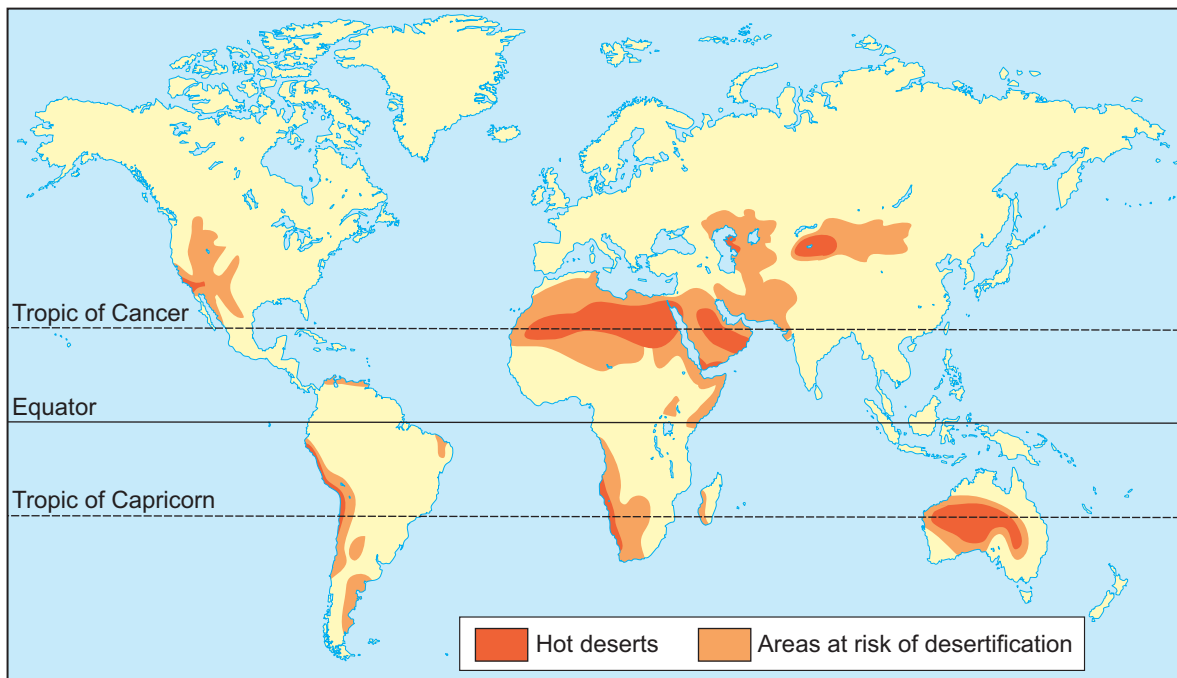
SECTION A

Answer all parts of this question.

1. This question is about the pressures of food supply on the global environment.

Study Source A and then answer the question that follows.

Source A – Areas at risk of desertification



(a) Use Source A to describe the location of areas at risk of desertification.

[2]

.....

.....

.....

.....

.....

.....

(b) Explain how human activity can increase desertification.

[4]

.....

.....

.....

.....

.....

.....

.....

.....

.....

.....

.....

.....

.....

.....

.....

.....

.....

.....

.....

.....

.....

.....

4321
0100.03

Look at Source B and answer the question that follows.

Source B – Subsistence farming in Uganda



© Wayne Hutchinson / Alamy

(c) Describe subsistence farming in LEDCs.

[4]

.....

.....

.....

.....

.....

.....

.....

.....

.....

.....

.....

.....

.....

.....

.....

.....

.....

.....

.....

.....

Look at Source C and answer the question that follows.

Examiner
only

Source C – Combine harvester and tractor with trailer in a barley field



© Cathy Wright/Alamy

(e) Use Source C and your own knowledge to describe the impact of the EU on farming in the UK. [6]

.....

.....

.....

.....

.....

.....

.....

.....

.....

.....

.....

.....

.....

.....

.....

.....

.....

.....

.....

.....

.....

.....

.....

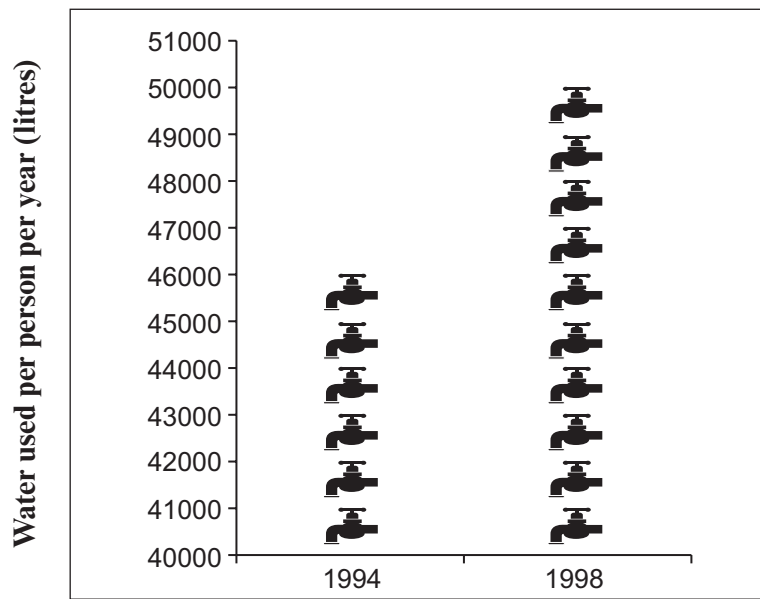
SECTION B

Answer **either** Question 2 or Question 3.

2. This question is about people and their relationship with water resources.

Study Source A and then answer the question that follows.

Source A – Changing water use in the Severn Trent Water region



(a) Use Source A to describe changing water use in the Severn Trent Water region. [2]

.....

.....

.....

.....

.....

.....

Look at Source B and answer the question that follows.

Source B – Water being used in the UK



(b) Explain why water use in the UK has changed.

[4]

.....

.....

.....

.....

.....

.....

.....

.....

.....

.....

.....

.....

.....

.....

.....

.....

.....

.....

.....

.....

.....

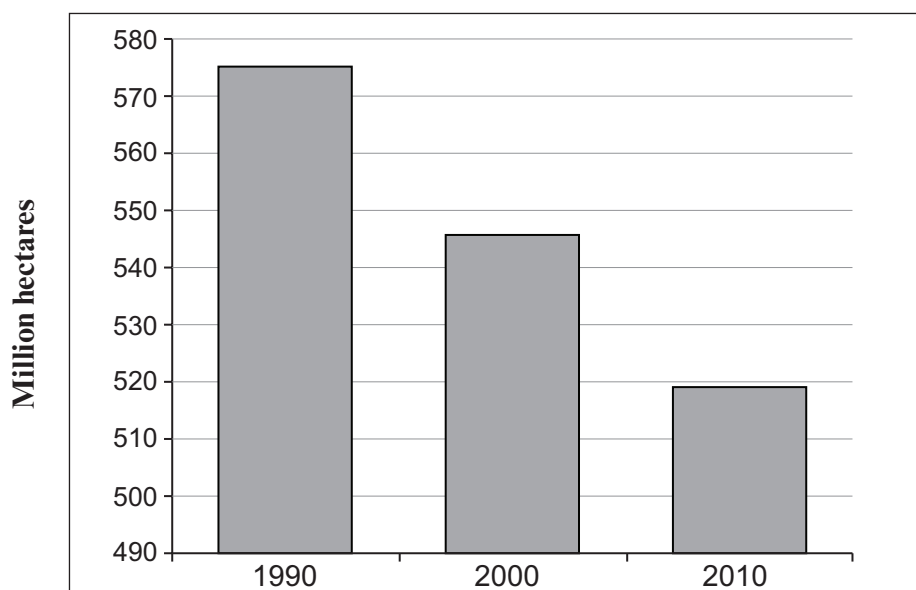
.....

If you have answered Question 2 you must not answer Question 3.

3. This question is about sustainable development of tropical rainforests.

Study Source A and answer the question that follows.

Source A – Total amount of tropical rainforest in Brazil



(a) Use Source A to describe tropical rainforest destruction in Brazil.

[2]

.....

.....

.....

.....

.....

.....

Look at Source B and answer the question that follows.

Source B – Rainforest chemist cartoon



(b) Explain why tropical rainforests are important.

[4]

.....

.....

.....

.....

.....

.....

.....

.....

.....

.....

.....

.....

.....

.....

.....

.....

.....

.....

.....

.....

.....

.....

.....

(c) Explain the ways tropical rainforest vegetation is adapted to its climate.

[6]

Examiner
only

.....

.....

.....

.....

.....

.....

.....

.....

.....

.....

.....

.....

.....

.....

.....

.....

.....

.....

.....

.....

.....

.....

.....

.....

.....

.....

(d) 'The modern world has brought misery to the native tribes of the rainforest.'
To what extent do you agree with this statement?

[8]

*Give arguments for and against this statement by:
describing problems for native tribes caused by rainforest development;
considering the benefits the modern world has brought to native tribes.
Conclude by saying how far you agree with the statement.*

.....
.....
.....
.....
.....
.....
.....
.....
.....
.....
.....
.....
.....
.....
.....
.....
.....
.....
.....
.....
.....
.....
.....
.....
.....
.....
.....
.....
.....
.....
.....
.....
.....
.....
.....
.....
.....
.....
.....
.....
.....
.....
.....
.....
.....
.....
.....
.....
.....

END OF SECTION B
END OF PAPER