

OXFORD CAMBRIDGE AND RSA EXAMINATIONS

Advanced Subsidiary GCE

HEALTH AND SOCIAL CARE

F913

UNIT 4: Health and Safety in Care Settings

Wednesday **18 JANUARY 2006** Afternoon 1 hour 30 minutes

Candidates answer on the question paper.
 Additional answer paper may be required.

Candidate Name	Centre Number	Candidate Number												
	<table border="1" style="display: inline-table; border-collapse: collapse;"> <tr> <td style="width: 15px; height: 15px;"></td> <td style="width: 15px; height: 15px;"></td> <td style="width: 15px; height: 15px;"></td> <td style="width: 15px; height: 15px;"></td> <td style="width: 15px; height: 15px;"></td> <td style="width: 15px; height: 15px;"></td> </tr> </table>							<table border="1" style="display: inline-table; border-collapse: collapse;"> <tr> <td style="width: 15px; height: 15px;"></td> <td style="width: 15px; height: 15px;"></td> <td style="width: 15px; height: 15px;"></td> <td style="width: 15px; height: 15px;"></td> <td style="width: 15px; height: 15px;"></td> <td style="width: 15px; height: 15px;"></td> </tr> </table>						

TIME 1 hour 30 minutes

INSTRUCTIONS TO CANDIDATES

- Write your name in the space above.
- Write your Centre number and Candidate number in the boxes above.
- Answer **all** the questions.
- Write your answers, in blue or black ink, in the spaces on the question paper.
- Read each question carefully and make sure you know what you have to do before starting your answer.

INFORMATION FOR CANDIDATES

- The number of marks is given in brackets [] at the end of each question or part question.
- The total number of marks for this paper is 100.
- *You will be awarded marks for the quality of written communication where an answer requires a piece of extended writing.*

FOR EXAMINER'S USE	
1	
2	
3	
4	
5	
6	
TOTAL	

This question paper consists of 15 printed pages and 1 blank page.

1 (a) Name **one** piece of legislation which deals with the safety of employees in care settings.

.....[1]

(b) (i) What is the main body responsible for enforcing this and other safety legislation?

.....[1]

(ii) Name **one** other function this body carries out.

.....[1]

(c) The Health and Safety Law poster should be on display in the workplace.

Identify **three** pieces of information that should be put on the poster by the employer.

1

2

3[3]

(d) Give **three** legal requirements relating to the provision of first aid in the work place. Explain how each would help reduce risk.

1

.....

.....

.....

.....

2

.....

.....

.....

.....

3.....

.....

.....

.....

.....

.....[9]

[Total: 15]

2

4



A



B



C

(a) Identify the **three** safety signs shown above. Describe how each helps to reduce risk.

A.....
.....
.....

B.....
.....
.....

C.....
.....
.....[6]

(b) Care workers in a hospital often wear special protective clothing.

Identify **three** pieces of protective clothing. Describe how each item would reduce risk.

1.....
.....
.....

2.....
.....
.....

3.....
.....
.....[6]

(c) (i) What is meant by the term 'standard precautions'?

.....
.....[1]

(ii) Give **two** examples of how standard precautions are carried out.

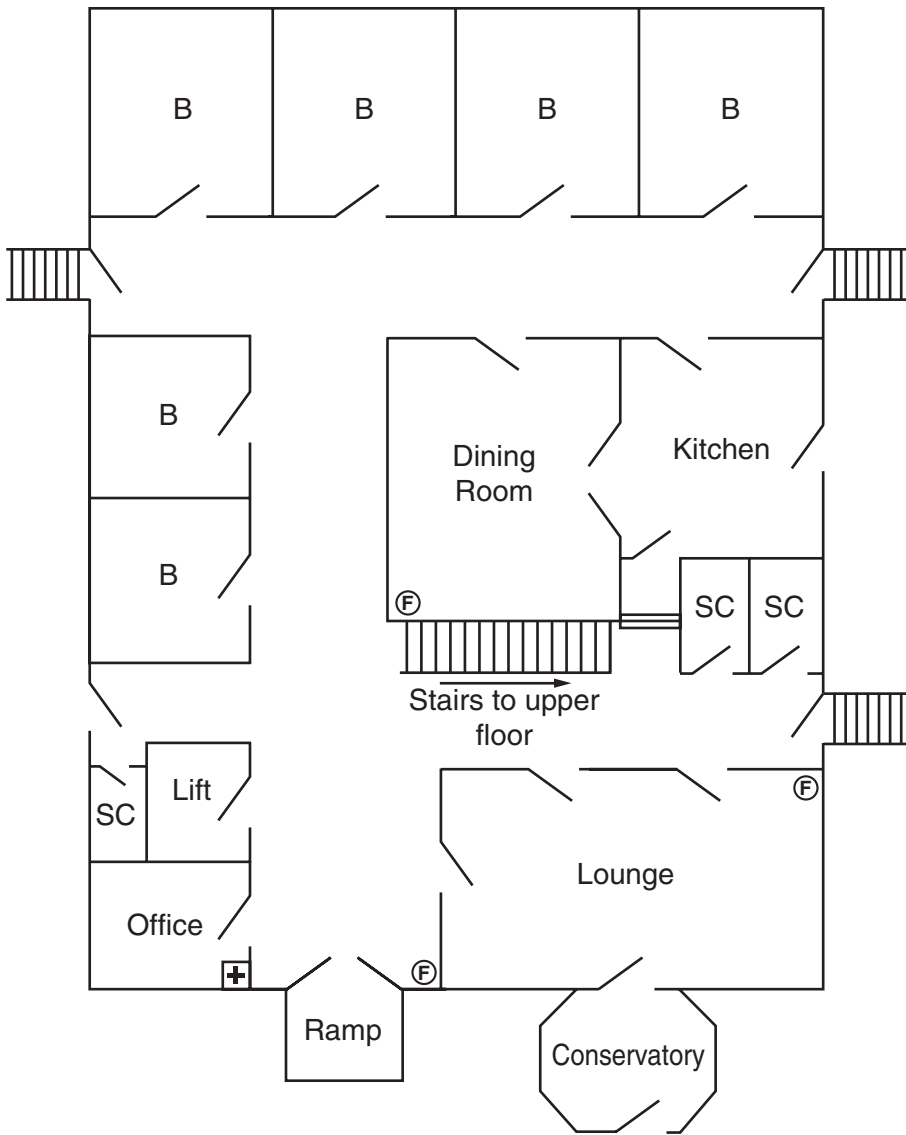
1.....
.....
.....
2.....
.....
.....[2]

[Total: 15]




3 (a) Identify the **five** stages of risk assessment in the correct order.

- 1
- 2
- 3
- 4
- 5[5]

(b) Wildwood Residential Home – ground floor plan.



SC - Storage Cupboard
 B - Bedroom
 — indicates a doorway

 indicates steps
 First Aid Box
 Fire Extinguisher

.....

.....

.....

.....

.....

.....

.....

.....

.....

.....

[15]

[Total: 20]

Turn to page 10 for Question 4.

4 (a) Name **two** safety features or procedures that should be in place to reduce the risk of fire breaking out in a care setting. Describe how each would reduce the risk.

1

.....

.....

2

.....

.....[4]

(b) Different types of equipment should be present to prevent the spread of fire and to allow adequate time for evacuation.

Name **three** of these pieces of equipment and describe how each could help.

1

.....

.....

2

.....

.....

3

.....

.....[6]

(c) Identify **four** procedures that should take place to allow safe evacuation of premises in the event of fire.

1

2

3

4

[4]

5 (a) A service user in a care setting falls and breaks a leg whilst being moved with a hoist.

(i) Name the legislation that requires this incident to be reported.

.....[1]

(ii) Give examples of **four** other incidents that require reporting under this legislation.

1.....

.....

.....

2.....

.....

.....

3.....

.....

.....

4.....

.....

.....[4]

(b) Identify **five** checks that should be carried out before using a hoist. Describe how each check reduces the risk of an accident occurring.

1

.....

.....

.....

2

.....

.....

.....

3

.....

.....

.....

4

.....

.....

.....

5

.....

.....

.....[10]

[Total: 15]

Permission to reproduce items where third-party owned material protected by copyright is included has been sought and cleared where possible. Every reasonable effort has been made by the publisher (OCR) to trace copyright holders, but if any items requiring clearance have unwittingly been included, the publisher will be pleased to make amends at the earliest possible opportunity.

OCR is part of the Cambridge Assessment Group. Cambridge Assessment is the brand name of University of Cambridge Local Examinations Syndicate (UCLES), which is itself a department of the University of Cambridge.