

**ADVANCED SUBSIDIARY GCE**

**2681/I**

**GEOGRAPHY A**

The Human Environment

**INSERT**

**TUESDAY 20 MAY 2008**

Afternoon  
Time: 1 hour



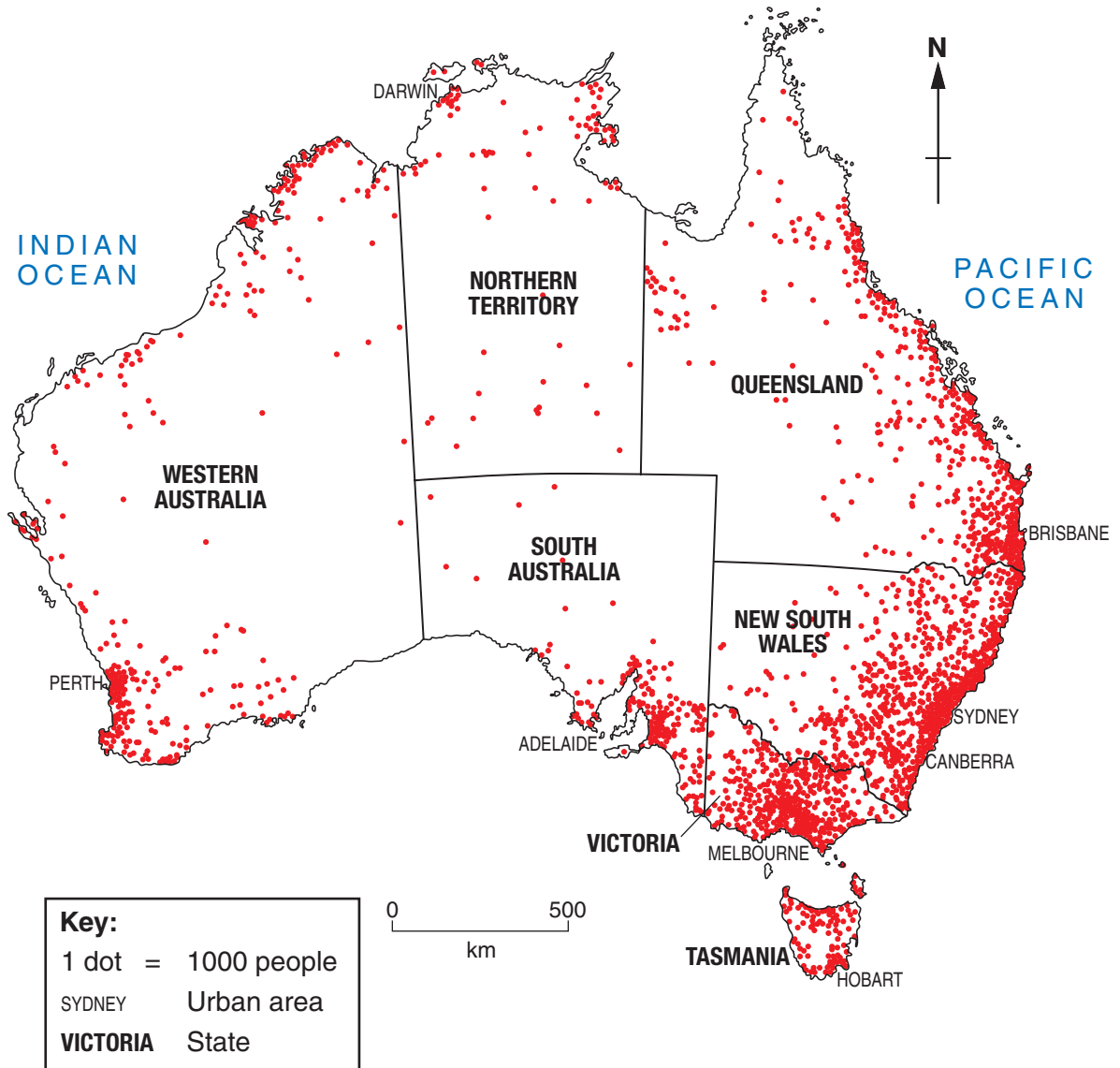
**INSTRUCTIONS TO CANDIDATES**

Do not hand in this Insert at the end of the examination. It is not required by the Examiner.

This document consists of **5** printed pages and **3** blank pages.

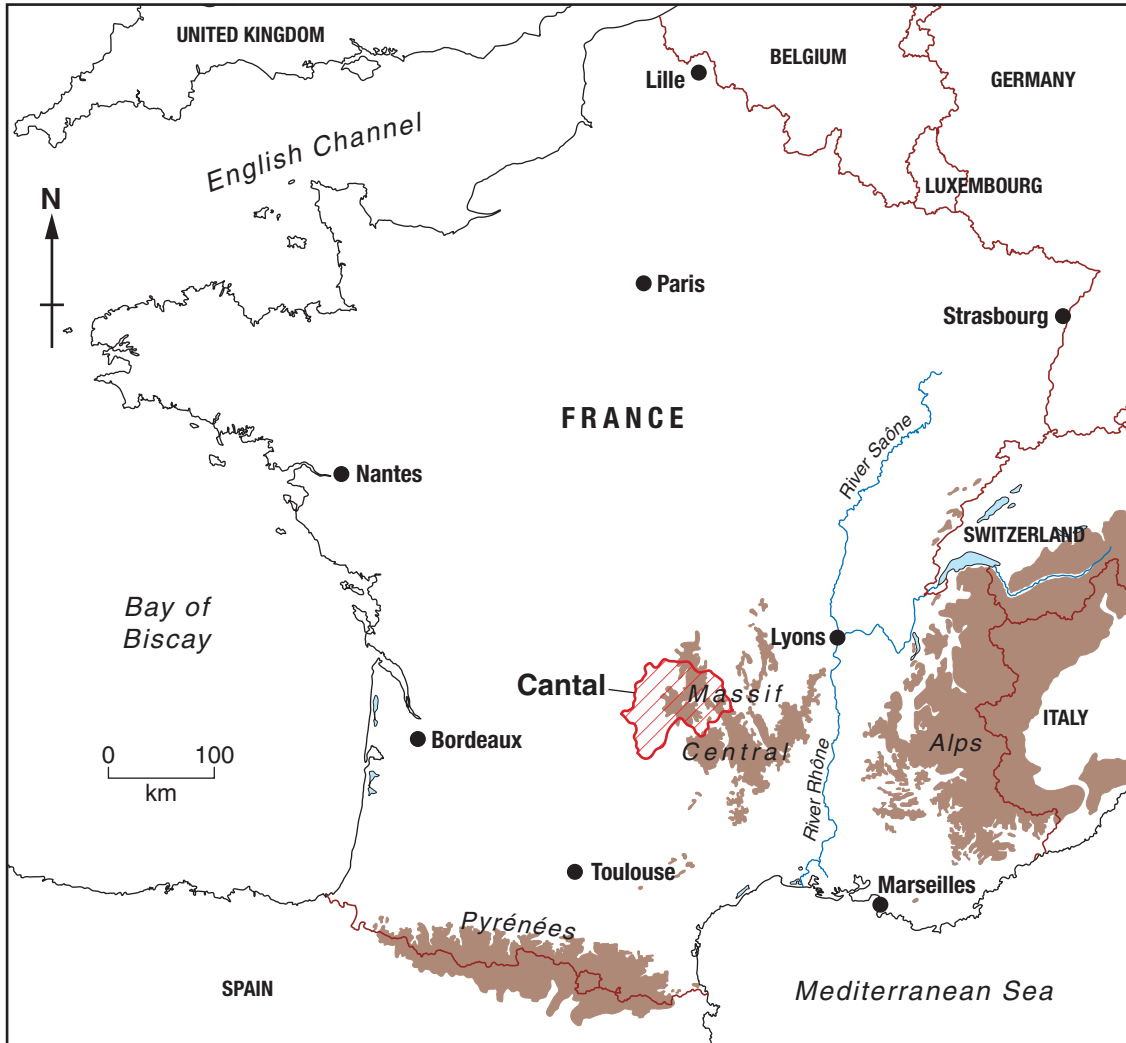


Fig. 1 The distribution of population in Australia, 2005



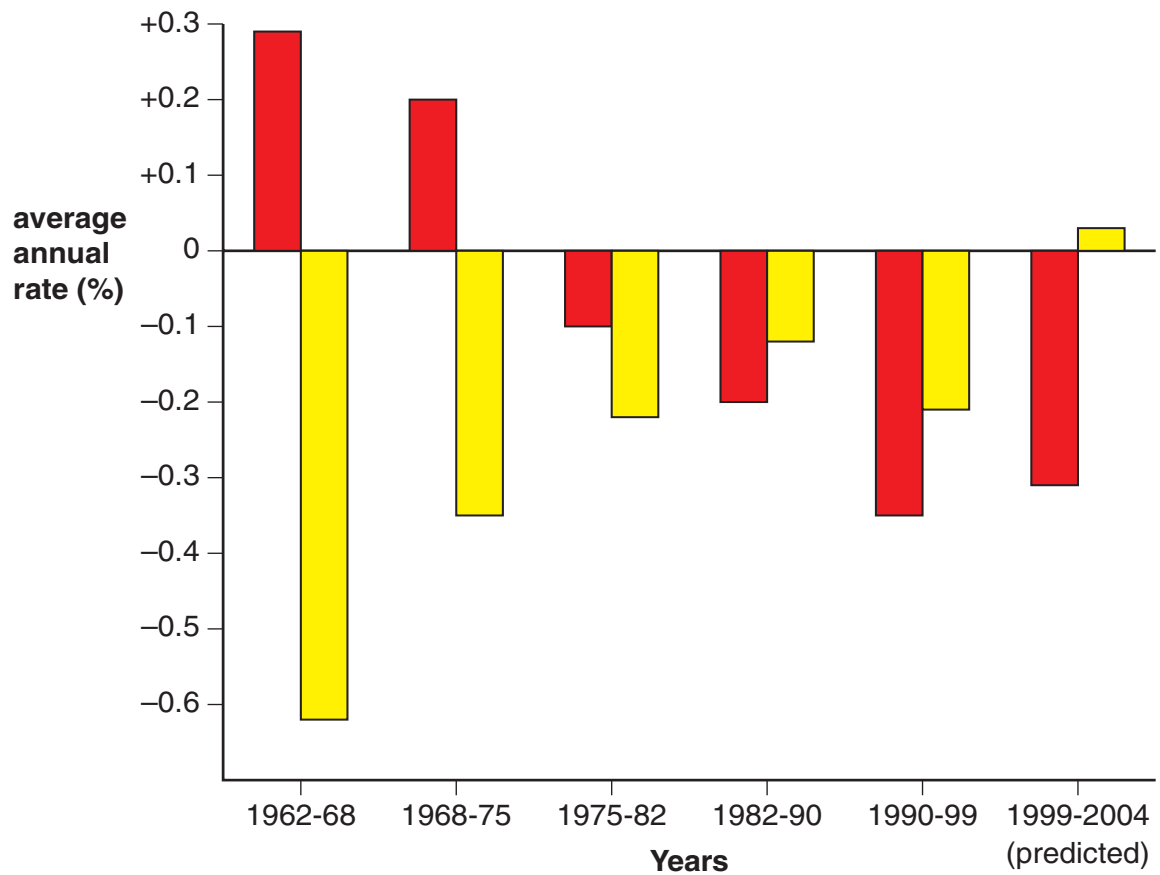
Source: Australian Bureau of Statistics

Fig. 2 The location of Cantal

**Key:**

- large urban area
- International boundary
- ▨ boundary of Cantal
- land over 1000m

**Fig. 3 Changes in net migration and natural increase/decrease in Cantal, 1962–2004**



**Key:**

- net migration
- natural increase/decrease

Source: French Population Census, March 1999





---

*Copyright Acknowledgements*

- Fig. 1            Source: Year Book Australia, 2004, Australian Bureau of Statistics, [www.abs.gov.au](http://www.abs.gov.au)  
Fig. 3            Source: French Population Census, March 1999, [www.recensement.insee.fr](http://www.recensement.insee.fr)  
OS Map          Reproduced by permission of Ordnance Survey on behalf of HMSO © Crown copyright 2008. All rights reserved. Ordnance Survey Licence number 100043707.

Permission to reproduce items where third-party owned material protected by copyright is included has been sought and cleared where possible. Every reasonable effort has been made by the publisher (OCR) to trace copyright holders, but if any items requiring clearance have unwittingly been included, the publisher will be pleased to make amends at the earliest possible opportunity.

OCR is part of the Cambridge Assessment Group. Cambridge Assessment is the brand name of University of Cambridge Local Examinations Syndicate (UCLES), which is itself a department of the University of Cambridge.