

Write your name here

Surname

Other names

**Pearson Edexcel**  
**International**  
**Advanced Level**

Centre Number

--	--	--	--	--

Candidate Number

--	--	--	--

# Geography

**International Advanced Subsidiary**  
**Paper 2: Geographical Investigations**

Wednesday 10 January 2018 – Afternoon

**Time: 1 hour 30 minutes**

Paper Reference

**WGE02/01**

**You must have:**

Resource Booklet (enclosed)

Total Marks

--

## Instructions

- Use **black** ink or ball-point pen.
- **Fill in the boxes** at the top of this page with your name, centre number and candidate number.
- Answer **all** questions in Sections A and B.
- In Section C answer **EITHER** Question 4 **OR** Question 5.
- Answer the questions in the spaces provided  
– *there may be more space than you need.*
- Calculators may be used.

## Information

- The total mark for this paper is 60.
- The marks for **each** question are shown in brackets  
– *use this as a guide as to how much time to spend on each question.*

## Advice

- Read each question carefully before you start to answer it.
- Check your answers if you have time at the end.

Turn over ►

P54978A

©2018 Pearson Education Ltd.

1/1/1/1/1/1



Pearson

**SECTION A**  
**CROWDED COASTS**

**Answer ALL questions in this section. Write your answers in the spaces provided.**

**1** Study Figure 1.

(a) (i) Identify the parts of the littoral zone in Boxes A and B on Figure 1. (2)

A .....

B .....

(ii) Explain how the process of attrition affects beach sediment. (2)

.....

.....

.....

.....

DO NOT WRITE IN THIS AREA

DO NOT WRITE IN THIS AREA

DO NOT WRITE IN THIS AREA

DO NOT WRITE IN THIS AREA

DO NOT WRITE IN THIS AREA

DO NOT WRITE IN THIS AREA



(b) Examine how the value of coastal ecosystem services is threatened by human activity.

(8)

---

---

---

---

---

---

---

---

---

---

---

---

---

---

---

---

---

---

---

---

---

---

---

---

(Total for Question 1 = 12 marks)

DO NOT WRITE IN THIS AREA

DO NOT WRITE IN THIS AREA

DO NOT WRITE IN THIS AREA

DO NOT WRITE IN THIS AREA

DO NOT WRITE IN THIS AREA

DO NOT WRITE IN THIS AREA



P 5 4 9 7 8 A 0 3 1 6

**URBAN PROBLEMS, PLANNING AND REGENERATION**

**2** Study Figure 2.

(a) (i) Identify **two** characteristics of the traffic flow data shown.

(2)

1 .....

.....

2 .....

.....

(ii) Explain **one** way in which a named infrastructure project has reduced urban transport problems.

(2)

Named infrastructure project .....

.....

.....

.....

.....

DO NOT WRITE IN THIS AREA

DO NOT WRITE IN THIS AREA

DO NOT WRITE IN THIS AREA

DO NOT WRITE IN THIS AREA

DO NOT WRITE IN THIS AREA

DO NOT WRITE IN THIS AREA



(b) Assess the challenges of providing housing in rapidly growing urban areas.

(8)

DO NOT WRITE IN THIS AREA

DO NOT WRITE IN THIS AREA

DO NOT WRITE IN THIS AREA

DO NOT WRITE IN THIS AREA

DO NOT WRITE IN THIS AREA

DO NOT WRITE IN THIS AREA

DO NOT WRITE IN THIS AREA

DO NOT WRITE IN THIS AREA

DO NOT WRITE IN THIS AREA

DO NOT WRITE IN THIS AREA

DO NOT WRITE IN THIS AREA

DO NOT WRITE IN THIS AREA

DO NOT WRITE IN THIS AREA

DO NOT WRITE IN THIS AREA

DO NOT WRITE IN THIS AREA

DO NOT WRITE IN THIS AREA

DO NOT WRITE IN THIS AREA

DO NOT WRITE IN THIS AREA

DO NOT WRITE IN THIS AREA

DO NOT WRITE IN THIS AREA

DO NOT WRITE IN THIS AREA

DO NOT WRITE IN THIS AREA

DO NOT WRITE IN THIS AREA

DO NOT WRITE IN THIS AREA

DO NOT WRITE IN THIS AREA

(Total for Question 2 = 12 marks)

**TOTAL FOR SECTION A = 24 MARKS**



**SECTION B**

**COMPULSORY FIELDWORK SECTION**

**Answer ALL questions in this section. Write your answers in the spaces provided.**

**3** You have undertaken geography fieldwork as part of your course.

Use this experience to answer Question 3.

State the title or question of your fieldwork investigation:

.....  
.....

(a) Explain how **one** geographical concept, theory or model, helped you develop the focus of your fieldwork investigation.

(3)

.....  
.....  
.....  
.....  
.....  
.....

(b) Explain how you used **one** quantitative data collection method in your fieldwork investigation.

(3)

.....  
.....  
.....  
.....  
.....  
.....

DO NOT WRITE IN THIS AREA

DO NOT WRITE IN THIS AREA

DO NOT WRITE IN THIS AREA

DO NOT WRITE IN THIS AREA

DO NOT WRITE IN THIS AREA

DO NOT WRITE IN THIS AREA



(c) Explain how you designed your fieldwork investigation to minimise data collection errors.

(6)

Area with horizontal dotted lines for writing the answer.

DO NOT WRITE IN THIS AREA

DO NOT WRITE IN THIS AREA

DO NOT WRITE IN THIS AREA

DO NOT WRITE IN THIS AREA

DO NOT WRITE IN THIS AREA

DO NOT WRITE IN THIS AREA



(d) Evaluate the success of the techniques used to present and analyse your fieldwork and research data.

(12)

Area with horizontal dotted lines for writing.

DO NOT WRITE IN THIS AREA

DO NOT WRITE IN THIS AREA

DO NOT WRITE IN THIS AREA

DO NOT WRITE IN THIS AREA

DO NOT WRITE IN THIS AREA

DO NOT WRITE IN THIS AREA





DO NOT WRITE IN THIS AREA

DO NOT WRITE IN THIS AREA

DO NOT WRITE IN THIS AREA

DO NOT WRITE IN THIS AREA

DO NOT WRITE IN THIS AREA

DO NOT WRITE IN THIS AREA

Area with horizontal dotted lines for writing.

**(Total for Question 3 = 24 marks)**

**TOTAL FOR SECTION B = 24 MARKS**



SECTION C

GEOGRAPHICAL FIELDWORK AND SKILLS

Answer ONE question in this section – EITHER Question 4 OR Question 5.  
Write your answers in the spaces provided.

Some questions must be answered with a cross in a box ☒. If you change your mind about an answer, put a line through the box ☒ and then mark your new answer with a cross ☒.

Investigating Crowded Coasts

If you answer Question 4 put a cross in the box  .

4

A group of students studied erosion risk as part of a study into managing coastal change.

They started their investigation by researching maps (Figure 3a) and photos (Figure 3b) of the area they intended to study.

(a) Study Figures 3a and 3b.

State **three** ways the students could use this information to help them plan their investigation.

(3)

1 .....  
.....

2 .....  
.....

3 .....  
.....

DO NOT WRITE IN THIS AREA

DO NOT WRITE IN THIS AREA

DO NOT WRITE IN THIS AREA

DO NOT WRITE IN THIS AREA

DO NOT WRITE IN THIS AREA

DO NOT WRITE IN THIS AREA



(b) Study Figure 3c.

The students used the recording sheet (Figure 3c) to investigate cliff stability and coastal erosion risk at different sites.

(i) Calculate the total number of recordings for the evidence of water in Figure 3c.

(1)

(ii) Identify the modal class for the weathering results in Figure 3c.

(1)

- A Extremely weathered
- B Very weathered
- C Some weathering
- D Slightly weathered

(iii) Explain **two** ways in which the design of the recording sheet, shown in Figure 3c, could be improved.

(4)

1 .....

.....

.....

.....

2 .....

.....

.....

.....



(c) Explain **one** way that GIS can be used to help analyse the results from coastal fieldwork.

(3)

.....

.....

.....

.....

.....

.....

(Total for Question 4 = 12 marks)

DO NOT WRITE IN THIS AREA

DO NOT WRITE IN THIS AREA

DO NOT WRITE IN THIS AREA

DO NOT WRITE IN THIS AREA

DO NOT WRITE IN THIS AREA

DO NOT WRITE IN THIS AREA



## Investigating Urban Problems, Planning and Regeneration

If you answer Question 5 put a cross in the box  .

5

A group of students studied the impacts of a regeneration scheme as part of a study into urban regeneration.

They started their investigation by researching maps (Figure 4a) and photos (Figure 4b) of the area they intended to study.

(a) Study Figures 4a and 4b.

State **three** ways the students could use this information to help them plan their investigation.

(3)

1

2

3

(b) Study Figure 4c.

The students used the recording sheet (Figure 4c) as a way of measuring urban housing quality.

(i) Calculate the total number of recordings for the evidence of litter in Figure 4c.

(1)

(ii) Identify the modal class for the building weathering results in Figure 4c.

(1)

- A** Extremely weathered
- B** Very weathered
- C** Some weathering
- D** Slightly weathered



P 5 4 9 7 8 A 0 1 3 1 6

(iii) Explain **two** ways in which the design of the recording sheet, shown in Figure 4c, could be improved.

(4)

1 .....

.....

.....

.....

2 .....

.....

.....

.....

(c) Explain **one** way that GIS can be used to help analyse the results from urban fieldwork.

(3)

.....

.....

.....

.....

.....

.....

**(Total for Question 5 = 12 marks)**

**TOTAL FOR SECTION C = 12 MARKS**  
**TOTAL FOR PAPER = 60 MARKS**

DO NOT WRITE IN THIS AREA

DO NOT WRITE IN THIS AREA

DO NOT WRITE IN THIS AREA

DO NOT WRITE IN THIS AREA

DO NOT WRITE IN THIS AREA

DO NOT WRITE IN THIS AREA



DO NOT WRITE IN THIS AREA

DO NOT WRITE IN THIS AREA

DO NOT WRITE IN THIS AREA

DO NOT WRITE IN THIS AREA

DO NOT WRITE IN THIS AREA

DO NOT WRITE IN THIS AREA

**BLANK PAGE**



P 5 4 9 7 8 A 0 1 5 1 6

DO NOT WRITE IN THIS AREA

DO NOT WRITE IN THIS AREA

DO NOT WRITE IN THIS AREA

**BLANK PAGE**





**Pearson Edexcel**  
International Advanced Level

# Geography

**International Advanced Subsidiary  
Paper 2: Geographical Investigations**

Wednesday 10 January 2018 – Afternoon  
**Resource Booklet**

Paper Reference  
**WGE02/01**

**Do not return this Resource Booklet with the question paper.**

*Turn over* ►

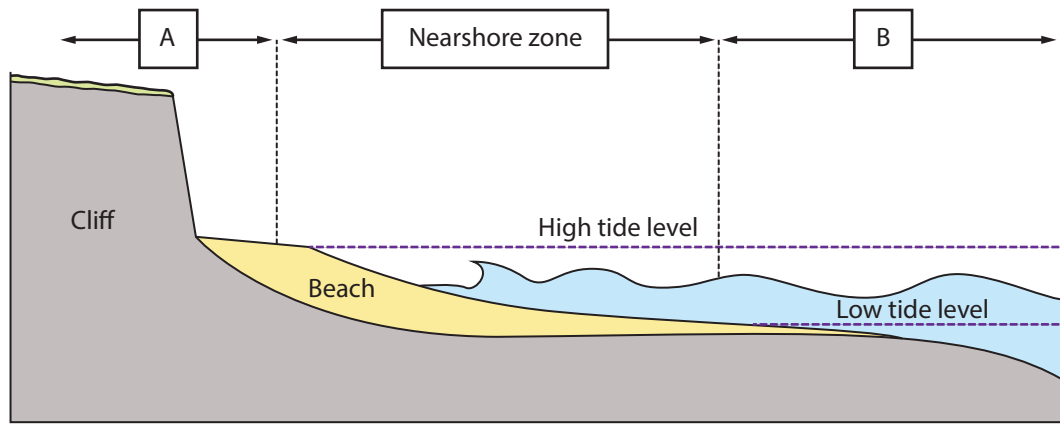
**P54978A**

©2018 Pearson Education Ltd.

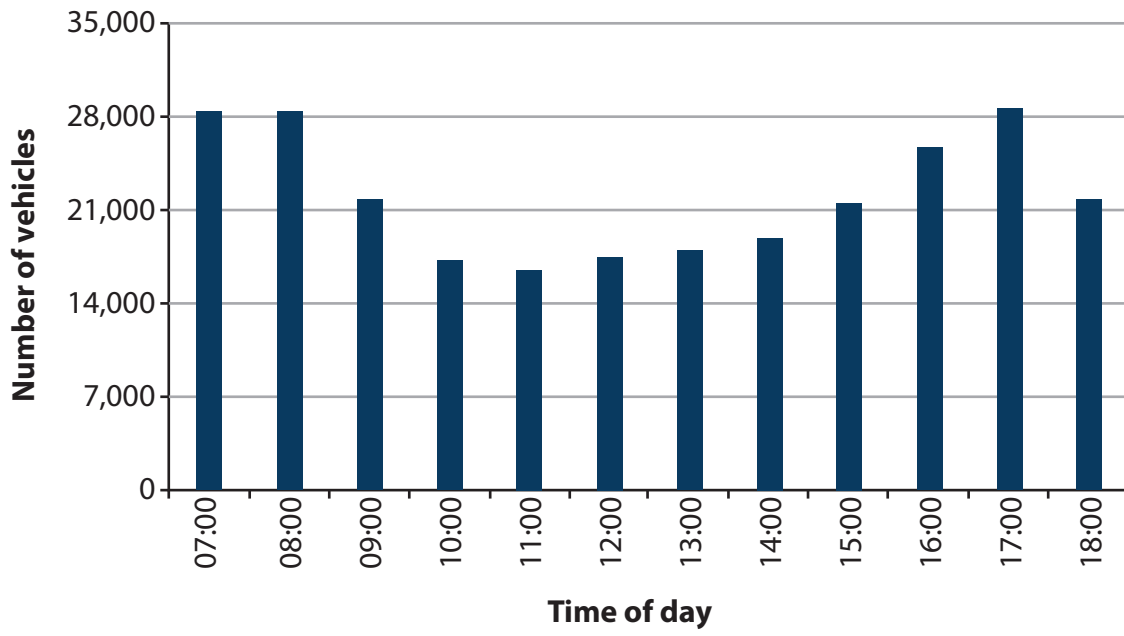
1/1/1/1/1/1



**Pearson**

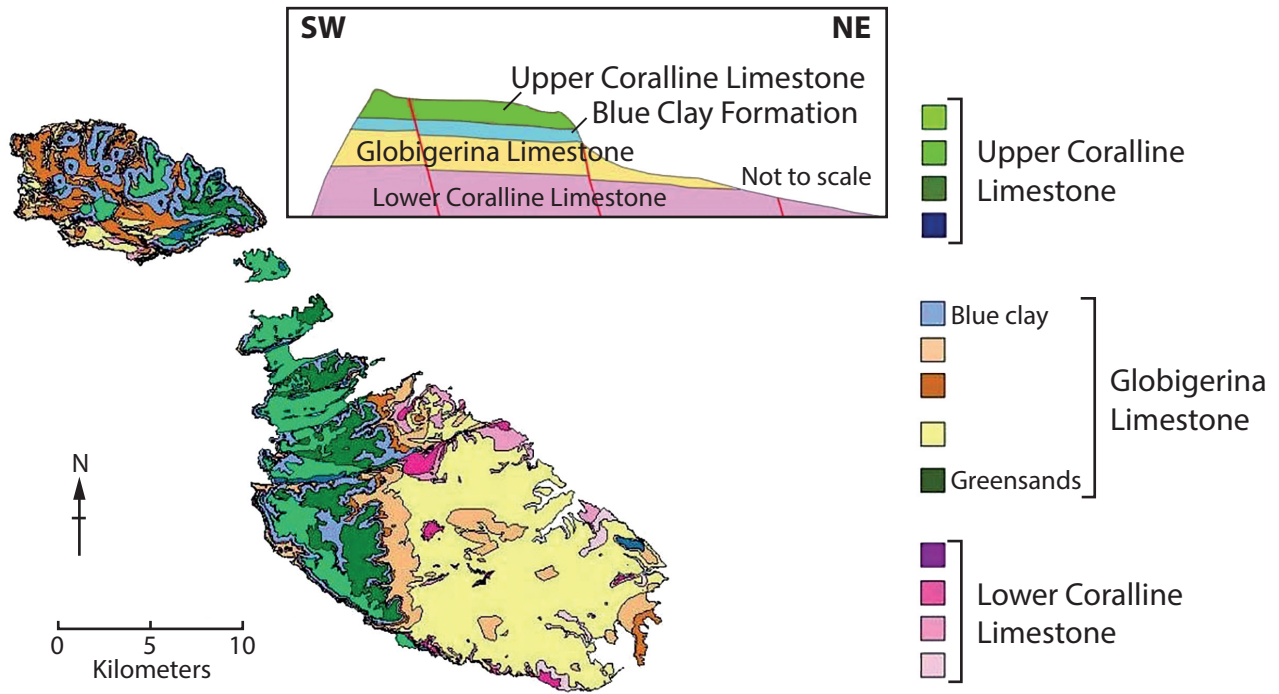


**Figure 1**  
**The coastal littoral zone**



**Figure 2**

**Traffic flow data for a city in North America between 07:00 and 18:00**



**Figure 3a**

**A geology map and cross-section of Malta found online by the students during their planning**



**Figure 3b**

**A photograph of a coastline in Malta from a tourist website**

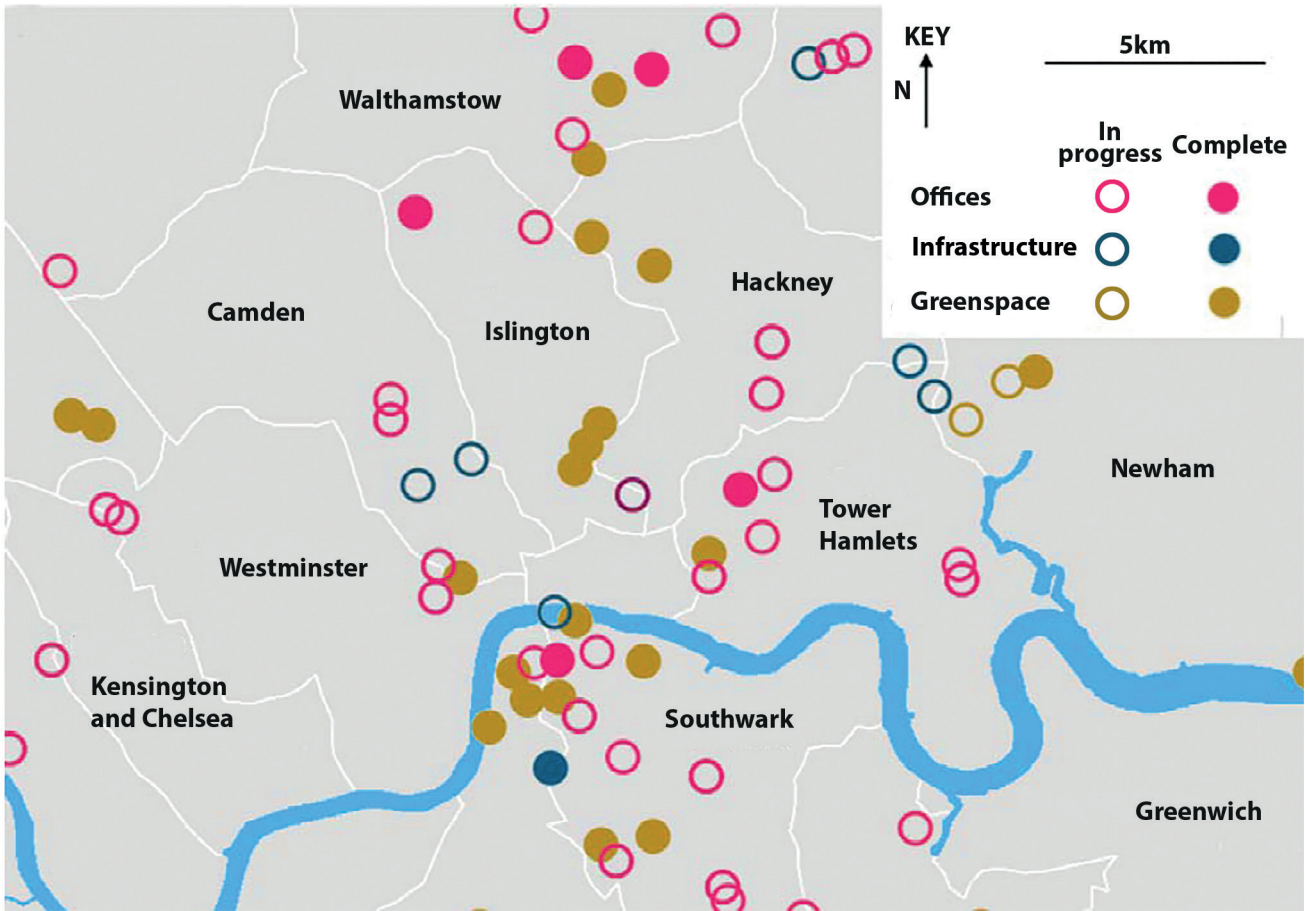
<b>Weathering</b>	Extremely weathered	Very weathered	Some weathering	Slightly weathered	Not weathered	Total
<b>Number recorded</b>	4	9	11	7	3	<b>34</b>

<b>Evidence of water</b>	Flowing water	Wet	Very wet	Wetter	Dry	Total
<b>Number recorded</b>	12	9	13	2	2	<b>?</b>

<b>Cliff height (metres)</b>	>30	30-15	14-5	4-2	<2	Total
<b>Number recorded</b>	0	0	15	20	4	<b>39</b>

**Figure 3c**

**Cliff survey recording sheet with results from group data**



**Figure 4a**

**A map extract of regeneration projects in London found online by the students during their planning**



**Figure 4b**

**A photograph of urban regeneration posted online by a tourist**

<b>Building weathering</b>	Extremely weathered	Very weathered	Some weathering	Slightly weathered	Not weathered	Total
<b>Number recorded</b>	4	9	11	7	3	<b>34</b>

<b>Amount of litter</b>	Everywhere	Found in piles	Scattered	Very little	None	Total
<b>Number recorded</b>	12	9	13	2	2	<b>?</b>

<b>Noise (descriptors)</b>	Really loud	Very loud	Loud	Moderate	Quiet	Total
<b>Number recorded</b>	0	0	15	20	4	<b>39</b>

**Figure 4c**

**Urban housing quality recording sheet with results from group data**



**BLANK PAGE**

Every effort has been made to contact copyright holders to obtain their permission for the use of copyright material. Pearson Education Ltd. will, if notified, be happy to rectify any errors or omissions and include any such rectifications in future editions.

