

Fig. 1 for Question 2

A tropical landform in an area of granite



Key
0 100
metres

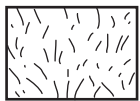
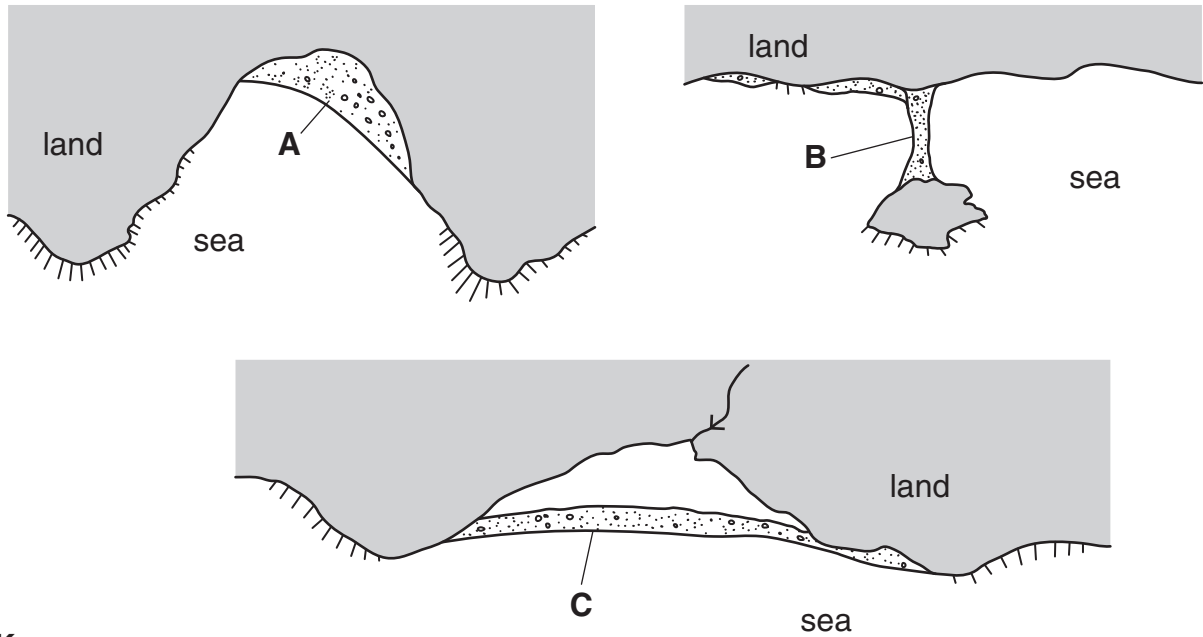
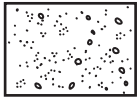
 tropical vegetation

Fig. 2 for Question 4

Landforms A, B and C developed by wave action and coastal deposition processes



Key



Coastal sediment

Photograph A for Question 5

An approaching tornado



Photograph B for Question 5

The hazardous impact of a tornado



Photograph C for Question 8

Landforms in a hot arid environment



BLANK PAGE

Permission to reproduce items where third-party owned material protected by copyright is included has been sought and cleared where possible. Every reasonable effort has been made by the publisher (UCLES) to trace copyright holders, but if any items requiring clearance have unwittingly been included, the publisher will be pleased to make amends at the earliest possible opportunity.

To avoid the issue of disclosure of answer-related information to candidates, all copyright acknowledgements are reproduced online in the Cambridge International Examinations Copyright Acknowledgements Booklet. This is produced for each series of examinations and is freely available to download at www.cie.org.uk after the live examination series.

Cambridge International Examinations is part of the Cambridge Assessment Group. Cambridge Assessment is the brand name of University of Cambridge Local Examinations Syndicate (UCLES), which is itself a department of the University of Cambridge.