

---

**GEOGRAPHY**

**9696/12**

Paper 1 Core Geography

**May/June 2014**

INSERT

**3 hours**



---

**READ THESE INSTRUCTIONS FIRST**

This Insert contains all the Figures referred to in the questions.

---

This document consists of **7** printed pages and **1** blank page.

Fig. 1A for Question 1

A storm hydrograph

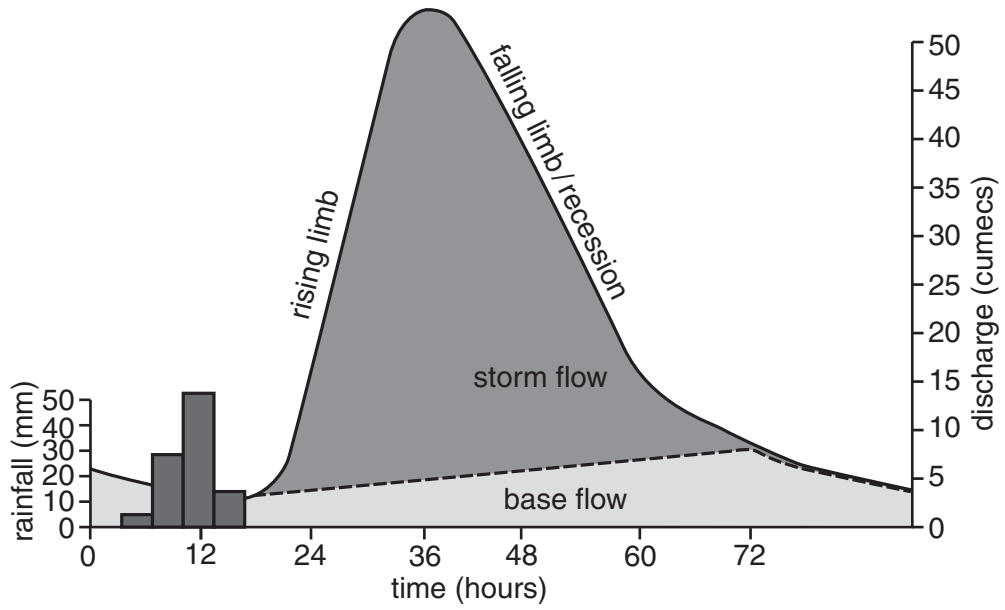


Fig. 1B for Question 1

A storm hydrograph

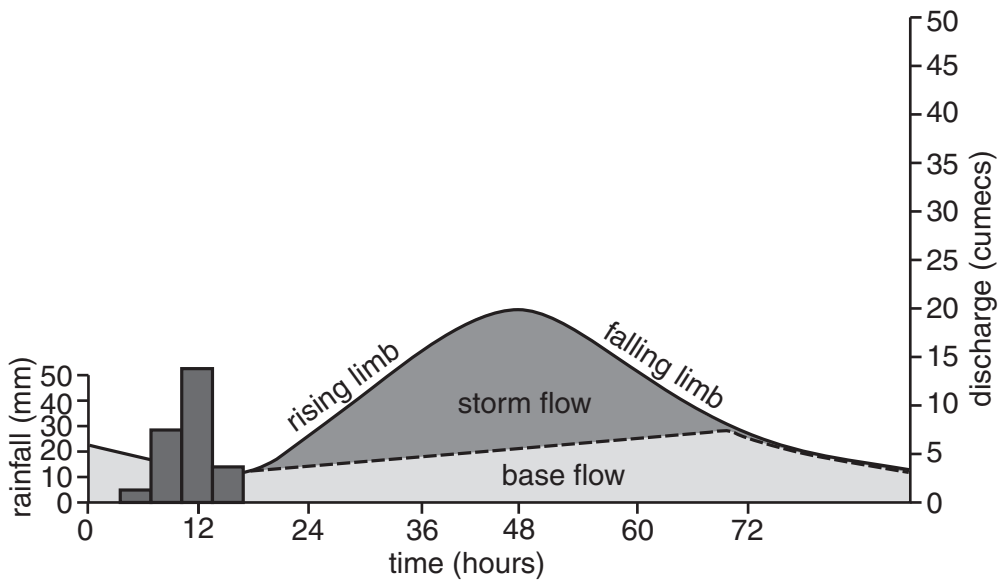
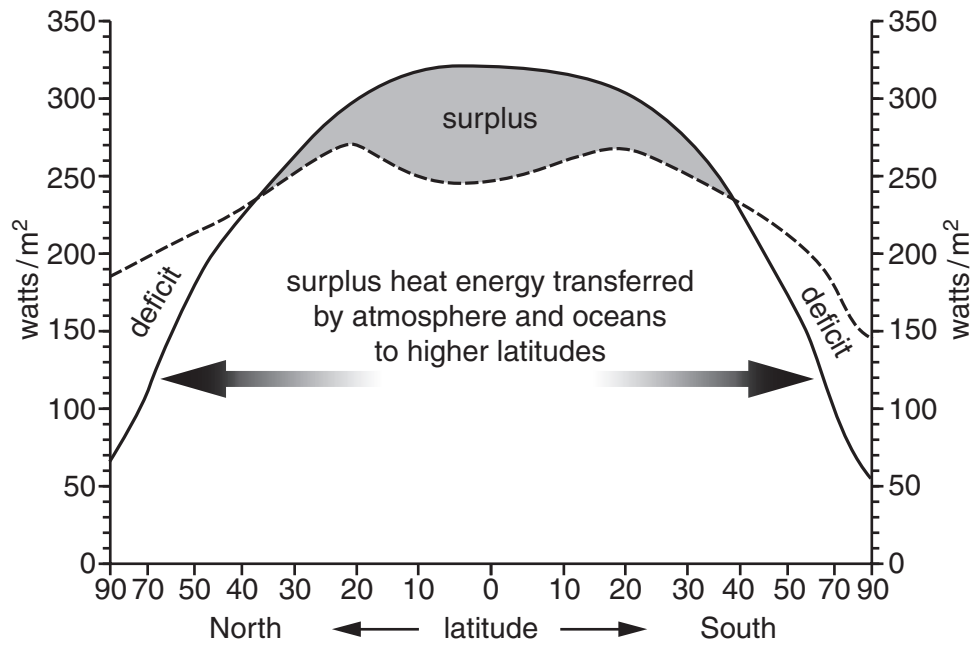


Fig. 2 for Question 2

## Annual radiation balance of the Earth



Key	
—	net shortwave solar radiation
- - -	net longwave Earth radiation

Fig. 3 for Question 3

A classification of some types of mass movement

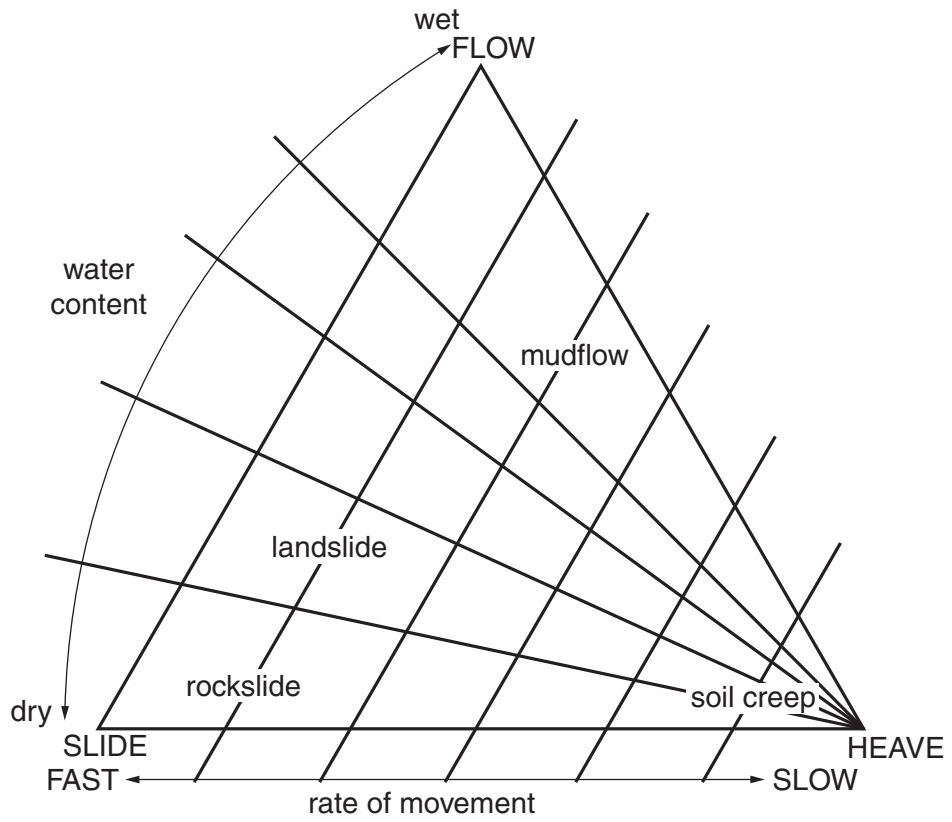
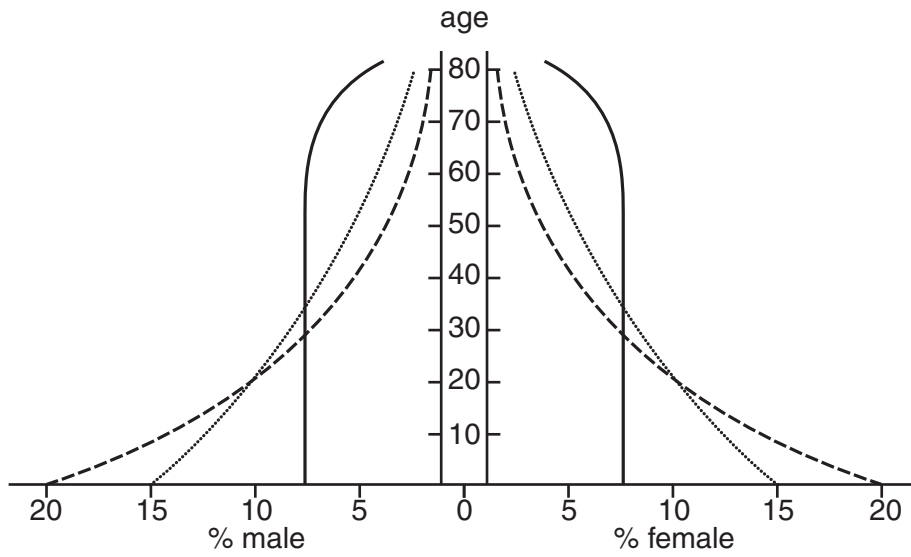


Fig. 4 for Question 4

## The impact of different levels of fertility on population structure



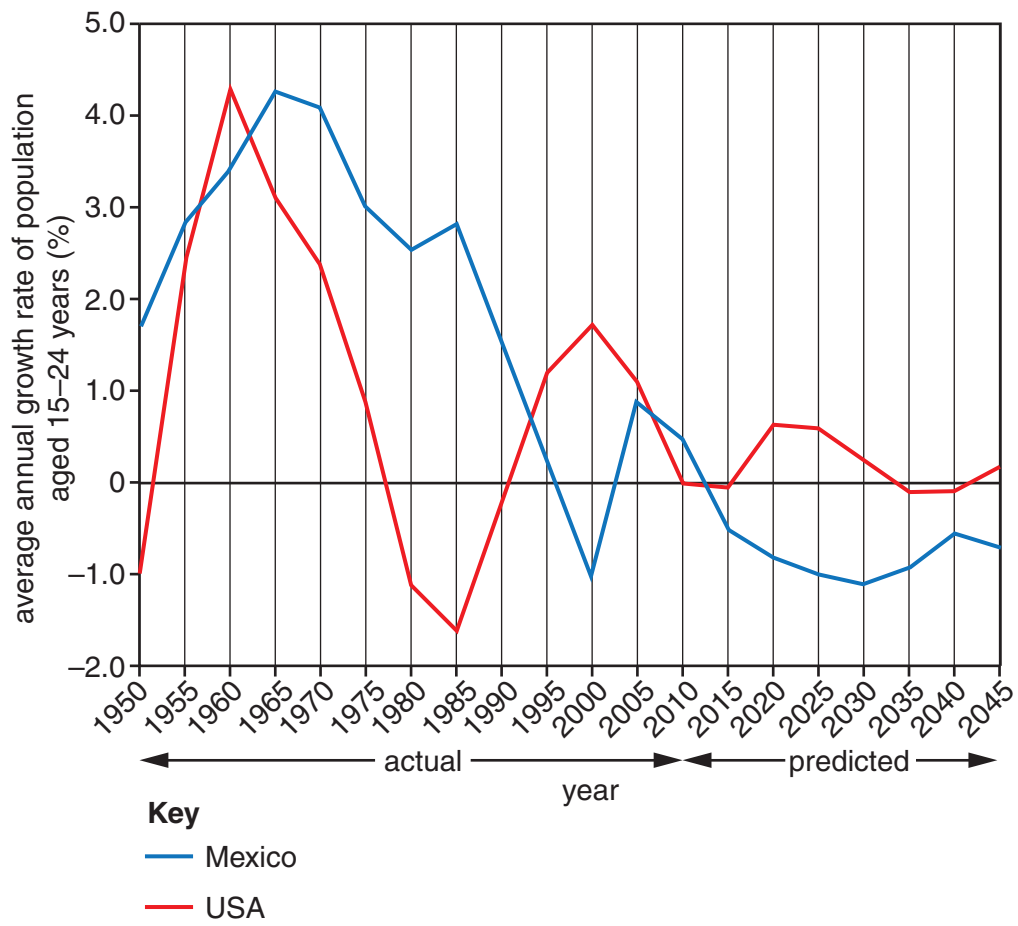
This assumes that mortality is low and that there is no migration.

**Key**

- low fertility
- ..... medium fertility
- high fertility

Fig. 5 for Question 5

Average annual growth rate of population aged 15–24 years for Mexico and the USA, 1950–2045 (actual and predicted)



**Fig. 6 for Question 6**

**Content removed due to copyright restrictions.**

**BLANK PAGE**

---

*Copyright Acknowledgements:*

- Question 4 Fig. 4 © John R Weeks; *Population: An Introduction to Concepts and Issues*; Wadsworth Publishing Company; 1996.  
Question 5 Fig. 5 © Gregory B Weeks & John R Weeks; *Irresistible Forces; Latin American Migration to the United States and its Effects on the South*; University of New Mexico Press; 2009.  
Question 6 Fig.6 © Gideon S Golany Et Al; *Japanese Urban Environment*; Elsevier Science LTD; 1998.

Permission to reproduce items where third-party owned material protected by copyright is included has been sought and cleared where possible. Every reasonable effort has been made by the publisher (UCLES) to trace copyright holders, but if any items requiring clearance have unwittingly been included, the publisher will be pleased to make amends at the earliest possible opportunity.

Cambridge International Examinations is part of the Cambridge Assessment Group. Cambridge Assessment is the brand name of University of Cambridge Local Examinations Syndicate (UCLES), which is itself a department of the University of Cambridge.