



UNIVERSITY OF CAMBRIDGE INTERNATIONAL EXAMINATIONS  
General Certificate of Education Advanced Subsidiary Level and Advanced Level

---

**GEOGRAPHY**

**9696/21**

Paper 2 Advanced Physical Options

**May/June 2011**

INSERT

**1 hour 30 minutes**

---

**READ THESE INSTRUCTIONS FIRST**

This Insert contains all the Figures and the Photograph referred to in the questions.

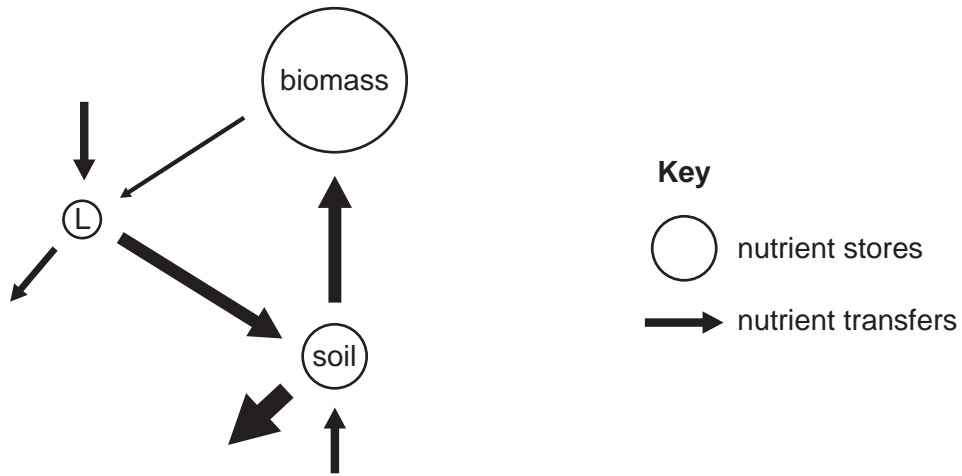
---

This document consists of **4** printed pages.



Fig. 1 for Question 1

Movement of nutrients for tropical rainforest



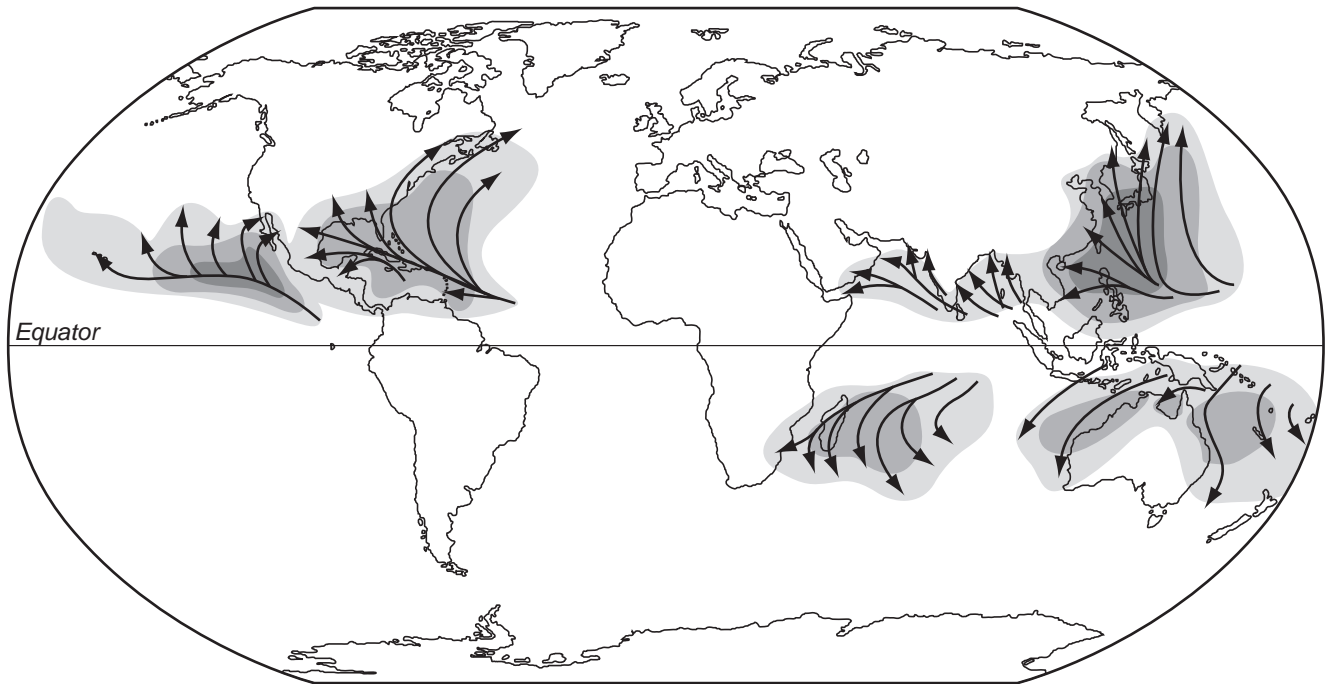
Photograph A for Question 3

Coral reefs in Antigua



Fig. 2 for Question 5

Distribution of areas affected by hurricanes (tropical storms)



Key





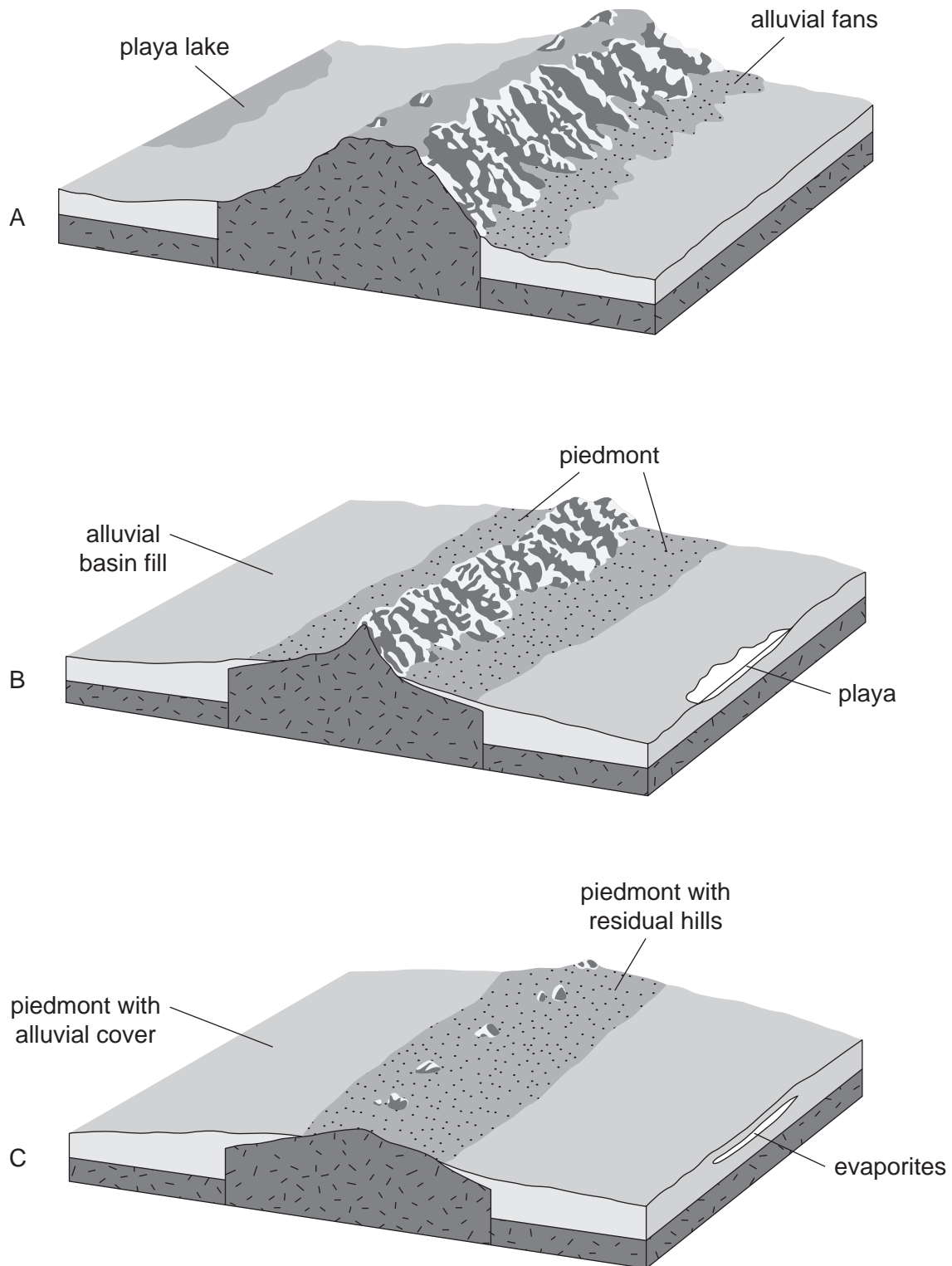
-  0.1–0.9 per year
-  1.0–2.9 per year
-  3.0 and more per year
-  average tracks

Fig. 3 for Question 7

## Formation of a desert piedmont zone



Permission to reproduce items where third-party owned material protected by copyright is included has been sought and cleared where possible. Every reasonable effort has been made by the publisher (UCLES) to trace copyright holders, but if any items requiring clearance have unwittingly been included, the publisher will be pleased to make amends at the earliest possible opportunity.

University of Cambridge International Examinations is part of the Cambridge Assessment Group. Cambridge Assessment is the brand name of University of Cambridge Local Examinations Syndicate (UCLES), which is itself a department of the University of Cambridge.