

Surname						Other Names					
Centre Number						Candidate Number					
Candidate Signature											

For Examiner's Use

General Certificate of Education
 January 2008
 Advanced Subsidiary Examination



GEOGRAPHY (SPECIFICATION A)
Unit 2 Core Concepts in Human Geography

GGA2

Monday 14 January 2008 9.00 am to 10.00 am

<p>For this paper you must have:</p> <ul style="list-style-type: none"> the colour insert (enclosed). <p>You may use a calculator.</p>
--

For Examiner's Use			
Question	Mark	Question	Mark
1		3	
2			
Total (Column 1)		→	
Total (Column 2)		→	
TOTAL			
Examiner's Initials			

Time allowed: 1 hour

Instructions

- Use blue or black ink or ball-point pen. You may use pencil for maps, diagrams and graphs.
- Fill in the boxes at the top of this page.
- Answer **all** questions.
- Answer the questions in the spaces provided.
- Do all rough work in this book. Cross through any work you do not want to be marked.

Information

- The maximum mark for this paper is 60.
- The marks for questions are shown in brackets.
- You will be marked on your ability to use an appropriate form and style of writing, to organise relevant information clearly and coherently, and to use specialist vocabulary where appropriate. The legibility of your handwriting and the accuracy of your spelling, punctuation and grammar will also be considered.

Answer **all** questions in the spaces provided.

- 1 (a) **Figure 1a** shows Poland's population pyramid for 2000. **Figure 1b** shows the population pyramid projected for 2050.

Figure 1a

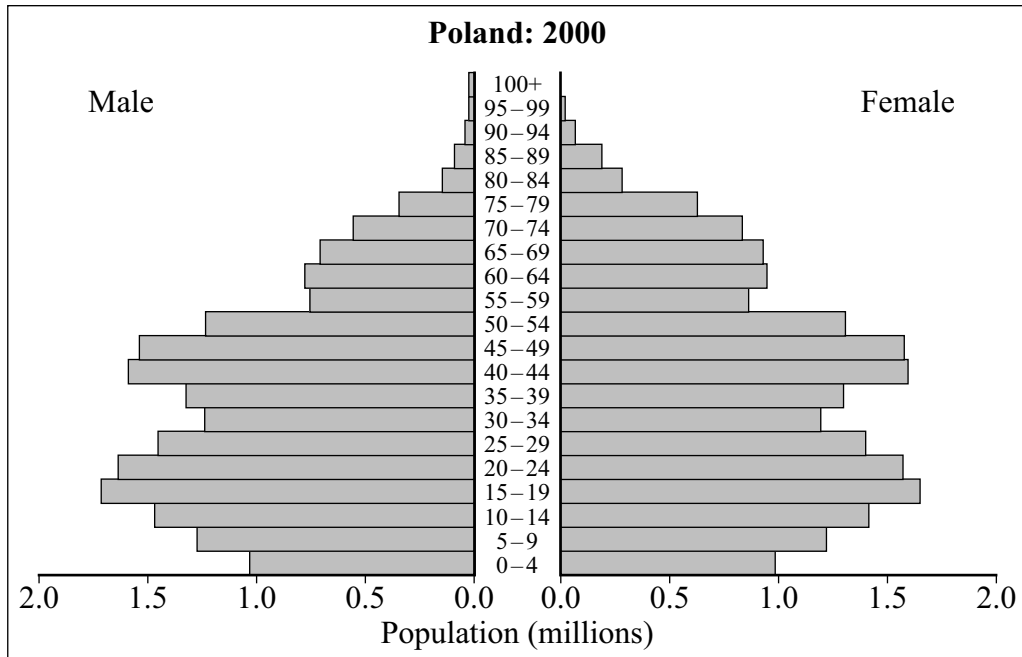
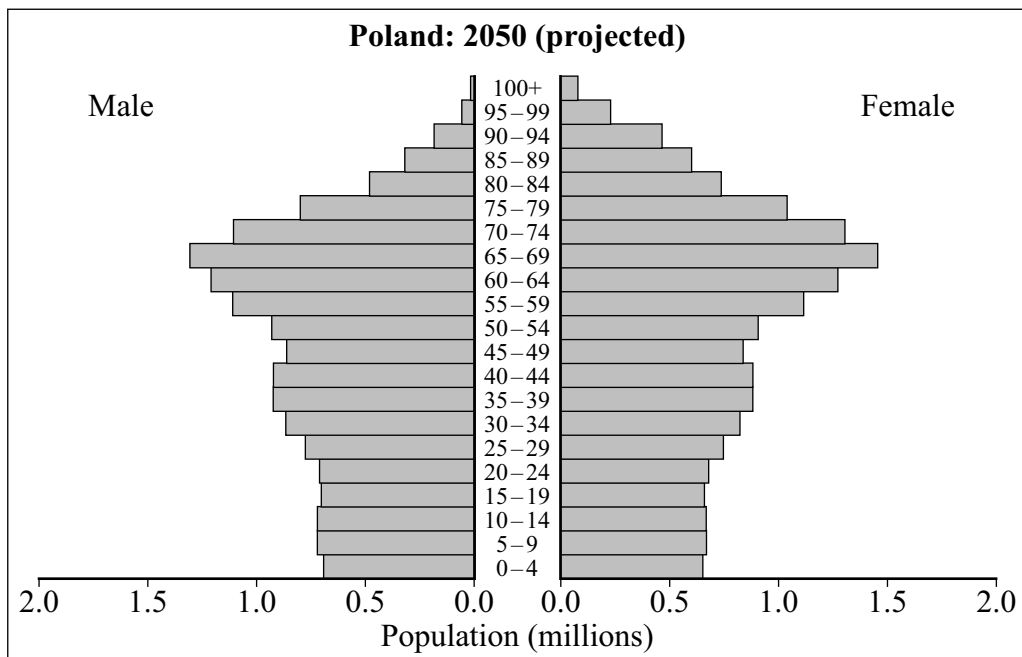


Figure 1b



- (i) With reference to **Figure 1a**, contrast the numbers of young dependants with the numbers of people in the 15–29 year age bands.

.....

.....

.....

.....

(2 marks)

- (ii) Suggest reasons for the fluctuations in the numbers of people below the age of 40 shown in **Figure 1a**.

.....

.....

.....

.....

.....

.....

(3 marks)

- (iii) Account for the projected changes in population structure between 2000 and 2050, shown by **Figures 1a** and **1b**.

.....

.....

.....

.....

.....

.....

.....

.....

.....

.....

.....

.....

(5 marks)

Question 1 continues on the next page

Turn over ►

2 (a) What is a settlement hierarchy?

.....
.....
.....
.....

(2 marks)

(b) **Figure 2** (on the insert) shows the tour schedules of two bands, Snow Patrol and Embrace, in 2006. The map in **Figure 2** shows the locations of the venues.

(i) Using the map in **Figure 2**, compare the distribution of the venues for Snow Patrol and Embrace.

.....
.....
.....
.....
.....
.....

(3 marks)

Question 2 continues on the next page

Turn over ►

(ii) How might the concepts of threshold and range help to explain the distribution of venues shown in **Figure 2**?

.....

.....

.....

.....

.....

.....

.....

.....

.....

.....

.....

.....

(5 marks)

(c) Examine the ways in which spheres of influence of settlements can be identified.

.....

.....

.....

.....

.....

.....

.....

.....

.....

.....

.....

.....

.....

.....

.....

.....

.....

.....

.....

.....

.....

.....

(10 marks)

20

Turn over for the next question

Turn over ►

3 (a) (i) **Figure 3** (on the insert) shows Fosse Park, Leicester, a retail park. Where within an urban area might the type of retail environment shown in **Figure 3** be found?

.....
.....
.....
.....

(2 marks)

(ii) Why have retail environments such as that shown in **Figure 3** increased in number in recent years?

.....
.....
.....
.....
.....
.....

(3 marks)

(b) **Figure 4** (on the insert) shows part of Chester’s city centre. Outline the costs and benefits for a major department store locating in an environment such as this.

.....
.....
.....
.....
.....
.....
.....
.....
.....
.....
.....

(5 marks)

There are no questions printed on this page

There are no questions printed on this page

There are no questions printed on this page

ACKNOWLEDGEMENT OF COPYRIGHT-HOLDERS AND PUBLISHERS

Permission to reproduce all copyright material has been applied for. In some cases, efforts to contact copyright-holders have been unsuccessful and AQA will be happy to rectify any omissions of acknowledgements in future papers if notified.

Question 1 Figure 1: US State Department
Question 2 Figure 2: SJM Concerts and Metropolis Music
Question 3 Figures 3 and 4: A J Barker

Copyright © 2008 AQA and its licensors. All rights reserved.

General Certificate of Education
January 2008
Advanced Subsidiary Examination



GEOGRAPHY (SPECIFICATION A)
Unit 2 Core Concepts in Human Geography

GGA2

Colour Insert

Turn over ►

Figure 2

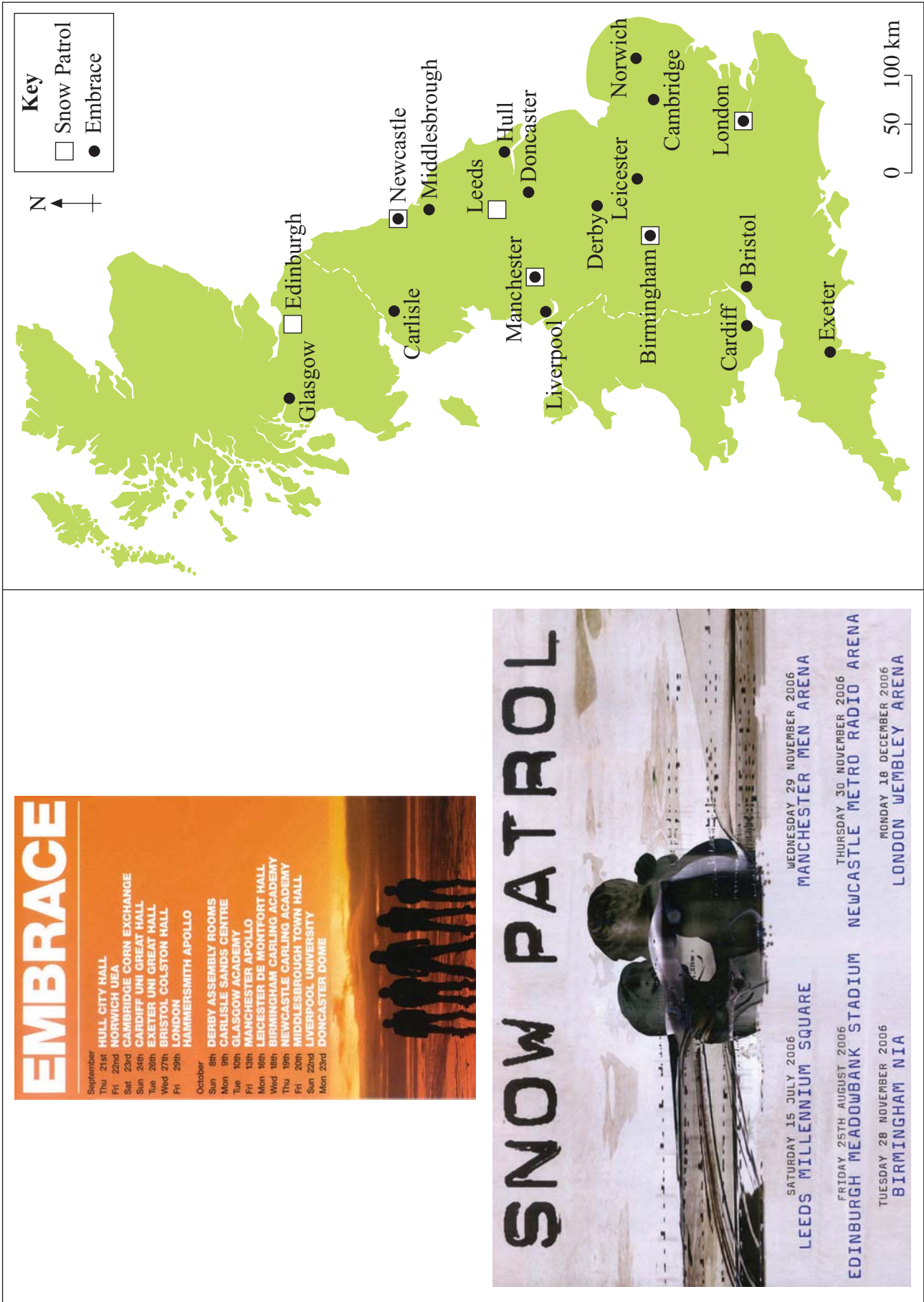


Figure 3



Figure 4

