

Surname						Other Names					
Centre Number						Candidate Number					
Candidate Signature											

Leave blank

General Certificate of Education
 January 2005
 Advanced Level Examination



GEOGRAPHY
Unit 5

GGA5

Friday 28 January 2005 Morning Session

No additional materials are required.
 You may use a calculator.

Time allowed: 1 hour 30 minutes

Instructions

- Use blue or black ink or ball-point pen.
- Fill in the boxes at the top of this page.
- Answer **three** questions in the spaces provided: **two** from **Section A** and **one** from **Section B**.
- Do all rough work in this book. Cross through any work you do not want marked.

Information

- The maximum mark for this paper is 90.
- Each question in Section A is worth 15 marks.
- Each question in Section B will be marked out of 30 and multiplied by 2 to give a mark out of 60.
- Mark allocations are shown in brackets.
- Section B of this unit assesses your understanding of the relationship between the different aspects of Geography.
- You are expected to use a calculator where appropriate.
- You will be assessed on your ability to use an appropriate form and style of writing, to organise relevant information clearly and coherently, and to use specialist vocabulary, where appropriate.
- The degree of legibility of your handwriting and the level of accuracy of your spelling, punctuation and grammar will also be taken into account.

Advice

- Where appropriate, sketch maps and diagrams should be used to illustrate answers and reference made to regional examples and case studies.
- You are advised to spend about 30 minutes on Section A and about 60 minutes on Section B.

For Examiner's Use			
Number	Mark	Number	Mark
1		4	
2		5	
3		6	
		×2	
		=	
Total (Column 1)	→		
Total (Column 2)	→		
TOTAL			
Examiner's Initials			

SECTION A

Answer **two** questions from this Section.

1 POPULATION PRESSURE AND RESOURCE MANAGEMENT

Total for this question: 15 marks

Study **Figure 1**, which shows a classification of resources.

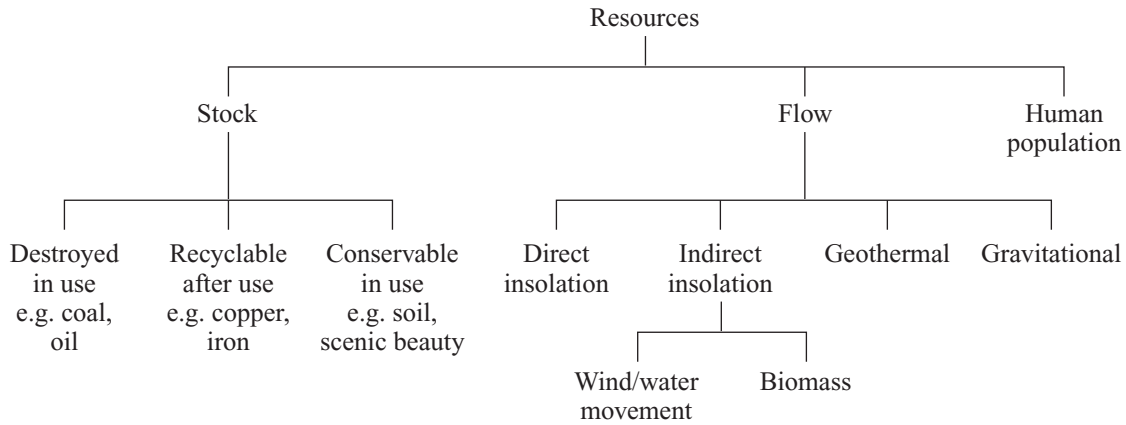


Figure 1

(a) With reference to **Figure 1** distinguish between renewable and non-renewable resources.

.....

.....

.....

.....

.....

.....

.....

.....

.....

.....

(4 marks)

(b) Explain why the definition of a resource changes over time.

.....

.....

.....

.....

.....

.....

.....

.....

.....

(4 marks)

(c) With reference to either timber **or** water resources comment on their potential to be developed sustainably.

.....

.....

.....

.....

.....

.....

.....

.....

.....

.....

.....

.....

.....

.....

.....

.....

.....

.....

.....

.....

.....

.....

(7 marks)

TURN OVER FOR THE NEXT QUESTION

Turn over ►

2 MANAGING CITIES – CHALLENGES AND ISSUES

Total for this question: 15 marks

Study **Figure 2**, which is a simplified map showing the land use pattern in and around a typical British city centre in 2004.

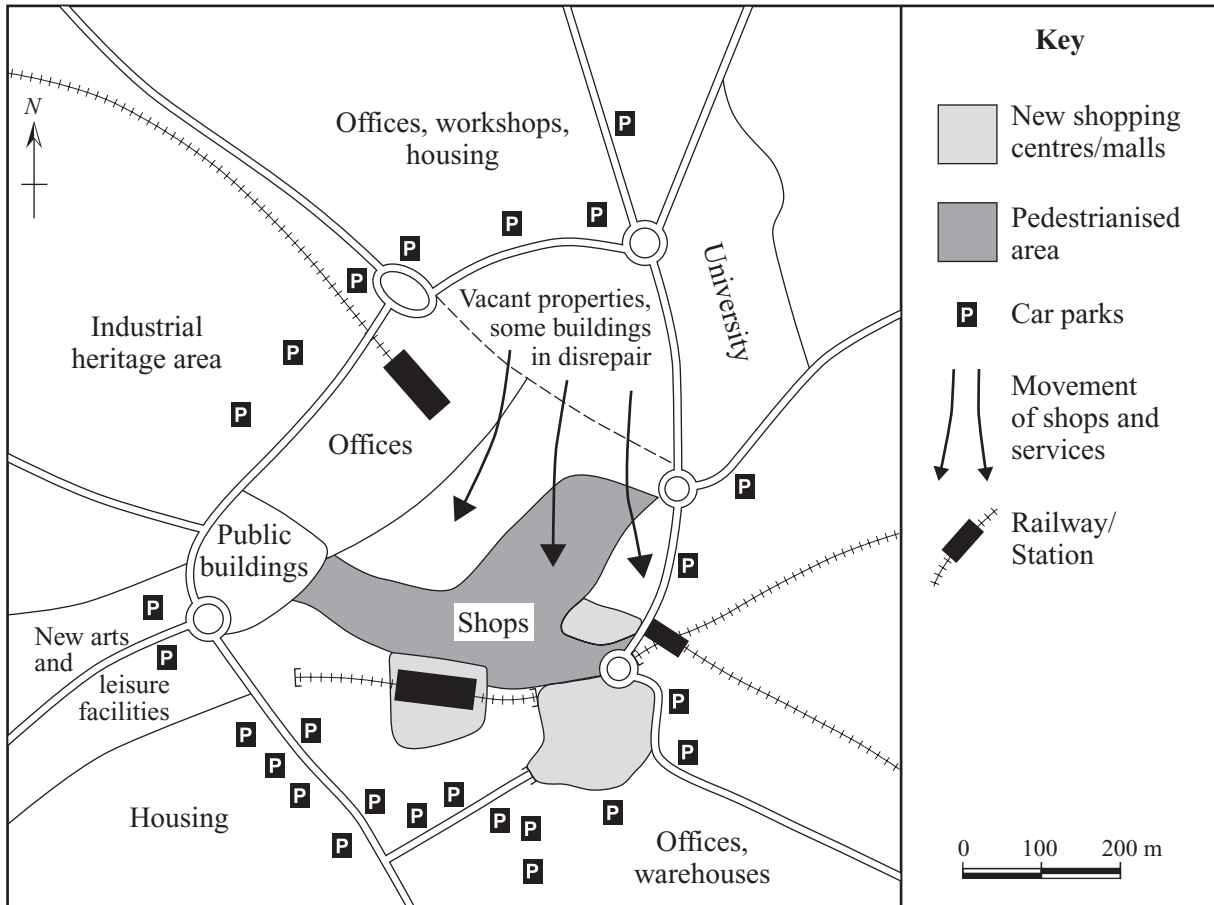


Figure 2

(a) Using evidence from **Figure 2** distinguish between areas of *discard* and *assimilation*.

.....

.....

.....

.....

.....

.....

.....

.....

(4 marks)

- (b) Suggest reasons for changes in and around city centres such as those shown in **Figure 2**.

.....

.....

.....

.....

.....

.....

.....

.....

(4 marks)

- (c) With reference to an urban area you have studied, comment on the extent to which recent changes in and around the town centre have served the needs of local communities.

.....

.....

.....

.....

.....

.....

.....

.....

.....

.....

.....

.....

.....

.....

.....

.....

.....

.....

.....

.....

.....

.....

(7 marks)

TURN OVER FOR THE NEXT QUESTION

Turn over ►

3 RECREATION AND TOURISM

Total for this question: 15 marks

Study **Figure 3**, which shows the distribution of major tourist developments in Tunisia in 2000.

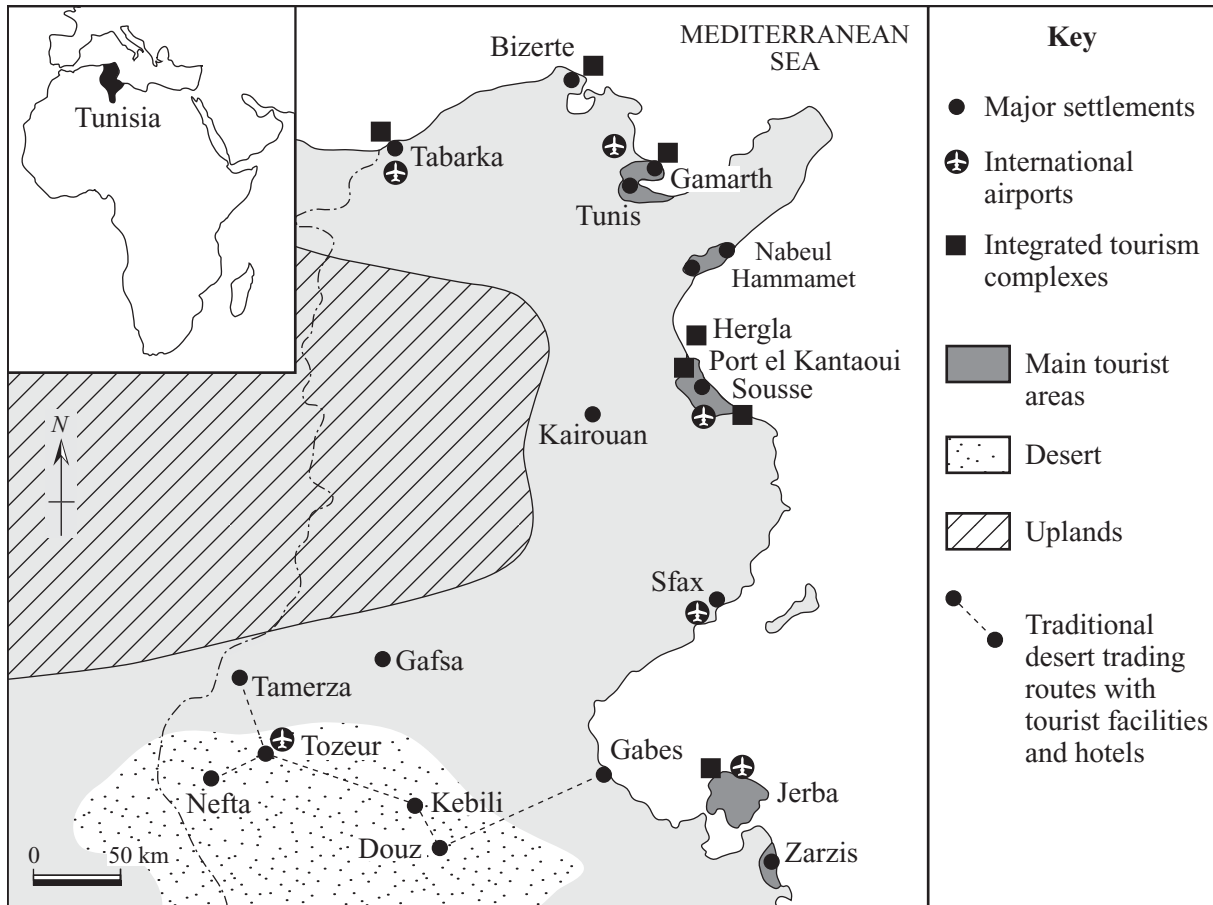


Figure 3

(a) Describe the pattern of tourist developments shown on **Figure 3**.

.....

.....

.....

.....

.....

.....

.....

.....

.....

.....

(4 marks)

(b) What does the pattern suggest about the management of tourism by the Tunisian authorities?

.....

.....

.....

.....

.....

.....

.....

.....

.....

(4 marks)

(c) Suggest and comment on possible reasons for the Tunisian government seeking to develop the tourist industry in Tunisia in recent years.

.....

.....

.....

.....

.....

.....

.....

.....

.....

.....

.....

.....

.....

.....

.....

.....

.....

.....

.....

.....

.....

.....

(7 marks)

TURN OVER FOR THE NEXT SECTION

Turn over ►

SECTION B

Answer **one** question from this Section.

Total for this question: 30 marks

Note to Candidate

You should bear in mind that essay Questions 4, 5 and 6 are synoptic in nature. In your response to these questions you are required to show your knowledge and understanding of different aspects of geography, the connections between these different aspects and, where relevant, of human perspectives upon geographical themes and issues.

- 4** Different policies for agriculture are needed in different parts of the world. To what extent do you agree with this view? (30 marks)
- 5** Many factors are relevant to the successful management of urban areas. Discuss the validity of this view. (30 marks)
- 6** With reference to areas that you have studied, discuss the extent to which recreation and tourism industries can be used to successfully promote economic development. (30 marks)

END OF QUESTIONS

Acknowledgement of copyright-holders and publishers

Permission to reproduce all copyright material has been applied for. In some cases, efforts to contact copyright owners have been unsuccessful and AQA will be happy to rectify any omissions of acknowledgements in future if notified.

Figure 3: © Oxford University Press, modified from *Advanced Geography* by Garrett Nagle (OUP, 2000), reprinted by permission of Oxford University Press.