

Please write clearly in block capitals.

Centre number

--	--	--	--	--

Candidate number

--	--	--	--

Surname

Forename(s)

Candidate signature

AS GEOGRAPHY

Unit 2 Geographical Skills

Friday 20 May 2016

Afternoon

Time allowed: 1 hour

Materials

For this paper you must have:

The Ordnance Survey map extract (enclosed)

- a pencil
- a rubber
- a ruler
- a protractor
- compasses.

You may use a calculator.

Instructions

- Use black ink or black ball-point pen. Use pencil only for drawing.
- Fill in the boxes at the top of this page.
- Answer **all** questions.
- You must answer the questions in the spaces provided. Do not write outside the box around each page or on blank pages.
- Do all rough work in this book. Cross through any work you do not want to be marked.

Information

- The marks for questions are shown in brackets.
- The maximum mark for this paper is 50.
- You will be marked on your ability to
 - use good English
 - organise information clearly
 - use specialist vocabulary where appropriate.

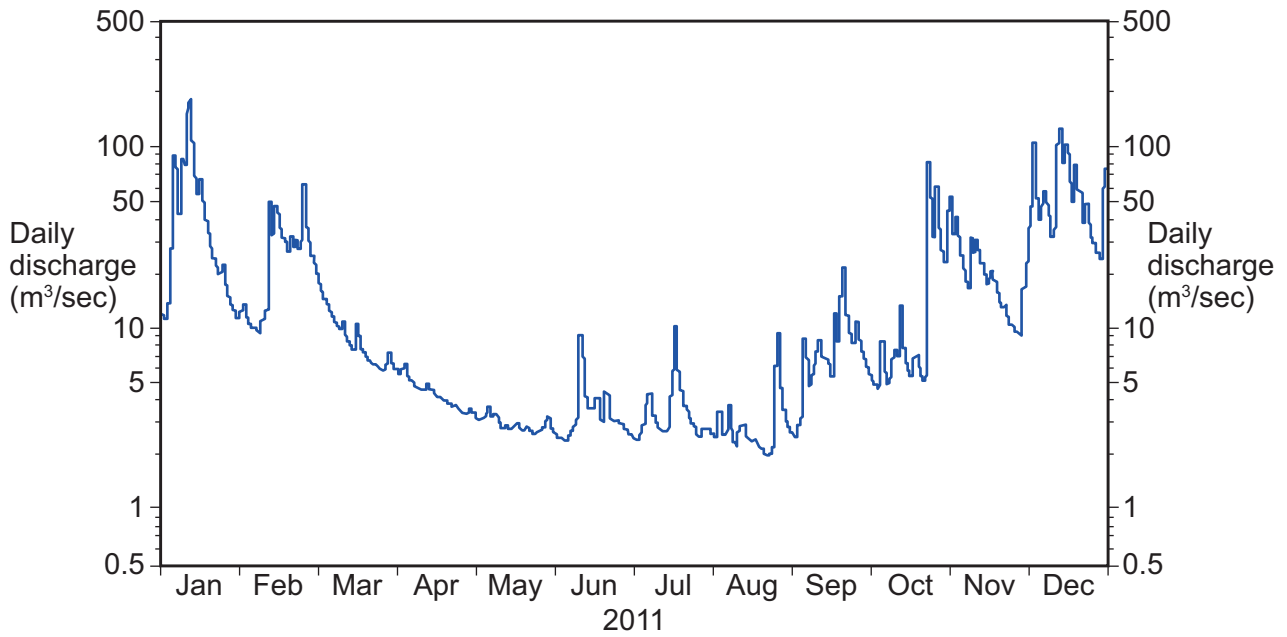
Advice

- Where appropriate, credit will be given for the use of diagrams to illustrate answers and where reference is made to your personal investigative work. You are advised to allocate your time carefully.



1 (b) **Figure 2** is a graph showing the daily discharge of the River Tamar at Gunnislake in 2011.

Figure 2



Using **Figure 2**, describe the pattern of discharge for the River Tamar in 2011.

[4 marks]

Extra space _____

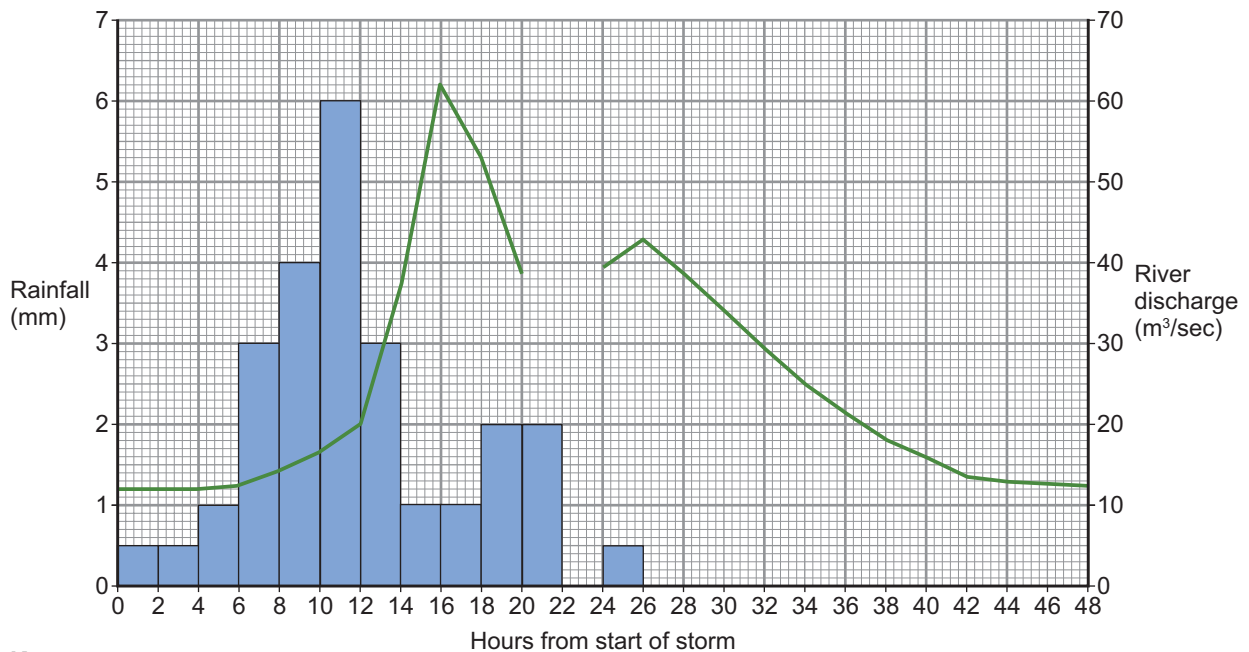
Question 1 continues on the next page

Turn over ►



- 1 (c) **Figure 3** is a partly completed storm hydrograph for the River Tamar at Gunnislake in June 2012.

Figure 3



Key

- Rainfall (mm)
— River discharge (m³/sec)

- 1 (c) (i) Complete **Figure 3** by adding the following data.

Hours from start of storm	22–24	22
Rainfall (mm)	1.3	
River discharge (m³/sec)		34

[2 marks]

- 1 (c) (ii) **Figure 4** is a fact file about the River Tamar drainage basin.

Figure 4

The River Tamar Drainage Basin
<ul style="list-style-type: none"> • A mainly rural area with moderate to steep slopes. • Annual rainfall ranges from approximately 1000 to 2000 mm. The England and Wales average is 900 mm. • Underlying geology consists of impermeable rocks. • Soils are generally poorly drained. • Land use is predominantly farmland, with some forestry. • The river has 8 major tributaries in its course of 78 km.



- 1 (d) The relationship between hydraulic radius and river velocity is being investigated along part of the River Tamar.

The null hypothesis is: 'There is no relationship between hydraulic radius and river velocity.'

- 1 (d) (i) A Spearman's rank correlation test has been started in **Figure 5** below. Rank order is descending with highest value ranked 1.

Complete **Figure 5** and, using the formula provided below, calculate the value of R_s to two decimal places.

[4 marks]

Figure 5

Hydraulic radius	Rank (R1)	Velocity (m/sec)	Rank (R2)	Difference (d) (R1 – R2)	d^2
0.16	12	0.75	10	2	4
0.24	9	1.22			
0.43	8	1.18	8	0	0
0.21	10	0.56	12	-2	4
0.19	11	0.61	11	0	0
0.55	6	0.90			
0.63	5	1.39	6	-1	1
0.51	7	1.73	3	4	16
0.85	4	1.41	5	-1	1
1.23	1	1.86	2	-1	1
0.98	3	2.27	1	2	4
1.10	2	1.64	4	-2	4
					$\sum d^2 = 48$

Correlation coefficient formula: $R_s = 1 - \frac{6\sum d^2}{n^3 - n}$

where R_s is the correlation coefficient and n is the number of paired data.

Complete the correlation coefficient calculation in the space below, showing your working.



1 (d) (ii) **Figure 6** shows critical values of the Spearman rank correlation coefficient.

Figure 6

Number of paired data in sample	0.05 level of significance	0.01 level of significance
12	0.497	0.703

Using the critical values provided in **Figure 6**, assess the statistical significance of your R_s calculation.

[2 marks]

25


Turn over for the next question

Turn over ►



2 (b) Draw an annotated sketch map to show the location and main features of the study area for your investigation.

[5 marks]



2 (c) Outline the limitations of **one** method of data collection used in your fieldwork investigation.

[3 marks]

Question 2 continues on the next page

Turn over ►



There are no questions printed on this page

**DO NOT WRITE ON THIS PAGE
ANSWER IN THE SPACES PROVIDED**

Copyright information

For confidentiality purposes, from the November 2015 examination series, acknowledgements of third party copyright material will be published in a separate booklet rather than including them on the examination paper or support materials. This booklet is published after each examination series and is available for free download from www.aqa.org.uk after the live examination series.

Permission to reproduce all copyright material has been applied for. In some cases, efforts to contact copyright-holders may have been unsuccessful and AQA will be happy to rectify any omissions of acknowledgements. If you have any queries please contact the Copyright Team, AQA, Stag Hill House, Guildford, GU2 7XJ.

Copyright © 2016 AQA and its licensors. All rights reserved.

