

Centre Number						Candidate Number				
Surname										
Other Names										
Candidate Signature										



General Certificate of Education  
Advanced Subsidiary Examination  
June 2010

# Geography

# GEOG2

## Unit 2 Geographical Skills

Tuesday 25 May 2010 1.30 pm to 2.30 pm

**You will need no other materials.**  
You may use a calculator.

### Time allowed

- 1 hour

### Instructions

- Use black ink or black ball-point pen. Use pencil only for drawing.
- Fill in the boxes at the top of this page.
- Answer **all** questions.
- You must answer the questions in the spaces provided. Do not write outside the box around each page or on blank pages.
- Do all rough work in this book. Cross through any work you do not want to be marked.

### Information

- The maximum mark for this paper is 50.
- The marks for questions are shown in brackets.
- You will be marked on your ability to:
  - use good English
  - organise information clearly
  - use specialist vocabulary where appropriate.

### Advice

- Where appropriate, credit will be given for the use of diagrams to illustrate answers and where reference is made to your personal investigative work. You are advised to allocate your time carefully.

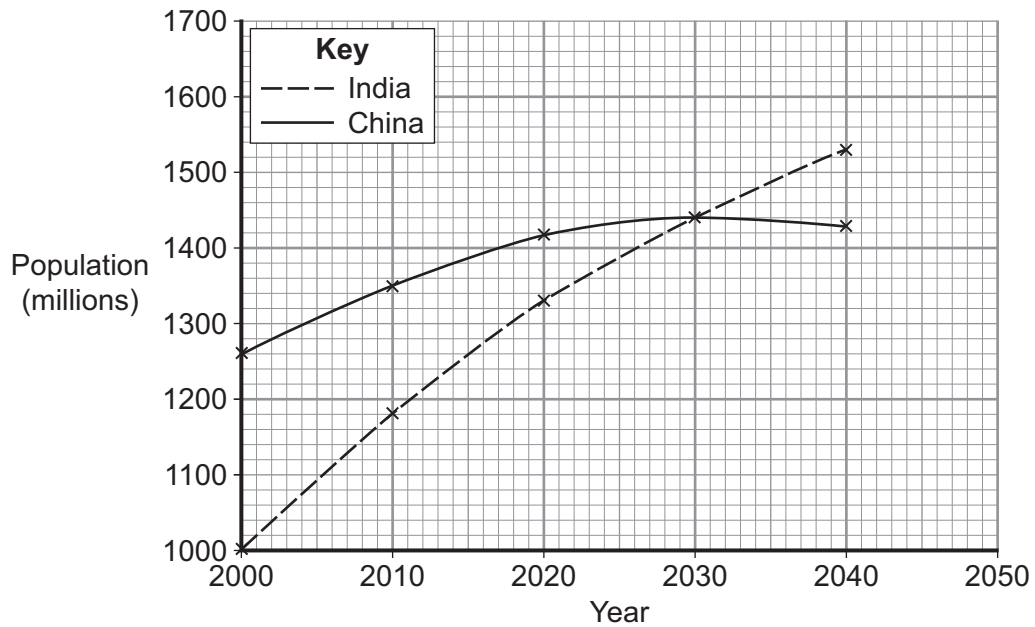
For Examiner's Use	
Examiner's Initials	
Question	Mark
1	
2	
TOTAL	



Answer **all** questions in the spaces provided.

- 1 (a)** Study **Figure 1** which shows changes in the populations of India and China between 2000 and 2050 (projected).

**Figure 1**



- 1 (a) (i)** Complete **Figure 1** by adding the following data for 2050.

Country	Population (millions)
India	1610
China	1380

(2 marks)



1 (a) (ii) Describe the changes shown in **Figure 1**.

.....

.....

.....

.....

.....

.....

.....

.....

(4 marks)

**Question 1 continues on the next page**

**Turn over** ►

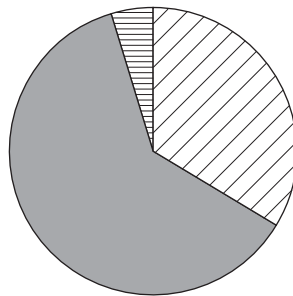


- 1 (b) (i) Using the information provided in **Figure 2** and **Figure 3**, complete the proportional divided circle (**Figure 4**) to show India's projected population total and structure for 2050.


**Figure 2**




Age group (years)	Population in 2005 (millions)	Projected population in 2050 (millions)
0–14	368	302
15–64	673	1016
65 and over	51	292
<b>Total</b>	<b>1092</b>	<b>1610</b>

**Figure 3**  
India's population in 2005



**Figure 4**  
India's population in 2050



Key	
Age group (years)	
	0–14
	15–64
	65 and over

(3 marks)



1 (b) (ii) Using the information provided in 1(b)(i), describe the changes to India's population total and structure.

.....

.....

.....

.....

.....

.....

.....

.....

(4 marks)

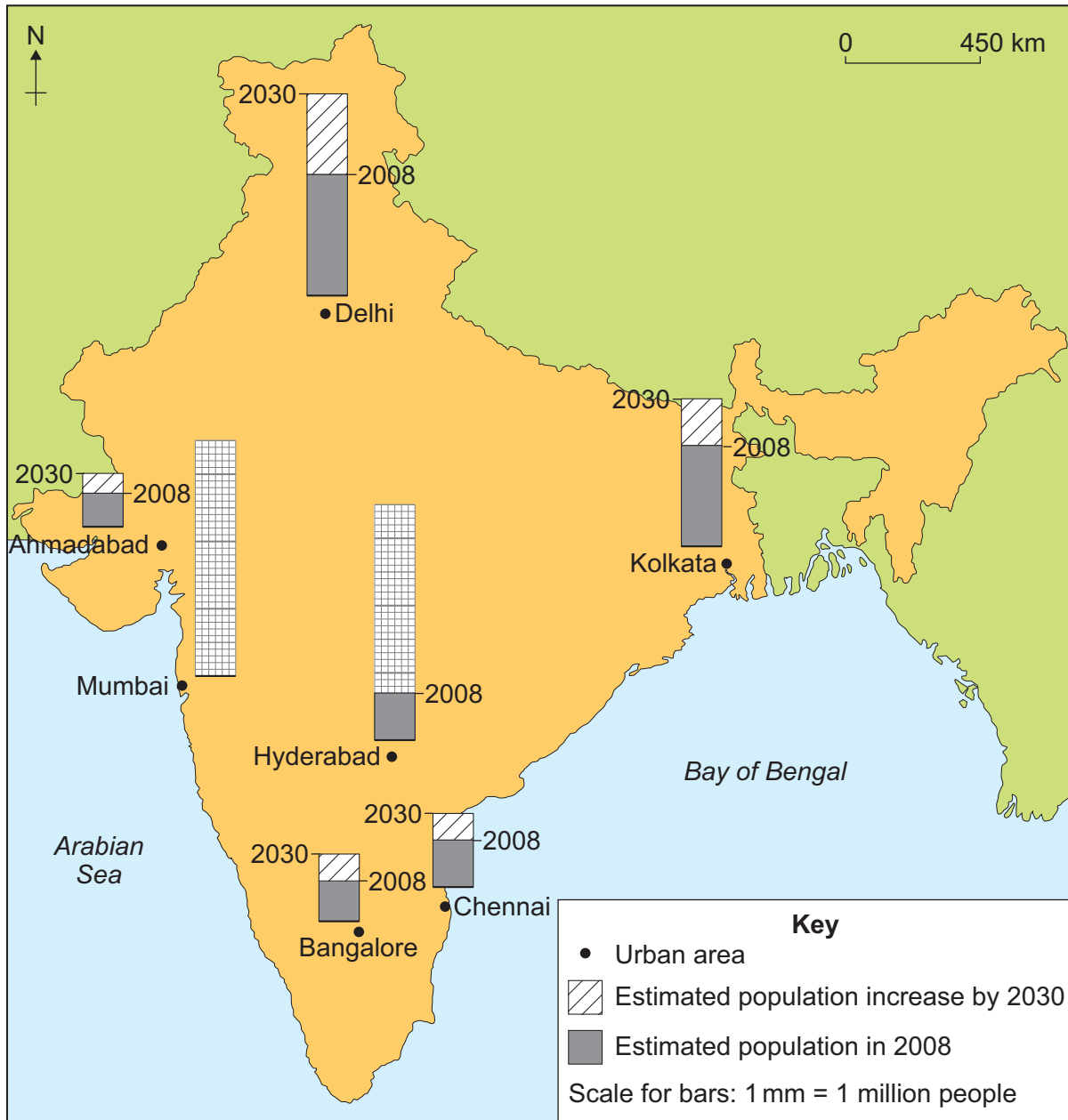
**Question 1 continues on the next page**

**Turn over** ►



1 (c) Study **Figure 5** which shows estimated population change in India's largest urban areas between 2008 and 2030.

**Figure 5**





1 (d) Study **Figure 6**, a photograph of a settlement in Mumbai, India.

Annotate **Figure 6** to show characteristics of this settlement.

**Figure 6**



(4 marks)





**2** You have experienced geography fieldwork as part of the course. Use this experience to answer the following questions.

State the aim of the fieldwork investigation.

.....  
.....  
.....

**2 (a)** Describe the geographical theory, concept or idea that formed the basis of your fieldwork investigation.

.....  
.....  
.....  
.....  
.....  
.....  
.....  
.....  
.....  
.....  
.....  
.....  
.....  
.....  
.....  
.....  
.....  
.....  
.....  
.....  
.....

(5 marks)

*Extra space* .....

.....  
.....  
.....  
.....  
.....

**Question 2 continues on the next page**

**Turn over** ►



**2 (b) (i)** With reference to your fieldwork investigation, distinguish between qualitative and quantitative data.

.....  
.....  
.....  
.....  
.....  
.....

(3 marks)

**2 (b) (ii)** Describe **one** method that you used for the collection of primary **or** secondary data.

.....  
.....  
.....  
.....  
.....  
.....  
.....  
.....  
.....  
.....  
.....  
.....  
.....  
.....  
.....  
.....  
.....  
.....  
.....  
.....

(6 marks)

*Extra space* .....

.....  
.....  
.....  
.....



**2 (b) (iii)** Outline **one** technique that you used to present results from your data collection.

.....

.....

.....

.....

.....

.....

.....

.....

(4 marks)

**2 (c)** Evaluate your investigation. In your answer, you should:

- comment on the strengths and weaknesses of different aspects of the study
- suggest improvements.

.....

.....

.....

.....

.....

.....

.....

.....

.....

.....

.....

.....

.....

.....

.....

.....

.....

.....

.....

.....

.....

.....

(7 marks)

**Question 2 continues on the next page**

**Turn over** ►



*Extra space* .....

.....

.....

.....

.....

.....

<b>25</b>

**END OF QUESTIONS**

**ACKNOWLEDGEMENT OF COPYRIGHT-HOLDERS AND PUBLISHERS**

Permission to reproduce all copyright material has been applied for. In some cases, efforts to contact copyright-holders have been unsuccessful and AQA will be happy to rectify any omissions of acknowledgements in future papers if notified.

- Question 1 Figure 1: © United Nations, 2009. Reproduced with permission.
- Question 1 Figure 2: Millennium Development Goals Report 2008. © United Nations, 2009. Reproduced with permission.
- Question 1 Figure 5: demographia.com
- Question 1 Figure 6: Dr Andrew Redfern

Copyright © 2010 AQA and its licensors. All rights reserved.

