

Centre Number						Candidate Number				
Surname										
Other Names										
Candidate Signature										

For Examiner's Use	
Examiner's Initials	
Question	Mark
1	
2	
3	
4	
5	
6	
7	
TOTAL	



General Certificate of Education
Advanced Subsidiary Examination
June 2010

Mathematics

MPC1

Unit Pure Core 1

Monday 24 May 2010 1.30 pm to 3.00 pm

<p>For this paper you must have:</p> <ul style="list-style-type: none"> the blue AQA booklet of formulae and statistical tables. <p>You must not use a calculator.</p>	
---	--

Time allowed

- 1 hour 30 minutes

Instructions

- Use black ink or black ball-point pen. Pencil should only be used for drawing.
- Fill in the boxes at the top of this page.
- Answer **all** questions.
- Write the question part reference (eg (a), (b)(i) etc) in the left-hand margin.
- You must answer the questions in the spaces provided. Do not write outside the box around each page.
- Show all necessary working; otherwise marks for method may be lost.
- Do all rough work in this book. Cross through any work that you do not want to be marked.
- The use of calculators is **not** permitted.

Information

- The marks for questions are shown in brackets.
- The maximum mark for this paper is 75.

Advice

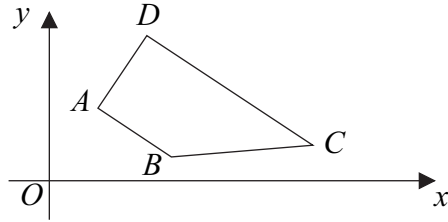
- Unless stated otherwise, you may quote formulae, without proof, from the booklet.



J U N 1 0 M P C 1 0 1

Answer **all** questions in the spaces provided.

1 The trapezium $ABCD$ is shown below.



The line AB has equation $2x + 3y = 14$ and DC is parallel to AB .

- (a) Find the gradient of AB . (2 marks)
- (b) The point D has coordinates $(3, 7)$.
 - (i) Find an equation of the line DC . (2 marks)
 - (ii) The angle BAD is a right angle. Find an equation of the line AD , giving your answer in the form $mx + ny + p = 0$, where m , n and p are integers. (4 marks)
- (c) The line BC has equation $5y - x = 6$. Find the coordinates of B . (3 marks)

QUESTION
PART
REFERENCE

.....

.....

.....

.....

.....

.....

.....

.....

.....

.....

.....



2 (a) Express $(3 - \sqrt{5})^2$ in the form $m + n\sqrt{5}$, where m and n are integers. (2 marks)

(b) Hence express $\frac{(3 - \sqrt{5})^2}{1 + \sqrt{5}}$ in the form $p + q\sqrt{5}$, where p and q are integers. (4 marks)

QUESTION
PART
REFERENCE

[A large section of the page is reserved for the student's answer, consisting of horizontal dashed lines.]



3 The polynomial $p(x)$ is given by

$$p(x) = x^3 + 7x^2 + 7x - 15$$

- (a) (i)** Use the Factor Theorem to show that $x + 3$ is a factor of $p(x)$. *(2 marks)*
- (ii)** Express $p(x)$ as the product of three linear factors. *(3 marks)*
- (b)** Use the Remainder Theorem to find the remainder when $p(x)$ is divided by $x - 2$. *(2 marks)*
- (c) (i)** Verify that $p(-1) < p(0)$. *(1 mark)*
- (ii)** Sketch the curve with equation $y = x^3 + 7x^2 + 7x - 15$, indicating the values where the curve crosses the coordinate axes. *(4 marks)*

QUESTION
PART
REFERENCE



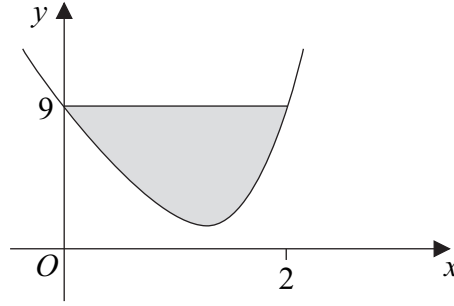
QUESTION
PART
REFERENCE

A large rectangular area with a vertical line on the left side, creating a narrow column for the 'QUESTION PART REFERENCE' header. The rest of the area is filled with horizontal dotted lines, providing a space for writing answers.



Turn over ►

4 The curve with equation $y = x^4 - 8x + 9$ is sketched below.



The point (2, 9) lies on the curve.

(a) (i) Find $\int_0^2 (x^4 - 8x + 9) dx$. (5 marks)

(ii) Hence find the area of the shaded region bounded by the curve and the line $y = 9$. (2 marks)

(b) The point A(1, 2) lies on the curve with equation $y = x^4 - 8x + 9$.

(i) Find the gradient of the curve at the point A. (4 marks)

(ii) Hence find an equation of the tangent to the curve at the point A. (1 mark)

QUESTION
PART
REFERENCE

.....

.....

.....

.....

.....

.....

.....

.....

.....

.....

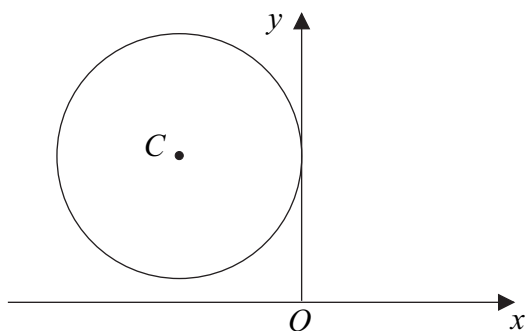
.....

.....

.....



5 A circle with centre $C(-5, 6)$ touches the y -axis, as shown in the diagram.



(a) Find the equation of the circle in the form

$$(x - a)^2 + (y - b)^2 = r^2 \quad (3 \text{ marks})$$

(b) (i) Verify that the point $P(-2, 2)$ lies on the circle. (1 mark)

(ii) Find an equation of the normal to the circle at the point P . (3 marks)

(iii) The mid-point of PC is M . Determine whether the point P is closer to the point M or to the origin O . (4 marks)

QUESTION
PART
REFERENCE

.....

.....

.....

.....

.....

.....

.....

.....

.....

.....

.....

.....

.....

.....

.....

.....

.....

.....

.....

.....

.....

.....

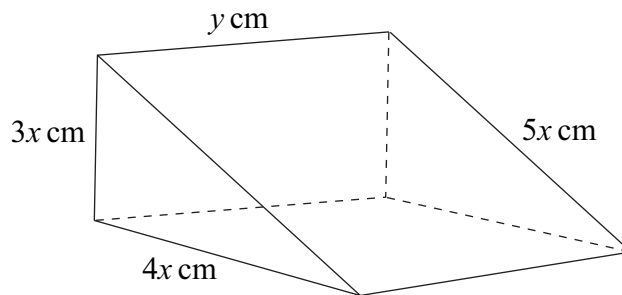
.....

.....



6

The diagram shows a block of wood in the shape of a prism with triangular cross-section. The end faces are right-angled triangles with sides of lengths $3x$ cm, $4x$ cm and $5x$ cm, and the length of the prism is y cm, as shown in the diagram.



The total surface area of the five faces is 144 cm^2 .

(a) (i) Show that $xy + x^2 = 12$. (3 marks)

(ii) Hence show that the volume of the block, $V \text{ cm}^3$, is given by

$$V = 72x - 6x^3 \quad (2 \text{ marks})$$

(b) (i) Find $\frac{dV}{dx}$. (2 marks)

(ii) Show that V has a stationary value when $x = 2$. (2 marks)

(c) Find $\frac{d^2V}{dx^2}$ and hence determine whether V has a maximum value or a minimum value when $x = 2$. (2 marks)

QUESTION
PART
REFERENCE

.....

.....

.....

.....

.....

.....

.....

.....

.....

.....

.....



- 7 (a) (i) Express $2x^2 - 20x + 53$ in the form $2(x - p)^2 + q$, where p and q are integers. (2 marks)
- (ii) Use your result from part (a)(i) to explain why the equation $2x^2 - 20x + 53 = 0$ has no real roots. (2 marks)
- (b) The quadratic equation $(2k - 1)x^2 + (k + 1)x + k = 0$ has real roots.
- (i) Show that $7k^2 - 6k - 1 \leq 0$. (4 marks)
- (ii) Hence find the possible values of k . (4 marks)

QUESTION
PART
REFERENCE

.....

.....

.....

.....

.....

.....

.....

.....

.....

.....

.....

.....

.....

.....

.....

.....

.....

.....

.....

.....

.....

.....

.....

.....

.....



There are no questions printed on this page

**DO NOT WRITE ON THIS PAGE
ANSWER IN THE SPACES PROVIDED**

