

Please check the examination details below before entering your candidate information

Candidate surname

Other names

**Pearson Edexcel
International
Advanced Level**

Centre Number

--	--	--	--	--

Candidate Number

--	--	--	--	--

Monday 13 May 2019

Morning (Time: 1 hour 45 minutes)

Paper Reference **WEC11/01**

Economics

International Advanced Subsidiary

Unit 1: Markets in action

You must have:

Source Booklet (enclosed)

Total Marks

--

Instructions

- Use **black** ink or ball-point pen.
- **Fill in the boxes** at the top of this page with your name, centre number and candidate number.
- Answer **ALL** questions in Sections A, B and C.
- Answer **ONE** question in Section D.
- Answer the questions in the spaces provided
– *there may be more space than you need.*

Information

- The total mark for this paper is 80.
- The marks for **each** question are shown in brackets
– *use this as a guide as to how much time to spend on each question.*
- Calculators may be used.

Advice

- Read each question carefully before you start to answer it.
- Check your answers if you have time at the end.

Turn over ►

P60807A

©2019 Pearson Education Ltd.

1/1/1/1/1/1



Pearson

SECTION A

Answer ALL questions in this section.

Questions must be answered with a cross in a box ☒. If you change your mind about an answer, put a line through the box ☒ and then mark your new answer with a cross ☒.

- 1 **Statement 1:** In 2017 the Kenyan Government spent Sh172.5 billion on healthcare. This is 8% of its annual budget.

Statement 2: The African Union believes African countries should spend 15% of their annual budgets on healthcare.

Which **one** of the following best describes the two statements above?

- A Both statements are positive
- B Statement 1 is positive and statement 2 is normative
- C Both statements are normative
- D Statement 1 is normative and statement 2 is positive

(Total for Question 1 = 1 mark)

- 2 The Chinese Government introduced a carbon emissions trading scheme. The objective of this tradeable pollution permit scheme is to reduce carbon emissions by

- A forcing highly polluting firms to buy permits from low polluting firms
- B forcing low polluting firms to buy permits from highly polluting firms
- C paying subsidies to firms who manage to reduce their carbon emissions
- D taxing firms who pollute less than their allowance

(Total for Question 2 = 1 mark)

- 3 Which **one** of the following is an example of market failure?

- A Lower prices create an incentive for firms to switch production to more profitable activities
- B Excessive administrative costs are involved in meeting environmental regulations
- C Government provision of street lights that is greater than the social optimum output
- D Insured consumers take more risks in the knowledge that the insurer will pay any resulting costs

(Total for Question 3 = 1 mark)

DO NOT WRITE IN THIS AREA

DO NOT WRITE IN THIS AREA

DO NOT WRITE IN THIS AREA

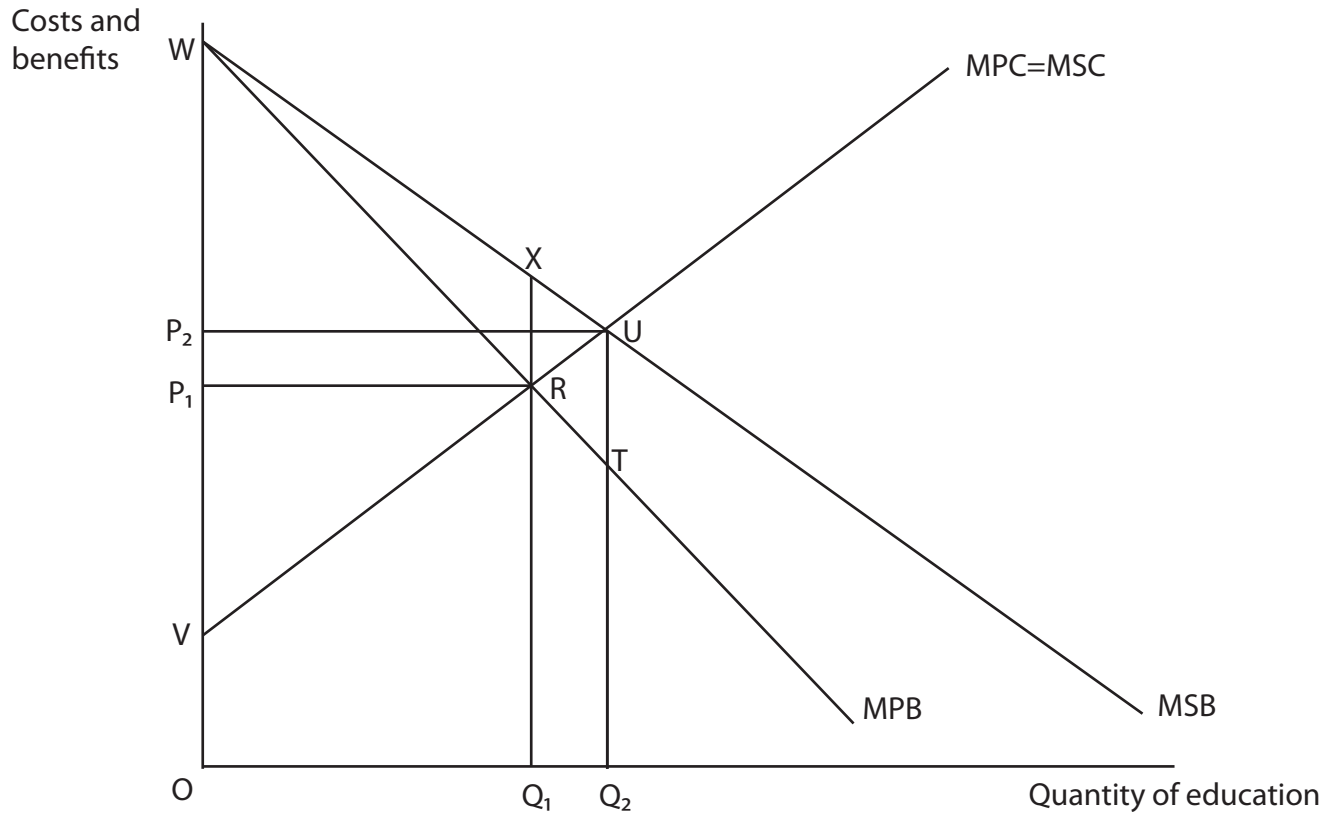
DO NOT WRITE IN THIS AREA

DO NOT WRITE IN THIS AREA

DO NOT WRITE IN THIS AREA



4 The diagram shows the market for education.



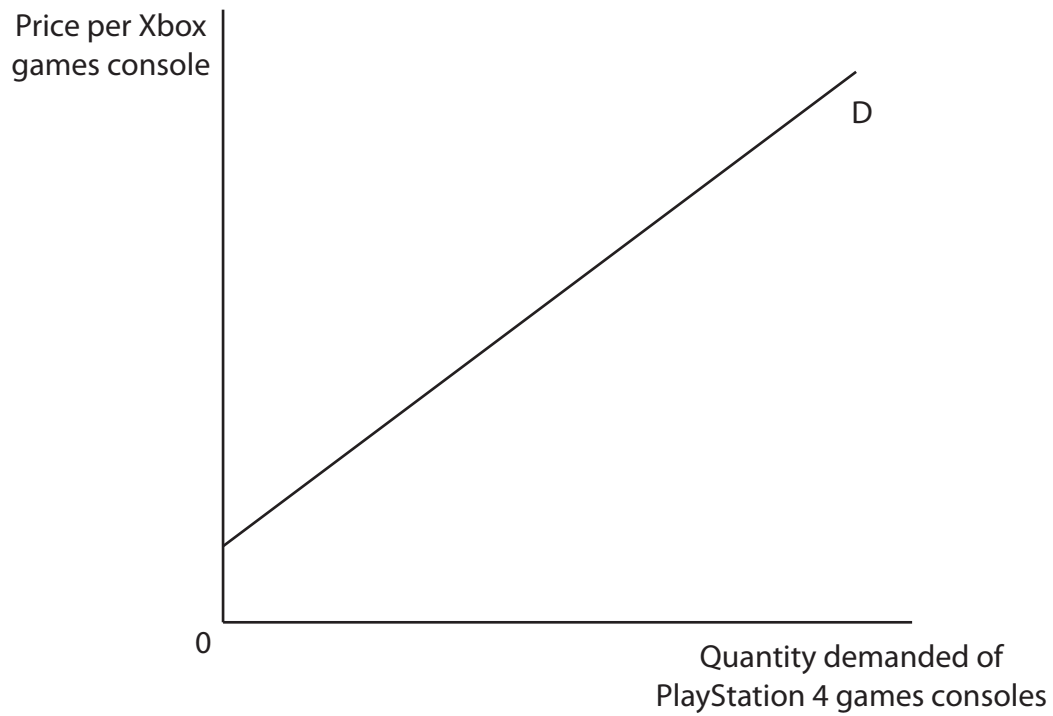
Which **one** of the following can be deduced from the diagram?

- A The welfare gain area is RUT
- B The welfare gain area is RUX
- C The social optimum quantity is Q_1 and price is P_1
- D The market equilibrium quantity is Q_2 and price is P_2

(Total for Question 4 = 1 mark)



- 5 The diagram shows the relationship between the price of Xbox games consoles and the quantity demanded of PlayStation 4 games consoles.



It can be deduced from the diagram that the two goods are

- A complementary goods
- B inferior goods
- C substitute goods
- D unrelated goods

(Total for Question 5 = 1 mark)

DO NOT WRITE IN THIS AREA

DO NOT WRITE IN THIS AREA

DO NOT WRITE IN THIS AREA

DO NOT WRITE IN THIS AREA

DO NOT WRITE IN THIS AREA

DO NOT WRITE IN THIS AREA



6 The table shows the estimated price elasticity of supply for three commodities.

Commodities	Estimates of price elasticity of supply
Corn	+0.23
Rice	+0.27
Wheat	+0.31

(Source: <http://ageconsearch.umn.edu/bitstream/19267/1/sp05zh01.pdf>)

Which **one** of the following can be deduced from the table?

- A** Corn, rice and wheat have price elastic supply
- B** A 10% increase in the price of corn will cause a 23% increase in quantity supplied
- C** A 10% increase in the price of rice will cause a 2.7% decrease in quantity supplied
- D** A 10% increase in the price of wheat will cause a 3.1% increase in quantity supplied

(Total for Question 6 = 1 mark)

TOTAL FOR SECTION A = 6 MARKS



P 6 0 8 0 7 A 0 5 3 2

DO NOT WRITE IN THIS AREA

DO NOT WRITE IN THIS AREA

DO NOT WRITE IN THIS AREA

DO NOT WRITE IN THIS AREA

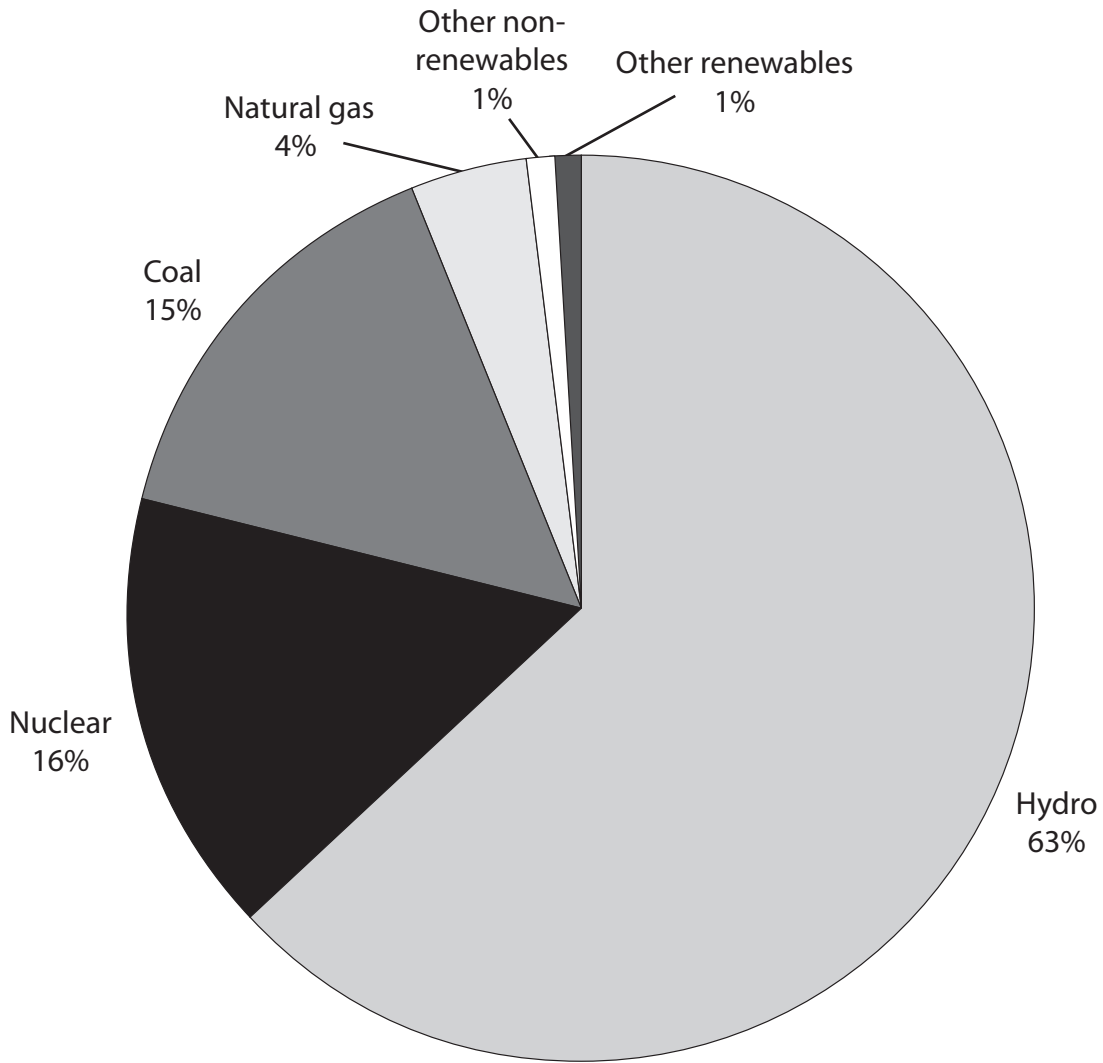
DO NOT WRITE IN THIS AREA

DO NOT WRITE IN THIS AREA

BLANK PAGE
QUESTION 8 BEGINS ON THE NEXT PAGE.



8 The chart shows how Canada's total electricity supply was generated from different resources in 2015.



(Source: <http://www.theenergycollective.com/jarretadams1/2292773/canada-working-toward-decarbonizing-its-grid>)

DO NOT WRITE IN THIS AREA

DO NOT WRITE IN THIS AREA

DO NOT WRITE IN THIS AREA

DO NOT WRITE IN THIS AREA

DO NOT WRITE IN THIS AREA

DO NOT WRITE IN THIS AREA



DO NOT WRITE IN THIS AREA

DO NOT WRITE IN THIS AREA

DO NOT WRITE IN THIS AREA

DO NOT WRITE IN THIS AREA

DO NOT WRITE IN THIS AREA

DO NOT WRITE IN THIS AREA

BLANK PAGE

SECTION C BEGINS ON THE NEXT PAGE.



SECTION C

Study Figures 1 and 2 and Extracts A and B in the Source Booklet before answering Question 12.

Write your answers in the space provided on the following pages.

- 12 (a) Define the term 'free good' (Extract A, line 7). (2)
- Between 2008 and 2016 weekly household real income increased by 2.7% in Australia.
- (b) With reference to Figure 1, explain the likely change in quantity demanded of lamb between 2008 and 2016. (4)
- (c) With reference to Figure 2 and Extract A, analyse **one** reason why the price of lamb increased during 2017. (6)
- Illustrate your answer with a supply and demand diagram.
- (d) With reference to Extract B, examine the external costs resulting from increased meat production. (8)
- (e) With reference to Extract B, discuss the likely effects of the introduction of an indirect tax on meat. (14)
- Illustrate your answer with an appropriate diagram.

DO NOT WRITE IN THIS AREA

DO NOT WRITE IN THIS AREA

DO NOT WRITE IN THIS AREA

DO NOT WRITE IN THIS AREA

DO NOT WRITE IN THIS AREA

DO NOT WRITE IN THIS AREA



(c) With reference to Figure 2 and Extract A, analyse **one** reason why the price of lamb increased during 2017.

Illustrate your answer with a supply and demand diagram.

(6)

Area for drawing a supply and demand diagram, consisting of horizontal dotted lines.

DO NOT WRITE IN THIS AREA

DO NOT WRITE IN THIS AREA

DO NOT WRITE IN THIS AREA

DO NOT WRITE IN THIS AREA

DO NOT WRITE IN THIS AREA

DO NOT WRITE IN THIS AREA



DO NOT WRITE IN THIS AREA

DO NOT WRITE IN THIS AREA

DO NOT WRITE IN THIS AREA

DO NOT WRITE IN THIS AREA

DO NOT WRITE IN THIS AREA

DO NOT WRITE IN THIS AREA

Large writing area with horizontal dashed lines.



(d) With reference to Extract B, examine the external costs resulting from increased meat production.

(8)

Area with horizontal dotted lines for writing.

DO NOT WRITE IN THIS AREA

DO NOT WRITE IN THIS AREA

DO NOT WRITE IN THIS AREA

DO NOT WRITE IN THIS AREA

DO NOT WRITE IN THIS AREA

DO NOT WRITE IN THIS AREA



DO NOT WRITE IN THIS AREA

DO NOT WRITE IN THIS AREA

DO NOT WRITE IN THIS AREA

DO NOT WRITE IN THIS AREA

DO NOT WRITE IN THIS AREA

DO NOT WRITE IN THIS AREA

Large writing area with horizontal dotted lines.



(e) With reference to Extract B, discuss the likely effects of the introduction of an indirect tax on meat.

Illustrate your answer with an appropriate diagram.

(14)

Area with horizontal dotted lines for writing the answer.

DO NOT WRITE IN THIS AREA

DO NOT WRITE IN THIS AREA

DO NOT WRITE IN THIS AREA

DO NOT WRITE IN THIS AREA

DO NOT WRITE IN THIS AREA

DO NOT WRITE IN THIS AREA



DO NOT WRITE IN THIS AREA

DO NOT WRITE IN THIS AREA

DO NOT WRITE IN THIS AREA

DO NOT WRITE IN THIS AREA

DO NOT WRITE IN THIS AREA

DO NOT WRITE IN THIS AREA

Large writing area with horizontal dotted lines.



DO NOT WRITE IN THIS AREA

DO NOT WRITE IN THIS AREA

DO NOT WRITE IN THIS AREA

DO NOT WRITE IN THIS AREA

DO NOT WRITE IN THIS AREA

DO NOT WRITE IN THIS AREA

Handwriting practice area with 20 horizontal dotted lines.

(Total for Question 12 = 34 marks)

TOTAL FOR SECTION C = 34 MARKS



DO NOT WRITE IN THIS AREA

DO NOT WRITE IN THIS AREA

DO NOT WRITE IN THIS AREA

DO NOT WRITE IN THIS AREA

DO NOT WRITE IN THIS AREA

DO NOT WRITE IN THIS AREA

BLANK PAGE

SECTION D BEGINS ON THE NEXT PAGE.



SECTION D

Answer ONE question from this section.

Write your answer in the space provided.

EITHER

- 13** 'The HPV vaccine is recommended for all adults in the USA because it reduces the risk of cancer by 88%. If the HPV vaccine was given to all adults 925 000 cases of cancer would be prevented. However only 18.3% of adults were vaccinated between 2011 and 2014 preventing 170 000 cases of cancer.'

Evaluate why only 18.3% of adults were vaccinated.

(Total for Question 13 = 20 marks)

OR

- 14** '12 million consumers within the UK are on standard variable tariffs for their gas and electricity. One energy supplier, RWE npower, charged consumers on the standard variable rate £1 166 per year. However, its cheapest deal was £935 per year. Consequently the UK Government is introducing a maximum price for gas and electricity.'

Evaluate the likely impact of the introduction of a maximum price for gas and electricity.

(Total for Question 14 = 20 marks)

DO NOT WRITE IN THIS AREA

DO NOT WRITE IN THIS AREA

DO NOT WRITE IN THIS AREA

DO NOT WRITE IN THIS AREA

DO NOT WRITE IN THIS AREA

DO NOT WRITE IN THIS AREA



Handwriting practice area with 20 sets of horizontal dotted lines.

DO NOT WRITE IN THIS AREA

DO NOT WRITE IN THIS AREA

DO NOT WRITE IN THIS AREA

DO NOT WRITE IN THIS AREA

DO NOT WRITE IN THIS AREA

DO NOT WRITE IN THIS AREA



DO NOT WRITE IN THIS AREA

DO NOT WRITE IN THIS AREA

DO NOT WRITE IN THIS AREA

DO NOT WRITE IN THIS AREA

DO NOT WRITE IN THIS AREA

DO NOT WRITE IN THIS AREA

Large writing area with horizontal dotted lines.



Handwriting practice area with 20 sets of horizontal dotted lines.

DO NOT WRITE IN THIS AREA

DO NOT WRITE IN THIS AREA

DO NOT WRITE IN THIS AREA

DO NOT WRITE IN THIS AREA

DO NOT WRITE IN THIS AREA

DO NOT WRITE IN THIS AREA



DO NOT WRITE IN THIS AREA

DO NOT WRITE IN THIS AREA

DO NOT WRITE IN THIS AREA

DO NOT WRITE IN THIS AREA

DO NOT WRITE IN THIS AREA

DO NOT WRITE IN THIS AREA

Large area with horizontal dotted lines for writing.

TOTAL FOR SECTION D = 20 MARKS
TOTAL FOR PAPER = 80 MARKS





BLANK PAGE

DO NOT WRITE IN THIS AREA

DO NOT WRITE IN THIS AREA

DO NOT WRITE IN THIS AREA

DO NOT WRITE IN THIS AREA

DO NOT WRITE IN THIS AREA

DO NOT WRITE IN THIS AREA



DO NOT WRITE IN THIS AREA

DO NOT WRITE IN THIS AREA

DO NOT WRITE IN THIS AREA

DO NOT WRITE IN THIS AREA

DO NOT WRITE IN THIS AREA

DO NOT WRITE IN THIS AREA

BLANK PAGE



P 6 0 8 0 7 A 0 3 1 3 2

DO NOT WRITE IN THIS AREA

DO NOT WRITE IN THIS AREA

DO NOT WRITE IN THIS AREA

BLANK PAGE



Pearson Edexcel International Advanced Level

Monday 13 May 2019

Morning

Paper Reference **WEC11/01**

Economics

International Advanced Subsidiary

Unit 1: Markets in action

Source Booklet

Do not return this Source Booklet with the question paper.

Turn over ►

P60807A

©2019 Pearson Education Ltd.

1/1/1/1/1




Pearson

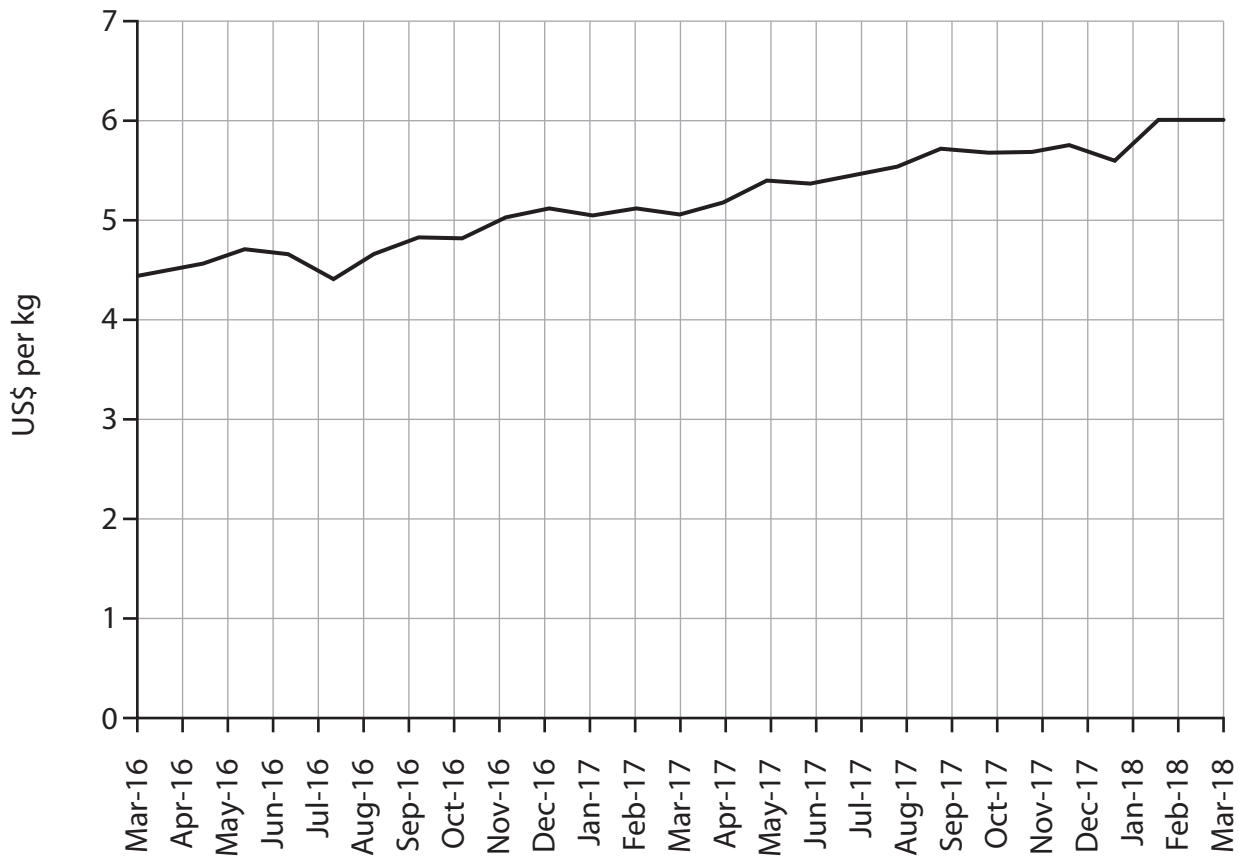
Sources for use with Section C.

The market for meat

Figure 1 Australian consumers' income elasticity of demand for lamb

	Income elasticity of demand (estimated)
Lamb	- 0.146

Figure 2 World price of lamb, US\$ per kg, March 2016 to March 2018



Extract A The price of lamb

The rise in the price of lamb has come at a time when supply is stable. Higher demand for lamb has been caused by a number of factors. Rising global incomes led to a 28% increase in demand for Australian lamb in 2017. At the same time demand has risen in the USA. Successful advertising campaigns have also contributed to increased demand.

5

The lambs in Australia are often allowed to walk and graze freely and most of their food is wild grass which is considered to be a free good.

Extract B Indirect tax on meat needed to address climate change

Meat consumption continues to increase around the world and meat production has risen in response. However, meat production has a damaging effect on the environment causing water pollution and 15% of all global greenhouse gas emissions. Excessive use of antibiotics to treat animals is also leading to a decline in the effectiveness of antibiotics used to treat human illnesses. 5

Many people consume too much meat, seriously damaging their health. This results in an increase in obesity, diabetes and cancer. For example, consuming 100 grams of red meat per day increases the risk of developing diabetes by 19%.

The Paris climate agreement set limits on the amount of global greenhouse gas emissions. However these targets will be missed unless taxes are used to restrict production and consumption. 10

One study looked at the impact of the introduction of a global meat tax. This study found a 40% tax on beef, a 20% tax on dairy products and a 8.5% tax on chicken would reduce emissions and save 500 000 lives a year. 15

The problems associated with meat production are not well-known by the public. One way to reduce emissions without the need for a tax would be for governments to provide the public with information on the external costs associated with meat production and consumption.

BLANK PAGE

Acknowledgements

Figure 1 'The income elasticity of meat: a meta-analysis' 28th September 2010, Craig Gallet, The Australian Journal of Agricultural and Resource Economics

Figure 2 based on data taken from <https://www.indexmundi.com/commodities/?commodity=lamb&months=120>

Extract A adapted from 'Is the China demand myth becoming reality?' 12 December 2017, Angus Brown, <http://www.mecardo.com.au/commodities/analysis/is-the-china-demand-myth-becoming-reality.aspx>

Extract B adapted from 'Meat tax 'inevitable' to beat climate and health crises, says report,' Damian Carrington, The Guardian, 11 Dec 2017, <https://www.theguardian.com/environment/2017/dec/11/meat-tax-inevitable-to-beat-climate-and-health-crises-says-report>