

OXFORD CAMBRIDGE AND RSA EXAMINATIONS

Advanced GCE

CLASSICAL CIVILISATION (JACT)

2753

Archaeology 3

Friday

17 JUNE 2005

Afternoon

1 hour 30 minutes

Additional materials:

8 page answer booklet

TIME 1 hour 30 minutes

INSTRUCTIONS TO CANDIDATES

- Write your name, Centre number and candidate number in the spaces provided on the answer booklet.
- You must answer **one** question from Section A and **one** question from Section B.
- Start your answer to each question on a new page.

INFORMATION FOR CANDIDATES

- The number of marks is given in brackets [] at the end of each question or part question.
- All questions are worth 50 marks in total including 5 marks for quality of written communication.
- In this paper you are encouraged to use sketches, diagrams etc., where appropriate, to illustrate your answers.

This question paper consists of 4 printed pages.

Section A

Answer one question from this section.

A1




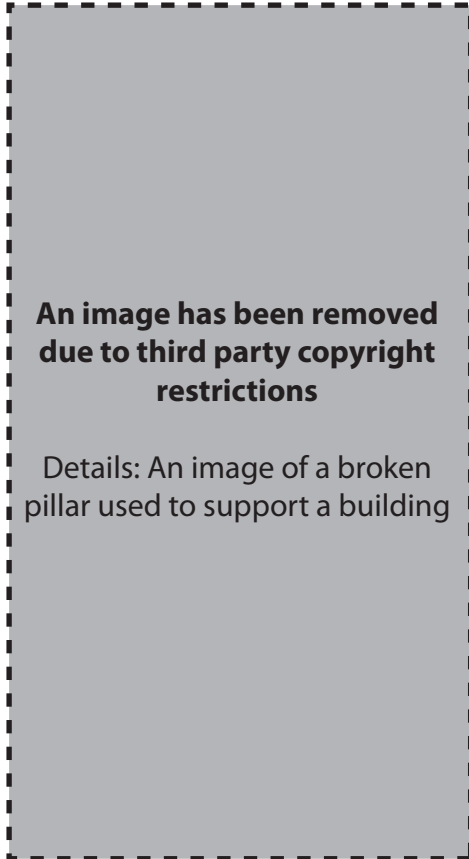
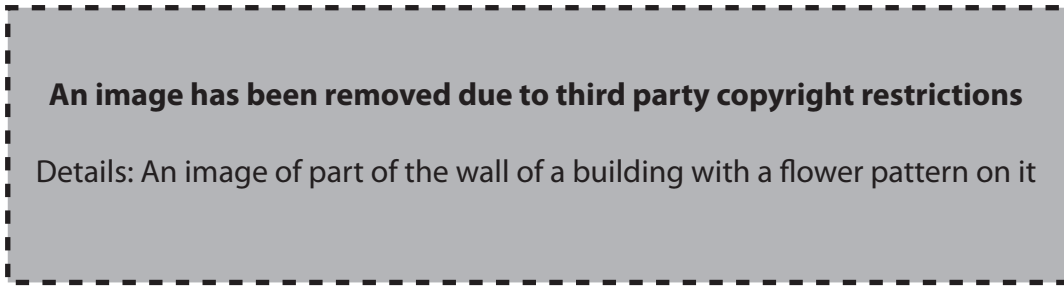
K.A. and Diana Wardle, *Cities of Legend: The Mycenaean World* (BCP)

- (a) Identify and describe objects A and B shown above. Precisely where was each of these objects found? Give an approximate date for object A. [10]
- (b) How useful have such objects and other types of evidence been in giving archaeologists information about Mycenaean religion? [15]
- (c) With reference to Mycenaean Greece, show how archaeologists have used these and other forms of art to draw conclusions about aspects of a society, apart from religion. [20]

[Quality of Written Communication: 5 marks]

[Total: 50 marks]

A2



K.A. and Diana Wardle, *Cities of Legend: The Mycenaean World* (BCP)

- (a) Identify and describe the objects depicted above. Precisely where was each of these objects found? [10]
- (b) The above objects were found near the citadel of Mycenae. How useful has this citadel been in the study of Mycenaean life? [15]
- (c) With reference to Mycenaean Greece, explain how archaeologists can draw conclusions about a society from the buildings that remain. [20]

[Quality of Written Communication: 5 marks]
[Total: 50 marks]

Section B

Answer one question from this section.

- B3 What light has archaeology thrown upon the use of metal and its importance in Mycenaean society? [50]
- B4 What light has archaeology thrown upon agriculture and its role in Mycenaean Greece? [50]
- B5 How important a role has written evidence played in the understanding of Mycenaean Greece? [50]