

OXFORD CAMBRIDGE AND RSA EXAMINATIONS
Advanced GCE

CHEMISTRY

2816/03/TEST

Practical Examination 2 (Part B – Practical Test)

Thursday

26 MAY 2005

Morning

1 hour 30 minutes

Candidates answer on the question paper.

Additional materials:

Data Sheet for Chemistry

Candidate's Plan (Part A of Practical Test)

Scientific calculator

Candidate
Number

Candidate Name

Centre Number

	<table border="1" style="width: 100%;"> <tr> <td style="width: 12.5%; height: 20px;"></td> <td style="width: 12.5%; height: 20px;"></td> <td style="width: 12.5%; height: 20px;"></td> <td style="width: 12.5%; height: 20px;"></td> <td style="width: 12.5%; height: 20px;"></td> <td style="width: 12.5%; height: 20px;"></td> </tr> </table>							<table border="1" style="width: 100%;"> <tr> <td style="width: 12.5%; height: 20px;"></td> <td style="width: 12.5%; height: 20px;"></td> <td style="width: 12.5%; height: 20px;"></td> <td style="width: 12.5%; height: 20px;"></td> <td style="width: 12.5%; height: 20px;"></td> <td style="width: 12.5%; height: 20px;"></td> </tr> </table>						

TIME 1 hour 30 minutes

INSTRUCTIONS TO CANDIDATES

- Write your name in the spaces above.
- Write your Centre number and Candidate number in the boxes above.
- Answer **all** the questions.
- Write your answers in the spaces provided on the question paper.
- Read instructions and questions carefully.

INFORMATION FOR CANDIDATES

- In this part of the Practical Test, you will be assessed on the Experimental and Investigative Skills:
 - Skill I Implementing
 - Skill A Analysing evidence and drawing conclusions
 - Skill E Evaluating evidence and procedures
- You may use a scientific calculator.
- You are advised to show all the steps in any calculations.
- You may refer to your plan produced for Part A.
- Use of a *Data Sheet for Chemistry* is allowed.

FOR EXAMINER'S USE		
Qu.	Max.	Mark
Planning	16	
Implementing & Analysing	30	
Evaluating	14	
TOTAL	60	



This question paper consists of 11 printed pages and 1 blank page.

Answer **all** the parts.

Introduction

In this Practical Test you will carry out some experiments involving iodine.

You are provided with

- an aqueous solution of iodine, **F**: Irritant 
- a solution of iodine (dissolved in aqueous potassium iodide), **G**: Irritant 
- solid hydrated sodium thiosulphate, Na₂S₂O₃·5H₂O, **H**.

Iodine vapour can be unpleasant. Ensure that the stoppers are replaced on to the bottles of iodine solutions whenever they are not in use.

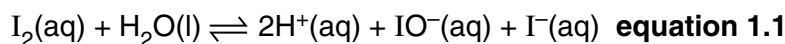
Note: you will use two different solutions of iodine. Take care not to mix them up.

Solution **F** is used in Part 1.

Solution **G** is used in Part 3.

Part 1 Investigating the nature of aqueous iodine Skills I and A (Implementing and Analysis) [8 marks]

When iodine dissolves in water, it reacts reversibly giving hydroiodic acid, HI, and iodic(I) acid, HIO. Equation 1.1, shown below, is the ionic equation for this reaction.



The IO⁻(aq) ion is colourless in solution.

(a) Silver nitrate test

Pour about a 1 cm depth of aqueous iodine, **F**, into a test tube.
Add an equal volume of aqueous silver nitrate.

aqueous silver nitrate: Irritant 

Record **two** observations.

.....

.....

.....

Name the species that reacted with silver ions.
(Refer to equation 1.1.)

.....

(b) Colour

Name the species in equation 1.1 that is responsible for the colour of aqueous iodine.

.....

(c) Explain how evidence obtained from **(a)** and **(b)** shows that there is a chemical equilibrium in an aqueous solution of iodine.

.....

.....

.....

(d) Pour about a 1 cm depth of aqueous iodine, **F**, into a test tube.
Add an equal volume of dilute aqueous sodium hydroxide.

aqueous sodium hydroxide: Irritant



State the observation.

Use Le Chatelier's principle to help you to explain your observation.

(Refer back to equation 1.1.)

.....

.....

.....

.....

Part 2 Reaction of potassium iodide with hydrogen peroxide
Skills I and A (Implementing and Analysing) [5 marks]

Pour about a 2 cm depth of aqueous potassium iodide into a test tube.
Add an equal volume of dilute sulphuric acid.

dilute sulphuric acid: Irritant 

Then add about 10 drops of aqueous hydrogen peroxide and shake the test tube thoroughly.

aqueous hydrogen peroxide: Irritant 

(a) Record the observation made after adding the aqueous hydrogen peroxide.

.....

(b) Explain what happens to iodide ions in this reaction.
Include an ionic half-equation in your answer.

.....

.....

.....

.....

.....

(c) Safety

State and explain what you would do if some of the aqueous hydrogen peroxide used in this test splashed on to your hand.

.....

.....

.....

Part 3 Titration of the solution containing iodine, G
Skill I (Implementing) [10 marks]

In this part, you will titrate the solution containing iodine in aqueous potassium iodide, **G**, with an aqueous solution of hydrated sodium thiosulphate, $\text{Na}_2\text{S}_2\text{O}_3 \cdot 5\text{H}_2\text{O}$.

The word equation for the reaction is:

iodine + sodium thiosulphate \rightarrow sodium tetrathionate ($\text{Na}_2\text{S}_4\text{O}_6$) + sodium iodide

Record all your readings in a suitable format on page 7.

Weigh the bottle provided containing hydrated sodium thiosulphate, **H**.

Transfer all of the solid into a beaker.

Weigh the empty bottle and lid.

Dissolve solid **H** in about 100 cm^3 of distilled (or de-ionised) water.

Transfer all this solution into a 250 cm^3 volumetric flask.

Add distilled or de-ionised water to make the solution up to exactly 250 cm^3 .

Invert the solution in the volumetric flask several times before use.

Fill the burette with the solution of sodium thiosulphate that you have made.

Record burette readings to 0.05 cm^3 .

Using a pipette and filler, transfer 25.0 cm^3 of the iodine solution, **G**, into a conical flask.

Carry out a trial titration with no indicator.

As sodium thiosulphate solution is run into the conical flask, the solution changes colour from dark red to pale yellow.

The end-point occurs when the pale yellow colour disappears to leave a colourless solution.

Repeat the titration procedure until you obtain **two** accurate results.

However, this time add **5 drops of starch indicator** at the point when the solution in the conical flask turns a pale yellow.

The end-point occurs when the solution turns from dark blue to colourless.

Results

Use the space below to record all your readings.
Calculate the mass of H used and the mean titre.

Part 4 Calculating the concentration of I₂ in G
Skill A (Analysing) [7 marks]

In this section your working must be shown clearly.
All answers should be quoted to **three** significant figures.

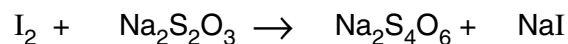
- (a) Calculate the amount, in moles, of hydrated sodium thiosulphate, **H**, in the 250 cm³ of solution you made up.
The relative formula mass of hydrated sodium thiosulphate is 248.

answer = mol

- (b) Calculate the amount, in moles, of Na₂S₂O₃ used in your mean titre.

answer = mol

- (c) Balance the equation for the reaction of iodine with sodium thiosulphate.



- (d) Calculate the concentration of I₂, in mol dm⁻³, present in solution **G**.

answer = mol dm⁻³

(e) Calculate the mass of iodine needed to make up 1.00 dm³ of solution **G**.

answer = g

Part 5 Evaluation (Skill E) [14 marks]

- (a) How would the titration readings have been affected if the volumetric flask had not been inverted several times before use?

.....

.....

.....

.....

- (b) Use information on your pipette to calculate the % accuracy when you measured out 25.0 cm³ of solution **G**. Show your working.

- (c) State and explain whether the mass of solid **H** or the volume of solution **G** was measured more accurately.

- (d) In your trial titration, you did not use any starch solution as indicator. Explain the advantage of using starch indicator as you did for the accurate titrations.

.....

.....

.....

.....

- (e) Do you think that your accurate titrations were **reliable**? Justify your answer.

.....

.....

.....

.....

- (f) Suggest why a back-titration procedure (as used in your Plan to determine the concentration of chlorine) is likely to be **less** accurate than the titration procedure you used to determine the concentration of iodine.

.....

.....

.....

.....

.....

- (g) The solution of iodine, **G**, used for your titration with sodium thiosulphate in Part 3, was made by dissolving solid iodine in an aqueous solution of potassium iodide.

A student thought that the titration would be inaccurate because the iodide ions present in potassium iodide would increase the mean titre.
State and explain whether or not you agree with this suggestion.

.....

.....

.....

.....

.....

.....

END OF QUESTION PAPER

Permission to reproduce items where third-party owned material protected by copyright is included has been sought and cleared where possible. Every reasonable effort has been made by the publisher (OCR) to trace copyright holders, but if any items requiring clearance have unwittingly been included, the publisher will be pleased to make amends at the earliest possible opportunity.

OCR is part of the Cambridge Assessment Group. Cambridge Assessment is the brand name of University of Cambridge Local Examinations Syndicate (UCLES), which is itself a department of the University of Cambridge.