

OXFORD CAMBRIDGE AND RSA EXAMINATIONS**Advanced Subsidiary GCE****CHEMISTRY****2813/01****How Far, How Fast?**

Wednesday

8 JUNE 2005

Morning

45 minutes

Candidates answer on the question paper.

Additional materials:

Data Sheet for Chemistry

Scientific calculator

Candidate Name	Centre Number	Candidate Number												
	<table border="1" style="display: inline-table; border-collapse: collapse;"> <tr> <td style="width: 15px; height: 15px;"></td> <td style="width: 15px; height: 15px;"></td> <td style="width: 15px; height: 15px;"></td> <td style="width: 15px; height: 15px;"></td> <td style="width: 15px; height: 15px;"></td> <td style="width: 15px; height: 15px;"></td> </tr> </table>							<table border="1" style="display: inline-table; border-collapse: collapse;"> <tr> <td style="width: 15px; height: 15px;"></td> <td style="width: 15px; height: 15px;"></td> <td style="width: 15px; height: 15px;"></td> <td style="width: 15px; height: 15px;"></td> <td style="width: 15px; height: 15px;"></td> <td style="width: 15px; height: 15px;"></td> </tr> </table>						

TIME 45 minutes**INSTRUCTIONS TO CANDIDATES**

- Write your name in the space above.
- Write your Centre number and Candidate number in the boxes above.
- Answer **all** the questions.
- Write your answers, in the spaces provided on the question paper.
- Read each question carefully and make sure you know what you have to do before starting your answer.

INFORMATION FOR CANDIDATES

- The number of marks is given in brackets [] at the end of each question or part question.
- You may use a scientific calculator.
- You may use the *Data Sheet for Chemistry*.
- You are advised to show all the steps in any calculations.

FOR EXAMINER'S USE		
Qu.	Max.	Mark
1	10	
2	15	
3	11	
4	9	
TOTAL	45	

This question paper consists of 8 printed pages.

Answer **all** the questions.

- 1 This question is about hydrazine, N_2H_4 , and ammonia, NH_3 . These are both compounds of nitrogen and hydrogen.

- (a) Hydrazine can be oxidised and used as a rocket fuel. The equation for one possible reaction taking place is shown below.



Some average bond enthalpies are given below.

bond	bond enthalpy / kJ mol^{-1}
N–N	+163
N≡N	+945
N–H	+390
O=O	+497
O–H	+463

Table 1.1

- (i) Use these data to calculate the enthalpy change for the reaction of hydrazine with oxygen, as shown.

answer kJ mol^{-1} [4]

- (ii) Calculate the enthalpy change for one gram of hydrazine in this reaction.

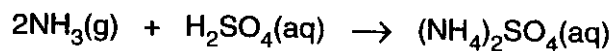
answer kJ [1]

- (b) Ammonia reacts with oxygen in a very similar way to that shown for hydrazine. The enthalpy change for one gram of ammonia is approximately the same as that for one gram of hydrazine.

Using **Table 1.1**, suggest a reason why hydrazine is used as a rocket fuel and ammonia is not.

.....
.....[1]

- (c) Ammonia reacts with sulphuric acid, as shown in the equation below.



- (i) Complete the statement below to describe how ammonia is behaving in this reaction.

Ammonia is behaving as a because

.....[2]

- (ii) State **one** important use for the compound $(\text{NH}_4)_2\text{SO}_4$.

.....[1]

- (iii) Apart from the manufacture of $(\text{NH}_4)_2\text{SO}_4$, state **one other** large-scale use of ammonia.

.....[1]

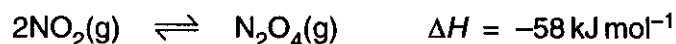
[Total: 10]

2 This question is concerned with equilibria that exist between oxides of nitrogen.

(a) State le Chatelier's principle.

.....
.....
.....[2]

(b) Nitrogen dioxide, NO_2 , is a brown gas whilst dinitrogen tetroxide, N_2O_4 , is a colourless gas. The following equilibrium between these two gases was set up.



Describe, and explain, what you would **see** after the following changes have been made and the system allowed to reach equilibrium again.

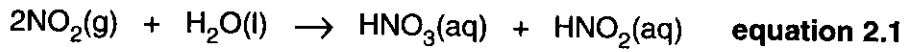
(i) The temperature is increased.

.....
.....
.....
.....[3]

(ii) The pressure is increased.

.....
.....
.....
.....[3]

(c) NO_2 is an atmospheric pollutant that reacts with water according to the equation below.



(i) Use oxidation numbers of nitrogen to explain why equation 2.1 represents a redox reaction.

.....

[2]

(ii) State a likely source of NO_2 as an atmospheric pollutant.

.....[1]

(d) The reaction of NO_2 with water, in equation 2.1, occurs when rain falls through air containing NO_2 .

Both HNO_3 and HNO_2 are acids.

Limestone contains calcium carbonate, CaCO_3 .

(i) Which ion is responsible for the acid properties of HNO_3 and HNO_2 ?

..... [1]

(ii) Write the **ionic** equation for the reaction between calcium carbonate and HNO_3 .

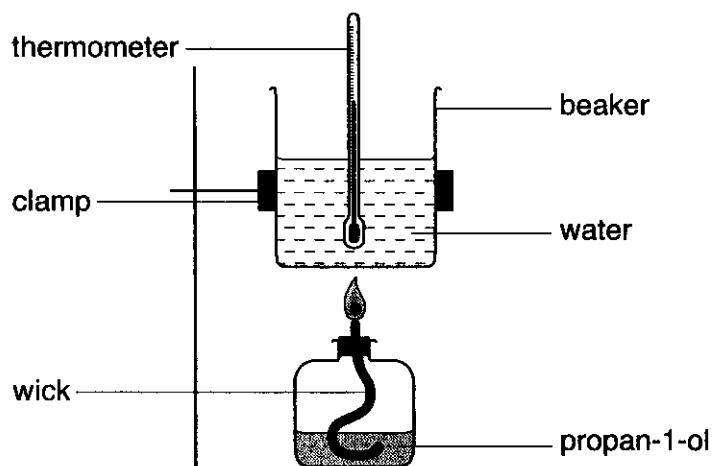
.....[2]

(iii) Norwich cathedral is built from limestone. What will happen to Norwich cathedral over a period of years if significant amounts of NO_2 are present in the atmosphere around Norwich?

.....
[1]

[Total: 15]

- 3 In an experiment to determine the standard enthalpy change of combustion of propan-1-ol, C_3H_7OH , a student used the apparatus shown below.



- (a) Define the term *enthalpy change of combustion*.

.....
.....
.....[2]

- (b) Write the equation for the standard enthalpy change of combustion of propan-1-ol, C_3H_7OH .

.....[2]

(c) The student measured 50.0 cm^3 of water into the beaker and lit the burner. When the temperature of the water had gone up by 12.8°C , he found that 0.100 g of propan-1-ol had been burnt.

(i) Calculate the energy, in kJ, produced by burning 0.100 g of propan-1-ol. The specific heat capacity of water is $4.18 \text{ J g}^{-1} \text{ K}^{-1}$.

energy = kJ [2]

(ii) Calculate the number of moles of propan-1-ol in 0.100 g .

number of moles = [2]

(iii) Calculate the enthalpy change of combustion, in kJ mol^{-1} , of propan-1-ol.

enthalpy change kJ mol^{-1} [1]

(d) The student looked in a text book and found that the actual value for the standard enthalpy change of combustion of propan-1-ol was more exothermic than the experimental value.

Suggest **two** reasons for the difference between this value and the one he obtained experimentally.

1

.....

2

..... [2]

[Total: 11]

4 (a) What is a catalyst?

.....
.....[2]

(b) Explain the terms *heterogeneous catalyst* and *homogeneous catalyst*.
In your explanation you should

- include an example of a reaction for **each type** of catalyst
- include an equation for **one** of your reactions
- describe how a **heterogeneous** catalyst works.

.....
.....
.....
.....
.....
.....
.....
.....
.....
.....
.....
.....
.....
.....
.....
.....
.....
.....
.....
.....
.....
.....
.....[7]

[Total: 9]

END OF QUESTION PAPER

OCR has made every effort to trace the copyright holders of items used in this Question paper, but if we have inadvertently overlooked any, we apologise.