

Modified Enlarged 36pt
OXFORD CAMBRIDGE AND RSA EXAMINATIONS

Thursday 23 May 2019 – Morning

AS Level Chemistry A

H032/02 Depth in chemistry

**Time allowed: 1 hour 30 minutes
plus your additional time allowance**

YOU MUST HAVE:

**the Data Sheet for Chemistry A
Insert for Question 4(b) and (c)**

YOU MAY USE:

a scientific or graphical calculator

Please write clearly in black ink.

Centre number

--	--	--	--	--

Candidate number

--	--	--	--

First name(s) _____

Last name _____

READ INSTRUCTIONS OVERLEAF



INSTRUCTIONS

Use black ink. You may use an HB pencil for graphs and diagrams.

Answer ALL the questions.

Where appropriate, your answers should be supported with working. Marks may be given for a correct method even if the answer is incorrect.

Write your answer to each question in the space provided. If additional space is required, you should use the lined page(s) at the end of this booklet. The question number(s) must be clearly shown.

INFORMATION

The total mark for this paper is 70.

The marks for each question are shown in brackets [].

Quality of extended responses will be assessed in questions marked with an asterisk (*).

BLANK PAGE

Answer ALL the questions.

1 This question is about the properties and reactions of the Group 2 element strontium.

(a) The relative atomic mass of strontium can be determined using a mass spectrometer.

(i) Explain what is meant by the term RELATIVE ATOMIC MASS of an element.

[2]

(ii) A sample of strontium has a relative atomic mass of 87.73.

The sample consists of:

82.9% Sr-88

6.9% Sr-87

one other isotope.

Determine the other isotope of strontium in the sample.

isotope of strontium = _____ [2]

(b) The table below shows two physical properties of the element strontium.

Melting point	high
Electrical conductivity	very good

Explain these physical properties of strontium, in terms of bonding and structure.

Include a labelled diagram in your answer. [5]

Diagram

Explanation _____

- (c) A student adds a small amount of strontium to water.**

When the reaction has finished, the student measures the pH of the final solution.

- (i) Write the equation for the reaction of strontium with water.**

_____ **[1]**

- (ii) Describe TWO observations which would be different if the student had used calcium in place of strontium.**

1 _____

2 _____

[2]

BLANK PAGE

- (d) When hydrated strontium chloride is heated, the water of crystallisation is removed, leaving a residue of anhydrous strontium chloride.**

A student carries out an experiment to find the value of x in the formula of hydrated strontium chloride, $\text{SrCl}_2 \cdot x\text{H}_2\text{O}$.

The student's method is outlined below.

STEP 1

Weigh an empty crucible.

Add $\text{SrCl}_2 \cdot x\text{H}_2\text{O}$ to the crucible and reweigh.

STEP 2

Heat the crucible and contents for 10 minutes.

Allow to cool and reweigh.

STEP 3

Heat the crucible and residue for another 5 minutes.

Allow to cool and weigh the crucible and residue.

Repeat step 3 a further two times.

The student's results are shown below:

Mass of empty crucible / g	15.96
Mass of crucible + $\text{SrCl}_2 \cdot x\text{H}_2\text{O}$ / g	18.65
First mass of crucible + residue / g	17.66
Second mass of crucible + residue / g	17.61
Third mass of crucible + residue / g	17.58
Fourth mass of crucible + residue / g	17.58

(i) Calculate the value of x in $\text{SrCl}_2 \cdot x\text{H}_2\text{O}$.

Give your answer to 2 significant figures.

x = _____ [3]

11

(ii) Suggest why the student takes four readings of the mass of the crucible and residue.

_____ **[1]**

(iii) Suggest TWO modifications to the method that would reduce the percentage uncertainty in the mass of the residue.

1 _____

2 _____

[2]

BLANK PAGE

2 Magnesium nitrate is used in fertilisers as a source of nitrogen.

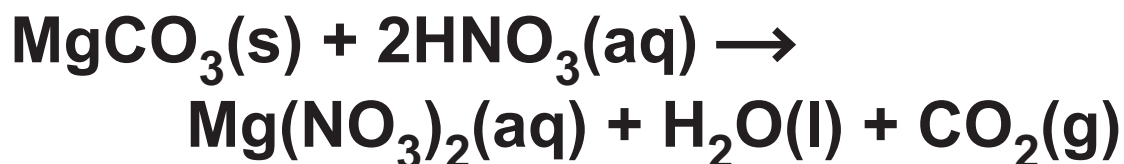
(a)* A student plans to prepare 250.0 cm³ of a 0.4000 mol dm⁻³ solution of magnesium nitrate, starting from magnesium nitrate crystals, Mg(NO₃)₂•6H₂O.

Describe how the student would prepare the solution, giving full details of quantities, apparatus and method. [6]

Additional answer space if required

(b) A solution of magnesium nitrate can be prepared by reacting magnesium carbonate, MgCO_3 , with nitric acid, $\text{HNO}_3(\text{aq})$.

The equation is shown below.



Calculate the minimum volume, in cm^3 , of 1.75 mol dm^{-3} HNO_3 that is needed to prepare a solution containing 5.00 g of $\text{Mg}(\text{NO}_3)_2$.

Give your answer to 3 significant figures.

volume = _____ cm³ [3]

(c) Magnesium nitrate decomposes when heated, as shown in the equation.



Using oxidation numbers, show which element has been oxidised and which has been reduced when magnesium nitrate decomposes.

State the changes in oxidation numbers, including all signs. [2]

Element oxidised _____

Oxidation number change:

from _____ to _____

Element oxidised _____

Oxidation number change:

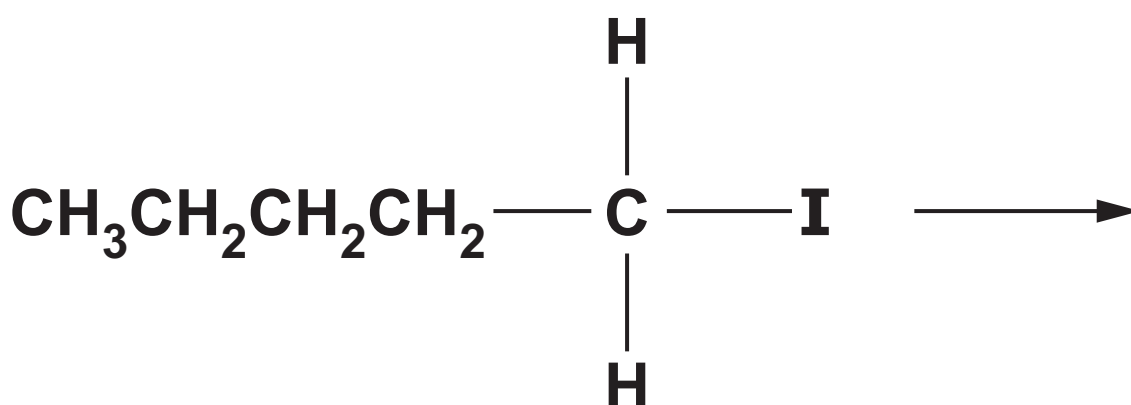
from _____ **to** _____

3 This question is about 1-iodopentane, $\text{CH}_3\text{CH}_2\text{CH}_2\text{CH}_2\text{CH}_2\text{I}$.

(a) 1-iodopentane can be hydrolysed by aqueous sodium hydroxide.

(i) Outline the mechanism for this reaction.

Include curly arrows, relevant dipoles and the final product(s).
[3]



- (ii) 1-iodopentane can also be hydrolysed by water using aqueous silver nitrate, with ethanol as the solvent.**

A student uses this method to compare the rates of hydrolysis of 1-iodopentane and 1-bromopentane.

What measurement and observation would allow the student to compare the rates of hydrolysis?

[1]

- (iii) 1-iodopentane was found to react faster than 1-bromopentane.

Explain why.

_____ [2]

- (b) The mass spectrum of 1-iodopentane is shown on the opposite page.

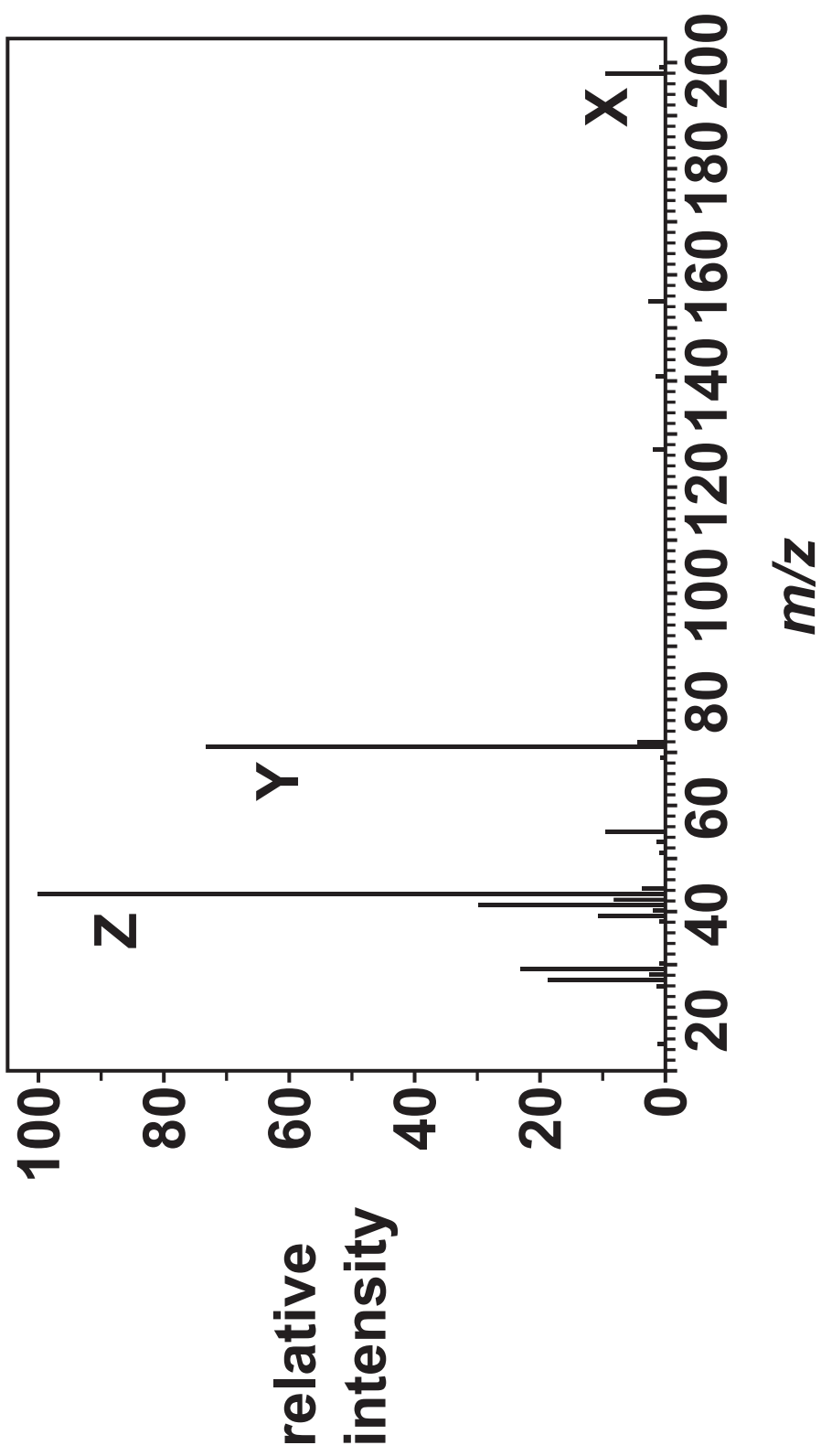
- (i) What information is given by the peak labelled X ($m/z = 198$)?

_____ [1]

- (ii) Write the structural formulae of the ions responsible for the peaks labelled Y and Z.

Y ($m/z = 71$) _____

Z ($m/z = 43$) _____ [2]



(c) 2-Iodo-2-methylbutane is an isomer of 1-iodopentane.

(i) Draw the structure of 2-iodo-2-methylbutane. [1]

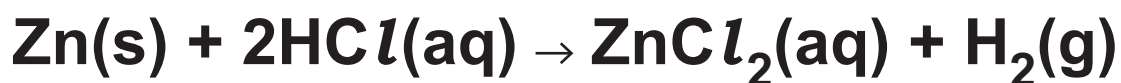
(ii) Suggest ONE similarity and ONE difference between the mass spectra of 1-iodopentane and 2-iodo-2-methylbutane.

Similarity _____

Difference _____

_____ **[2]**

- 4 Zinc reacts with hydrochloric acid, $\text{HCl}(\text{aq})$, as shown in the following equation.**



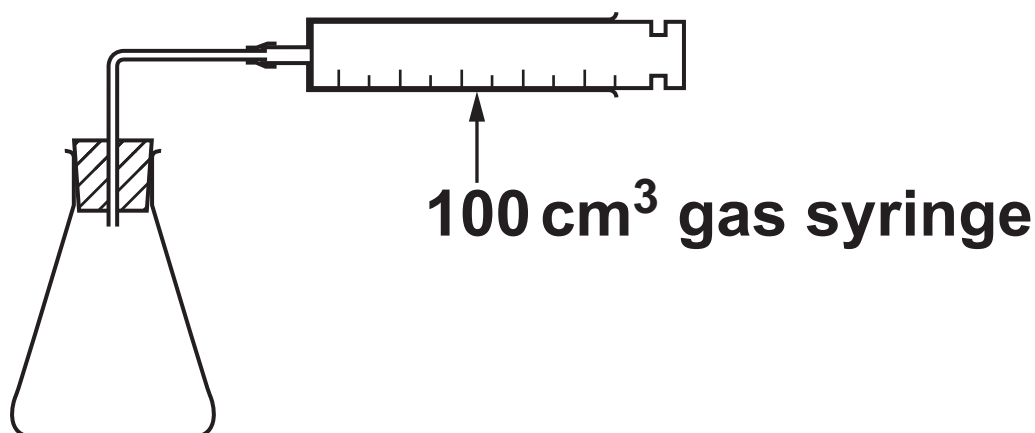
A student investigates the rate of this reaction.

- (a) The student plans to react 50.0 cm^3 of $0.100 \text{ mol dm}^{-3}$ HCl with 0.200 g of zinc (an excess).**

Calculate the volume, in cm^3 , of hydrogen that should be produced at RTP.

volume = _____ cm^3 [3]

(b) The student uses the apparatus in the diagram.



The student's method is outlined below:

Pour 50.0 cm³ of 0.100 mol dm⁻³ HCl into the conical flask.

Add 0.200 g of zinc (an excess), and quickly attach the delivery tube and gas syringe.

Measure the volume of gas collected every 20 seconds until the reaction stops.

The student obtains the results shown in TABLE 4.1.

TABLE 4.1

Time / s	0	20	40	60	80	100	120	160	200
Volume of gas / cm³	0	16	27	37	39	50	53	58	58

- (i) On the graph paper in FIG. 4.1 on the insert, label the x axis AND plot the results in TABLE 4.1. [1]
- (ii) Circle any anomalous results present in the graph you have drawn in FIG. 4.1 on the insert. [1]
- (iii) Draw a best-fit smooth curve on the graph you have drawn in FIG. 4.1 on the insert. [1]

- (c) The student repeats the experiment using:
zinc with the same mass (0.200 g)
and same surface area
the same temperature and pressure
40.0 cm³ of 0.125 mol dm⁻³ HCl,
instead of 50.0 cm³ of 0.100 mol dm⁻³ HCl.

On your graph in FIG. 4.1 on the insert sketch the curve you would expect in this experiment. [2]

- (d) The graph shows that rate of reaction decreases over time.

Explain why, in terms of collision theory.

[2]

- (e) (i) The rate of the reaction between zinc and hydrochloric acid can be increased using a solution of copper(II) sulfate as a catalyst.

Explain how a catalyst increases the rate of reaction.

[2]

(ii) Why is it difficult to classify the solution of copper(II) sulfate as a homogeneous or heterogeneous catalyst in this reaction?

[1]

BLANK PAGE

**5 This question is about hex-1-ene,
 $\text{CH}_3\text{CH}_2\text{CH}_2\text{CH}_2\text{CH}=\text{CH}_2$.**

**(a) Hex-1-ene is reacted with H_2 , HCl
and Br_2 as shown in the flowchart
opposite.**

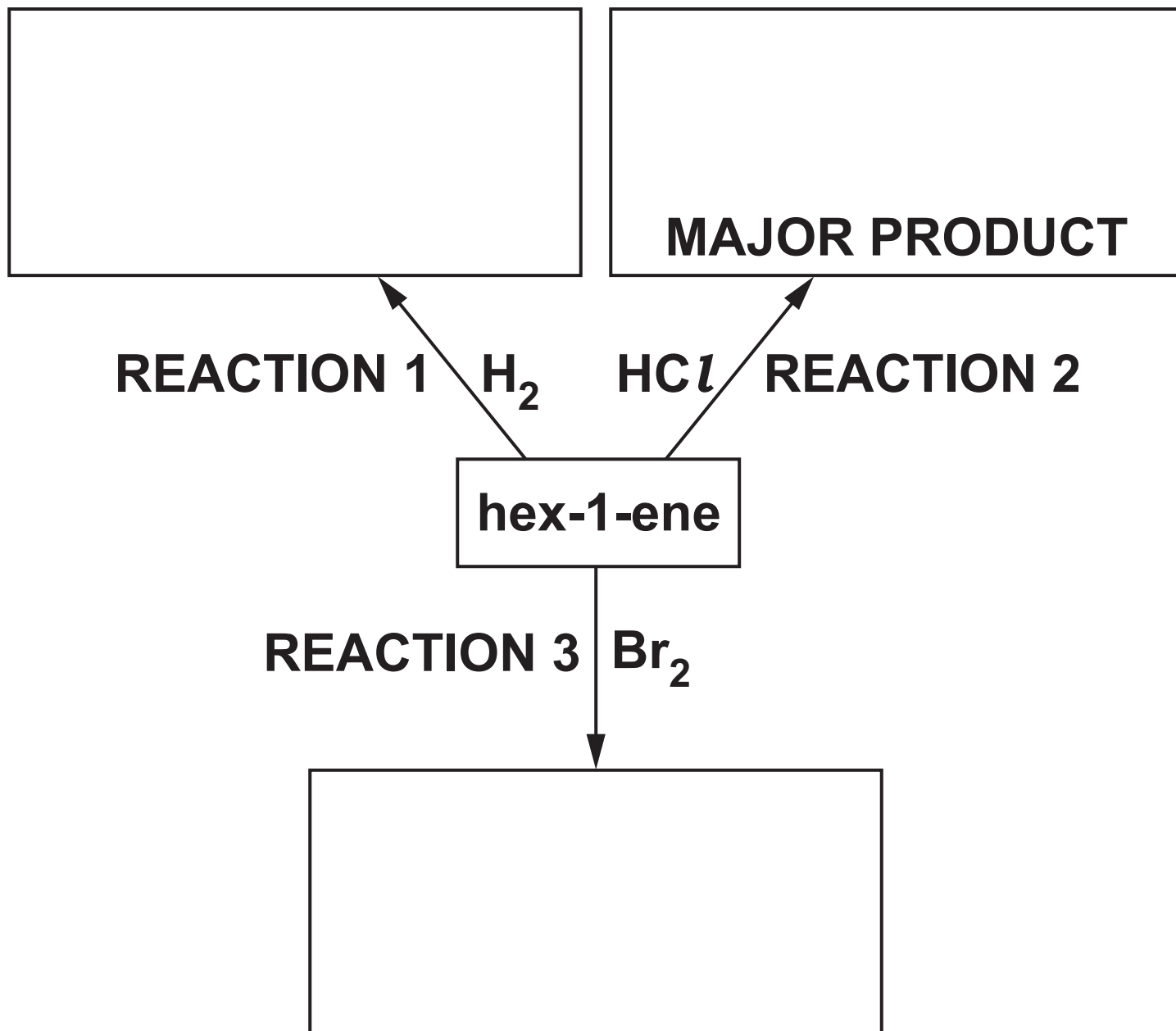
**(i) Complete the flowchart to show
the structures of the organic
products of these reactions. [3]**

**(ii) State the catalyst needed in
REACTION 1.**

_____ [1]

**(iii) What would you observe in
REACTION 3?**

_____ [1]




(b) Hex-1-ene is a liquid with a boiling point of 63 °C and a density of 0.67 g cm⁻³.

Hex-1-ene can be prepared by refluxing hexan-1-ol (boiling point 157 °C) with an acid catalyst.

Hexan-1-ol is a liquid with a boiling point of 157 °C and a density of 0.82 g cm⁻³.

The equation is shown below.



After reflux, the resulting mixture contains unreacted hexan-1-ol, hex-1-ene and water.

The mixture is then purified.

The expected percentage yield of hex-1-ene from hexan-1-ol is 62.5%.

(i)* A student plans to prepare 4.20 g of hex-1-ene by this method.

Calculate the mass of hexan-1-ol that the student should use and explain how you could obtain pure hex-1-ene from the mixture obtained after reflux. [6]

**Additional answer space if
required**

-
-
-
- (ii) Another student suggested that hex-1-ene could be prepared from hexan-2-ol by the same method.

Would you expect the percentage yield of hex-1-ene to be greater than, less than or about the same as when using hexan-1-ol?

Explain your answer.

[2]

(c) Hex-1-ene can also be polymerised to form poly(hex-1-ene).

(i) Draw a section of poly(hex-1-ene) containing TWO repeat units. [1]

(ii) Waste poly(hex-1-ene) can be disposed of usefully by recycling.

State TWO other methods of disposing of polymers that can be beneficial to the environment.

1 _____

2 _____

[2]

END OF QUESTION PAPER

ADDITIONAL ANSWER SPACE

If additional space is required, you should use the following lined page(s). The question number(s) must be clearly shown in the margin(s).

This image shows a blank sheet of white paper with horizontal ruling lines. A single vertical line runs down the left side, creating a margin. There are 20 horizontal lines in total, evenly spaced across the page. The lines are thin and black.

[illegible]

This image shows a blank sheet of white paper with horizontal ruling lines. A single vertical line runs down the left side, creating a margin. There are 20 horizontal lines in total, evenly spaced across the page. The lines are thin and black.

This image shows a blank sheet of white paper with horizontal ruling lines. A single vertical line runs down the left side, creating a margin. There are 20 horizontal lines in total, evenly spaced across the page. The lines are thin and black.



Copyright Information

OCR is committed to seeking permission to reproduce all third-party content that it uses in its assessment materials. OCR has attempted to identify and contact all copyright holders whose work is used in this paper. To avoid the issue of disclosure of answer-related information to candidates, all copyright acknowledgements are reproduced in the OCR Copyright Acknowledgements Booklet. This is produced for each series of examinations and is freely available to download from our public website (www.ocr.org.uk) after the live examination series.

If OCR has unwittingly failed to correctly acknowledge or clear any third-party content in this assessment material, OCR will be happy to correct its mistake at the earliest possible opportunity.

For queries or further information please contact The OCR Copyright Team, The Triangle Building, Shaftesbury Road, Cambridge CB2 8EA.

OCR is part of the Cambridge Assessment Group; Cambridge Assessment is the brand name of University of Cambridge Local Examinations Syndicate (UCLES), which is itself a department of the University of Cambridge.