


Leave blank

Answer ALL questions in the spaces provided.

SECTION A

1. When a solution of copper(II) nitrate, $\text{Cu}(\text{NO}_3)_2(\text{aq})$, is added to a solution of sodium carbonate, $\text{Na}_2\text{CO}_3(\text{aq})$, a greenish-blue precipitate is seen in a colourless solution.

(a) Complete and balance the equation for the reaction. Include state symbols.



(b) A flame test is carried out on a sample of the colourless solution. What flame colour would be seen?

..... (1)

(c) Identify the blocks of the Periodic Table (s, p, d or f) to which these elements belong.

Copper Sodium (1)

(Total 4 marks)

Q1

2. (a) Calculate the number of atoms in 3.50 g of lithium.

Use the Periodic Table as a source of data.

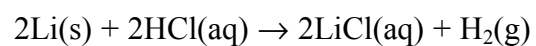
[The Avogadro constant, $L = 6.02 \times 10^{23} \text{ mol}^{-1}$]

(2)



Leave blank

(b) The equation for the reaction of lithium with hydrochloric acid is shown below.



(i) Rewrite this equation as an ionic equation, omitting the spectator ions.

(1)

(ii) Draw a 'dot and cross' diagram of lithium chloride showing **all** the electrons. Indicate charges clearly on your diagram.

(2)

(iii) The value of the standard enthalpy change for the reaction, ΔH^\ominus , is -557 kJ mol^{-1} . State TWO of the reaction conditions necessary for this enthalpy change to be **standard**.

.....

.....

.....

.....

.....

(2)

Q2

(Total 7 marks)



3. (a) Name the homologous series to which the organic compound $\text{CH}_2=\text{CHCH}_3$ belongs.

.....
(1)

(b) Write the structural formula of a member of the series named in (a) which contains four carbon atoms.

.....
(1)

(Total 2 marks)

Leave
blank

Q3

TOTAL FOR SECTION A: 13 MARKS



Leave
blank

SECTION B

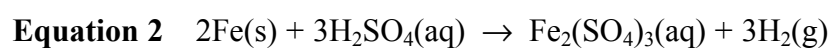
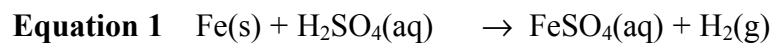
4. This question is about iron and some of its compounds.

(a) Name the type of bonding in iron and draw a labelled diagram to illustrate it.

Name

(2)

(b) A student investigated the reaction of iron with sulphuric acid to find out which of two possible equations is followed.



(i) Deduce the formula of the iron ions in

$\text{FeSO}_4(\text{aq})$ $\text{Fe}_2(\text{SO}_4)_3(\text{aq})$

(1)

(ii) Explain why both equations represent oxidation of iron.

.....

.....

(1)



Leave
blank

(iii) In the investigation, 0.500 g of iron was reacted with 10.0 cm³ of sulphuric acid of concentration 2.00 mol dm⁻³.

Calculate the number of moles of each substance. Use the Periodic Table as a source of data.

Iron, Fe

Sulphuric acid, H₂SO₄

(2)

(iv) The total volume of hydrogen produced, measured at room temperature and pressure, was 214 cm³.

Calculate the number of moles of hydrogen molecules in this volume. Hence show that **Equation 1** is followed.

[The molar volume of a gas is 24 000 cm³ at room temperature and pressure]

(2)

(v) Why was an excess of sulphuric acid used in this reaction?

.....
.....

(1)



Leave blank

(c) The solution of iron sulphate, FeSO_4 , made in this reaction was then mixed with a solution of ammonium sulphate to make the double salt called Mohr's salt, with the formula $(\text{NH}_4)_2\text{SO}_4 \cdot \text{FeSO}_4 \cdot 6\text{H}_2\text{O}$.

(i) The ammonium sulphate solution was made by adding an excess of aqueous ammonia to sulphuric acid.

Name an indicator, other than Universal Indicator, which would change colour when an excess of aqueous ammonia reacts with sulphuric acid. State the colours you would see.

Indicator

Colour in sulphuric acid

Colour when excess ammonia is added

(2)

(ii) This mixture was then boiled to drive off excess ammonia. This produced a solution of ammonium sulphate which was mixed with the iron sulphate solution.

What steps would be taken to produce dry crystals of Mohr's salt from the mixture?

.....
.....
.....
.....
.....
.....

(2)

(Total 13 marks)

Q4

--	--



Leave
blank

5. Butan-1-ol is a primary alcohol with the formula $\text{CH}_3\text{CH}_2\text{CH}_2\text{CH}_2\text{OH}$.

(a) Butan-1-ol can be converted into an aldehyde.

(i) What type of reaction is this?

.....
(1)

(ii) Give the names or formulae of the TWO reagents you would mix with butan-1-ol to carry out this reaction.

.....
.....
(2)

(iii) What colour change would you see when the reaction occurs?

From to
(1)

(iv) Draw a labelled diagram showing the apparatus you would use to carry out this reaction and collect the product.

(2)



Leave
blank

(v) Draw the **displayed** formula of the aldehyde that forms.

(1)

(vi) An isomer of butan-1-ol produces butanone if treated as in (ii).

How would you distinguish the aldehyde from butanone?
Name the reagent you would use and state your observation with each
compound.

Reagent

Observation with aldehyde

Observation with butanone

(3)

(b) Draw the **displayed** formula of another **primary** alcohol which is an isomer of
butan-1-ol, and name it.

Name

(2)

Q5

(Total 12 marks)

9

Turn over



BLANK PAGE



6. (a) An atom of argon has mass number 40. Complete the table below showing the composition of this argon atom.

Use the Periodic Table as a source of data.

Protons	
Electrons	
Neutrons	

(2)

- (b) An atom of potassium has mass number 39. Explain, in terms of atomic structure, why argon comes before potassium in the Periodic Table.

.....

.....

.....

.....

(1)

- (c) A sample of argon contains a mixture of isotopes as shown below.

Calculate the relative atomic mass of argon in the sample. Give your answer to **three** significant figures.

Isotopic mass	% abundance
36.0	1.34
38.0	0.160
40.0	98.5

(2)

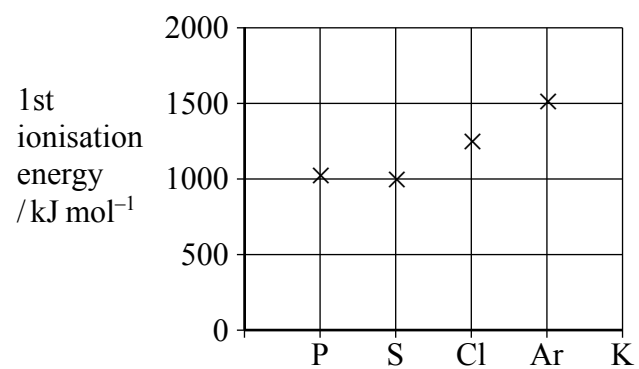
- (d) Write the electron configuration of argon in s, p notation.

.....

(1)



(e) The chart shows the first ionisation energy of some elements in the third period of the Periodic Table.



(i) Write the chemical equation, with state symbols, which corresponds to the first ionisation energy of argon.

.....
(1)

(ii) On the chart, add a cross to show the first ionisation energy of potassium. Justify your choice of the position of the cross.

.....

(2)

(iii) Explain why there is a small decrease in first ionisation energy going from phosphorus to sulphur.

.....

(2)



Leave
blank

(iv) Explain why there is an increase in first ionisation energy going from sulphur to chlorine.

.....
.....
.....
.....

(2)

(f) Suggest why argon is used to fill some types of light bulbs.

.....
.....

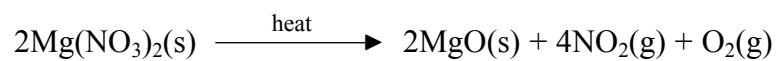
(1)

Q6

(Total 14 marks)



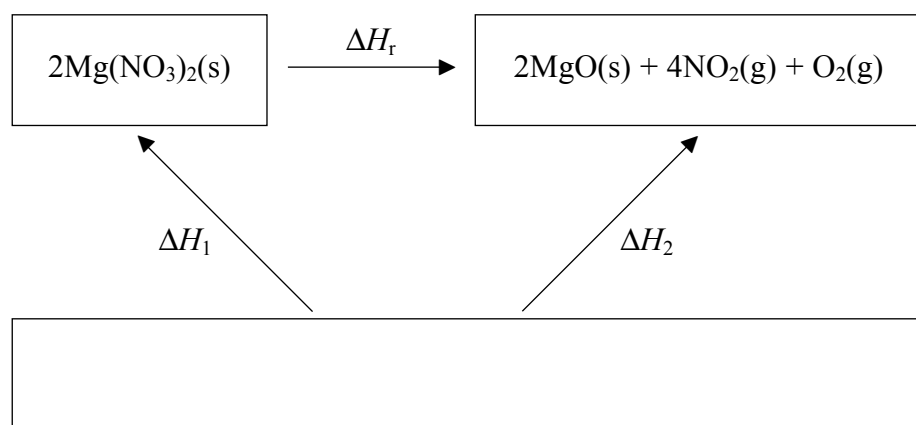
7. (a) The equation below shows a reaction of magnesium nitrate.



What type of reaction is taking place?

.....
(1)

(b) The Hess cycle below can be used to find the enthalpy change for the reaction in (a), ΔH_r , using enthalpy changes of formation.



(i) Complete the empty box in the cycle.
(2)

(ii) Use the cycle and the data below to calculate the enthalpy change of the reaction, ΔH_r .

	ΔH_f /kJ mol ⁻¹
Mg(NO ₃) ₂	-790.7
MgO	-601.7
NO ₂	+33.2

(3)

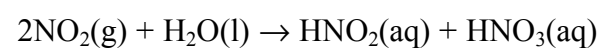


Leave
blank

- (c) Magnesium oxide is a basic oxide which produces an alkaline solution with water. Write an equation to show how the oxide ion, O^{2-} , acts as a base in the reaction with water.

.....
(1)

- (d) Nitrogen dioxide reacts with water to form a solution containing a mixture of two acids.



Would you expect the solution to conduct electricity? Explain your answer.

.....
.....
(1)

Q7

(Total 8 marks)

TOTAL FOR SECTION B: 47 MARKS
TOTAL FOR PAPER: 60 MARKS

END



