

CANDIDATE
NAME

CENTRE
NUMBER

--	--	--	--	--

CANDIDATE
NUMBER

--	--	--	--

CHEMISTRY

9701/22

Paper 2 Structured Questions AS Core

May/June 2014

1 hour 15 minutes

Candidates answer on the Question Paper.

Additional Materials: Data Booklet

READ THESE INSTRUCTIONS FIRST

Write your Centre number, candidate number and name on all the work you hand in.

Write in dark blue or black pen.

You may use an HB pencil for any diagrams or graphs.

Do not use staples, paper clips, glue or correction fluid.

DO **NOT** WRITE IN ANY BARCODES.

Answer **all** questions.

Electronic calculators may be used.

You may lose marks if you do not show your working or if you do not use appropriate units.

A Data Booklet is provided.

At the end of the examination, fasten all your work securely together.

The number of marks is given in brackets [] at the end of each question or part question.

This document consists of **9** printed pages and **3** blank pages.



Answer **all** the questions in the spaces provided.

- 1 (a) Explain what is meant by the term *nucleon number*.

.....
 [1]

- (b) Bromine exists naturally as a mixture of two stable isotopes, ^{79}Br and ^{81}Br , with relative isotopic masses of 78.92 and 80.92 respectively.

- (i) Define the term *relative isotopic mass*.

.....

 [2]

- (ii) Using the relative atomic mass of bromine, 79.90, calculate the relative isotopic abundances of ^{79}Br and ^{81}Br .

[3]

- (c) Bromine reacts with the element **A** to form a compound with empirical formula ABr_3 . The percentage composition by mass of ABr_3 is **A**, 4.31; Br, 95.69.

Calculate the relative atomic mass, A_r , of **A**.
 Give your answer to **three** significant figures.

A_r of **A** = [3]

(d) The elements in Period 3 of the Periodic Table show different behaviours in their reactions with oxygen.

(i) Describe what you would **see** when separate samples of magnesium and sulfur are reacted with oxygen.

Write an equation for each reaction.

magnesium

.....

sulfur

.....

[4]

(ii) Write equations for the reactions of aluminium oxide, Al_2O_3 , with sodium hydroxide,

.....

hydrochloric acid.

.....

[2]

(e) Phosphorus reacts with chlorine to form PCl_5 .

State the shape of and two different bond angles in a molecule of PCl_5 .

shape of PCl_5

bond angles in PCl_5 [2]

[Total: 17]

- 2 A 6.30 g sample of hydrated ethanedioic acid, $\text{H}_2\text{C}_2\text{O}_4 \cdot x\text{H}_2\text{O}$, was dissolved in water and the solution made up to 250 cm^3 .

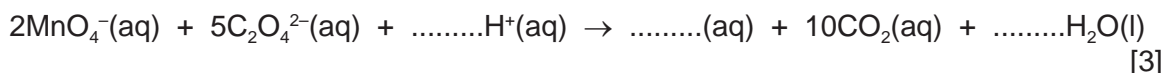
A 25.0 cm^3 sample of this solution was acidified and titrated with $0.100 \text{ mol dm}^{-3}$ potassium manganate(VII) solution. 20.0 cm^3 of this potassium manganate(VII) solution was required to react fully with the ethanedioate ions, $\text{C}_2\text{O}_4^{2-}$, present in the sample.

(a) The MnO_4^- ions in the potassium manganate(VII) *oxidise* the ethanedioate ions.

- (i) Explain, in terms of electron transfer, the meaning of the term *oxidise* in the sentence above.

.....
 [1]

- (ii) Complete and balance the ionic equation for the reaction between the manganate(VII) ions and the ethanedioate ions.



(b) (i) Calculate the number of moles of manganate(VII) used in the titration.

[1]

- (ii) Use the equation in (a)(ii) and your answer to (b)(i) to calculate the number of moles of $\text{C}_2\text{O}_4^{2-}$ present in the 25.0 cm^3 sample of solution used.

[1]

(iii) Calculate the number of moles of $\text{H}_2\text{C}_2\text{O}_4 \cdot x\text{H}_2\text{O}$ in 6.30 g of the compound.

[1]

(iv) Calculate the relative formula mass of $\text{H}_2\text{C}_2\text{O}_4 \cdot x\text{H}_2\text{O}$.

[1]

(v) The relative formula mass of anhydrous ethanedioic acid, $\text{H}_2\text{C}_2\text{O}_4$, is 90.

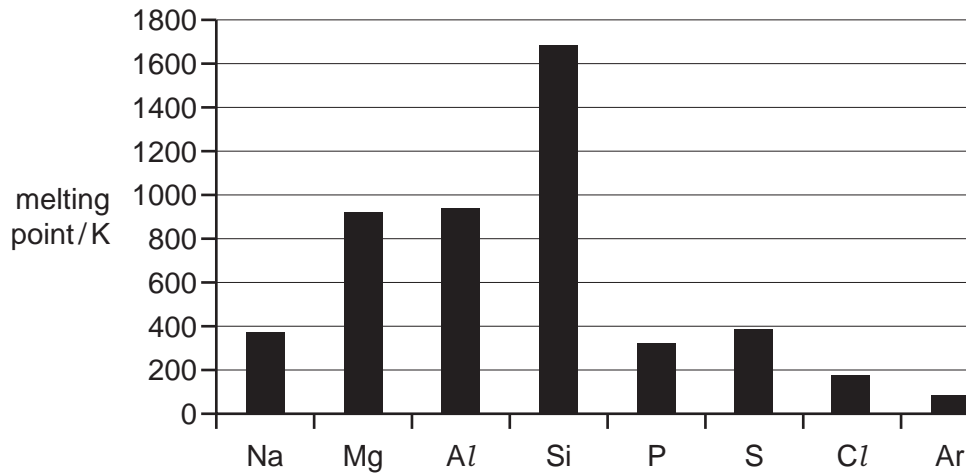
Calculate the value of x in $\text{H}_2\text{C}_2\text{O}_4 \cdot x\text{H}_2\text{O}$.

[1]

[Total: 9]

3 The elements in Period 3 of the Periodic Table show variations in their behaviour across the period.

(a) The bar chart below shows the variation of melting points of the elements across Period 3.



In each of the following parts of this question you should clearly identify the interactions involved and, where appropriate, explain their relative magnitudes.

(i) Explain the general increase in melting point from Na to Al.

.....

.....

.....

..... [3]

(ii) Explain the variation of melting points from P to Ar.

.....

.....

.....

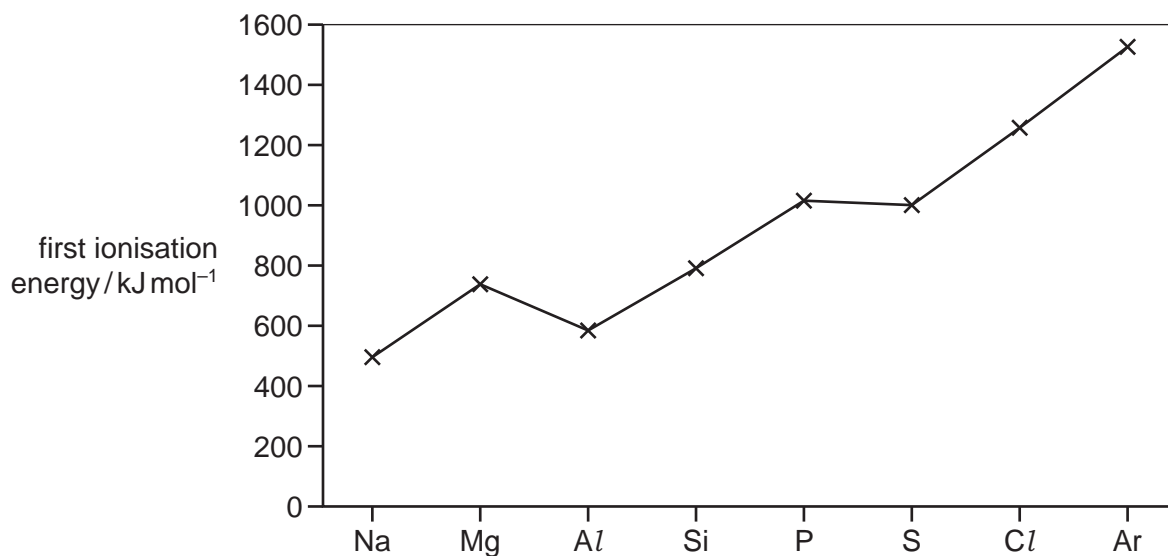
..... [3]

(iii) Explain why Si has a much higher melting point than any of the other elements in the period.

.....

..... [1]

(b) The graph below shows the variation of the first ionisation energies across Period 3.



(i) Explain why the first ionisation energy of Ar is greater than that of Cl.

.....
 [1]

(ii) Explain why the first ionisation energy of Al is less than that of Mg.

.....
 [1]

(iii) Explain why the first ionisation energy of S is less than that of P.

.....
 [1]

[Total: 10]

4 Crude oil is processed to give a wide variety of hydrocarbons.

(a) Give the names of one physical process and one chemical process carried out during the processing of crude oil.

physical process

chemical process

[2]

(b) Alkanes and alkenes can both be obtained from crude oil.

(i) Explain why alkanes are unreactive.

.....

..... [2]

(ii) State the bond angles in a molecule of

ethane,

ethene.

[1]

(iii) State the shape of each molecule in terms of the arrangement of the atoms bonded to each carbon atom.

ethane ethene [1]

(iv) Explain why these molecules have different shapes in terms of the carbon-carbon bonds present.

.....

..... [1]

(c) (i) Use a series of equations to describe the mechanism of the reaction of ethane with chlorine to form chloroethane. Name the steps in this reaction.

.....

.....

.....

.....

..... [5]

(ii) Write an equation to show how butane could be produced as a by-product of this reaction.

..... [1]

[Total: 13]

5 A hydrocarbon, **P**, with the formula C_6H_{12} readily decolourises bromine.

On reaction with hot, concentrated, acidified potassium manganate(VII) solution a single organic product, **Q**, is obtained.

Q gives an orange precipitate when reacted with 2,4-dinitrophenylhydrazine, 2,4-DNPH reagent, but has no reaction with Tollens' reagent.

(a) (i) Explain these observations.

.....

.....

.....

.....

.....

.....

.....

.....

.....

.....

..... [4]

(ii) Draw the skeletal formula of **P** and give its name.

name of **P** [2]

(iii) Draw the skeletal formula of **Q** and give its name.

name of **Q** [2]

- (b) There are several structural isomers of **P** that also decolourise bromine, but only four of these structural isomers exhibit geometrical (cis-trans) isomerism.

Give the structures of any **three** structural isomers of **P** that exhibit geometrical (cis-trans) isomerism.

[3]

[Total: 11]

Permission to reproduce items where third-party owned material protected by copyright is included has been sought and cleared where possible. Every reasonable effort has been made by the publisher (UCLES) to trace copyright holders, but if any items requiring clearance have unwittingly been included the publisher will be pleased to make amends at the earliest possible opportunity.

Cambridge International Examinations is part of the Cambridge Assessment Group. Cambridge Assessment is the brand name of University of Cambridge Local Examinations Syndicate (UCLES), which is itself a department of the University of Cambridge.