

Surname						Other Names					
Centre Number						Candidate Number					
Candidate Signature											

Leave blank

General Certificate of Education
June 2006
Advanced Subsidiary Examination



CHEMISTRY
Unit 3(b) Practical Examination

CHM3/P

Thursday 18 May 2006 9.00 am to 11.00 am

For this paper you must have

- a calculator.

Time allowed: 2 hours

Instructions

- Use blue or black ink or ball-point pen.
- Fill in the boxes at the top of this page.
- Carry out **all three** exercises.
- Answer **all** questions.
- Answer questions in the spaces provided. All working must be shown.
- Do all rough work in this book. Cross through any work you do not want marked.
- Take careful note of all the instructions given in each exercise.
- The Periodic Table/Data Sheet is provided on pages 3 and 4. Detach this perforated sheet at the start of the examination.

Information

- You must **not** use note books and laboratory books.
- The maximum mark for this paper is 30.
- The skills which are being assessed are
Skill 1 Planning (8 marks)
Skill 2 Implementing (8 marks)
Skill 3 Analysing (8 marks)
Skill 4 Evaluating (6 marks)
- You will be assessed on your ability to use an appropriate form and style of writing, to organise relevant information clearly and coherently, and to use specialist vocabulary, where appropriate.

Advice

- You are advised to spend about 40 minutes on each of the three exercises.
- You are advised to carry out Exercise 1 first.

For Examiner's Use			
Number	Mark	Number	Mark
Skill 1			
Skill 2			
Skill 3			
Skill 4			
Total (Column 1) →			
Total (Column 2) →			
TOTAL			
Examiner's Initials			

This paper consists of the following.

- | | | |
|------------|-----------------------------------|--|
| Exercise 1 | Implementing and Analysing | Determination of the temperature rise during a neutralisation reaction |
| Exercise 2 | Analysing and Evaluating | Determination of the relative molecular mass, M_r , of a volatile liquid |
| Exercise 3 | Planning | The relative molecular mass, M_r , of a Group I metal carbonate. |

An essential part of any practical work is to plan for the most efficient use of the time available. There is enough time to complete the exercises set provided that a sensible approach is used.

You are advised to spend approximately

40 minutes on Exercise 1

40 minutes on Exercise 2

40 minutes on Exercise 3

Gas constant $R = 8.31 \text{ J K}^{-1} \text{ mol}^{-1}$

Table 1
Proton n.m.r chemical shift data

Type of proton	δ/ppm
RCH_3	0.7–1.2
R_2CH_2	1.2–1.4
R_3CH	1.4–1.6
RCOCH_3	2.1–2.6
ROCH_3	3.1–3.9
RCOOCH_3	3.7–4.1
ROH	0.5–5.0

Table 2
Infra-red absorption data

Bond	Wavenumber/ cm^{-1}
C—H	2850–3300
C—C	750–1100
C=C	1620–1680
C=O	1680–1750
C—O	1000–1300
O—H (alcohols)	3230–3550
O—H (acids)	2500–3000

Turn over for the first exercise

Turn over 

Exercise 1 Determination of the temperature rise during a neutralisation reaction

Skills assessed **Implementing** (8 marks) **and Analysing** (2 marks)

Introduction

You are provided with aqueous solutions of nitric acid and sodium hydroxide. The concentration of both solutions is 1.00 mol dm^{-3} . You are required to determine the temperature rise for the neutralisation of a sample of nitric acid by sodium hydroxide.

Wear eye protection at all times.

Assume that all solutions are toxic and corrosive.

Procedure

- 1 Rinse a burette with the nitric acid provided. Set up the burette and, using a funnel, fill it with the nitric acid provided.
- 2 Using the burette, transfer 25.0 cm^3 of the nitric acid to a clean, dry plastic cup.
- 3 Measure the temperature of the nitric acid in the cup to one decimal place. Record your result.

Temperature of the nitric acid / °C	
-------------------------------------	--


- 4 Wash the thermometer with distilled or de-ionised water and dry the thermometer.
- 5 Rinse a pipette with the sodium hydroxide solution provided. Using this pipette and a filler, transfer 25.0 cm^3 of the sodium hydroxide solution to a second clean, dry plastic cup.
- 6 Place the plastic cup containing the sodium hydroxide solution in a beaker to provide support and additional insulation. Mount the thermometer in the cup using a clamp and stand. The bulb of the thermometer must be fully immersed in the solution. Place a stirrer in the cup.
- 7 Stir the sodium hydroxide solution in the cup and measure the temperature to one decimal place. Record your result in the table below. Every minute for a further three minutes stir the solution, measure the temperature and record each result in the table.
- 8 At the fourth minute add the 25.0 cm^3 of nitric acid from the plastic cup. Stir the mixture but do not record the temperature.
- 9 Continue to stir the mixture, and measure the temperature at the fifth minute, and then every subsequent minute up to ten minutes. Record each temperature in the table.

Time / minutes	0	1	2	3	4	5	6	7	8	9	10
Temperature / °C											

For Examiner's use only			
M		P	
R		A	

- 10 Plot a graph of **temperature** (y -axis) against **time** (x -axis) on the graph paper below. Draw a line of best fit for the points before the fourth minute. Draw a second line of best fit for the points after the fourth minute. Extrapolate both lines to the fourth minute. Hence determine an accurate value for the temperature rise at the fourth minute.

Accurate value for the temperature rise °C



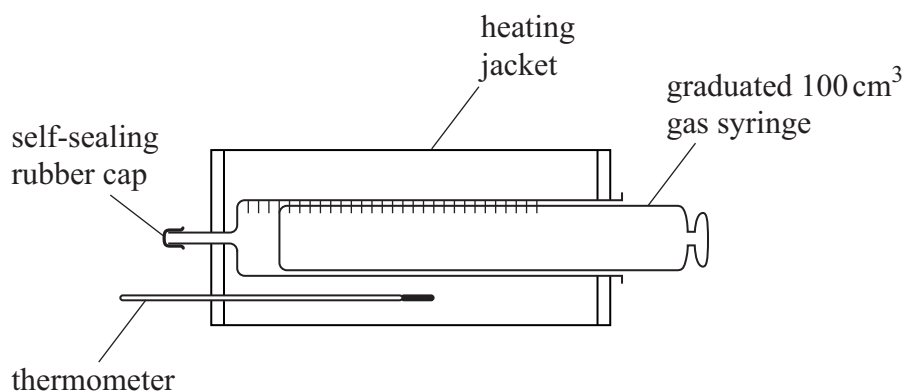
Exercise 2 Determination of the relative molecular mass, M_r , of a volatile liquid

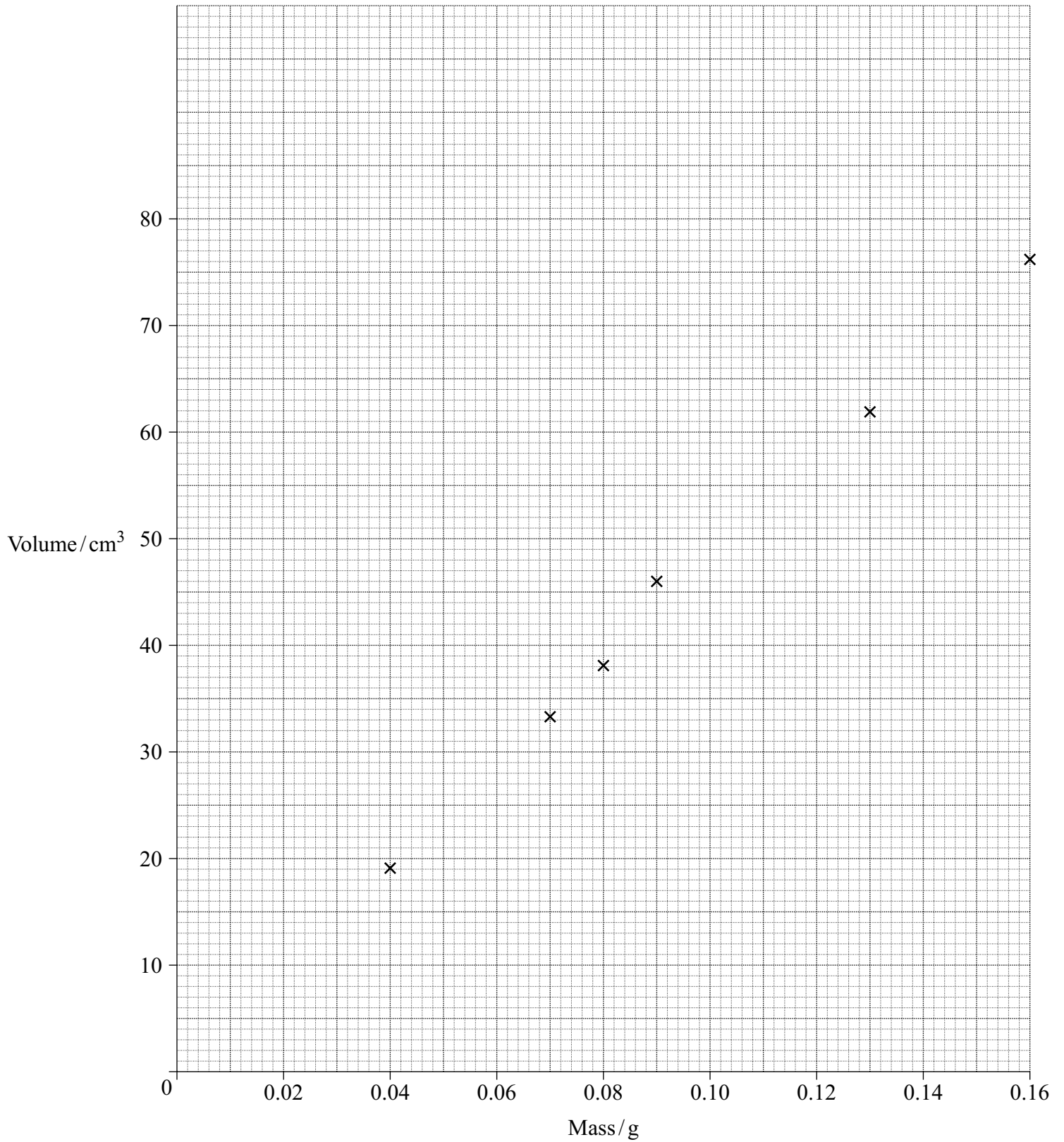
Skills assessed **Analysing** (6 marks) **and Evaluating** (6 marks)

Introduction

Compound **X** is a volatile liquid. In order to determine the relative molecular mass, M_r , of **X**, a student carried out six experiments. In each experiment a measured mass of **X** was injected into an empty 100 cm^3 gas syringe maintained at a pressure of 100 kPa and a temperature of 373 K . In each of the six experiments the volume of gas produced was measured. The student's results are shown on the graph on page 9.

The apparatus used is shown in the diagram below.





Turn over ►

Analysis **Full marks can only be scored if you show all your working.**

- 1 Draw a best fit straight line on the graph.
- 2 Use the graph to determine the volume of gas which would have been produced by 0.10 g of **X**.

Volume of gas

- 3 State the ideal gas equation.

.....

- 4 Use your answers to part (2) and part (3) to calculate the M_r of **X** ($R=8.31 \text{ JK}^{-1} \text{ mol}^{-1}$).

.....

.....

.....

.....

.....

.....

- 5 Assume the maximum errors for the apparatus used in this experiment were

balance $\pm 0.01 \text{ g}$

gas syringe $\pm 1 \text{ cm}^3$

Estimate the maximum percentage error in using each piece of apparatus, and hence calculate the overall apparatus error. Use a mass of 0.10 g and the volume from part (2) to calculate these errors.

.....

.....

.....

.....

.....

Evaluation **Full marks can only be scored if you show all your working.**

1 Consider the graph and comment on the accuracy of the results obtained by the student. Is your line of best fit good enough for you to use with confidence? Identify any anomalous results.

.....
.....
.....

2 The correct value for the relative molecular mass of **X** is 72.0. Calculate the difference between the student's value and this correct value. Express this difference as a percentage of the correct value.

(If you could not complete the calculation in part (4) of the **Analysis** section, you should assume that the student's value is 78.5. This is not the correct value.)

Difference

Percentage

.....

3 Apart from loss of liquid during transfer to the gas syringe, identify **one** other source of error in this experiment. Suggest **one** improvement to minimise this other source of error.

Source of error

.....

Improvement

.....

4 Would a loss of liquid during transfer to the gas syringe result in a lower value for the M_r of liquid **X**? Explain your answer.

.....

.....

.....


.....

Exercise 3 The relative molecular mass, M_r , of a Group I metal carbonate

Skill assessed **Planning** (8 marks)

Introduction

A Group I metal carbonate, M_2CO_3 , (relative formula mass, M_r , between 100 and 150) reacts with hydrochloric acid as shown in the equation below.



The M_r can be calculated by using the results from a titration in which standard hydrochloric acid is added from a burette to 25.0 cm³ portions of a solution of the carbonate. Methyl orange is a suitable indicator for this titration; it is red in acid and yellow in alkali.

You are provided with a solid sample of the Group I metal carbonate and a 0.100 mol dm⁻³ solution of hydrochloric acid.

Questions

Use the information above to answer the following questions in the space provided.

- 1 Suggest a suitable concentration for the Group I metal carbonate solution to be used. Explain your reasons for choosing this concentration.
- 2 State the volume of the standard solution of the metal carbonate you would prepare. Calculate the mass of the Group I metal carbonate you would need to weigh out to prepare this solution.
- 3 Describe in **detail** how you would prepare your standard solution. You do **not** need to describe the titration itself.
- 4 State how much indicator should be used and describe the colour change at the end-point.
- 5 Show how you would use the titration results to calculate the M_r of the Group I metal carbonate.
- 6 State **one** potential hazard and the relevant safety precautions you would take.

END OF QUESTIONS

.....

.....

.....

.....

