

Surname					Other Names				
Centre Number					Candidate Number				
Candidate Signature									

Leave blank

General Certificate of Education  
2010  
Advanced Level Examination



**APPLIED SCIENCE**  
**Unit 11 Controlling Chemical Processes**

**SC11**

**Specimen Paper**

**For this paper you must have:**

- a pencil and a ruler
- a calculator.

Time allowed: 1 hour 30 minutes

**Instructions**

- Use blue or black ink or ball-point pen.
- Fill in the boxes at the top of this page.
- Answer **all** questions.
- Answer the questions in the space provided.
- Do all rough work in this book. Cross through any work you do not want to be marked.
- Show the working of your calculations.

**Information**

- The marks for the questions are shown in brackets.
- The maximum mark for this paper is 80.
- You are expected to use a calculator where appropriate.
- You will be marked on your ability to
  - use good English
  - organise information clearly
  - use specialist vocabulary where appropriate.

For Examiner's Use			
Number	Mark	Number	Mark
1		5	
2		6	
3		7	
4			
Total (Column 1)		→	
Total (Column 2)		→	
TOTAL			
Examiner's Initials			

This specimen paper (based on SC11 – June 2008) has been modified to show how quality of written communication (QWC) and stretch and challenge will be incorporated into operational papers from January 2010.

In this paper QWC is assessed in: **Question 2(b)(i) and Question 4(c)(ii).**

There are no discrete marks for QWC and in the final answer QWC will be one of the criteria used to assign a mark. Please refer to the appropriate mark scheme.

**SC11**



---

Answer **all** questions in the spaces provided.

---

- 1** The chloralkali industry produces sodium hydroxide, chlorine and hydrogen by the electrolysis of brine (sodium chloride solution). In the UK, rock salt is the raw material that is used to produce brine.

Sodium hydroxide is important in many manufacturing processes. For example, it is used to hydrolyse the complex esters found in vegetable oils to produce soap.

- 1** (a) The cost of the vegetable oil used in soap manufacture is a direct cost.

- 1** (a) (i) Explain the meaning of the term *direct cost*.

.....

.....

(1 mark)

- 1** (a) (ii) Identify an indirect cost for this manufacturing process.

.....

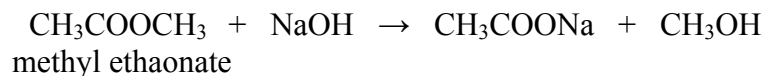
(1 mark)

- 1** (a) (iii) What type of cost is the cost of building the electrolytic cell?

.....

(1 mark)

- 1 (b) Simple esters, such as methyl ethanoate, are hydrolysed by sodium hydroxide in the same way as in soap manufacture.



It is important for chemists to control the rate of hydrolysis. The table shows the results of a series of experiments carried out to study the effect of changes in concentration on the hydrolysis of this ester.

Experiment	Initial concentration of methyl ethanoate ( $\text{mol dm}^{-3}$ )	Initial concentration of sodium hydroxide ( $\text{mol dm}^{-3}$ )	Initial rate of reaction ( $\text{mol dm}^{-3} \text{s}^{-1}$ )
1	1.0	4.0	$2.6 \times 10^{-2}$
2	0.5	4.0	$1.3 \times 10^{-2}$
3	2.0	2.0	

Suggest a suitable experimental method that could be used to monitor the rate of this reaction.

.....  
 .....  
 (1 mark)

- 1 (c) Use the results shown in the table above to determine the order of this hydrolysis reaction with respect to methyl ethanoate. Explain your reasoning.

Order .....

Explanation .....

.....  
 (2 marks)

- 1 (d) The reaction is first order with respect to sodium hydroxide at low concentrations.

- 1 (d) (i) Write the rate equation for the hydrolysis reaction.

.....  
 (1 mark)

- 1 (d) (ii) Calculate the initial rate of reaction when the concentration of methyl ethanoate is  $2.0 \text{ mol dm}^{-3}$  and the concentration of sodium hydroxide is  $2.0 \text{ mol dm}^{-3}$ .

.....  
 .....  
 (1 mark)

**Question 1 continues on the next page**

**Turn over ▶**

- 1 (e) If the concentration of the sodium hydroxide used is increased to a much higher concentration, such as  $5 \text{ mol dm}^{-3}$ , the order of the reaction with respect to sodium hydroxide becomes zero.

Explain what *zero order* means.

.....  
.....

(1 mark)

- 1 (f) The rate of this hydrolysis is slow at room temperature, so the industrial production of soap is carried out at higher temperatures.

Explain how increasing the temperature increases the rate of this reaction. You should refer to activation energy in your answer.

.....  
.....  
.....  
.....  
.....

(3 marks)

- 1 (g) Suggest **one** chemical hazard which might be important to consider in the soap manufacturing process.

Name of chemical .....

Hazard .....

(1 mark)

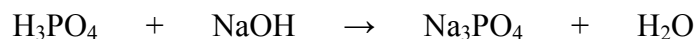
**Turn over for the next question**

**DO NOT WRITE ON THIS PAGE  
ANSWER IN THE SPACES PROVIDED**

**Turn over ▶**

2 An analytical chemist at a chemical manufacturing company wants to determine the enthalpy change when phosphoric acid is neutralised with sodium hydroxide.

2 (a) Balance the following equation which represents the neutralisation of phosphoric acid.



(1 mark)

2 (b) (i) Describe an experiment you could do to determine the enthalpy of neutralisation of phosphoric acid.

You will be assessed on the quality of written communication in your answer to this question.

.....

.....

.....

.....

.....

.....

.....

.....

.....

.....

.....

.....

.....

.....

.....

(5 marks)

2 (b) (ii) Give **three** precautions you would take to improve the accuracy of the experiment.

.....

.....

.....

.....

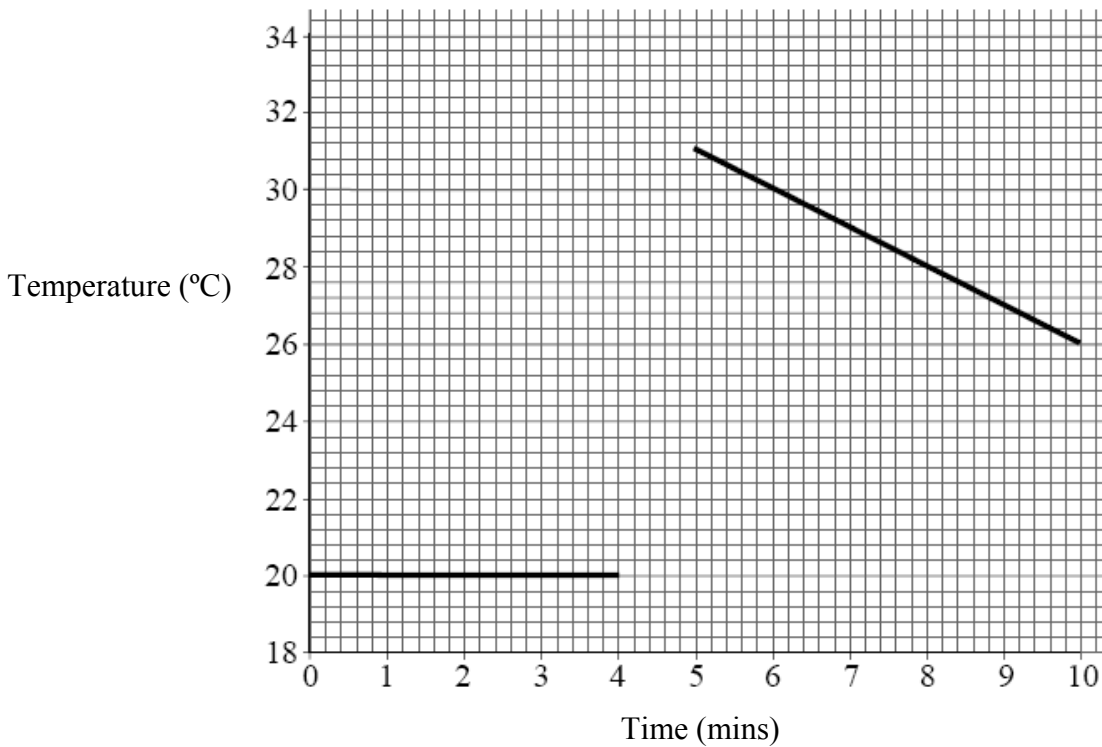
(3 marks)

- 2 (c) In using the answer to the experiment to calculate the enthalpy of neutralisation of phosphoric acid you have to know the concentration of the acid.

Name the technique to determine the concentration of the acid.

.....  
(1 mark)

- 2 (d) In one experiment, 30 cm<sup>3</sup> of 2 mol dm<sup>-3</sup> sodium hydroxide was mixed with 30 cm<sup>3</sup> of 1 mol dm<sup>-3</sup> phosphoric acid. The addition was made after 4.5 minutes. The results have been plotted on the graph below.



- 2 (d) (i) Use the graph to determine the temperature rise when the solutions were mixed.

.....  
(1 mark)

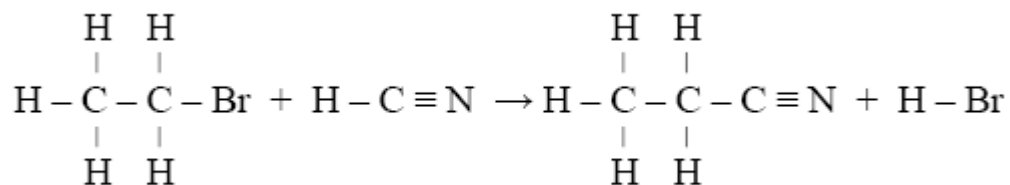
- 2 (d) (ii) Calculate the heat energy released in this experiment.  
Specific heat capacity of water = 4.2 Jg<sup>-1</sup>°C<sup>-1</sup>

.....  
.....  
(2 marks)



- 3 Hydrocarbons obtained from crude oil are feedstocks for many industrial processes. New substances are often synthesised by extending the carbon chain of these hydrocarbons. One example of this is the production of a nitrile from a haloalkane.

For example, propanenitrile can be formed from the reaction of bromoethane with hydrogen cyanide.



The enthalpy change in this reaction can be determined using mean bond enthalpies or by using enthalpies of formation.

- 3 (a) Define *bond enthalpy*.

.....  
 .....

(1 mark)

- 3 (b) Use the following mean bond enthalpy data to calculate the enthalpy change when one mole of propanenitrile is produced in the reaction above.

	C – C	C – H	C – Br	C ≡ N	H – Br
Mean bond enthalpy (kJmol <sup>-1</sup> )	347	413	290	887	366

.....  
 .....  
 .....  
 .....  
 .....  
 .....  
 .....

(4 marks)

- 3 (c) Calculate the enthalpy change when one mole of propanenitrile is produced in the same reaction using the following enthalpies of formation.

	CH <sub>3</sub> CH <sub>2</sub> CN	HCN	CH <sub>3</sub> CH <sub>2</sub> Br	HBr
Enthalpy of formation (kJmol <sup>-1</sup> )	15.5	108.9	-90.5	-36.4

.....

.....

.....

.....

.....

.....

*(3 marks)*

- 3 (d) Suggest why the values you have calculated in part (b) and part (c) differ.

.....

.....

.....

*(1 mark)*

9
---

**Turn over for the next question**


**Turn over ▶**

4 A large quantity of the ammonia manufactured is converted to nitric acid,  $\text{HNO}_3$ . This is neutralised with more ammonia to make ammonium nitrate, often used as fertiliser.

4 (a) What type of reaction is the conversion of ammonia to nitric acid?

.....  
(1 mark)

4 (b) Ammonia is produced industrially in the Haber process.



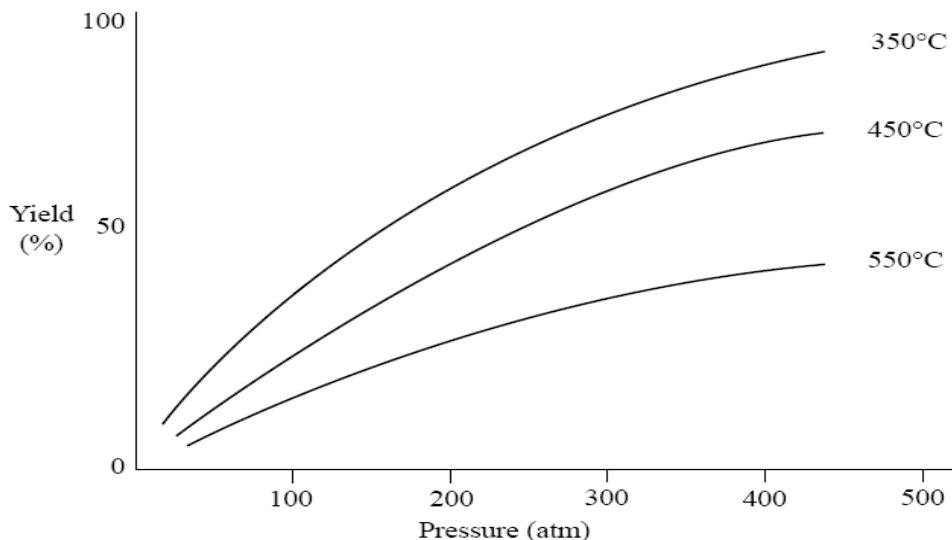
The expression for the equilibrium constant,  $K_c$  is

$$K_c = \frac{[\text{NH}_3]^2}{[\text{N}_2][\text{H}_2]^3}$$

In a container of volume  $400 \text{ dm}^3$ , the equilibrium mixture contains 10 moles of  $\text{N}_2$ , 20 moles of  $\text{H}_2$  and 0.9 moles of  $\text{NH}_3$ . Calculate the value of the equilibrium constant.

.....  
.....  
.....  
.....  
.....  
(3 marks)

- 4 (c) The graph shows the equilibrium yield of ammonia in the Haber process over a range of temperatures and pressures.



In the Haber process a compromise temperature of 450°C is used.

- 4 (c) (i) How does the yield of ammonia change as temperature increases?

.....  
.....

(1 mark)

- 4 (c) (ii) Discuss why this change occurs and evaluate why a compromise temperature of 450°C is usually used in the Haber process.

You will be assessed on the quality of written communication in your answer to this question.

.....  
.....  
.....  
.....  
.....  
.....  
.....  
.....  
.....  
.....  
.....

(5 marks)

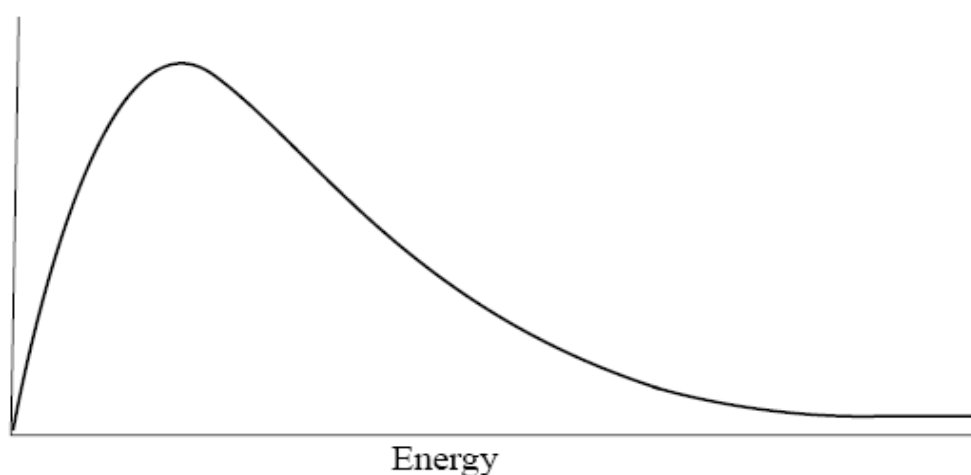
5 Chemical engineers can control reactions by cooling the reaction vessels. This can make the overall production process more economical, as the heat energy that is removed can be used elsewhere.

5 (a) Suggest why it may be necessary to cool a reaction mixture.

.....  
.....

(1 mark)

5 (b) The graph shows the Maxwell–Boltzmann distribution curve for a gaseous system.



5 (b) (i) Add the correct label to the vertical axis.

(1 mark)

5 (b) (ii) What does the area under this curve represent?

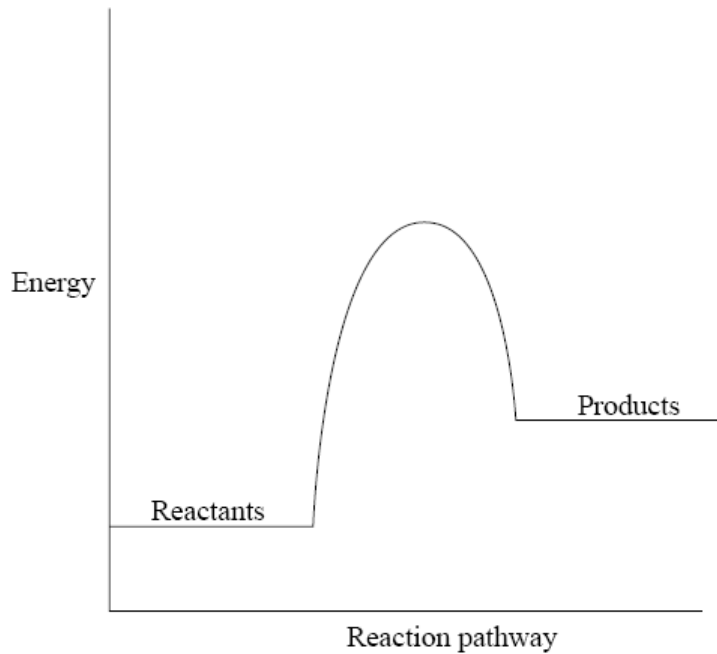
.....

(1 mark)

5 (b) (iii) On the graph, sketch the Maxwell–Boltzmann distribution curve for the same system at a lower temperature.

(2 marks)

5 (c) A typical reaction profile for a reaction that uses a catalyst is shown.



5 (c) (i) State the sign of enthalpy change of this reaction and explain your answer.

Sign .....

Explanation .....

.....  
(2 marks)

5 (c) (ii) On the axes above, draw the reaction profile you would expect to see if the reaction was carried out without a catalyst.

(1 mark)

5 (d) (i) Define the term *activation energy*.

.....

.....  
(2 marks)

5 (d) (ii) Explain, in terms of activation energy, how a catalyst works.

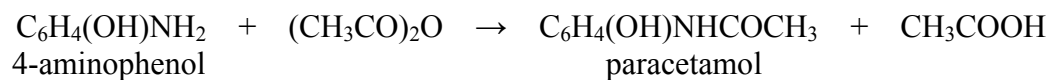
.....

.....

.....  
(2 marks)

6 Paracetamol is a common pharmaceutical. It is made by a batch process.

Paracetamol can be manufactured from 4-aminophenol. The overall reaction can be summarised by



6 (a) (i) Calculate the relative molecular masses of 4-aminophenol and paracetamol. (Relative atomic masses: N = 14, O = 16, C = 12, H = 1)

$M_r$  4-aminophenol .....

.....

$M_r$  paracetamol .....

.....

(2 marks)

6 (a) (ii) Calculate the mass of 4-aminophenol required to make 302 kg of paracetamol.

.....

.....

.....

.....

(3 marks)

6 (a) (iii) If the percentage yield of paracetamol is 80%, calculate what mass of paracetamol would be produced instead of 302 kg.

.....

.....

(1 mark)

6 (b) (i) Compare batch processes with continuous processes.

.....  
.....  
.....  
.....  
.....  
.....  
.....  
.....  
.....

(4 marks)

6 (b) (ii) Give **one** advantage and **one** disadvantage of a batch process.

Advantage .....

.....

Disadvantage .....

.....

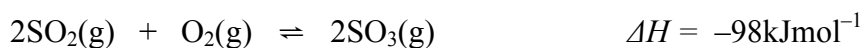
(2 marks)

**Turn over for the next question**



- 7 Sulphuric acid is an important industrial chemical. It is used to manufacture many materials including fertilisers, paints, detergents, plastic and dyes. The manufacture of sulphuric acid occurs in several stages. Chemists need to control conditions in order to maximise yield.

One stage is the oxidation of sulphur dioxide,  $\text{SO}_2$ , to form sulphur trioxide,  $\text{SO}_3$ .



Small pellets of vanadium(V) oxide are used as a catalyst. The process is reversible and therefore a dynamic equilibrium is established.

- 7 (a) Explain the meaning of

7 (a) (i) *reversible* .....

.....

(1 mark)

7 (a) (ii) *dynamic equilibrium* .....

.....

(1 mark)

7 (b) All the reactant and products are in the same state. What word describes this?

.....

(1 mark)

- 7 (c) Describe how the equilibrium yield of sulphur trioxide would be affected by an increase in pressure. Explain your answer.

Effect on yield .....

Explanation .....

.....

.....

(3 marks)

7 (d) (i) Write an expression for the equilibrium constant,  $K_c$ , for this reaction.

.....  
.....  
(2 marks)

7 (d) (ii) What would happen to the value of  $K_c$  if the temperature was increased?

.....  
(1 mark)

7 (e) Discuss the advantages of using a solid catalyst in the form of small pellets rather than large lumps.

.....  
.....  
.....  
.....  
(2 marks)

11

**END OF QUESTIONS**

**There are no questions printed on this page**

**DO NOT WRITE ON THIS PAGE  
ANSWER IN THE SPACES PROVIDED**

**There are no questions printed on this page**

**DO NOT WRITE ON THIS PAGE  
ANSWER IN THE SPACES PROVIDED**

**There are no questions printed on this page**

**DO NOT WRITE ON THIS PAGE  
ANSWER IN THE SPACES PROVIDED**