

**ADVANCED SUBSIDIARY GCE
MATHEMATICS (MEI)**
Introduction to Advanced Mathematics (C1)

4751

Candidates answer on the Printed Answer Book

OCR Supplied Materials:

- Printed Answer Book (inserted)
- MEI Examination Formulae and Tables (MF2)

Other Materials Required:

None

**Friday 9 January 2009
Morning**

Duration: 1 hour 30 minutes

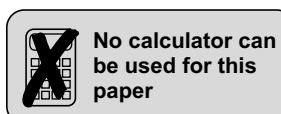


INSTRUCTIONS TO CANDIDATES

- Write your name clearly in capital letters, your Centre Number and Candidate Number in the spaces provided on the Printed Answer Book.
- Use black ink. Pencil may be used for graphs and diagrams only.
- Read each question carefully and make sure that you know what you have to do before starting your answer.
- Answer **all** the questions.
- Write your answer to each question in the space provided. If you need more space for an answer use additional paper; label your answer clearly and attach the additional paper securely to the Printed Answer Book.
- Do **not** write in the bar codes.
- You are **not** permitted to use a calculator in this paper.
- Final answers should be given to a degree of accuracy appropriate to the context.

INFORMATION FOR CANDIDATES

- The number of marks is given in brackets [] at the end of each question or part question.
- You are advised that an answer may receive **no marks** unless you show sufficient detail of the working to indicate that a correct method is being used.
- The total number of marks for this paper is **72**.
- This document consists of **4** pages. Any blank pages are indicated.



Answer all questions on the Printed Answer Book provided.

Section A (36 marks)

- 1 State the value of each of the following.
- (i) 2^{-3} [1]
- (ii) 9^0 [1]
- 2 Find the equation of the line passing through $(-1, -9)$ and $(3, 11)$. Give your answer in the form $y = mx + c$. [3]
- 3 Solve the inequality $7 - x < 5x - 2$. [3]
- 4 You are given that $f(x) = x^4 + ax - 6$ and that $x - 2$ is a factor of $f(x)$.
Find the value of a . [3]
- 5 (i) Find the coefficient of x^3 in the expansion of $(x^2 - 3)(x^3 + 7x + 1)$. [2]
- (ii) Find the coefficient of x^2 in the binomial expansion of $(1 + 2x)^7$. [3]
- 6 Solve the equation $\frac{3x + 1}{2x} = 4$. [3]
- 7 (i) Express $125\sqrt{5}$ in the form 5^k . [2]
- (ii) Simplify $(4a^3b^5)^2$. [2]
- 8 Find the range of values of k for which the equation $2x^2 + kx + 18 = 0$ does not have real roots. [4]
- 9 Rearrange $y + 5 = x(y + 2)$ to make y the subject of the formula. [4]
- 10 (i) Express $\sqrt{75} + \sqrt{48}$ in the form $a\sqrt{3}$. [2]
- (ii) Express $\frac{14}{3 - \sqrt{2}}$ in the form $b + c\sqrt{d}$. [3]

Section B (36 marks)

11

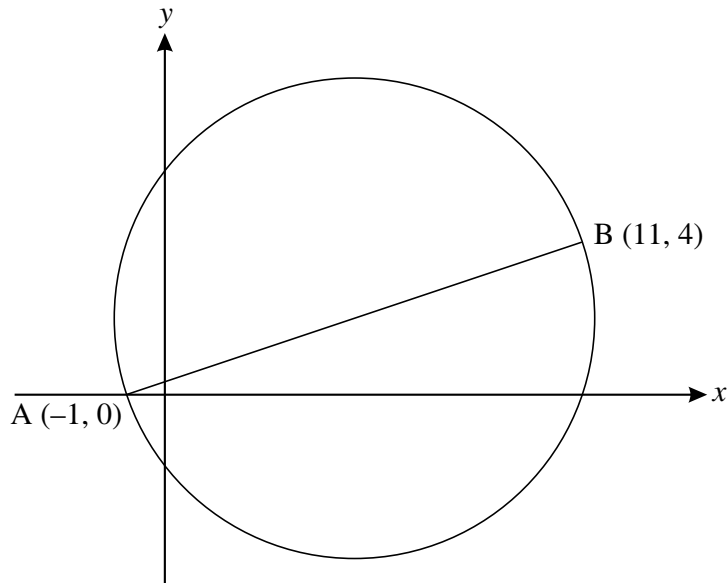


Fig. 11

Fig. 11 shows the points A and B, which have coordinates $(-1, 0)$ and $(11, 4)$ respectively.

- (i) Show that the equation of the circle with AB as diameter may be written as

$$(x - 5)^2 + (y - 2)^2 = 40. \quad [4]$$

- (ii) Find the coordinates of the points of intersection of this circle with the y -axis. Give your answer in the form $a \pm \sqrt{b}$. [4]
- (iii) Find the equation of the tangent to the circle at B. Hence find the coordinates of the points of intersection of this tangent with the axes. [6]

- 12 (i) Find algebraically the coordinates of the points of intersection of the curve $y = 3x^2 + 6x + 10$ and the line $y = 2 - 4x$. [5]
- (ii) Write $3x^2 + 6x + 10$ in the form $a(x + b)^2 + c$. [4]
- (iii) Hence or otherwise, show that the graph of $y = 3x^2 + 6x + 10$ is always above the x -axis. [2]

[Question 13 is printed overleaf.]

13 The Printed Answer Book shows the graph of $y = \frac{1}{x}$.

(i) On the same axes, plot the graph of $y = x^2 - 5x + 5$ for $0 \leq x \leq 5$. [4]

(ii) Show algebraically that the x -coordinates of the points of intersection of the curves $y = \frac{1}{x}$ and $y = x^2 - 5x + 5$ satisfy the equation $x^3 - 5x^2 + 5x - 1 = 0$. [2]

(iii) Given that $x = 1$ at one of the points of intersection of the curves, factorise $x^3 - 5x^2 + 5x - 1$ into a linear and a quadratic factor.

Show that only one of the three roots of $x^3 - 5x^2 + 5x - 1 = 0$ is rational. [5]

ADVANCED SUBSIDIARY GCE

MATHEMATICS (MEI)

Introduction to Advanced Mathematics (C1)

4751

PRINTED ANSWER BOOK

Candidates answer on the Printed Answer Book

OCR Supplied Materials:

- Question Paper 4751
- MEI Examination Formulae and Tables (MF2)

Other Materials Required:
None

Friday 9 January 2009
Morning

Duration: 1 hour 30 minutes



Candidate Forename		Candidate Surname	
--------------------	--	-------------------	--

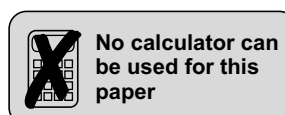
Centre Number						Candidate Number				
---------------	--	--	--	--	--	------------------	--	--	--	--

INSTRUCTIONS TO CANDIDATES

- Write your name clearly in capital letters, your Centre Number and Candidate Number in the boxes above.
- Use black ink. Pencil may be used for graphs and diagrams only.
- Answer **all** the questions.
- Do **not** write in the bar codes.
- You are **not** permitted to use a calculator in this paper.
- Write your answer to each question in the space provided. If you need more space for an answer use additional paper; label your answer clearly and attach the additional paper securely to the Printed Answer Book.

INFORMATION FOR CANDIDATES

- This document consists of **12** pages. Any blank pages are indicated.



Section A (36 marks)

1 (i)	
1 (ii)	
2	
3	

4	
5 (i)	
5 (ii)	

6	
7 (i)	
7 (ii)	

10 (i)	
10 (ii)	

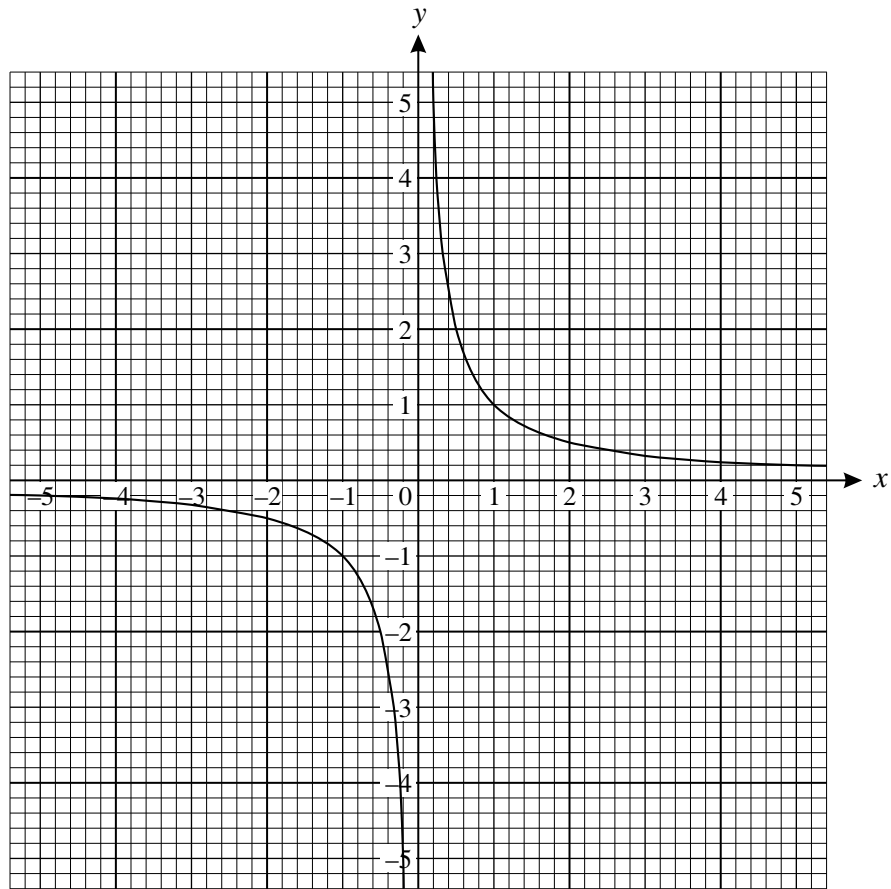
Section B (36 marks)

11 (i)	
11 (ii)	

11 (iii)	

12 (ii)	
12 (iii)	

13 (i)



13 (ii)

13 (iii)	



Copyright Information

OCR is committed to seeking permission to reproduce all third-party content that it uses in its assessment materials. OCR has attempted to identify and contact all copyright holders whose work is used in this paper. To avoid the issue of disclosure of answer-related information to candidates, all copyright acknowledgements are reproduced in the OCR Copyright Acknowledgements Booklet. This is produced for each series of examinations, is given to all schools that receive assessment material and is freely available to download from our public website (www.ocr.org.uk) after the live examination series.

If OCR has unwittingly failed to correctly acknowledge or clear any third-party content in this assessment material, OCR will be happy to correct its mistake at the earliest possible opportunity.

For queries or further information please contact the Copyright Team, First Floor, 9 Hills Road, Cambridge CB2 1GE.

OCR is part of the Cambridge Assessment Group; Cambridge Assessment is the brand name of University of Cambridge Local Examinations Syndicate (UCLES), which is itself a department of the University of Cambridge.