

**ADVANCED SUBSIDIARY GCE**

**MATHEMATICS (MEI)**

Further Concepts for Advanced Mathematics (FP1)

**4755**

Candidates answer on the Answer Booklet

**OCR Supplied Materials:**

- 8 page Answer Booklet
- Graph paper
- MEI Examination Formulae and Tables (MF2)

**Other Materials Required:**

None

**Thursday 15 January 2009**  
**Morning**

**Duration:** 1 hour 30 minutes



**INSTRUCTIONS TO CANDIDATES**

- Write your name clearly in capital letters, your Centre Number and Candidate Number in the spaces provided on the Answer Booklet.
- Use black ink. Pencil may be used for graphs and diagrams only.
- Read each question carefully and make sure that you know what you have to do before starting your answer.
- Answer **all** the questions.
- Do **not** write in the bar codes.
- You are permitted to use a graphical calculator in this paper.
- Final answers should be given to a degree of accuracy appropriate to the context.

**INFORMATION FOR CANDIDATES**

- The number of marks is given in brackets [ ] at the end of each question or part question.
- You are advised that an answer may receive **no marks** unless you show sufficient detail of the working to indicate that a correct method is being used.
- The total number of marks for this paper is **72**.
- This document consists of **4** pages. Any blank pages are indicated.

## Section A (36 marks)

- 1 (i) Find the roots of the quadratic equation  $z^2 - 6z + 10 = 0$  in the form  $a + bj$ . [2]
- (ii) Express these roots in modulus-argument form. [3]
- 2 Find the values of  $A$ ,  $B$  and  $C$  in the identity  $2x^2 - 13x + 25 \equiv A(x - 3)^2 - B(x - 2) + C$ . [4]
- 3 Fig. 3 shows the unit square,  $OABC$ , and its image,  $OA'B'C'$ , after undergoing a transformation. [4]

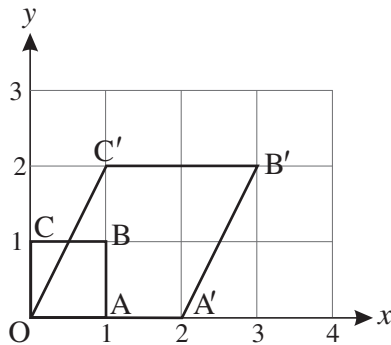


Fig. 3

- (i) Write down the matrix  $\mathbf{P}$  representing this transformation. [1]
- (ii) The parallelogram  $OA'B'C'$  is transformed by the matrix  $\mathbf{Q} = \begin{pmatrix} 2 & -1 \\ 0 & 3 \end{pmatrix}$ . Find the coordinates of the vertices of its image,  $OA''B''C''$ , following this transformation. [2]
- (iii) Describe fully the transformation represented by  $\mathbf{QP}$ . [2]
- 4 Write down the equation of the locus represented in the Argand diagram shown in Fig. 4. [3]

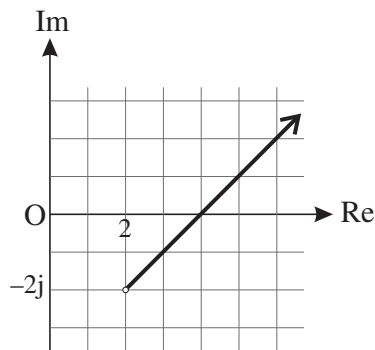


Fig. 4

5 The cubic equation  $x^3 - 5x^2 + px + q = 0$  has roots  $\alpha$ ,  $-3\alpha$  and  $\alpha + 3$ . Find the values of  $\alpha$ ,  $p$  and  $q$ . [6]

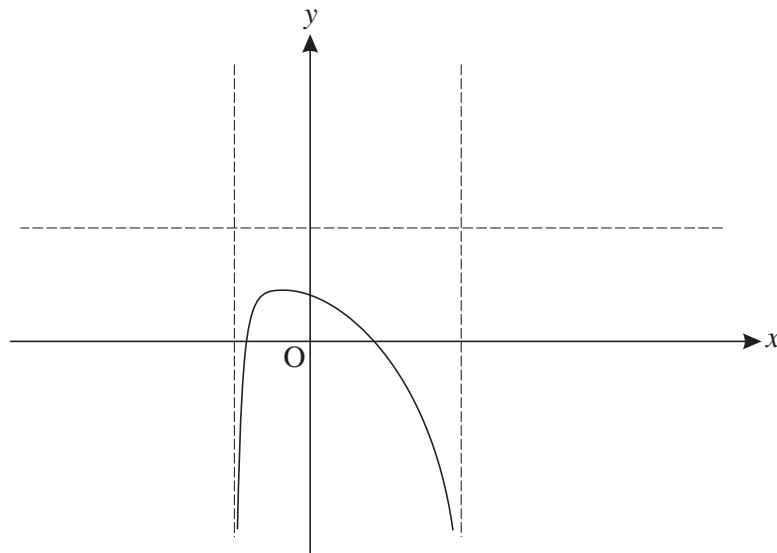
6 Using the standard results for  $\sum_{r=1}^n r$  and  $\sum_{r=1}^n r^3$  show that

$$\sum_{r=1}^n r(r^2 - 3) = \frac{1}{4}n(n+1)(n+3)(n-2). \quad [6]$$

7 Prove by induction that  $12 + 36 + 108 + \dots + 4 \times 3^n = 6(3^n - 1)$  for all positive integers  $n$ . [7]

**Section B (36 marks)**

8 Fig. 8 shows part of the graph of  $y = \frac{x^2 - 3}{(x - 4)(x + 2)}$ . Two sections of the graph have been omitted.



**Fig. 8**

- (i) Write down the coordinates of the points where the curve crosses the axes. [2]
- (ii) Write down the equations of the two vertical asymptotes and the one horizontal asymptote. [3]
- (iii) Copy Fig. 8 and draw in the two missing sections. [4]
- (iv) Solve the inequality  $\frac{x^2 - 3}{(x - 4)(x + 2)} \leq 0$ . [3]

**[Questions 9 and 10 are printed overleaf.]**

9 Two complex numbers,  $\alpha$  and  $\beta$ , are given by  $\alpha = 1 + j$  and  $\beta = 2 - j$ .

(i) Express  $\alpha + \beta$ ,  $\alpha\alpha^*$  and  $\frac{\alpha + \beta}{\alpha}$  in the form  $a + bj$ . [5]

(ii) Find a quadratic equation with roots  $\alpha$  and  $\alpha^*$ . [2]

(iii)  $\alpha$  and  $\beta$  are roots of a quartic equation with real coefficients. Write down the two other roots and find this quartic equation in the form  $z^4 + Az^3 + Bz^2 + Cz + D = 0$ . [5]

10 You are given that  $\mathbf{A} = \begin{pmatrix} 3 & 4 & -1 \\ 1 & -1 & k \\ -2 & 7 & -3 \end{pmatrix}$  and  $\mathbf{B} = \begin{pmatrix} 11 & -5 & -7 \\ 1 & 11 & 5+k \\ -5 & 29 & 7 \end{pmatrix}$  and that  $\mathbf{AB}$  is of the form

$$\mathbf{AB} = \begin{pmatrix} 42 & \alpha & 4k-8 \\ 10-5k & -16+29k & -12+6k \\ 0 & 0 & \beta \end{pmatrix}.$$

(i) Show that  $\alpha = 0$  and  $\beta = 28 + 7k$ . [3]

(ii) Find  $\mathbf{AB}$  when  $k = 2$ . [2]

(iii) For the case when  $k = 2$  write down the matrix  $\mathbf{A}^{-1}$ . [3]

(iv) Use the result from part (iii) to solve the following simultaneous equations. [4]

$$\begin{aligned} 3x + 4y - z &= 1 \\ x - y + 2z &= -9 \\ -2x + 7y - 3z &= 26 \end{aligned}$$