

OXFORD CAMBRIDGE AND RSA EXAMINATIONS

**Advanced Subsidiary General Certificate of Education
Advanced General Certificate of Education**

MATHEMATICS

4728

Mechanics 1

Tuesday **10 JANUARY 2006** Afternoon 1 hour 30 minutes

Additional materials:
8 page answer booklet
Graph paper
List of Formulae (MF1)

TIME 1 hour 30 minutes

INSTRUCTIONS TO CANDIDATES

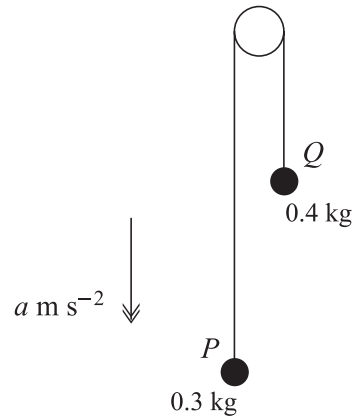
- Write your name, centre number and candidate number in the spaces provided on the answer booklet.
- Answer **all** the questions.
- Give non-exact numerical answers correct to 3 significant figures unless a different degree of accuracy is specified in the question or is clearly appropriate.
- The acceleration due to gravity is denoted by $g \text{ m s}^{-2}$. Unless otherwise instructed, when a numerical value is needed, use $g = 9.8$.
- You are permitted to use a graphical calculator in this paper.

INFORMATION FOR CANDIDATES

- The number of marks is given in brackets [] at the end of each question or part question.
- The total number of marks for this paper is 72.
- Questions carrying smaller numbers of marks are printed earlier in the paper, and questions carrying larger numbers of marks later in the paper.
- **You are reminded of the need for clear presentation in your answers.**

This question paper consists of 5 printed pages and 3 blank pages.

1



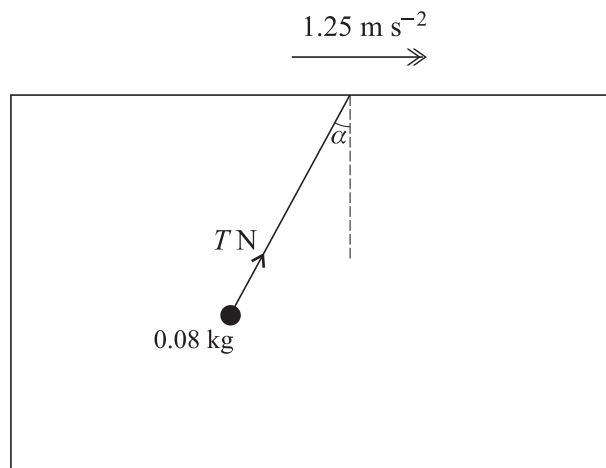
Particles P and Q , of masses 0.3 kg and 0.4 kg respectively, are attached to the ends of a light inextensible string. The string passes over a smooth fixed pulley. The system is in motion with the string taut and with each of the particles moving vertically. The downward acceleration of P is $a\text{ m s}^{-2}$ (see diagram).

- (i) Show that $a = -1.4$. [4]

Initially P and Q are at the same horizontal level. P 's initial velocity is vertically downwards and has magnitude 2.8 m s^{-1} .

- (ii) Assuming that P does not reach the floor and that Q does not reach the pulley, find the time taken for P to return to its initial position. [3]

2



An object of mass 0.08 kg is attached to one end of a light inextensible string. The other end of the string is attached to the underside of the roof inside a furniture van. The van is moving horizontally with constant acceleration 1.25 m s^{-2} . The string makes a constant angle α with the downward vertical and the tension in the string is $T\text{ N}$ (see diagram).

- (i) By applying Newton's second law horizontally to the object, find the value of $T \sin \alpha$. [2]

- (ii) Find the value of T . [5]

3

3 A motorcyclist starts from rest at a point O and travels in a straight line. His velocity after t seconds is $v \text{ m s}^{-1}$, for $0 \leq t \leq T$, where $v = 7.2t - 0.45t^2$. The motorcyclist's acceleration is zero when $t = T$.

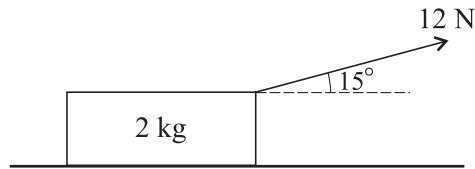
(i) Find the value of T . [4]

(ii) Show that $v = 28.8$ when $t = T$. [1]

For $t \geq T$ the motorcyclist travels in the same direction as before, but with constant speed 28.8 m s^{-1} .

(iii) Find the displacement of the motorcyclist from O when $t = 31$. [6]

4



A block of mass 2 kg is at rest on a rough horizontal plane, acted on by a force of magnitude 12 N at an angle of 15° upwards from the horizontal (see diagram).

(i) Find the frictional component of the contact force exerted on the block by the plane. [2]

(ii) Show that the normal component of the contact force exerted on the block by the plane has magnitude 16.5 N, correct to 3 significant figures. [2]

It is given that the block is on the point of sliding.

(iii) Find the coefficient of friction between the block and the plane. [2]

The force of magnitude 12 N is now replaced by a horizontal force of magnitude 20 N. The block starts to move.

(iv) Find the acceleration of the block. [5]

5 A man drives a car on a horizontal straight road. At $t = 0$, where the time t is in seconds, the car runs out of petrol. At this instant the car is moving at 12 m s^{-1} . The car decelerates uniformly, coming to rest when $t = 8$. The man then walks back along the road at 0.7 m s^{-1} until he reaches a petrol station a distance of 420 m from his car. After his arrival at the petrol station it takes him 250 s to obtain a can of petrol. He is then given a lift back to his car on a motorcycle. The motorcycle starts from rest and accelerates uniformly until its speed is 20 m s^{-1} ; it then decelerates uniformly, coming to rest at the stationary car at time $t = T$.

(i) Sketch the shape of the (t, v) graph for the man for $0 \leq t \leq T$. [Your sketch need not be drawn to scale; numerical values need not be shown.] [5]

(ii) Find the deceleration of the car for $0 < t < 8$. [2]

(iii) Find the value of T . [4]

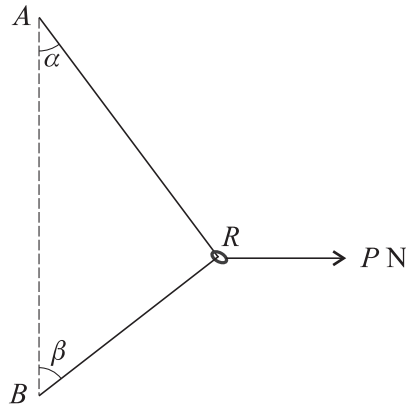


Fig. 1

A smooth ring R of weight WN is threaded on a light inextensible string. The ends of the string are attached to fixed points A and B , where A is vertically above B . A horizontal force of magnitude PN acts on R . The system is in equilibrium with the string taut; AR makes an angle α with the downward vertical and BR makes an angle β with the upward vertical (see Fig. 1).

(i) By considering the vertical components of the forces acting on R , show that $\alpha < \beta$. [3]

(ii)

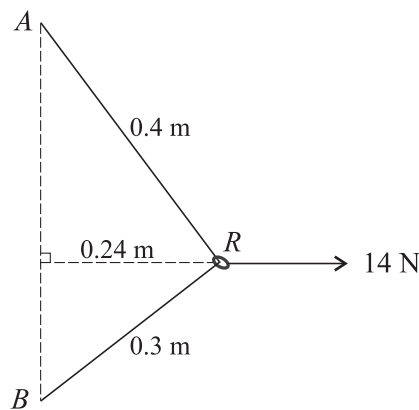


Fig. 2

It is given that when $P = 14$, $AR = 0.4$ m, $BR = 0.3$ m and the distance of R from the vertical line AB is 0.24 m (see Fig. 2). Find

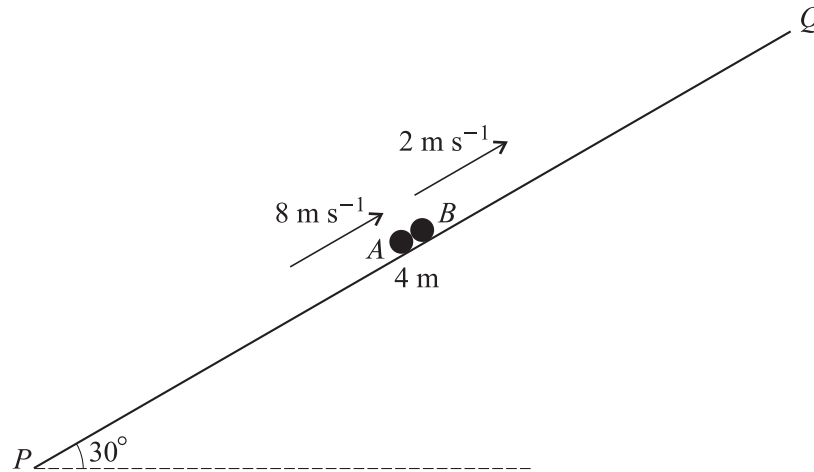
(a) the tension in the string, [3]

(b) the value of W . [3]

(iii) For the case when $P = 0$,

(a) describe the position of R , [1]

(b) state the tension in the string. [1]



PQ is a line of greatest slope, of length 4 m, on a smooth plane inclined at 30° to the horizontal. Particles A and B , of masses 0.15 kg and 0.5 kg respectively, move along PQ with A below B . The particles are both moving upwards, A with speed 8 m s^{-1} and B with speed 2 m s^{-1} , when they collide at the mid-point of PQ (see diagram). Particle A is instantaneously at rest immediately after the collision.

(i) Show that B does not reach Q in the subsequent motion. [8]

(ii) Find the time interval between the instant of A 's arrival at P and the instant of B 's arrival at P . [6]

BLANK PAGE

BLANK PAGE

BLANK PAGE

Permission to reproduce items where third-party owned material protected by copyright is included has been sought and cleared where possible. Every reasonable effort has been made by the publisher (OCR) to trace copyright holders, but if any items requiring clearance have unwittingly been included, the publisher will be pleased to make amends at the earliest possible opportunity.

OCR is part of the Cambridge Assessment Group. Cambridge Assessment is the brand name of University of Cambridge Local Examinations Syndicate (UCLES), which is itself a department of the University of Cambridge.