

# GCE Examinations

## Mechanics

### Module M3

Advanced Subsidiary / Advanced Level

Paper C

Time: 1 hour 30 minutes

#### *Instructions and Information*

---

Candidates may use any calculator except those with a facility for symbolic algebra and/or calculus.

Full marks may be obtained for answers to ALL questions.

Mathematical and statistical formulae and tables are available.

This paper has 7 questions.

When a numerical value of  $g$  is required, use  $g = 9.8 \text{ m s}^{-2}$ .

#### *Advice to Candidates*

---

You must show sufficient working to make your methods clear to an examiner. Answers without working will gain no credit.



*Written by Shaun Armstrong & Chris Huffer*

© Solomon Press

*These sheets may be copied for use solely by the purchaser's institute.*

1. A light elastic string has natural length  $a$  and modulus of elasticity  $4mg$ . One end of the string is attached to a fixed point  $A$  and a particle of mass  $m$  is attached to the other end.

The particle is released from rest at  $A$  and falls vertically until it comes to rest instantaneously at the point  $B$ .

Find the distance  $AB$  in terms of  $a$ . **(7 marks)**

---

2. A particle  $P$  of mass  $0.25$  kg is moving on a horizontal plane.

At time  $t$  seconds the velocity,  $\mathbf{v}$   $\text{m s}^{-1}$ , of  $P$  relative to a fixed origin  $O$  is given by

$$\mathbf{v} = \ln(t + 1)\mathbf{i} - e^{-2t}\mathbf{j}, \quad t \geq 0,$$

where  $\mathbf{i}$  and  $\mathbf{j}$  are perpendicular unit vectors in the horizontal plane.

- (a) Find the acceleration of  $P$  in terms of  $t$ . **(3 marks)**

- (b) Find, correct to 3 significant figures, the magnitude of the resultant force acting on  $P$  when  $t = 1$ .

**(4 marks)**

---

3. A coin of mass  $5$  grams is placed on a vinyl disc rotating on a record player. The distance between the centre of the coin and the centre of the disc is  $0.1$  m and the coefficient of friction between the coin and the disc is  $\mu$ . The disc rotates at  $45$  revolutions per minute around a vertical axis at its centre and the coin moves with it and does not slide.

By modelling the coin as a particle and giving your answers correct to an appropriate degree of accuracy, find

- (a) the speed of the coin, **(2 marks)**

- (b) the horizontal and vertical components of the force exerted on the coin by the disc.

**(4 marks)**

Given that the coin is on the point of moving,

- (c) show that, correct to 2 significant figures,  $\mu = 0.23$ . **(3 marks)**
-

4.

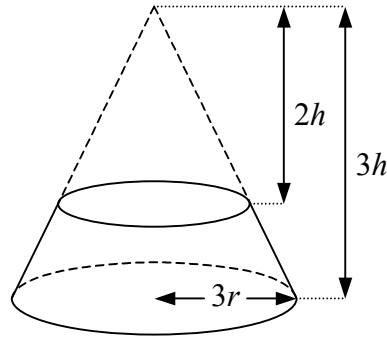


Fig. 1

A stand used to reach high shelves in a storeroom is in the shape of a frustum of a cone. It is modelled as a uniform solid formed by removing a right circular cone of height  $2h$  from a similar cone of height  $3h$  and base radius  $3r$  as shown in Figure 1.

- (a) Show that the centre of mass of the stand is a distance of  $\frac{33}{76}h$  from its larger plane face. **(7 marks)**

The stand is stored hanging in equilibrium from a point on the circumference of the larger plane face. Given that  $h = 2r$ ,

- (b) find, correct to the nearest degree, the acute angle which the plane faces of the stand make with the vertical. **(4 marks)**

5. A particle of mass  $0.8 \text{ kg}$  is moving along the positive  $x$ -axis at a speed of  $5 \text{ m s}^{-1}$  away from the origin  $O$ . When the particle is  $2$  metres from  $O$  it becomes subject to a single force directed towards  $O$ . The magnitude of the force is  $\frac{k}{x^2}$  N when the particle is  $x$  metres from  $O$ .

Given that when the particle is  $4 \text{ m}$  from  $O$  its speed has been reduced to  $3 \text{ m s}^{-1}$ ,

- (a) show that  $k = \frac{128}{5}$ , **(8 marks)**
- (b) find the distance of the particle from  $O$  when it comes to instantaneous rest. **(4 marks)**

*Turn over*

6.

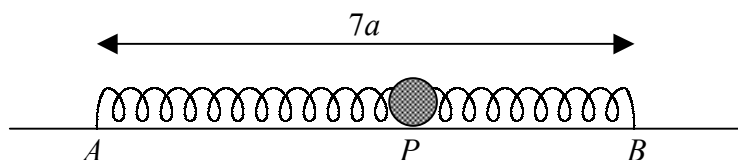


Fig. 2

Figure 2 shows a particle  $P$  of mass  $m$  which lies on a smooth horizontal table. It is attached to a point  $A$  on the table by a light elastic spring of natural length  $3a$  and modulus of elasticity  $\lambda$ , and to a point  $B$  on the table by a light elastic spring of natural length  $2a$  and modulus of elasticity  $2\lambda$ . The distance between the points  $A$  and  $B$  is  $7a$ .

(a) Show that in equilibrium  $AP = \frac{9}{2}a$ . (5 marks)

The particle is released from rest at a point  $Q$  where  $Q$  lies on the line  $AB$  and  $AQ = 5a$ .

(b) Prove that the subsequent motion of the particle is simple harmonic with a period of  $\pi\sqrt{\frac{3ma}{\lambda}}$ . (9 marks)

7.

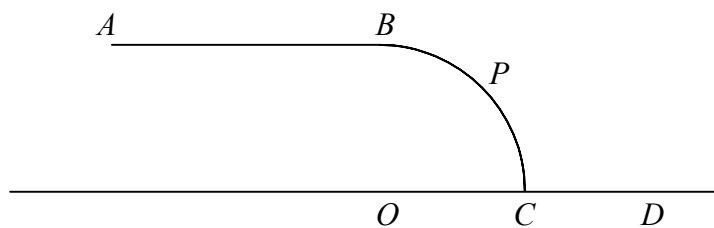


Fig. 3

Figure 3 shows a vertical cross-section through part of a ski slope consisting of a horizontal section  $AB$  followed by a downhill section  $BC$ . The point  $O$  is on the same horizontal level as  $C$  and  $BC$  is a circular arc of radius  $30$  m and centre  $O$ , such that  $\angle BOC = 90^\circ$ .

A skier of mass  $60$  kg is skiing at  $12\text{m s}^{-1}$  along  $AB$ .

(a) Assuming that friction and air resistance may be neglected, find the magnitude of the loss in reaction between the skier and the surface at  $B$ . (4 marks)

The skier subsequently leaves the slope at the point  $P$ .

(b) Find, correct to 3 significant figures, the speed at which the skier leaves the slope. (8 marks)

(c) Find, correct to 3 significant figures, the speed of the skier immediately before hitting the ground again at the point  $D$  which is on the same horizontal level as  $C$ . (3 marks)

END