

Solutionbank M4

Edexcel AS and A Level Modular Mathematics

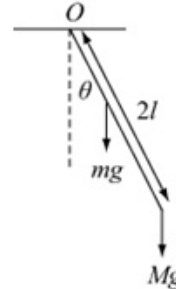
Stability

Exercise A, Question 1

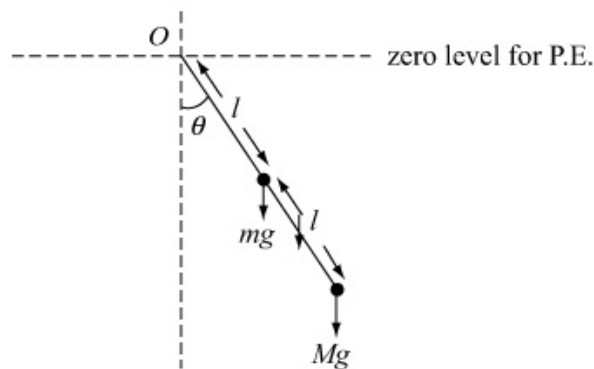
Question:

A pendulum is modelled as a uniform rod of mass m and length $2l$ attached to a particle of mass M . The pendulum is smoothly hinged at one end to a fixed point O , as shown in the figure.

- Express the potential energy of the system in terms of θ , the angle which the pendulum makes with the vertical through O .
- Show that there are two positions of equilibrium and determine whether they are stable or unstable.



Solution:



- Take the horizontal level through O as the zero level for potential energy – as O is fixed.

$$\text{P.E. for rod} = -mgl \cos \theta$$

$$\text{P.E. for particle} = -Mg2l \cos \theta$$

$$\therefore V = -mgl \cos \theta - 2Mgl \cos \theta$$

- $\frac{dV}{d\theta} = mgl \sin \theta + 2Mgl \sin \theta$

$$\text{Put } \frac{dV}{d\theta} = 0. \text{ Then } \sin \theta = 0 \Rightarrow \theta = 0 \text{ or } \pi$$

$$\frac{d^2V}{d\theta^2} = mgl \cos \theta + 2Mgl \cos \theta$$

when $\theta = 0$, $\frac{d^2V}{d\theta^2} = mgl + 2Mgl > 0 \therefore$ Equilibrium is stable at the point of minimum potential energy, when $\theta = 0$.

When $\theta = \pi$, $\frac{d^2V}{d\theta^2} = -mgl - 2Mgl < 0 \therefore$ Equilibrium is unstable when $\theta = \pi$.

(This is a point of maximum potential energy.)

Solutionbank M4

Edexcel AS and A Level Modular Mathematics

Stability

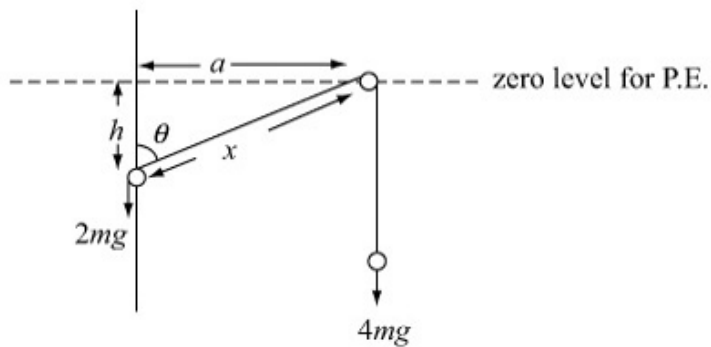
Exercise A, Question 2

Question:

A small smooth pulley is fixed at a distance a from a fixed smooth vertical wire. A ring of mass $2m$ is free to slide on the wire. It is attached to one end of a string which passes over the pulley and carries a load of mass $4m$ hanging from the other end. The angle between the sloping part of the string and the vertical is θ .

By expressing the potential energy in terms of θ find how far the ring is below the pulley in the equilibrium position and determine whether the equilibrium is stable or unstable.

Solution:



Take the horizontal level through the pulley as the zero level for potential energy as the pulley is fixed.

P.E. for ring = $-2mgh$

But $\tan \theta = \frac{a}{h}$, so $h = \frac{a}{\tan \theta}$ or $a \cot \theta$ ①

So P.E. for ring = $-2mga \cot \theta$

P.E. for load = $-4mg(l - x)$, where l is the length of the string.

But $\sin \theta = \frac{a}{x}$, so $x = \frac{a}{\sin \theta}$ or $a \operatorname{cosec} \theta$

\therefore P.E. for load = $-4mg(l - a \operatorname{cosec} \theta)$

\therefore Total P.E. for system $V = -2mga \cot \theta + 4mg a \operatorname{cosec} \theta + k$ where k is constant.

For equilibrium $\frac{dV}{d\theta} = 0$

But $\frac{dV}{d\theta} = 2mg a \operatorname{cosec}^2 \theta - 4mg a \operatorname{cosec} \theta \cot \theta$ ②

when $\frac{dV}{d\theta} = 0$, $\operatorname{cosec} \theta = 0$ or $\cot \theta = \frac{1}{2} \operatorname{cosec} \theta$

But $\operatorname{cosec} \theta \neq 0$, for any value of θ

So $\frac{\cos \theta}{\sin \theta} = \frac{1}{2 \sin \theta}$

$\therefore \cos \theta = \frac{1}{2}$ and $\theta = \frac{\pi}{3}$.

But $h = a \cot \theta = \frac{a}{\sqrt{3}}$ (from ①)

i.e. the ring is a distance $\frac{a}{\sqrt{3}}$ below the pulley in the equilibrium position.

Differentiate equation ②

$$\frac{d^2V}{d\theta^2} = -4mg a \operatorname{cosec}^2 \theta \cot \theta + 4mg a \operatorname{cosec}^3 \theta + 4mg a \operatorname{cosec} \theta \cot^2 \theta$$

Substitute $\theta = \frac{\pi}{3}$, then as $\cot \frac{\pi}{3} = \frac{1}{\sqrt{3}}$ and $\operatorname{cosec} \frac{\pi}{3} = \frac{2}{\sqrt{3}}$

Then $\frac{d^2V}{d\theta^2} = \frac{-16mga}{3\sqrt{3}} + \frac{32mga}{3\sqrt{3}} + \frac{8mga}{3\sqrt{3}} > 0$

\therefore There is a position of stable equilibrium when $h = \frac{a}{\sqrt{3}}$.

Solutionbank M4

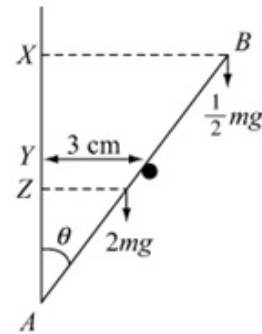
Edexcel AS and A Level Modular Mathematics

Stability

Exercise A, Question 3

Question:

The diagram shows a uniform rod AB of length 40 cm and mass $2m$ resting with its end A in contact with a smooth vertical wall. The rod is supported by a smooth horizontal rod which is fixed parallel to the wall and a distance 3 cm from the wall as shown in the figure. A particle of mass $\frac{1}{2}m$ is attached to the rod at B .



- Show that when AB makes an angle θ with the vertical the potential energy is given by

$$V = 0.6mg \cos \theta - 0.075mg \cot \theta + \text{constant}.$$
- Find any positions of equilibrium and establish whether they are stable or unstable.

Solution:

- a Take the horizontal level through the support rod as the zero level for potential energy – as the support rod is fixed

$$\text{The P.E. for particle} = \frac{1}{2}mg \times XY$$

$$\text{But } XY = AX - AY$$

$$= 0.4 \cos \theta - \frac{0.03}{\tan \theta}$$

$$\therefore \text{P.E. for particle} = 0.2mg \cos \theta - 0.015mg \cot \theta$$

$$\text{The P.E. for the rod} = -2mg \times YZ$$

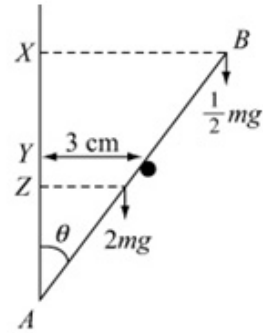
$$\text{But } YZ = AY - AZ$$

$$= 0.03 \cot \theta - 0.2 \cos \theta$$

$$\therefore \text{P.E. for rod} = -0.06mg \cot \theta + 0.4mg \cos \theta$$

$$\therefore \text{Total P.E.} = V = 0.2mg \cos \theta - 0.015mg \cot \theta - 0.06mg \cot \theta + 0.4mg \cos \theta$$

$$= 0.6mg \cos \theta - 0.075mg \cot \theta$$



$$\text{b } \frac{dV}{d\theta} = -0.6mg \sin \theta + 0.075mg \operatorname{cosec}^2 \theta$$

$$\text{Put } \frac{dV}{d\theta} = 0. \text{ Then}$$

$$0.6 \sin \theta = \frac{0.075}{\sin^2 \theta}$$

$$\therefore \sin^3 \theta = \frac{0.075}{0.6}$$

$$= \frac{1}{8}$$

$$\therefore \sin \theta = \frac{1}{2}$$

So $\theta = \frac{\pi}{6}$ and $\theta = \frac{5\pi}{6}$ correspond to positions of equilibrium.

$$\frac{d^2V}{d\theta^2} = -0.6mg \cos \theta - 0.15mg \operatorname{cosec}^2 \theta \cot \theta$$

$$\text{when } \theta = \frac{\pi}{6}, \frac{d^2V}{d\theta^2} = -\frac{9\sqrt{3}}{10}mg < 0 \text{ so unstable}$$

$$\text{when } \theta = \frac{5\pi}{6}, \frac{d^2V}{d\theta^2} = \frac{9\sqrt{3}}{10}mg > 0 \text{ so stable}$$

Solutionbank M4

Edexcel AS and A Level Modular Mathematics

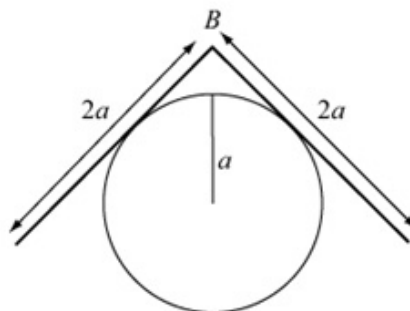
Stability

Exercise A, Question 4

Question:

Two uniform smooth heavy rods, each of mass M and length $2a$, are smoothly jointed together at B . They are placed symmetrically in a vertical plane, over a fixed sphere of radius a as shown.

- a Show that when the rods make an angle θ with the horizontal the potential energy V is given by $V = 2Mga(\sec\theta - \sin\theta) + \text{constant}$.

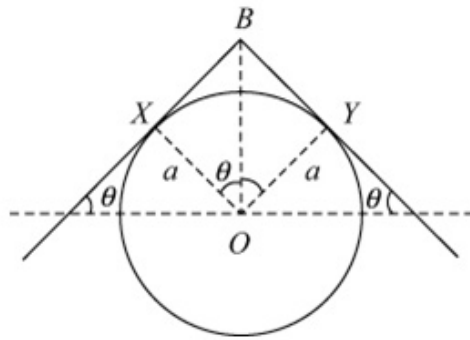


Hint: use the horizontal plane through the centre of the sphere as the zero level for the potential energy.

- b Show that the rods are in equilibrium if $\cos^3\theta = \sin\theta$ and verify that $\theta = 0.60$ is accurate as a solution to 2 s.f.

Solution:

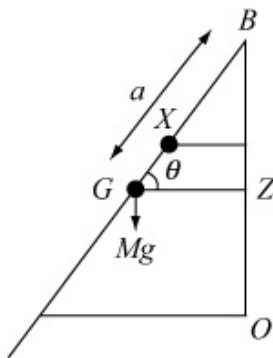
a



Take the horizontal level through the centre of the sphere O as the zero level for potential energy. Let the rods touch the sphere at points X and Y .

From geometry $X\hat{O}B = Y\hat{O}B = \theta$. ($O\hat{X}B = O\hat{Y}B = 90^\circ$ angle between tangent and radius.)

$$\therefore BO = \frac{a}{\cos \theta} = a \sec \theta$$



Consider one of the rods. Let its mid-point be G . Then potential energy of rod = $Mg \times OZ$.

But $OZ = OB - BX$

$$= a \sec \theta - a \sin \theta$$

$$\therefore \text{P.E. of rod} = Mg(a \sec \theta - a \sin \theta)$$

As there are two symmetric rods in the system

$$V = 2Mg(a \sec \theta - a \sin \theta)$$

[The constant here is zero but if you chose the base of the sphere as the zero level for P.E. then you would have a constant $2Mga$.]

b For equilibrium $\frac{dV}{d\theta} = 0$

$$\text{But } \frac{dV}{d\theta} = +2Mga \sec \theta \tan \theta - 2Mga \cos \theta$$

$$\therefore 2Mga \times \frac{1}{\cos \theta} \times \frac{\sin \theta}{\cos \theta} = 2Mga \cos \theta$$

$$\therefore \sin \theta = \cos^3 \theta$$

If 0.60 is accurate to 2 s.f. there should be a sign change when substituting 0.595 and 0.605 into $f(\theta) = \sin \theta - \cos^3 \theta$

$$f(0.595) = -7.46 \times 10^{-3} < 0$$

$$f(0.605) = 0.012 > 0$$

Sign change $\therefore 0.60$ is a solution accurate to 2 s.f.

Solutionbank M4

Edexcel AS and A Level Modular Mathematics

Stability

Exercise A, Question 5

Question:

Four light rods each of length l are freely hinged at their ends to form a rhombus $ABCD$ which is suspended from point A .

A light spring of natural length l and modulus of elasticity $10mg$ connects the points A and C .

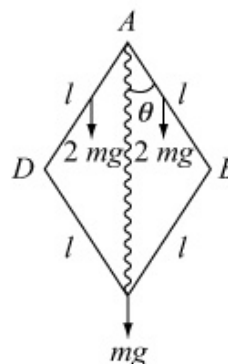
A particle of mass m is attached at point C and the rods AB and AD each carry a particle of mass $2m$ at their mid-points. C moves freely in a vertical line through A and the angle between AB and the downward vertical is θ .

a Show that the potential energy of the system V is given by

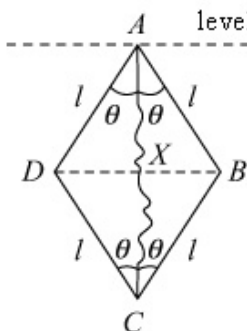
$$V = mgl(20 \cos^2 \theta - 24 \cos \theta) + \text{constant}.$$

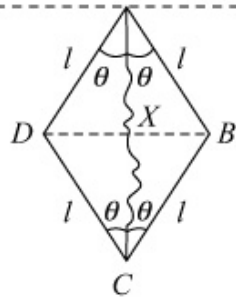
b Find the values of θ which correspond to positions of equilibrium.

c Determine whether these values correspond to stable or to unstable equilibrium.



Solution:

a  level of zero potential energy.



Take the horizontal through A as the zero level for potential energy.

Use symmetry to mark all the equal angles in the figure.

Let the diagonals meet at X .

From the isosceles $\triangle ADC$, $\triangle ADX$ is right-angled

$$\therefore AX = l \cos \theta \Rightarrow AC = 2l \cos \theta$$

\therefore Extension x of the elastic string $AC = 2l \cos \theta - l$

The total P.E. of the system is V where

$$V = -2mg \frac{l}{2} \cos \theta - 2mg \frac{l}{2} \cos \theta - mg(AC) + \frac{1}{2} \lambda \frac{x^2}{l}$$

$$\begin{aligned} \text{i.e. } V &= -mgl \cos \theta - mgl \cos \theta - 2mgl \cos \theta + 5mg \frac{(2l \cos \theta - l)^2}{l} \\ &= -4mgl \cos \theta + 5mgl(4 \cos^2 \theta - 4 \cos \theta + 1) \\ &= mgl(20 \cos^2 \theta - 24 \cos \theta) + \text{constant} \end{aligned}$$

$$\text{b } \frac{dV}{d\theta} = mgl [-40 \cos \theta \sin \theta + 24 \sin \theta]$$

$$\text{Put } \frac{dV}{d\theta} = 0, \text{ then } 8(3 \sin \theta - 5 \sin \theta \cos \theta) = 0$$

$$\text{i.e. } 8 \sin \theta (3 - 5 \cos \theta) = 0$$

$$\therefore \sin \theta = 0 \text{ or } \cos \theta = \frac{3}{5}$$

$$\therefore \theta = 0 \text{ or } 0.93 \text{ radians (2 s.f.)}$$

$$\text{c As } \frac{dV}{d\theta} = mgl [-20 \sin 2\theta + 24 \sin \theta]$$

$$\frac{d^2V}{d\theta^2} = mgl [-40 \cos 2\theta + 24 \cos \theta]$$

$$\text{when } \theta = 0, \frac{d^2V}{d\theta^2} = -16mgl < 0 \therefore \text{unstable equilibrium}$$

$$\text{when } \theta = 0.93, \frac{d^2V}{d\theta^2} = mgl \left[-40 \times \frac{-7}{25} + 24 \times \frac{3}{5} \right]$$

$$= \frac{128}{5} mgl > 0 \therefore \text{stable equilibrium.}$$

Solutionbank M4

Edexcel AS and A Level Modular Mathematics

Stability

Exercise A, Question 6

Question:

A light rod AB of length $2a$ can turn freely in a vertical plane about a smooth fixed hinge at A . A particle of mass m is attached at point B . One end of a light elastic string, of natural length $\frac{3}{2}a$ and modulus of elasticity $mg\sqrt{3}$ is also attached to the rod at B .

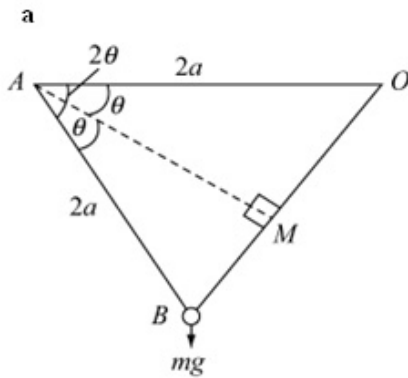
The other end of the string is attached to a fixed point O at the same horizontal level as A . Given that $OA = 2a$ and that the angle between AB and the horizontal is 2θ ,

a show that, provided the string remains taut, the potential energy of the system is

$$\text{given by } V = -2mga(\sin 2\theta + \frac{4}{3}\sqrt{3}\cos 2\theta + 2\sqrt{3}\sin \theta) + \text{constant}.$$

b Verify that there is a position of equilibrium in which $\theta = \frac{\pi}{6}$ and determine the stability of this equilibrium.

Solution:



..... level of zero potential energy.

$$\text{P.E. of particle} = -mg \times 2a \sin 2\theta$$

$$\text{P.E. of string} = \frac{1}{2} mg \sqrt{3} \frac{x^2}{\frac{3}{2}a} = \frac{1}{3} mg \sqrt{3} \frac{x^2}{a}$$

But from the isosceles triangle OAB length
 $OB = 2 \times BM = 2 \times 2a \sin \theta$

$$\therefore \text{Extension } x = 4a \sin \theta - \frac{3a}{2}$$

$$\therefore \text{Total P.E., } V = -2mga \sin 2\theta + \frac{1}{3} mg \sqrt{3} a \left[4 \sin \theta - \frac{3}{2} \right]^2$$

$$\begin{aligned} \text{i.e. } V &= -2mga \left[\sin 2\theta - \frac{1}{6} \sqrt{3} \left(16 \sin^2 \theta - 12 \sin \theta + \frac{9}{4} \right) \right] \\ &= -2mga \left[\sin 2\theta - \frac{1}{6} \sqrt{3} \left(8 - 8 \cos 2\theta - 12 \sin \theta + \frac{9}{4} \right) \right] \\ &= -2mga \left[\sin 2\theta + \frac{4}{3} \sqrt{3} \cos 2\theta + 2\sqrt{3} \sin \theta \right] + \text{constant} \end{aligned}$$

b
$$\frac{dV}{d\theta} = -2mga \left[2 \cos 2\theta - \frac{8}{3} \sqrt{3} \sin 2\theta + 2\sqrt{3} \cos \theta \right]$$

$$\begin{aligned} \text{When } \theta = \frac{\pi}{6}, \frac{dV}{d\theta} &= -2mga \left[2 \cos \frac{\pi}{3} - \frac{8}{3} \sqrt{3} \sin \frac{\pi}{3} + 2\sqrt{3} \cos \frac{\pi}{6} \right] \\ &= -2mga [1 - 4 + 3] = 0 \end{aligned}$$

This confirms that $\theta = \frac{\pi}{6}$ gives a position of equilibrium.

$$\frac{d^2V}{d\theta^2} = -2mga \left[-4 \sin 2\theta - \frac{16}{3} \sqrt{3} \cos 2\theta - 2\sqrt{3} \sin \theta \right]$$

$$\text{when } \theta = \frac{\pi}{6}, \frac{d^2V}{d\theta^2} = -2mga \left[-2\sqrt{3} - \frac{8}{3} \sqrt{3} - \sqrt{3} \right] = \frac{34}{3} \sqrt{3} mga > 0$$

\therefore this is a position of stable equilibrium.

Solutionbank M4

Edexcel AS and A Level Modular Mathematics

Stability

Exercise A, Question 7

Question:

A small bead B of mass $k m$ can slide on a smooth vertical circular wire with centre O and radius a which is fixed in a vertical plane. B is attached to one end of a light elastic string of natural length $\frac{3}{2}a$ and modulus of elasticity $12mg$. The other end of the string is attached to a fixed point A which is vertically above the centre point O of the circular wire.

The angle between the string AB and the downward vertical at A is θ .

a Show that the potential energy V of the system is given by

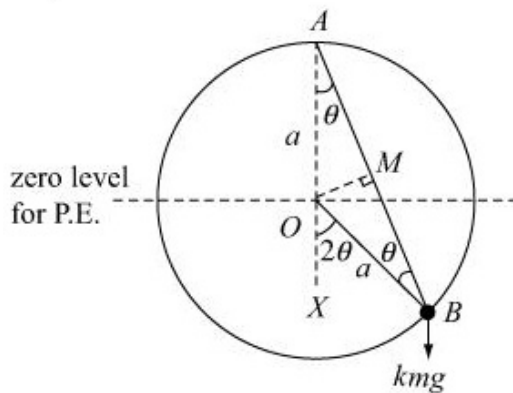
$$V = 2mga((8-k)\cos^2\theta - 12\cos\theta) + \text{constant}.$$

b Find the restrictions on k if there is only one point of equilibrium, where $\theta = 0$.

c Subject to these restrictions, determine the stability of this equilibrium.

Solution:

a

Note $\widehat{BOX} = 2\theta$ (angle at centre = $2 \times$ angle at circumference)As $\triangle AOB$ is isosceles $\widehat{OBA} = \widehat{OAB} = \theta$ Also $AB = 2 \times AM$, where M is the mid-point of AB .So $AB = 2 \times a \cos \theta = 2a \cos \theta$ Let the extension in the string be x .Then $x = 2a \cos \theta - \frac{3a}{2}$ The potential energy of the bead $B = -kmg a \cos 2\theta$ The potential energy of the string $= \frac{1}{2} \times 12mg \frac{x^2}{\frac{3a}{2}} = 4mg \frac{a^2}{a} \left(2 \cos \theta - \frac{3}{2} \right)^2$ \therefore Total potential energy $V = -kmg a \cos 2\theta + 4mga \left(4 \cos^2 \theta - 6 \cos \theta + \frac{9}{4} \right)$ i.e. $V = -kmg a (2 \cos^2 \theta - 1) + 16mga \cos^2 \theta - 24mga \cos \theta + 9mga$
 $= 2mga ((8-k) \cos^2 \theta - 12 \cos \theta) + \text{constant}$

b
$$\frac{dV}{d\theta} = 2mga [-2(8-k) \cos \theta \sin \theta + 12 \sin \theta]$$

Put $\frac{dV}{d\theta} = 0 \therefore 4mga \sin \theta [6 - (8-k) \cos \theta] = 0$

$$\therefore \sin \theta = 0 \text{ or } \cos \theta = \frac{6}{8-k}$$

Only one point of equilibrium if $\frac{6}{8-k} \geq 1$ i.e. $2 \leq k < 8$

c
$$\frac{d^2V}{d\theta^2} = 2mga [-2(8-k) \cos 2\theta + 12 \cos \theta]$$

When $\theta = 0$

$$\frac{d^2V}{d\theta^2} = 2mga [-2(8-k) + 12]$$

$$= 2mga [2k - 4] \geq 0 \text{ as } k \geq 2$$

 \therefore Equilibrium is stable.

Solutionbank M4

Edexcel AS and A Level Modular Mathematics

Stability

Exercise A, Question 8

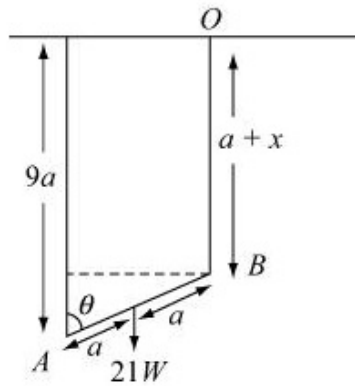
Question:

A uniform rod AB of length $2a$ and weight $21W$ is freely pivoted to a fixed support at A . A light elastic string of natural length a and modulus $\frac{3}{2}W$ has one end attached to B and the other to a small ring which is free to slide on a smooth horizontal straight wire passing through a point at a height $9a$ above A .

- a Show that when the rod makes an angle θ with the upward vertical at A and the string is vertical, the potential energy of the system is
- $$V = 3Wa \cos \theta (\cos \theta - 1) + \text{constant}.$$
- b Find the positions of equilibrium and determine whether they are stable or unstable.

Solution:

a



zero level for P.E.

$$\text{P.E. of rod} = -21W(9a - a \cos \theta)$$

$$\text{P.E. of string} = \frac{1}{2} \times \frac{3}{2} W \frac{x^2}{a}$$

$$\text{where } a + x = 9a - 2a \cos \theta$$

$$\therefore x = 8a - 2a \cos \theta$$

$$\text{So total P.E. } V = -21W(9a - a \cos \theta) + \frac{3W}{4a} a^2 (8 - 2 \cos \theta)^2$$

$$\text{i.e. } V = -189Wa + 21Wa \cos \theta + \frac{3}{4} Wa (64 - 32 \cos \theta + 4 \cos^2 \theta)$$

$$= 3Wa \cos^2 \theta - 24Wa \cos \theta + 21Wa \cos \theta + 48Wa - 189Wa$$

$$\therefore V = 3Wa \cos \theta (\cos \theta - 1) + \text{constant}$$

$$\text{b } \frac{dV}{d\theta} = 3Wa \cos \theta (-\sin \theta) - 3Wa \sin \theta (\cos \theta - 1)$$

$$\text{Put } \frac{dV}{d\theta} = 0, \text{ then } -6Wa \cos \theta \sin \theta + 3Wa \sin \theta = 0$$

$$\therefore \sin \theta (1 - 2 \cos \theta) = 0$$

$$\text{i.e. } \sin \theta = 0 \text{ or } \cos \theta = \frac{1}{2}$$

$$\therefore \theta = 0, \pi \text{ or } \frac{\pi}{3}$$

$$\frac{d^2V}{d\theta^2} = -6Wa \cos 2\theta + 3Wa \cos \theta$$

$$\text{When } \theta = 0 \quad \frac{d^2V}{d\theta^2} = -3Wa < 0 \therefore \text{unstable}$$

$$\theta = \pi \quad \frac{d^2V}{d\theta^2} = -9Wa < 0 \therefore \text{unstable}$$

$$\theta = \frac{\pi}{3} \quad \frac{d^2V}{d\theta^2} = 3Wa + \frac{3Wa}{2} > 0 \therefore \text{stable}$$

Solutionbank M4

Edexcel AS and A Level Modular Mathematics

Stability

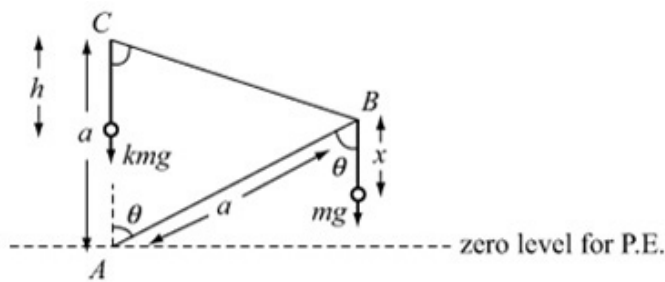
Exercise A, Question 9

Question:

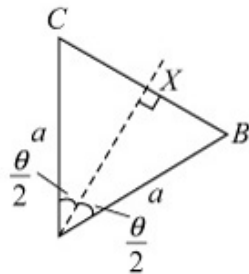
A light rod AB can freely turn in a vertical plane about a smooth hinge at A and carries a mass m hanging from B . A light string of length $2a$ fastened to the rod at B passes over a smooth peg at a point C vertically above A and carries a mass km at its free end. If $AC = AB = a$,

- find the range of values of k for which equilibrium is possible with the rod inclined to the vertical.
- Given that equilibrium is possible with the rod horizontal find the value of k .
- If the rod is slightly disturbed when horizontal and in equilibrium, determine whether it will return to the horizontal position or not. [E]

Solution:



a $\triangle ABC$ is isosceles and $CB = 2 \times CX$ where



$$CX = a \sin \frac{\theta}{2}$$

$$\therefore CB = 2a \sin \frac{\theta}{2}$$

As the string has length $2a$, $h = 2a - 2a \sin \frac{\theta}{2}$

$$\therefore \text{Total P.E. } V = +kmg \left(a - \left(2a - 2a \sin \frac{\theta}{2} \right) \right) + mg(a \cos \theta - x)$$

where x is constant.

$$\therefore V = 2knga \sin \frac{\theta}{2} + mga \cos \theta + \text{constant}$$

For equilibrium, $\frac{dV}{d\theta} = 0$

$$\begin{aligned} \frac{dV}{d\theta} &= knga \cos \frac{\theta}{2} - mga \sin \theta \\ &= knga \cos \frac{\theta}{2} - 2mga \sin \frac{\theta}{2} \cos \frac{\theta}{2} \\ &= mga \cos \frac{\theta}{2} \left(k - 2 \sin \frac{\theta}{2} \right) \end{aligned}$$

\therefore Equilibrium when $\cos \frac{\theta}{2} = 0$ or when $\sin \frac{\theta}{2} = \frac{k}{2}$ when $\cos \frac{\theta}{2} = 0, \theta = \pi$,

i.e. not inclined to the vertical.

$$\therefore \sin \frac{\theta}{2} = \frac{k}{2} \text{ must have a solution}$$

As $0 < \sin \frac{\theta}{2} < 1$

$$\therefore 0 < k < 2$$

b When the rod is horizontal $\theta = \frac{\pi}{2}$.

$$\therefore k - 2 \sin \frac{\pi}{4} = 0 \text{ for equilibrium}$$

$$\text{i.e. } k = \sqrt{2}$$

c
$$\frac{d^2V}{d\theta^2} = -\frac{kmg a}{2} \sin \frac{\theta}{2} - mga \cos \theta$$

Substitute $\theta = \frac{\pi}{2}$ and $k = \sqrt{2}$

$$\therefore \frac{d^2V}{d\theta^2} = -\frac{mga}{2} < 0$$

\therefore unstable so will not return to horizontal position.

Solutionbank M4

Edexcel AS and A Level Modular Mathematics

Stability

Exercise A, Question 10

Question:

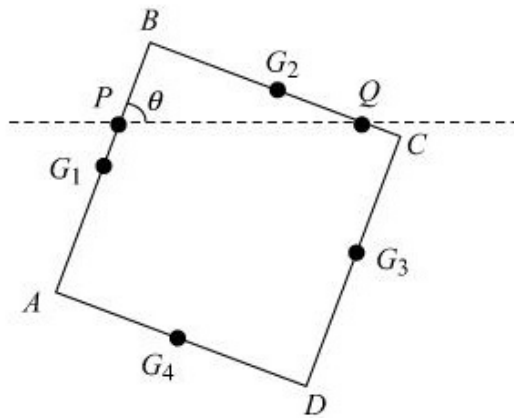
Four equal uniform rods, each of length $2a$ and each of mass M are rigidly joined together to form a square frame. The frame hangs at rest in a vertical plane on two pegs P and Q which are at the same level as each other.

If $PQ = b$ and the pegs are each in contact with different rods, show that the potential energy V satisfies the equation $V = 2mg(b \sin 2\theta - 2a \sin \theta - 2a \cos \theta)$.

Find the three positions of equilibrium if $b = \sqrt{2}a$ and determine the stability of each of them.

Solution:

a



The horizontal through points P and Q is the zero level for potential energy.

(The mid-point of PQ will be vertically above the centre of the square.)

Label the square $ABCD$.

Let θ be the angle between AB and the horizontal.

Let G_1, G_2, G_3 and G_4 be the mid-points of the four rods as shown.

$$BP = b \cos \theta$$

$$\therefore PG_1 = (a - b \cos \theta)$$

$$\therefore \text{Potential Energy of rod } AB = -Mg(a - b \cos \theta) \sin \theta$$

Similarly

$$BQ = b \sin \theta, \text{ and so } G_2Q = (b \sin \theta - a)$$

$$\therefore \text{Potential Energy of rod } BC = Mg(b \sin \theta - a) \cos \theta$$

$$\text{Potential Energy of rod } CD = -Mg(2a - b \sin \theta) \cos \theta - Mga \sin \theta \text{ and}$$

$$\text{Potential Energy of rod } AD = -Mg(2a - b \cos \theta) \sin \theta - Mga \cos \theta$$

\therefore Total Potential Energy

$$\begin{aligned} V &= -Mga \sin \theta + Mgb \cos \theta \sin \theta \\ &\quad + Mgb \cos \theta \sin \theta - Mga \cos \theta \\ &\quad - Mga \sin \theta + Mgb \cos \theta \sin \theta - 2Mga \cos \theta \\ &\quad - 2Mga \sin \theta + Mgb \sin \theta \cos \theta - Mga \cos \theta \end{aligned}$$

$$\begin{aligned} \text{i.e. } V &= -4Mga \sin \theta + 4Mgb \sin \theta \cos \theta - 4Mga \cos \theta \\ &= 2Mg [b \sin 2\theta - 2a \sin \theta - 2a \cos \theta] \end{aligned}$$

$$\text{If } b = \sqrt{2}a$$

$$V = 2\sqrt{2}Mga [\sin 2\theta - \sqrt{2} \sin \theta - \sqrt{2} \cos \theta]$$

$$\frac{dV}{d\theta} = 2\sqrt{2}Mga [2 \cos 2\theta - \sqrt{2} \cos \theta + \sqrt{2} \sin \theta]$$

$$\text{Put } \frac{dV}{d\theta} = 0$$

$$\text{Then } 2 \cos 2\theta - \sqrt{2} (\cos \theta - \sin \theta) = 0$$

$$\therefore 2(\cos^2 \theta - \sin^2 \theta) - \sqrt{2} (\cos \theta - \sin \theta) = 0$$

$$\therefore \sqrt{2} (\cos \theta - \sin \theta) [\sqrt{2} (\cos \theta + \sin \theta) - 1] = 0$$

$$\therefore \cos \theta = \sin \theta \text{ or } \cos \theta + \sin \theta = \frac{1}{\sqrt{2}}$$

$$\text{i.e. } \tan \theta = 1 \text{ or } \sqrt{2} \cos \left(\theta - \frac{\pi}{4} \right) = \frac{1}{\sqrt{2}}$$

$$\text{i.e. } \theta = \frac{\pi}{4} \quad \text{or } \cos\left(\theta - \frac{\pi}{4}\right) = \frac{1}{2}$$

$$\therefore \theta = \frac{\pi}{4} \quad \text{or } \theta = \frac{\pi}{3} + \frac{\pi}{4} \quad \text{or } \theta = -\frac{\pi}{3} + \frac{\pi}{4}$$

$$\text{i.e. } \theta = \frac{\pi}{4} \quad \text{or } \theta = \frac{7\pi}{12} \quad \text{or } \theta = \frac{-\pi}{12}$$

$$\frac{d^2V}{d\theta^2} = 2\sqrt{2}Mga \left[-4\sin 2\theta + \sqrt{2}\sin\theta + \sqrt{2}\cos\theta \right]$$

$$\text{when } \theta = \frac{\pi}{4} \quad \frac{d^2V}{d\theta^2} = 2\sqrt{2}Mga \left[-4 + 1 + 1 \right] = -4\sqrt{2}Mga < 0 \quad \therefore \text{unstable.}$$

$$\text{when } \theta = \frac{7\pi}{12} \quad \frac{d^2V}{d\theta^2} = 2\sqrt{2}Mga \left[2 + 1 \right] = 6\sqrt{2}Mga > 0 \quad \therefore \text{stable.}$$

$$\begin{aligned} \text{when } \theta = -\frac{\pi}{12} \quad \frac{d^2V}{d\theta^2} &= 2\sqrt{2}Mga \left[+2 + \frac{1}{2} - \frac{\sqrt{3}}{2} + \frac{1}{2} + \frac{\sqrt{3}}{2} \right] \\ &= 6\sqrt{2}Mga > 0 \quad \therefore \text{stable} \end{aligned}$$