

# Solutionbank M4

## Edexcel AS and A Level Modular Mathematics

### Damped and forced harmonic motion

#### Exercise A, Question 1

#### Question:

A particle  $P$  is moving in a straight line. At time  $t$ , the displacement of  $P$  from a fixed point on the line is  $x$ . The motion of the particle is modelled by the differential

$$\text{equation } \frac{d^2x}{dt^2} + 4\frac{dx}{dt} + 8x = 0$$

When  $t = 0$   $P$  is at rest at the point where  $x = 2$ .

- Find  $x$  as a function of  $t$ .
- Calculate the value of  $x$  when  $t = \frac{\pi}{3}$ .
- State whether the motion is heavily, critically or lightly damped.

#### Solution:

$$\text{a } \frac{d^2x}{dt^2} + 4\frac{dx}{dt} + 8x = 0$$

$$\text{Auxiliary equation: } m^2 + 4m + 8 = 0$$

$$m = \frac{-4 \pm \sqrt{(16 - 32)}}{2}$$

$$m = -2 \pm 2i$$

General solution:

$$x = e^{-2t}(A \cos 2t + B \sin 2t)$$

$$t = 0, x = 2 \Rightarrow 2 = A$$

$$\dot{x} = -2e^{-2t}(A \cos 2t + B \sin 2t) + e^{-2t}(-2A \sin 2t + 2B \cos 2t)$$

$$t = 0, \dot{x} = 0 \Rightarrow 0 = -2A + 2B$$

$$B = A$$

$$\therefore x = 2e^{-2t}(\cos 2t + \sin 2t)$$

Solve the equation using the methods of book FP2 chapter 5.

Use the initial conditions given in the question to obtain values for  $A$  and  $B$ .

$$\text{b } t = \frac{\pi}{3} \quad x = 2e^{-\frac{2\pi}{3}} \left( \cos \frac{2\pi}{3} + \sin \frac{2\pi}{3} \right)$$

$$x = 0.09014\dots$$

$$\therefore x = 0.0901 \quad (3 \text{ s.f.})$$

- Lightly damped

# Solutionbank M4

## Edexcel AS and A Level Modular Mathematics

### Damped and forced harmonic motion

#### Exercise A, Question 2

#### Question:

A particle  $P$  is moving in a straight line. At time  $t$ , the displacement of  $P$  from a fixed point on the line is  $x$ . The motion of the particle is modelled by the differential

$$\text{equation } \frac{d^2x}{dt^2} + 8\frac{dx}{dt} + 12x = 0$$

When  $t = 0$   $P$  is at rest at the point where  $x = 4$ .  
Find  $x$  as a function of  $t$ .

#### Solution:

$$\frac{d^2x}{dt^2} + 8\frac{dx}{dt} + 12x = 0$$

$$\text{Auxiliary equation: } m^2 + 8m + 12 = 0$$

$$(m + 6)(m + 2) = 0$$

$$m = -6 \text{ or } -2$$

General solution:

$$x = Ae^{-6t} + Be^{-2t}$$

$$t = 0, x = 4 \Rightarrow 4 = A + B \quad \textcircled{1}$$

$$\dot{x} = -6Ae^{-6t} - 2Be^{-2t}$$

$$t = 0, \dot{x} = 0 \quad 0 = -6A - 2B$$

$$0 = 3A + B \quad \textcircled{2}$$

$$\therefore 2A = -4$$

$$A = -2, B = 6$$

$$\therefore x = 6e^{-2t} - 2e^{-6t}$$

Solve the equation using the methods of book FP2 chapter 5.

Use the information given in the question to obtain values for  $A$  and  $B$ .

Solve equations  $\textcircled{1}$  and  $\textcircled{2}$  simultaneously.

# Solutionbank M4

## Edexcel AS and A Level Modular Mathematics

### Damped and forced harmonic motion

#### Exercise A, Question 3

#### Question:

A particle  $P$  is moving in a straight line. At time  $t$ , the displacement of  $P$  from a fixed point on the line is  $x$ . The motion of the particle is modelled by the differential

$$\text{equation } \frac{d^2x}{dt^2} + 2\frac{dx}{dt} + 6x = 0$$

When  $t = 0$   $P$  is at rest at the point where  $x = 1$ .

a Find  $x$  as a function of  $t$ .

The smallest value of  $t, t > 0$ , for which  $P$  is instantaneously at rest is  $T$ .

b Find the value of  $T$ .

#### Solution:

$$\text{a } \frac{d^2x}{dt^2} + 2\frac{dx}{dt} + 6x = 0$$

$$\text{Auxiliary equation: } m^2 + 2m + 6 = 0$$

$$m = \frac{-2 \pm \sqrt{4 - 24}}{2}$$

$$m = -1 \pm i\sqrt{5}$$

General solution:

$$x = e^{-t}(A \cos \sqrt{5}t + B \sin \sqrt{5}t)$$

$$t = 0 \quad x = 1 \Rightarrow 1 = A$$

$$\dot{x} = -e^{-t}(A \cos \sqrt{5}t + B \sin \sqrt{5}t) + e^{-t}(-A\sqrt{5} \sin \sqrt{5}t + B\sqrt{5} \cos \sqrt{5}t)$$

$$t = 0 \quad \dot{x} = 0 \Rightarrow 0 = -A + B\sqrt{5}$$

$$B = \frac{1}{\sqrt{5}}$$

$$\therefore x = e^{-t} \left( \cos \sqrt{5}t + \frac{1}{\sqrt{5}} \sin \sqrt{5}t \right)$$

Solve the equation using the methods of book FP2 Chapter 5.

Use the initial conditions given in the question to obtain values for  $A$  and  $B$ .

$$\text{b } \quad \dot{x} = 0 \quad t = T$$

$$\Rightarrow 0 = -e^{-T} \left( \cos \sqrt{5}T + \frac{1}{\sqrt{5}} \sin \sqrt{5}T \right) + e^{-T} \left( -\sqrt{5} \sin \sqrt{5}T + \frac{1}{\sqrt{5}} \sqrt{5} \cos \sqrt{5}T \right)$$

$$e^{-T} \neq 0$$

$$\therefore -\cos \sqrt{5}T - \frac{1}{\sqrt{5}} \sin \sqrt{5}T - \sqrt{5} \sin \sqrt{5}T + \cos \sqrt{5}T = 0$$

$$\sin \sqrt{5}T = 0$$

$$\sqrt{5}T = 0, \pi, \dots$$

$$T = \frac{\pi}{\sqrt{5}}, \dots$$

$$T > 0$$

$$\therefore \text{Smallest value of } T \text{ is } \frac{\pi}{\sqrt{5}} \text{ or } 1.40^{\circ} \quad (3 \text{ s.f.})$$

# Solutionbank M4

## Edexcel AS and A Level Modular Mathematics

### Damped and forced harmonic motion

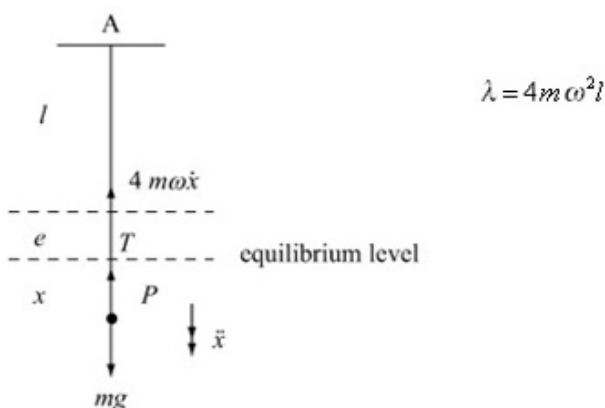
#### Exercise A, Question 4

#### Question:

A particle  $P$  of mass  $m$  is attached to one end of a light elastic spring of natural length  $l$  and modulus of elasticity  $4m\omega^2l$ , where  $\omega$  is a positive constant. The other end of the spring is attached to a fixed point  $A$  and  $P$  hangs in equilibrium vertically below  $A$ . At time  $t = 0$ ,  $P$  is projected vertically downwards with speed  $u$ . A resistance of magnitude  $4m\omega v$ , where  $v$  is the speed of  $P$ , acts on  $P$ . The displacement of  $P$  downwards from its equilibrium position at time  $t$  is  $x$ .

- Show that  $\frac{d^2x}{dt^2} + 4\omega \frac{dx}{dt} + 4\omega^2x = 0$
- Find an expression for  $x$  in terms of  $u$ ,  $t$  and  $\omega$ .
- Find the time at which  $P$  comes to instantaneous rest.

#### Solution:



a In equilibrium:  $R(\uparrow) T = mg$

Hooke's Law:

$$T = \frac{\lambda x}{l}$$

$$T = \frac{4m\omega^2 e}{l}$$

$$\therefore 4m\omega^2 e = mg \quad \text{①}$$

When extension is  $(e + x)$

$$T = \frac{\lambda(e + x)}{l} = \frac{4m\omega^2 l(e + x)}{l}$$

$F = ma$ :

$$mg - T - 4m\omega\dot{x} = m\ddot{x}$$

$$mg - 4m\omega^2(e + x) - 4m\omega\dot{x} = m\ddot{x}$$

$$mg - mg - 4m\omega^2 x - 4m\omega\dot{x} = m\ddot{x}$$

$$\ddot{x} + 4\omega\dot{x} + 4\omega^2 x = 0$$

$$\text{or } \frac{d^2 x}{dt^2} + 4\omega \frac{dx}{dt} + 4\omega^2 x = 0$$

Use 1.

b Auxiliary equation:  $m^2 + 4\omega m + 4\omega^2 = 0$

$$(m + 2\omega)^2 = 0$$

$$m = -2\omega \quad (\text{twice})$$

General solution:  $x = (A + Bt)e^{-2\omega t}$

$$t = 0, x = 0 \Rightarrow 0 = A$$

$$\dot{x} = Be^{-2\omega t} - 2\omega Bte^{-2\omega t}$$

$$t = 0, \dot{x} = u \Rightarrow u = B$$

$$\therefore x = ute^{-2\omega t}$$

c  $\dot{x} = ue^{-2\omega t} - 2\omega ut e^{-2\omega t}$

$$= u e^{-2\omega t} (1 - 2\omega t)$$

$$\dot{x} = 0 \quad 1 - 2\omega t = 0$$

$$t = \frac{1}{2\omega}$$

$e^{-2\omega t} \neq 0$

# Solutionbank M4

## Edexcel AS and A Level Modular Mathematics

### Damped and forced harmonic motion

Exercise A, Question 5

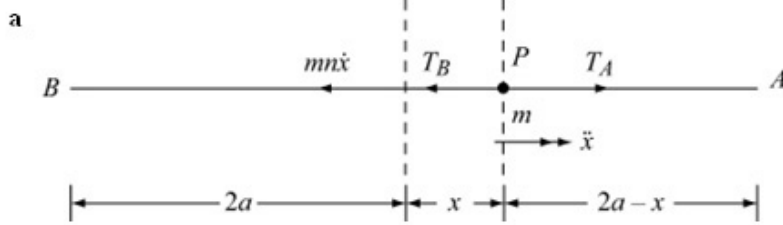
#### Question:

A particle  $P$  of mass  $m$  is attached to the mid-point of a light elastic string  $AB$  of natural length  $2a$  and modulus of elasticity  $mg$ . The ends  $A$  and  $B$  of the string are attached to fixed points on a smooth horizontal table with  $AB = 4a$ . The particle is released from rest at the point  $C$  where  $A$ ,  $C$  and  $B$  lie in a straight line and  $AC = \frac{3}{2}a$ .

At time  $t$  the displacement of  $P$  from its equilibrium position is  $x$ . The particle is subject to a resisting force of magnitude  $mnv$  where  $v$  is the speed of  $P$  and  $n = \sqrt{\frac{2g}{a}}$ .

- Show that  $\frac{d^2x}{dt^2} + n\frac{dx}{dt} + n^2x = 0$ .
- Find an expression for  $x$  in terms of  $a$ ,  $n$  and  $t$ .

#### Solution:



$$n = \sqrt{\frac{2g}{a}} \quad \lambda = mg \quad \leftarrow \text{Consider each half string separately.}$$

$$l = a$$

$$T = \frac{\lambda x}{l} \quad \leftarrow \text{Use Hooke's Law.}$$

$$T_A = \frac{mg(a-x)}{a} \quad T_B = \frac{mg(a+x)}{a}$$

$$F = ma$$

$$T_A - T_B - mn\ddot{x} = m\ddot{x}$$

$$\frac{mg(a-x)}{a} - \frac{mg(a+x)}{a} - mn\ddot{x} = m\ddot{x}$$

$$-\frac{2gx}{a} - n\ddot{x} = \ddot{x}$$

$$\ddot{x} + n\ddot{x} + \frac{2g}{a}x = 0$$

$$\text{or } \frac{d^2x}{dt^2} + n \frac{dx}{dt} + n^2x = 0 \quad \leftarrow \text{From the question, } n^2 = \frac{2g}{a}$$

**b** Auxiliary equation:  $m^2 + nm + n^2 = 0$   $\leftarrow$  Now solve the differential equation using the methods of book FP2 chapter 5

$$m = \frac{-n \pm \sqrt{n^2 - 4n^2}}{2}$$

$$m = \frac{-n \pm in\sqrt{3}}{2}$$

General solution:

$$x = e^{-\frac{1}{2}nt} \left( A \cos \frac{n\sqrt{3}}{2}t + B \sin \frac{n\sqrt{3}}{2}t \right)$$

$$t = 0 \quad x = \frac{1}{2}a \quad \Rightarrow \quad \frac{1}{2}a = A \quad \leftarrow \text{Use the initial conditions given in the question to obtain values for } A \text{ and } B.$$

$$\dot{x} = -\frac{1}{2}n e^{-\frac{1}{2}nt} \left( A \cos \frac{n\sqrt{3}}{2}t + B \sin \frac{n\sqrt{3}}{2}t \right) + e^{-\frac{1}{2}nt} \left( -\frac{n\sqrt{3}}{2}A \sin \frac{n\sqrt{3}}{2}t + \frac{n\sqrt{3}}{2}B \cos \frac{n\sqrt{3}}{2}t \right)$$

$$t=0 \quad \dot{x}=0 \Rightarrow 0 = -\frac{1}{2}nA + \frac{n\sqrt{3}}{2}B$$

$$B = \frac{A}{\sqrt{3}} = \frac{a}{2\sqrt{3}}$$

$$\therefore x = e^{-\frac{1}{2}nt} \left( \frac{1}{2}a \cos \frac{n\sqrt{3}}{2}t + \frac{a}{2\sqrt{3}} \sin \frac{n\sqrt{3}}{2}t \right)$$

$$\text{or } x = \frac{a}{2} e^{-\frac{1}{2}nt} \left( \cos \frac{n\sqrt{3}}{2}t + \frac{1}{\sqrt{3}} \sin \frac{n\sqrt{3}}{2}t \right)$$



# Solutionbank M4

## Edexcel AS and A Level Modular Mathematics

### Damped and forced harmonic motion

#### Exercise B, Question 1

#### Question:

A particle  $P$  is attached to end  $A$  of a light elastic spring  $AB$ . The end  $B$  of the spring is oscillating. At time  $t$  the displacement of  $P$  from a fixed point is  $x$ . When  $t = 0, x = 0$

and  $\frac{dx}{dt} = \frac{k}{5}$  where  $k$  is a constant. Given that  $x$  satisfies the differential equation

$$\frac{d^2x}{dt^2} + 9x = k \cos t, \text{ find } x \text{ as a function of } t.$$

#### Solution:

$$\frac{d^2x}{dt^2} + 9x = k \cos t$$

Solve the equation using the methods of book FP2 chapter 5.

Auxiliary equation:

$$m^2 + 9 = 0$$

$$m = \pm 3i$$

Complementary function:

$$x = A \cos 3t + B \sin 3t$$

Particular integral:

$$\text{try } x = p \cos t + q \sin t$$

$$\dot{x} = -p \sin t + q \cos t$$

$$\ddot{x} = -p \cos t - q \sin t$$

$$-p \cos t - q \sin t + 9(p \cos t + q \sin t) = k \cos t$$

$$-p + 9p = k$$

Substitute the above results in the differential equation.

$$p = \frac{k}{8}$$

Equating coefficients of  $\cos t \dots$

$$-q + 9q = 0 \quad q = 0$$

... and of  $\sin t$ .

Complete solution:

$$x = A \cos 3t + B \sin 3t + \frac{k}{8} \cos t$$

$$t = 0 \quad x = 0 \Rightarrow 0 = A + \frac{k}{8} \quad A = -\frac{k}{8}$$

$$\dot{x} = -3A \sin 3t + 3B \cos 3t - \frac{k}{8} \sin t$$

$$t = 0, \dot{x} = \frac{k}{5} \Rightarrow \frac{k}{5} = 3B \quad B = \frac{k}{15}$$

$$\therefore x = -\frac{k}{8} \cos 3t + \frac{k}{15} \sin 3t + \frac{k}{8} \cos t$$

Use the initial conditions given in the question to obtain values of  $A$  and  $B$ .

# Solutionbank M4

## Edexcel AS and A Level Modular Mathematics

### Damped and forced harmonic motion

Exercise B, Question 2

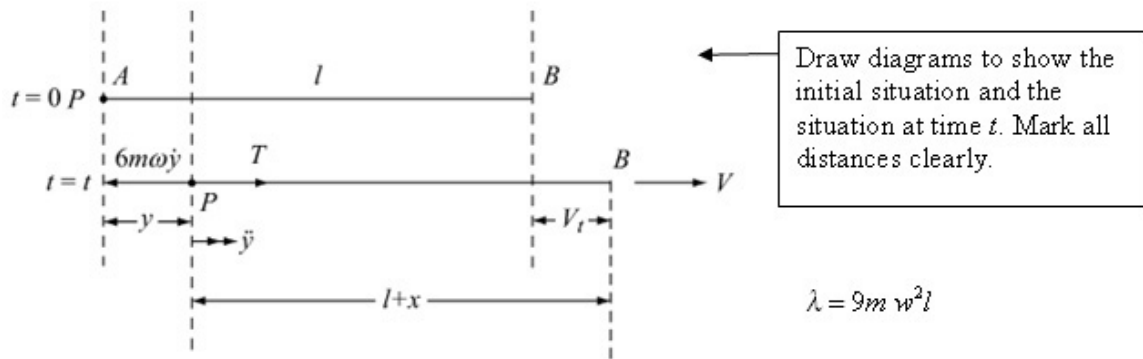
**Question:**

A particle  $P$  of mass  $m$  lies at rest on a horizontal table attached to end  $A$  of a light elastic spring  $AB$  of natural length  $l$  and modulus of elasticity  $9m\omega^2l$ . At time  $t = 0$ ,  $AB = l$ . The end  $B$  of the spring is now moved along the table in the direction  $AB$  with constant speed  $V$ . The resistance to motion of  $P$  has magnitude  $6m\omega v$ , where  $v$  is the speed of  $P$  and  $\omega$  is a constant. At time  $t$  the extension of the spring is  $x$  and the displacement of  $P$  from its initial position is  $y$ .

Show that

- $x + y = Vt$ ,
- $\frac{d^2x}{dt^2} + 6\omega \frac{dx}{dt} + 9\omega^2x = 6\omega V$ .
- Find an expression for  $x$  in terms of  $t$ ,  $\omega$  and  $V$ .

**Solution:**



a  $y + (l + x) = l + Vt$   
 $x + y = Vt$  ①

b Hooke's law:  $T = \frac{\lambda x}{l} = \frac{9m\omega^2 l}{l} x$   
 $T = 9m\omega^2 x$

Use the diagrams to form this equation.

$F = ma$ :  $T - 6m\omega y = m \ddot{y}$   
 $9m\omega^2 x - 6m\omega y = m \ddot{y}$

The displacement of P from its initial position is y, not x.

From ①

$\dot{x} + \dot{y} = V$   
 $\ddot{x} + \ddot{y} = 0$

Use ① to obtain  $\dot{y}$  and  $\ddot{y}$  in terms of  $\dot{x}$  and  $\ddot{x}$

$\therefore 9m\omega^2 x - 6m\omega(V - \dot{x}) = m(-\ddot{x})$   
 $\ddot{x} + 6\omega\dot{x} + 9\omega^2 x = 6\omega V$

or  $\frac{d^2 x}{dt^2} + 6\omega \frac{dx}{dt} + 9\omega^2 x = 6\omega V$

c Auxiliary equation:  $m^2 + 6m\omega + 9\omega^2 = 0$   
 $(m + 3\omega)^2 = 0$   
 $m = -3\omega$  (twice)

Solve the equation using the methods of book FP2 Chapter 5.

Complementary function:

$x = (A + Bt)e^{-3\omega t}$

Particular integral: try  $x = k$

$\dot{x} = \ddot{x} = 0$

$9\omega^2 k = 6\omega V$

$k = \frac{2V}{3\omega}$

$\therefore$  Complete solution:

$x = (A + Bt)e^{-3\omega t} + \frac{2V}{3\omega}$

$t = 0, x = 0 \Rightarrow 0 = A + \frac{2V}{3\omega}$

Use the initial conditions given in the question to obtain expressions for A and B.

$A = -\frac{2V}{3\omega}$

$\dot{x} = Be^{-3\omega t} - 3\omega(A + Bt)e^{-3\omega t}$

$t = 0, \dot{x} = 0 \Rightarrow 0 = B - 3\omega A$

$B = 3\omega A = -2V$

$\therefore x = \left(-\frac{2V}{3\omega} - 2Vt\right)e^{-3\omega t} + \frac{2V}{3\omega}$

or  $x = \frac{2V}{3\omega}(1 - e^{-3\omega t} - 3\omega t e^{-3\omega t})$

© Pearson Education Ltd 2009

# Solutionbank M4

## Edexcel AS and A Level Modular Mathematics

### Damped and forced harmonic motion

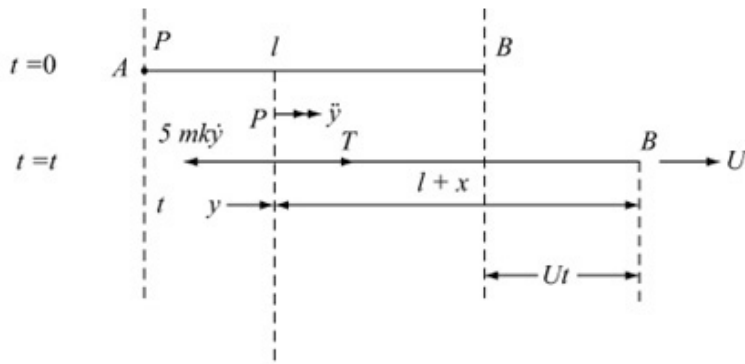
Exercise B, Question 3

#### Question:

A particle  $P$  of mass  $m$  is attached to end  $A$  of a light elastic spring  $AB$  of natural length  $l$  and modulus of elasticity  $6mk^2l$ . Initially the spring and the particle lie at rest on a horizontal surface with  $AB = l$ . The end  $B$  of the spring is then moved in a straight line in the direction  $AB$  with constant speed  $U$ . As  $P$  moves on the surface it is subject to a resistance of magnitude  $5mkv$  where  $v$  is the speed of  $P$ . At time  $t, t > 0$ , the extension of the spring is  $x$ .

- a Show that  $\frac{d^2x}{dt^2} + 5k\frac{dx}{dt} + 6k^2x = 5kU$ .
- b Find an expression for  $x$  in terms of  $t$ .

#### Solution:



Draw diagrams to show the initial situation and the situation at time  $t$ . Let the distance moved by  $P$  from its initial position be  $y$ . Mark all distances clearly.

a  $y + (l + x) = l + Ut$

$y + x = Ut$  ①

Obtain a connection between  $y$  and the extension  $x$ .

Hooke's law:  $T = \frac{\lambda x}{l} = \frac{6mk^2 lx}{l}$

$T = 6mk^2 x$

$F = ma \quad T - 5mk\dot{y} = m\ddot{y}$

Use ① to obtain  $\dot{y}$  and  $\ddot{y}$  in terms of  $\dot{x}$  and  $\ddot{x}$ .

Using ①  $\dot{y} + \dot{x} = U$

$\ddot{y} + \ddot{x} = 0$

$\therefore 6mk^2 x - 5mk(U - \dot{x}) = m(-\ddot{x})$

$\ddot{x} + 5k\dot{x} + 6k^2 x = 5kU$

or  $\frac{d^2 x}{dt^2} + 5k \frac{dx}{dt} + 6k^2 x = 5kU$

b Auxiliary equation:  $m^2 + 5km + 6k^2 = 0$

Now solve the equation using the methods of book FP2 Chapter 5.

$(m + 3k)(m + 2k) = 0$

$m = -3k$  or  $-2k$

Complementary function:

$x = Ae^{-3kt} + Be^{-2kt}$

Particular integral: try  $x = a$

$\dot{x} = \ddot{x} = 0$

$\therefore 6k^2 a = 5kU$

$a = \frac{5U}{6k}$

Complete Solution:  $x = Ae^{-3kt} + Be^{-2kt} + \frac{5U}{6k}$

$t = 0, x = 0 \Rightarrow 0 = A + B + \frac{5U}{6k}$  ①

$\dot{x} = -3kAe^{-3kt} - 2kB e^{-2kt}$

$t = 0, \dot{x} = 0 \Rightarrow 0 = -3kA - 2kB$

$3A + 2B = 0$  ②

$\therefore 2A - 3A + \frac{5U}{3k} = 0$

Solve ① and ② simultaneously.

$A = \frac{5U}{3k}, B = -\frac{5U}{2k}$

$\therefore x = \frac{5U}{3k} e^{-3kt} - \frac{5U}{2k} e^{-2kt} + \frac{5U}{6k}$



# Solutionbank M4

## Edexcel AS and A Level Modular Mathematics

### Damped and forced harmonic motion

#### Exercise B, Question 4

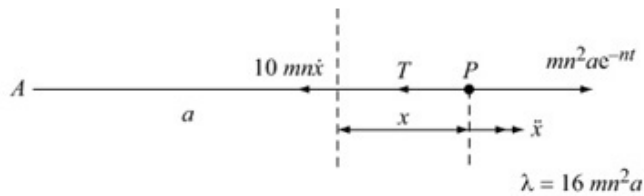
#### Question:

A particle  $P$  of mass  $m$  is attached to one end of a light elastic string of natural length  $a$  and modulus of elasticity  $16mn^2a$ . The other end of the string is attached to a fixed point  $A$  on the horizontal table on which  $P$  lies. At time  $t = 0$ ,  $P$  is at rest on the table with  $AP = a$ . A force of magnitude  $mn^2ae^{-nt}$ ,  $t \geq 0$ , acting in the direction  $AP$  is applied to  $P$ . The motion of  $P$  is opposed by a resistance of magnitude  $10mnv$ , where  $v$  is the speed of  $P$ . At time  $t$ ,  $t > 0$ , the extension of the string is  $x$ .

- a Show that  $\frac{d^2x}{dt^2} + 10n \frac{dx}{dt} + 16n^2x = n^2ae^{-nt}$ .
- b Find an expression for  $x$  in terms of  $t$ .

#### Solution:





a Hooke's law:  $T = \frac{\lambda x}{l}$

$$T = \frac{16mn^2a}{a}x = 16mn^2x$$

$$F = ma$$

$$mn^2ae^{-nt} - T - 10mn\bar{x} = m\ddot{x}$$

$$\ddot{x} + 10n\dot{x} + 16n^2x = n^2ae^{-nt}$$

$$\text{or } \frac{d^2x}{dt^2} + 10n\frac{dx}{dt} + 16n^2x = n^2ae^{-nt}$$

b Auxiliary equation:  $m^2 + 10mn + 16n^2 = 0$   
 $(m + 2n)(m + 8n) = 0$

$$m = -8n, m = -2n$$

$\therefore$  Complementary function:

$$x = Ae^{-8nt} + Be^{-2nt}$$

Particular integral: try  $x = ke^{-nt}$

$$\dot{x} = -nke^{-nt}$$

$$\ddot{x} = n^2ke^{-nt}$$

$$\therefore n^2ke^{-nt} - 10n^2ke^{-nt} + 16n^2ke^{-nt} = n^2ae^{-nt}$$

$$7n^2ke^{-nt} = n^2ae^{-nt}$$

$$k = \frac{a}{7}$$

Solve the equation using the methods of book FP2 Chapter 5.

Complete solution:

$$x = Ae^{-8nt} + Be^{-2nt} + \frac{a}{7}e^{-nt}$$

$$t = 0, x = 0 \Rightarrow 0 = A + B + \frac{a}{7} \quad \textcircled{1}$$

$$\dot{x} = -8nAe^{-8nt} - 2nBe^{-2nt} - \frac{an}{7}e^{-nt}$$

$$t = 0, \dot{x} = 0 \quad 0 = -8nA - 2nB - \frac{an}{7}$$

$$8A + 2B + \frac{a}{7} = 0 \quad \textcircled{2}$$

$$6A - \frac{a}{7} = 0$$

$$A = \frac{a}{42}$$

$$B = -\frac{a}{42} - \frac{a}{7} = -\frac{a}{6}$$

$$\therefore x = \frac{a}{42}e^{-8nt} - \frac{a}{6}e^{-2nt} + \frac{a}{7}e^{-nt}$$

Use the initial conditions given in the question to obtain values for A and B.

Solve equations  $\textcircled{1}$  and  $\textcircled{2}$  simultaneously.



# Solutionbank M4

## Edexcel AS and A Level Modular Mathematics

### Damped and forced harmonic motion

Exercise B, Question 5

**Question:**

A particle  $P$  of mass  $0.5$  kg is attached to end  $A$  of a light elastic string  $AB$  of natural length  $0.8$  m and modulus of elasticity  $5$  N. The particle and string lie on a smooth horizontal plane with  $AB = 0.8$  m. At time  $t = 0$  a variable force  $F$  N is applied to the end  $B$  of the string which then moves with a constant speed  $5$  m s<sup>-1</sup> in the direction  $AB$ . The particle moves along the plane and is subject to air resistance of magnitude  $0.5v$  newtons, where  $v$  m s<sup>-1</sup> is the speed of  $P$ . At time  $t$  seconds the displacement of  $P$  from its initial position is  $y$  metres and the extension of the string is  $x$  metres.

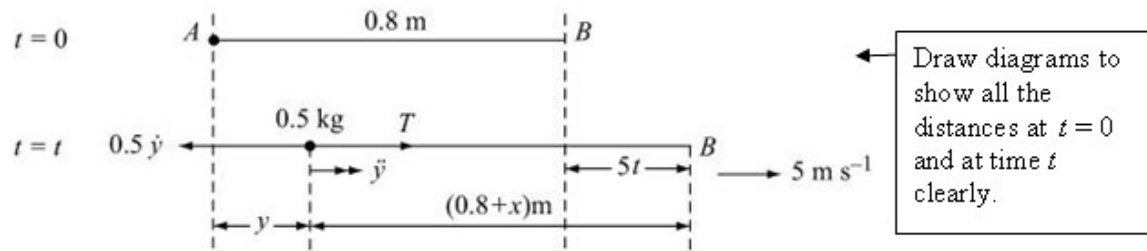
Show that, while the string is taut,

- a  $x + y = 5t$ ,
- b  $\frac{d^2x}{dt^2} + \frac{dx}{dt} + 12.5x = 5$ .

Find

- c an expression for  $x$  in terms of  $t$ ,
- d the exact distance travelled by  $P$  in the first  $\pi$  seconds,
- e the exact value of  $F$  when  $t = \pi$ .

**Solution:**



a  $y + (0.8 + x) = 0.8 + 5t$

$$x + y = 5t \quad \textcircled{1}$$

Use the diagrams to form this equation

b Hooke's law:  $T = \frac{\lambda x}{l} = \frac{5x}{0.8}$

$$F = ma \quad T - 0.5\ddot{y} = 0.5\ddot{y}$$

$$6.25x - 0.5\ddot{y} = 0.5\ddot{y}$$

$$\dot{x} + \dot{y} = 5$$

$$\ddot{x} + \ddot{y} = 0$$

$$\therefore 6.25x - 0.5(5 - \ddot{x}) = 0.5(-\ddot{x})$$

$$\ddot{x} + \ddot{x} + 12.5x = 5$$

$$\text{or } \frac{d^2x}{dt^2} + \frac{dx}{dt} + 12.5x = 5$$

c Auxiliary equation:  $m^2 + m + 12.5 = 0$

Now solve the equation using the methods of book FP2 Chapter 6.

$$m = \frac{-1 \pm \sqrt{1 - 50}}{2}$$

$$m = \frac{-1 \pm 7i}{2}$$

Complementary function is

$$x = e^{-\frac{1}{2}t} \left( A \cos \frac{7}{2}t + B \sin \frac{7}{2}t \right)$$

Particular integral: try  $x = k$

$$\dot{x} = \ddot{x} = 0$$

$$12.5k = 5$$

$$k = \frac{5}{12.5} = \frac{2}{5}$$

General solution:

$$x = e^{-\frac{1}{2}t} \left( A \cos \frac{7}{2}t + B \sin \frac{7}{2}t \right) + \frac{2}{5}$$

$$t = 0, x = 0 \Rightarrow 0 = A + \frac{2}{5} \Rightarrow A = -\frac{2}{5}$$

Use the initial conditions given in the question to obtain values for  $A$  and  $B$ .

$$\dot{x} = -\frac{1}{2}e^{-\frac{1}{2}t} \left( A \cos \frac{7}{2}t + B \sin \frac{7}{2}t \right)$$

$$+ e^{-\frac{1}{2}t} \left( -\frac{7}{2}A \sin \frac{7}{2}t + \frac{7}{2}B \cos \frac{7}{2}t \right)$$

$$t = 0, \dot{x} = 0 \Rightarrow 0 = -\frac{1}{2}A + \frac{7}{2}B$$

$$B = \frac{A}{7} = -\frac{2}{35}$$

$$\therefore x = e^{-\frac{1}{2}t} \left( -\frac{2}{5} \cos \frac{7}{2}t - \frac{2}{35} \sin \frac{7}{2}t \right) + \frac{2}{5}$$

$$\mathbf{d} \quad t = \pi, x = \frac{2}{5} - e^{-\pi/2} \times \left( \frac{-2}{35} \right) (-1)$$

$$y = 5t - x$$

$$= 5\pi - \frac{2}{5} + \frac{2}{35} e^{-\frac{\pi}{2}}$$

$$\mathbf{e} \quad F = T = \frac{25x}{4}$$

$$t = \pi \quad F = \frac{25}{4} \left( \frac{2}{5} - \frac{2}{35} e^{-\frac{\pi}{2}} \right)$$

$x$  is the extension of the string,  
not the distance travelled by  $P$ .

End  $B$  is moving at a constant  
speed, so it is in equilibrium.

# Solutionbank M4

## Edexcel AS and A Level Modular Mathematics

### Damped and forced harmonic motion

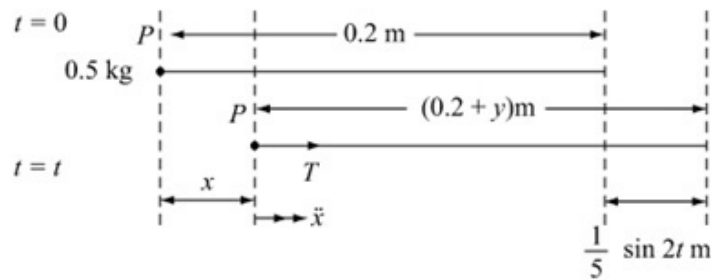
Exercise C, Question 1

#### Question:

A particle  $P$  of mass  $0.5 \text{ kg}$  is free to move horizontally inside a smooth cylindrical tube. The particle is attached to one end of a light elastic spring of natural length  $0.2 \text{ m}$  and modulus of elasticity  $5 \text{ N}$ . At time  $t = 0$  the system is at rest with the spring at its natural length. The other end of the spring is then forced to oscillate with simple harmonic motion so that at time  $t$  seconds,  $t > 0$ , its displacement from its initial position is  $\frac{1}{5} \sin 2t$  metres and the displacement of  $P$  from its initial position is  $x$  metres.

- a Show that  $\frac{d^2x}{dt^2} + 50x = 10 \sin 2t$ .
- b Find an expression for  $x$  in terms of  $t$ .

#### Solution:



Let the extension of the spring be  $y$  m and draw diagrams showing the situation when  $t = 0$  and at time  $t$  seconds.

a Hooke's law:  $T = \frac{\lambda x}{l} = \frac{5y}{0.2} = 25y$

$$F = ma:$$

$$T = 0.5\ddot{x}$$

$$25y = 0.5\ddot{x}$$

From the diagrams:

$$0.2 + \frac{1}{5} \sin 2t = (0.2 + y) + x$$

Use the lengths shown in the diagrams to form this equation.

$$x + y = \frac{1}{5} \sin 2t$$

$$\therefore 25 \left( \frac{1}{5} \sin 2t - x \right) = 0.5\ddot{x}$$

$$\ddot{x} + 50x = 10 \sin 2t$$

$$\text{or } \frac{d^2x}{dt^2} + 50x = 10 \sin 2t$$

b Auxiliary equation:  $m^2 + 50 = 0$

$$m = \pm 5i\sqrt{2}$$

Now solve the differential equation using the methods of book FP2 Chapter 5.

Complementary function:

$$x = A \cos 5\sqrt{2}t + B \sin 5\sqrt{2}t$$

Particular integral:

$$\text{Try: } x = P \cos 2t + Q \sin 2t$$

$$\dot{x} = -2P \sin 2t + 2Q \cos 2t$$

$$\ddot{x} = -4P \cos 2t - 4Q \sin 2t$$

$$\therefore -4P \cos 2t - 4Q \sin 2t + 50(P \cos 2t + Q \sin 2t) = 10 \sin 2t$$

$$\Rightarrow 46Q = 10 \quad Q = \frac{10}{46} = \frac{5}{23}$$

Equate coefficients of  $\sin 2t$  and  $\cos 2t$ .

$$P = 0$$

$\therefore$  Complete solution is

$$x = A \cos 5\sqrt{2}t + B \sin 5\sqrt{2}t + \frac{5}{23} \sin 2t$$

$$t = 0, x = 0 \Rightarrow 0 = A$$

$$\dot{x} = 5\sqrt{2}B \cos 5\sqrt{2}t + \frac{10}{23} \cos 2t$$

Use the initial conditions given in the question to obtain values for  $A$  and  $B$ .

$$t = 0, \dot{x} = 0 \quad 0 = 5\sqrt{2}B + \frac{10}{23}$$

$$B = -\frac{\sqrt{2}}{23}$$

$$\therefore x = \frac{5}{23} \sin 2t - \frac{\sqrt{2}}{23} \sin 5\sqrt{2}t$$

© Pearson Education Ltd 2009



# Solutionbank M4

## Edexcel AS and A Level Modular Mathematics

### Damped and forced harmonic motion

Exercise C, Question 2

#### Question:

A particle  $P$  of mass  $m$  is moving in a straight line. At time  $t$  the displacement of  $P$  from a fixed point  $O$  of the line is  $x$ . Given that  $x$  satisfies the differential equation

$$\frac{d^2x}{dt^2} + 2k \frac{dx}{dt} + n^2x = 0 \quad \text{where } k \text{ and } n \text{ are positive constants with } k < n,$$

- find an expression for  $x$  in terms of  $k$ ,  $n$  and  $t$ .
- Write down the period of the motion.

#### Solution:

a  $\frac{d^2x}{dt^2} + 2k \frac{dx}{dt} + n^2x = 0$

Solve the equation using the methods of book FP2 Chapter 5.

Auxiliary equation:  $m^2 + 2km + n^2 = 0$

$$m = \frac{-2k \pm \sqrt{(4k^2 - 4n^2)}}{2}$$

$$m = -k \pm \sqrt{(k^2 - n^2)}$$

$$0 < k < n \Rightarrow k^2 - n^2 < 0$$

$$\therefore m = -k \pm i\sqrt{(n^2 - k^2)}$$

General solution:

$$x = e^{-kt} (A \cos \sqrt{(n^2 - k^2)}t + B \sin \sqrt{(n^2 - k^2)}t)$$

b Period =  $\frac{2\pi}{\sqrt{(n^2 - k^2)}}$

[You can write the general solution in its alternative form

$$x = A'e^{-kt} \cos(\omega t + \epsilon)$$

where  $\omega = \sqrt{(n^2 - k^2)}$

if you prefer.]

# Solutionbank M4

## Edexcel AS and A Level Modular Mathematics

### Damped and forced harmonic motion

Exercise C, Question 3

#### Question:

A particle  $P$  of mass  $m$  is attached to one end of light elastic spring of natural length  $l$  and modulus of elasticity  $2mk^2l$ . The other end of the spring is attached to a fixed point  $A$  and  $P$  is hanging in equilibrium with  $AP$  vertical.

a Find the length of the spring.

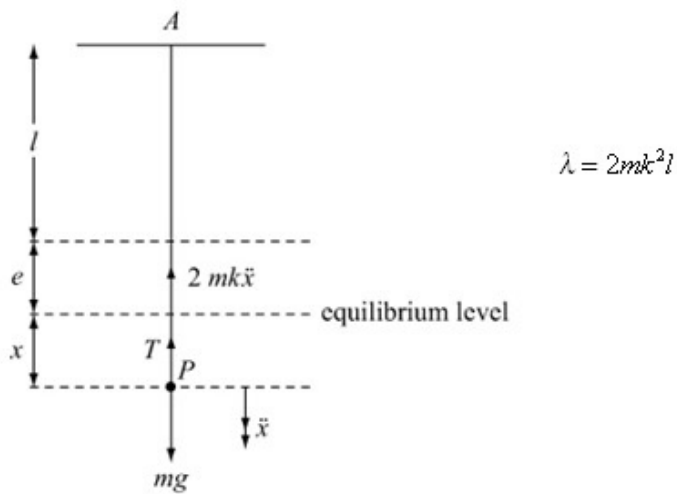
The particle is now projected vertically downwards from its equilibrium position with speed  $U$ . A resistance of magnitude  $2mkv$ , where  $v$  is the speed of  $P$ , acts on  $P$ . At time  $t, t > 0$ , the displacement of  $P$  from its equilibrium position is  $x$ .

b Show that  $\frac{d^2x}{dt^2} + 2k \frac{dx}{dt} + 2k^2x = 0$ .

c Show that  $P$  is instantaneously at rest when  $kt = (n + \frac{1}{4})\pi$ , where  $n \in \mathbb{N}$

d Sketch the graph of  $x$  against  $t$ .

#### Solution:



a In equilibrium:  $R(\uparrow)T = mg$

Hooke's law  $T = \frac{\lambda x}{l} = 2mk^2e$

$$\therefore mg = 2mk^2e \quad \textcircled{1}$$

$$e = \frac{g}{2k^2}$$

The length of the spring is  $l + \frac{g}{2k^2}$

b Hooke's law:  $T = \frac{2mk^2l}{l}(x+e)$

$$F = ma : mg - T - 2mk\dot{x} = m\ddot{x}$$

$$g - 2k^2(x+e) - 2k\dot{x} = \ddot{x}$$

$$g - 2k^2x - g - 2k\dot{x} = \ddot{x}$$

$$\ddot{x} + 2k\dot{x} + 2k^2x = 0$$

From  $\textcircled{1}$   $2k^2e = g$

or  $\frac{d^2x}{dt^2} + 2k \frac{dx}{dt} + 2k^2x = 0$

c Auxiliary equation:  $m^2 + 2km + 2k^2 = 0$

$$m = \frac{-2k \pm \sqrt{(4k^2 - 8k^2)}}{2}$$

$$m = \frac{-2k \pm \sqrt{-4k^2}}{2}$$

$$m = -k \pm ki$$

An expression for  $x$  must be found in order to answer parts c and d. Use the methods of book FP2 chapter 5 to solve the differential equation.

General solution:

$$x = e^{-kt}(A \cos kt + B \sin kt)$$

$$t = 0, x = 0 \Rightarrow 0 = A$$

$$\dot{x} = -ke^{-kt}B \sin kt + Be^{-kt}k \cos kt$$

$$t = 0, \dot{x} = U \Rightarrow U = Bk$$

$$B = \frac{U}{k}$$

$$\therefore x = e^{-kt} \frac{U}{k} \sin kt$$

$$\dot{x} = -ke^{-kt} \frac{U}{k} \sin kt + \frac{U}{k} e^{-kt} k \cos kt$$

$$\dot{x} = 0 \quad Ue^{-kt}(\sin kt - \cos kt) = 0$$

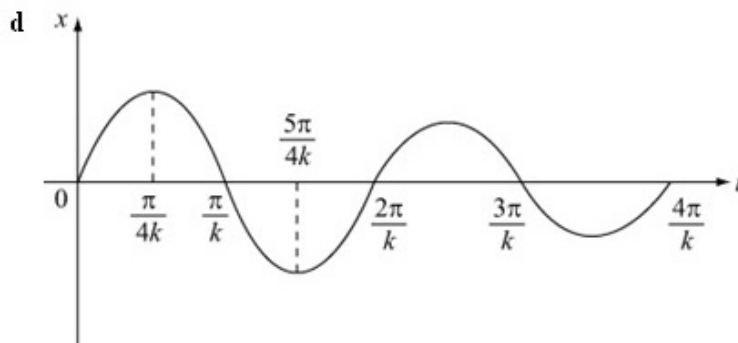
$$\sin kt = \cos kt$$

$$\tan kt = 1$$

$$kt = \frac{\pi}{4} + n\pi$$

$$kt = \left(n + \frac{1}{4}\right)\pi, n \in \mathbb{N}$$

Use the initial conditions given in the question to obtain expressions for  $A$  and  $B$ .



From c, the maxima and minima occur when

$$kt = \left(n + \frac{1}{4}\right)\pi.$$

Multiplying  $\sin kt$  by  $e^{-kt}$  causes the amplitude to decrease as  $t$  increases.

# Solutionbank M4

## Edexcel AS and A Level Modular Mathematics

### Damped and forced harmonic motion

Exercise C, Question 4

**Question:**

A particle  $P$  of mass  $m$  is attached to one end of light elastic spring of natural length  $l$  and modulus of elasticity  $mn^2l$ . The other end of the spring is attached to the roof of a stationary lift. The particle is hanging in equilibrium with the spring vertical. At time  $t = 0$  the lift starts to move vertically upwards with constant speed  $U$ . At time  $t, t > 0$ , the displacement of  $P$  from its initial position is  $x$ .

By considering the extension in the spring,

a show that  $\frac{d^2x}{dt^2} + n^2x = n^2Ut$ ,

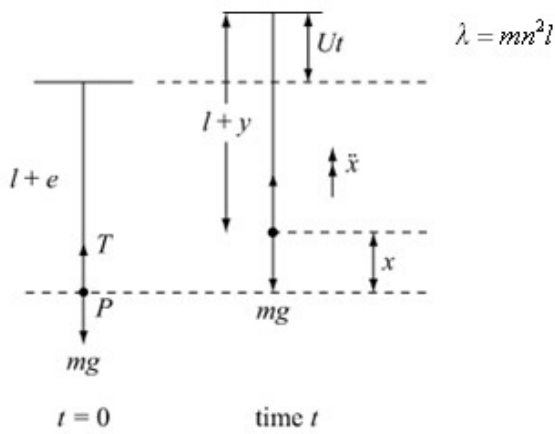
b find an expression for  $x$  in terms of  $t$  and  $n$ .

At time  $t = T$ , the particle is instantaneously at rest. Find

c the smallest value of  $T$ ,

d the displacement of  $P$  from its initial position at this time.

**Solution:**



a Let the extension in the spring at time  $t$  be  $y$ .

$$l + y + x = l + e + Ut$$

$$y + x = e + Ut \quad \textcircled{1}$$

Use the distances on the diagrams to form this equation.

When  $t = 0$ ,  $P$  is in equilibrium

$$R(\uparrow) T = Mg$$

Hooke's Law:  $T = \frac{\lambda x}{l} = \frac{mn^2 l}{l} \times e$

$$\therefore mn^2 e = mg \quad \textcircled{2}$$

At time  $t$ :

Hooke's law:  $T = \frac{mn^2 l}{l} y$

$$F = ma$$

$$T - mg = m \ddot{x}$$

$$mn^2 y - mg = m \ddot{x}$$

Using  $\textcircled{1}$ :

$$mn^2 (e + Ut - x) - mg = m \ddot{x}$$

From  $\textcircled{1}$   
 $y = e + Ut - x$

Using  $\textcircled{2}$ :

$$mg + mn^2 Ut - mn^2 x - mg = m \ddot{x}$$

$$\ddot{x} + n^2 x = n^2 Ut$$

From  $\textcircled{2}$   
 $mn^2 e = mg$

$$\text{or } \frac{d^2 x}{dt^2} + n^2 x = n^2 Ut$$

**b** Auxiliary equation:

$$m^2 + n^2 = 0$$

$$m = \pm in$$

Complementary function:

$$x = A \cos nt + B \sin nt$$

Particular integral:

$$\text{try } x = Ct + D$$

$$\dot{x} = C$$

$$\ddot{x} = 0$$

$$\therefore n^2 (Ct + D) = n^2 Ut$$

$$C = U \quad D = 0$$

Complete solution:

$$x = A \cos nt + B \sin nt + Ut$$

$$t = 0, x = 0 \Rightarrow A = 0$$

$$\dot{x} = Bn \cos nt + U$$

$$t = 0, \dot{x} = 0 \Rightarrow 0 = Bn + U$$

$$B = -\frac{U}{n}$$

$$\therefore x = Ut - \frac{U}{n} \sin nt$$

Solve the differential equation using the methods of book FP2 Chapter 5.

Use the initial conditions given in the question to obtain expressions for  $A$  and  $B$ .

**c**  $\dot{x} = Bn \cos nt + U$

$$\dot{x} = U - U \cos nt$$

$$\dot{x} = 0 \quad 0 = 1 - \cos nt$$

$$\cos nt = 1$$

$$nt = 0, 2\pi, \dots$$

$$\therefore \text{Smallest } T \text{ is } \frac{2\pi}{n}$$

From **b**.

**d**  $t = \frac{2\pi}{n} \Rightarrow x = U \times \frac{2\pi}{n} - \frac{U}{n} \sin 2\pi$

$$x = \frac{2U\pi}{n} - 0$$

$P$  has moved a distance  $\frac{2U\pi}{n}$  when it first comes to rest.

# Solutionbank M4

## Edexcel AS and A Level Modular Mathematics

### Damped and forced harmonic motion

Exercise C, Question 5

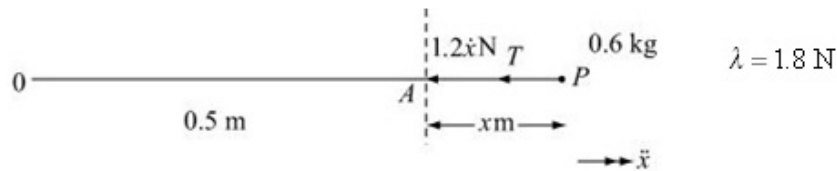
#### Question:

A particle  $P$  of mass  $0.6$  kg is attached to one end of light elastic spring of natural length  $0.5$  m and modulus of elasticity  $1.8$  N. The other end of the spring is attached to a fixed point  $O$  of the horizontal table on which  $P$  lies. At time  $t = 0$ ,  $P$  is at the point  $A$ , where  $OA = 0.5$  m. The particle is then projected in the direction  $OA$  with speed  $6$  m s<sup>-1</sup>. The particle is subject to a resistance of magnitude  $1.2v$  N, where  $v$  m s<sup>-1</sup> is the speed of  $P$ . At time  $t$  seconds the extension in the spring is  $x$  metres.

- Show that  $\frac{d^2x}{dt^2} + 2\frac{dx}{dt} + 6x = 0$ .
- Find  $x$  in terms of  $t$ .
- Find the value of  $t$  the first time  $P$  comes to instantaneous rest.

#### Solution:





a Hooke's Law:

$$T = \frac{\lambda x}{l}$$

$$T = \frac{1.8x}{0.5} = 3.6x$$

$$F = ma:$$

$$T + 1.2\dot{x} = -0.6\ddot{x}$$

$$3.6x + 1.2\dot{x} = -0.6\ddot{x}$$

$$\ddot{x} + 2\dot{x} + 6x = 0$$

$$\text{or } \frac{d^2x}{dt^2} + 2\frac{dx}{dt} + 6x = 0$$

b Auxiliary equation:  $m^2 + 2m + 6 = 0$

$$m = \frac{-2 \pm \sqrt{4 - 24}}{2}$$

$$m = -1 \pm i\sqrt{5}$$

Solve the differential equation using the methods of book FP2 Chapter 5.

General solution:

$$x = e^{-t}(A \cos \sqrt{5}t + B \sin \sqrt{5}t)$$

$$t = 0, x = 0 \Rightarrow 0 = A$$

$$\dot{x} = -e^{-t}B \sin \sqrt{5}t + e^{-t}\sqrt{5}B \cos \sqrt{5}t$$

$$t = 0, \dot{x} = 6 \Rightarrow 6 = \sqrt{5}B$$

$$B = \frac{6}{\sqrt{5}}$$

$$\therefore x = \frac{6}{\sqrt{5}}e^{-t} \sin \sqrt{5}t$$

Use the initial conditions given in the question to obtain values for  $A$  and  $B$ .

c  $\dot{x} = -\frac{6}{\sqrt{5}}e^{-t} \sin \sqrt{5}t + 6e^{-t} \cos \sqrt{5}t$

$$\dot{x} = 0 \Rightarrow \frac{1}{\sqrt{5}} \sin \sqrt{5}t = \cos \sqrt{5}t$$

$$\tan \sqrt{5}t = \sqrt{5}$$

$$t = \frac{1}{\sqrt{5}} \tan^{-1} \sqrt{5}$$

$$t = 0.5144\dots$$

$P$  first comes to instantaneous rest when  $t = 0.514$  s (3 s.f.)

$$6e^{-t} \neq 0$$

# Solutionbank M4

## Edexcel AS and A Level Modular Mathematics

### Damped and forced harmonic motion

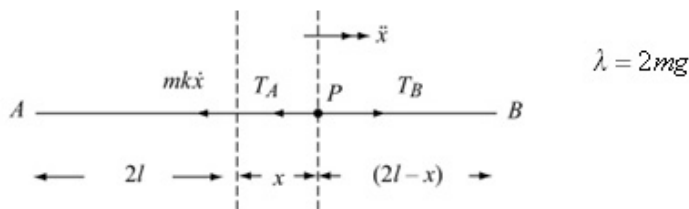
Exercise C, Question 6

#### Question:

A particle  $P$  of mass  $m$  is attached to one end of each of two identical elastic strings of natural length  $l$  and modulus of elasticity  $2mg$ . The free ends of the strings are fixed at points  $A$  and  $B$  on a smooth horizontal plane where  $AB = 4l$ . At time  $t = 0$ ,  $P$  is at rest at its equilibrium position. The particle is then projected along the line  $AB$  with speed  $U$  and moves in a straight line. At time  $t$  the displacement of  $P$  from its equilibrium position is  $x$ . A resistance of magnitude  $mkv$ , where  $v$  is the speed of  $P$  and  $k = \sqrt{\frac{g}{l}}$ , acts on  $P$ . Both strings remain taut throughout the motion.

- Show that  $\frac{d^2x}{dt^2} + k \frac{dx}{dt} + 4k^2x = 0$ .
- Find an expression for  $x$  in terms of  $U$ ,  $k$ , and  $t$ .

#### Solution:



a Hooke's law:  $T = \frac{\lambda x}{l}$

$$T_A = \frac{2mg(l+x)}{l}, T_B = \frac{2mg(l-x)}{l}$$

$$F = ma:$$

$$T_B - T_A - mk\bar{x} = m\ddot{x}$$

$$\frac{2mg(l-x)}{l} - \frac{2mg(l+x)}{l} - mk\bar{x} = m\ddot{x}$$

$$-4\frac{mgx}{l} - mk\bar{x} = m\ddot{x}$$

$$\ddot{x} + k\dot{x} + \frac{4gx}{l} = 0$$

$$\text{or } \frac{d^2x}{dt^2} + k\frac{dx}{dt} + 4k^2x = 0$$

$$\text{where } k = \sqrt{\frac{g}{l}}$$

b Auxiliary equation:  $m^2 + km + 4k^2 = 0$

$$m = \frac{-k \pm \sqrt{(k^2 - 16k^2)}}{2}$$

$$m = \frac{-k \pm ik\sqrt{15}}{2}$$

General solution:

$$x = e^{\frac{kt}{2}} \left( A \cos k \frac{\sqrt{15}}{2} t + B \sin k \frac{\sqrt{15}}{2} t \right)$$

$$t = 0, x = 0 \Rightarrow A = 0$$

$$\dot{x} = -\frac{k}{2} e^{\frac{kt}{2}} B \sin \frac{k\sqrt{15}}{2} t + e^{\frac{kt}{2}} \frac{k\sqrt{15}}{2} B \cos \frac{k\sqrt{15}}{2} t$$

$$t = 0, \dot{x} = U \Rightarrow U = \frac{Bk\sqrt{15}}{2}$$

$$B = \frac{2U}{k\sqrt{15}}$$

$$\therefore x = \frac{U}{k\sqrt{15}} e^{\frac{kt}{2}} \sin \frac{k\sqrt{15}}{2} t$$