

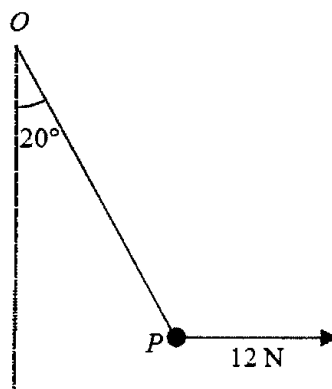
# Edexcel GCE - Mechanics M1

Thursday 7 June 2007 – Morning

Time: 1 hour 30 minutes

1.

Figure 1



A particle  $P$  is attached to one end of a light inextensible string. The other end of the string is attached to a fixed point  $O$ . A horizontal force of magnitude  $12\text{ N}$  is applied to  $P$ . The particle  $P$  is in equilibrium with the string taut and  $OP$  making an angle of  $20^\circ$  with the downward vertical, as shown in Figure 1.

Find

- (a) the tension in the string, (3)
- (b) the weight of  $P$ . (4)
- 

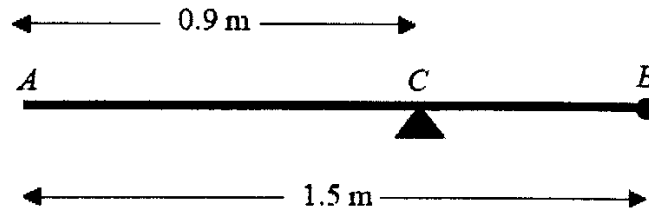
2. Two particles  $A$  and  $B$ , of mass  $0.3\text{ kg}$  and  $m\text{ kg}$  respectively, are moving in opposite directions along the same straight horizontal line so that the particles collide directly. Immediately before the collision, the speeds of  $A$  and  $B$  are  $8\text{ m s}^{-1}$  and  $4\text{ m s}^{-1}$  respectively. In the collision the direction of motion of each particle is reversed and, immediately after the collision, the speed of each particle is  $2\text{ m s}^{-1}$ .

Find

- (a) the magnitude of the impulse exerted by  $B$  on  $A$  in the collision, (3)
- (b) the value of  $m$ . (4)

3.

Figure 3



A uniform rod  $AB$  has length 1.5 m and mass 8 kg. A particle of mass  $m$  kg is attached to the rod at  $B$ . The rod is supported at the point  $C$ , where  $AC = 0.9$  m, and the system is in equilibrium with  $AB$  horizontal, as shown in Figure 2.

(a) Show that  $m = 2$ .

(4)

A particle of mass 5 kg is now attached to the rod at  $A$  and the support is moved from  $C$  to a point  $D$  of the rod. The system, including both particles, is again in equilibrium with  $AB$  horizontal.

(b) Find the distance  $AD$ .

(5)

---

4. A car is moving along a straight horizontal road. At time  $t = 0$ , the car passes a point  $A$  with speed  $25 \text{ m s}^{-1}$ . The car moves with constant speed  $25 \text{ m s}^{-1}$  until  $t = 10$  s. The car then decelerates uniformly for 8 s. At time  $t = 18$  s, the speed of the car is  $V \text{ m s}^{-1}$  and this speed is maintained until the car reaches the point  $B$  at time  $t = 30$  s.

(a) Sketch a speed–time graph to show the motion of the car from  $A$  to  $B$ .

(3)

Given that  $AB = 526$  m, find

(b) the value of  $V$ ,

(5)

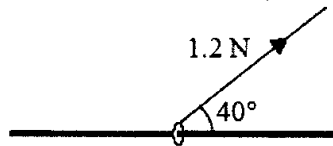
(c) the deceleration of the car between  $t = 10$  s and  $t = 18$  s.

(3)

---

5.

Figure 3



A small ring of mass  $0.25 \text{ kg}$  is threaded on a fixed rough horizontal rod. The ring is pulled upwards by a light string which makes an angle  $40^\circ$  with the horizontal, as shown in Figure 3. The string and the rod are in the same vertical plane. The tension in the string is  $1.2 \text{ N}$  and the coefficient of friction between the ring and the rod is  $\mu$ . Given that the ring is in limiting equilibrium, find

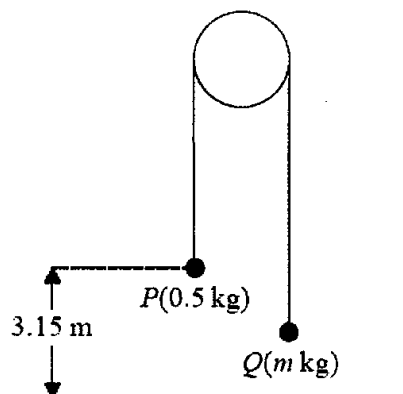
(a) the normal reaction between the ring and the rod, (4)

(b) the value of  $\mu$ . (6)

---

6.

Figure 4



Two particles  $P$  and  $Q$  have mass  $0.5 \text{ kg}$  and  $m \text{ kg}$  respectively, where  $m < 0.5$ . The particles are connected by a light inextensible string which passes over a smooth, fixed pulley. Initially  $P$  is  $3.15 \text{ m}$  above horizontal ground. The particles are released from rest with the string taut and the hanging parts of the string vertical, as shown in Figure 4. After  $P$  has been descending for  $1.5 \text{ s}$ , it strikes the ground. Particle  $P$  reaches the ground before  $Q$  has reached the pulley.

(a) Show that the acceleration of  $P$  as it descends is  $2.8 \text{ m s}^{-2}$ . (3)

(b) Find the tension in the string as  $P$  descends. (3)

(c) Show that  $m = \frac{5}{18}$ . (4)

- (d) State how you have used the information that the string is inextensible. (1)

When  $P$  strikes the ground,  $P$  does not rebound and the string becomes slack. Particle  $Q$  then moves freely under gravity, without reaching the pulley, until the string becomes taut again.

- (e) Find the time between the instant when  $P$  strikes the ground and the instant when the string becomes taut again. (6)

- 
7. A boat  $B$  is moving with constant velocity. At noon,  $B$  is at the point with position vector  $(3\mathbf{i} - 4\mathbf{j})$  km with respect to a fixed origin  $O$ . At 1430 on the same day,  $B$  is at the point with position vector  $(8\mathbf{i} + 11\mathbf{j})$  km.

- (a) Find the velocity of  $B$ , giving your answer in the form  $p\mathbf{i} + q\mathbf{j}$ . (3)

At time  $t$  hours after noon, the position vector of  $B$  is  $\mathbf{b}$  km.

- (b) Find, in terms of  $t$ , an expression for  $\mathbf{b}$ . (3)

Another boat  $C$  is also moving with constant velocity. The position vector of  $C$ ,  $\mathbf{c}$  km, at time  $t$  hours after noon, is given by

$$\mathbf{c} = (-9\mathbf{i} + 20\mathbf{j}) + t(6\mathbf{i} + \lambda\mathbf{j}),$$

where  $\lambda$  is a constant.

Given that  $C$  intercepts  $B$ ,

- (c) find the value of  $\lambda$ , (5)

- (d) show that, before  $C$  intercepts  $B$ , the boats are moving with the same speed. (3)

---

**TOTAL FOR PAPER: 75 MARKS**

**END**