



Question 1 continued

Leave
blank

Lined area for writing the answer to Question 1.

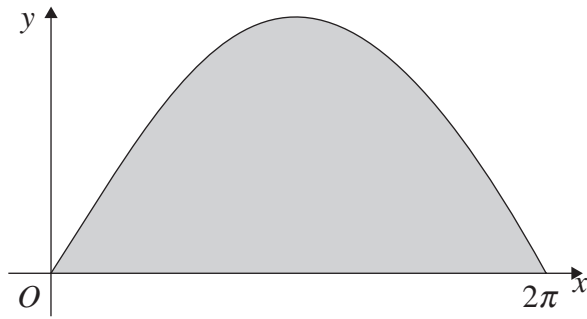
Q1

(Total 7 marks)



3.

Figure 1



The curve with equation $y = 3 \sin \frac{x}{2}$, $0 \leq x \leq 2\pi$, is shown in Figure 1. The finite region enclosed by the curve and the x -axis is shaded.

- (a) Find, by integration, the area of the shaded region. (3)

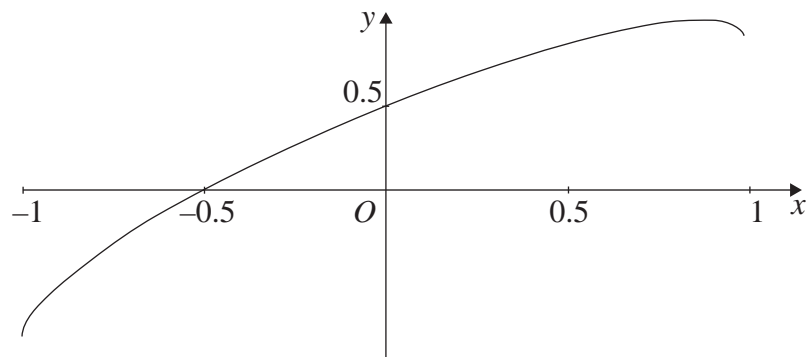
This region is rotated through 2π radians about the x -axis.

- (b) Find the volume of the solid generated. (6)



4.

Figure 2



The curve shown in Figure 2 has parametric equations

$$x = \sin t, \quad y = \sin\left(t + \frac{\pi}{6}\right), \quad -\frac{\pi}{2} < t < \frac{\pi}{2}.$$

(a) Find an equation of the tangent to the curve at the point where $t = \frac{\pi}{6}$.

(6)

(b) Show that a cartesian equation of the curve is

$$y = \frac{\sqrt{3}}{2}x + \frac{1}{2}\sqrt{1-x^2}, \quad -1 < x < 1.$$

(3)



6.

Figure 3

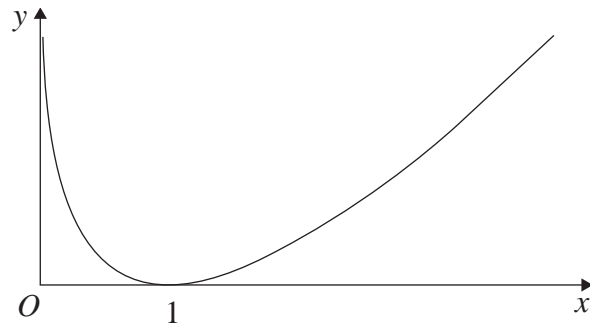


Figure 3 shows a sketch of the curve with equation $y = (x - 1) \ln x$, $x > 0$.

(a) Complete the table with the values of y corresponding to $x = 1.5$ and $x = 2.5$.

x	1	1.5	2	2.5	3
y	0		$\ln 2$		$2 \ln 3$

(1)

Given that $I = \int_1^3 (x - 1) \ln x \, dx$,

(b) use the trapezium rule

(i) with values of y at $x = 1, 2$ and 3 to find an approximate value for I to 4 significant figures,

(ii) with values of y at $x = 1, 1.5, 2, 2.5$ and 3 to find another approximate value for I to 4 significant figures.

(5)

(c) Explain, with reference to Figure 3, why an increase in the number of values improves the accuracy of the approximation.

(1)

(d) Show, by integration, that the exact value of $\int_1^3 (x - 1) \ln x \, dx$ is $\frac{3}{2} \ln 3$.

(6)



Question 6 continued

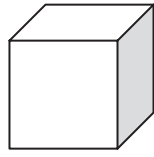
Leave
blank

Lined area for writing the answer to Question 6.



N 2 3 5 6 3 A 0 1 6 2 0

7.



At time t seconds the length of the side of a cube is x cm, the surface area of the cube is S cm², and the volume of the cube is V cm³.

The surface area of the cube is increasing at a constant rate of 8 cm² s⁻¹.

Show that

(a) $\frac{dx}{dt} = \frac{k}{x}$, where k is a constant to be found,

(4)

(b) $\frac{dV}{dt} = 2V^{\frac{1}{3}}$.

(4)

Given that $V = 8$ when $t = 0$,

(c) solve the differential equation in part (b), and find the value of t when $V = 16\sqrt{2}$.

(7)



Question 7 continued

Leave blank

Lined area for writing answers.

Q7

(Total 15 marks)

TOTAL FOR PAPER: 75 MARKS

END

