



Rewarding Learning

ADVANCED  
General Certificate of Education  
2015

---

# Mathematics

Assessment Unit M2  
*assessing*  
Module M2: Mechanics 2

[AMM21]

MONDAY 22 JUNE, AFTERNOON

---



## TIME

1 hour 30 minutes.

## INSTRUCTIONS TO CANDIDATES

Write your Centre Number and Candidate Number on the Answer Booklet provided.  
Answer **all seven** questions.  
Show clearly the full development of your answers.  
Answers should be given to three significant figures unless otherwise stated.  
You are permitted to use a graphic or a scientific calculator in this paper.

## INFORMATION FOR CANDIDATES

The total mark for this paper is 75  
Figures in brackets printed down the right-hand side of pages indicate the marks awarded to each question or part question.  
Answers should include diagrams where appropriate and marks may be awarded for them.  
Take  $g = 9.8 \text{ m s}^{-2}$ , unless specified otherwise.  
A copy of the **Mathematical Formulae and Tables booklet** is provided.  
Throughout the paper the logarithmic notation used is  $\ln z$  where it is noted that  $\ln z \equiv \log_e z$

**Answer all seven questions.**

**Show clearly the full development of your answers.**

**Answers should be given to three significant figures unless otherwise stated.**

- 1** A particle P moves so that at time  $t$  seconds, its displacement  $\mathbf{s}$  metres from a fixed point O is given by

$$\mathbf{s} = (t^2 + 2)\mathbf{i} + (t^3 - 1)\mathbf{j} + (t^2 + 2t)\mathbf{k}$$

- (i)** Show that P starts its motion on the  $\mathbf{i}$ - $\mathbf{j}$  plane. [2]

- (ii)** Find the speed of P at  $t = 2$  [4]

- (iii)** Find  $t$  when the acceleration of the particle is  $(2\mathbf{i} + 8\mathbf{j} + 2\mathbf{k}) \text{ ms}^{-2}$  [3]

- 2** A particle, P, of mass 3 kg is acted upon by two constant forces  $\mathbf{F}_1$  and  $\mathbf{F}_2$

$\mathbf{F}_1$  has magnitude 18 N and acts in the direction of the vector  $\begin{pmatrix} 4 \\ -4 \\ -7 \end{pmatrix}$

$\mathbf{F}_2$  has magnitude 6 N and acts in the direction of the vector  $\begin{pmatrix} 2 \\ 1 \\ -2 \end{pmatrix}$

- (i)** Find, in vector form, the resultant force acting on P. [4]

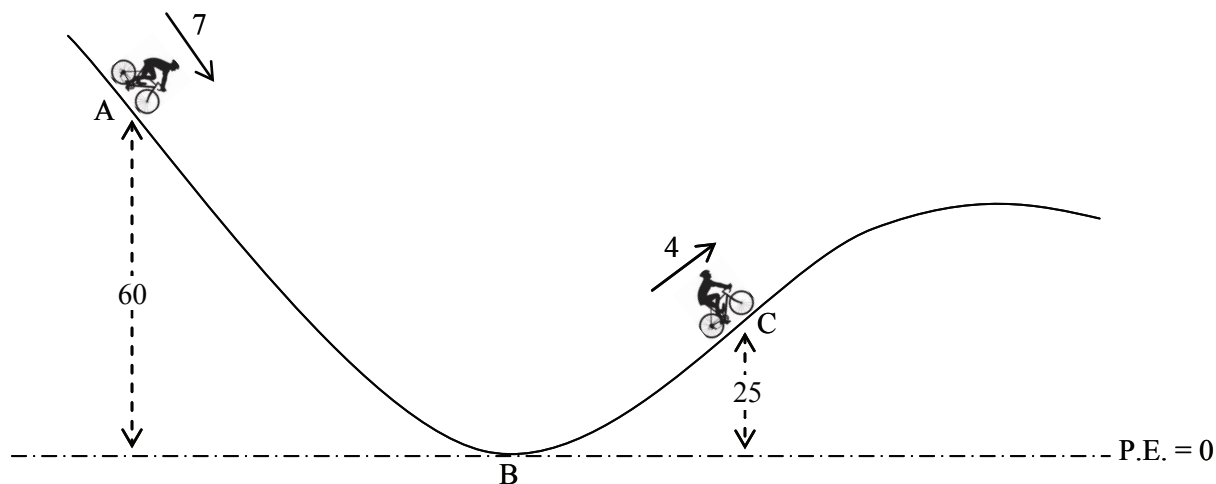
- (ii)** Hence, show that the acceleration of P is  $\begin{pmatrix} 4 \\ -2 \\ -6 \end{pmatrix} \text{ ms}^{-2}$  [2]

At time  $t = 0$  seconds, P is moving with velocity  $\begin{pmatrix} -1 \\ 3 \\ 6 \end{pmatrix} \text{ ms}^{-1}$

- (iii)** Find the velocity of P at  $t = 1$  [2]

- (iv)** Show that at  $t = 1$ , the particle is moving at right angles to its initial direction. [2]

- 3 **Fig. 1** below shows a cyclist, Sharon, moving along a cycle track ABC.  
 B is the lowest point on the track.  
 A is 60m vertically above the horizontal through B.  
 C is 25m vertically above the horizontal through B.



**Fig. 1**

Sharon and her cycle have a combined mass of 75 kg.  
 The total distance she travels along the track from A to C is 2100 m.  
 The total resistance to her motion is constant and is 14 N.  
 At A, Sharon is moving downhill at  $7 \text{ m s}^{-1}$   
 At C, Sharon is moving uphill at  $4 \text{ m s}^{-1}$   
 Take the potential energy at B to be zero.

- (i) Find the change in the kinetic energy of the cyclist between A and C. [2]
- (ii) Find the work done against resistance between A and C. [2]
- (iii) Find the work done by the cyclist between A and C. [5]

**4 In this question take  $g = 10 \text{ m s}^{-2}$**

A van of mass 2 tonnes has an engine which can produce a maximum power of 48 kW. The total resistance to the motion of the van can be modelled by  $(a + bv)$  newtons, where  $a$  and  $b$  are constants and  $v$  is the speed of the van in  $\text{m s}^{-1}$

The maximum speed of the van on a straight horizontal road is  $50 \text{ m s}^{-1}$

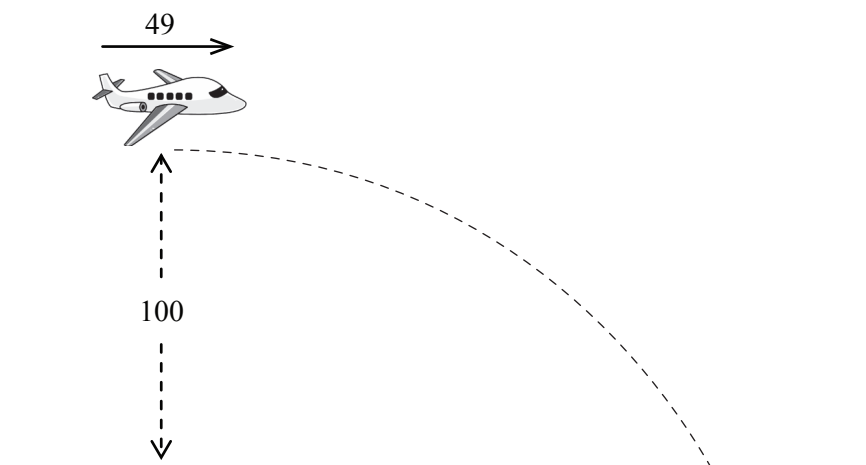
**(i)** Find an equation connecting  $a$  and  $b$ . [4]

The maximum speed of the van up a hill inclined at  $\sin^{-1}\left(\frac{1}{25}\right)$  to the horizontal is  $30 \text{ m s}^{-1}$

**(ii)** Find a second equation connecting  $a$  and  $b$  and hence show  $a = 560$  and  $b = 8$  [5]

**(iii)** Find the acceleration of the van when it is travelling at  $40 \text{ m s}^{-1}$  on a straight horizontal road. [3]

- 5 A plane is travelling horizontally at  $49 \text{ m s}^{-1}$  at a height of  $100 \text{ m}$  vertically above the ground, as shown in **Fig. 2** below.  
The plane drops a food package to people on the ground.



**Fig. 2**

Model the package as a particle.

- (i) Find the horizontal distance travelled by the package just before it hits the ground. [4]
- (ii) Find the speed at which the package hits the ground. [5]
- (iii) State one assumption you have made in answering this question. [1]

- 6** A ship of mass  $M$  kg is sailing in a straight line between two ports.  
When the speed of the ship is  $v$   $\text{ms}^{-1}$ , the total resistance to its motion can be modelled by  $(v^2 + k^2)$  newtons, where  $k$  is a constant.  
The engines of the ship exert a constant tractive force of  $5k^2$  newtons.

**(i)** Show that the maximum speed of the ship is  $2k$   $\text{ms}^{-1}$  [2]

As the ship passes a point P at its maximum speed, the engines are suddenly put into maximum reverse thrust of  $5k^2$  N.  
The total resistance to motion remains as before.

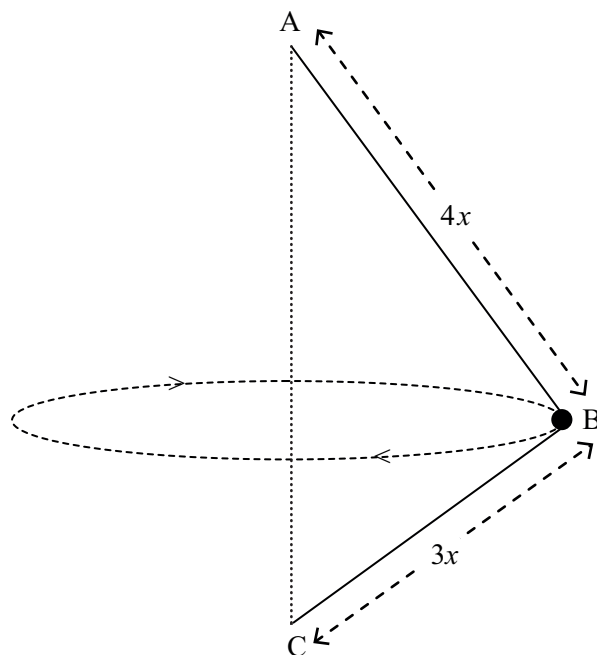
**(ii)** Show that the motion of the ship can be modelled by the differential equation

$$v^2 + 6k^2 = -Mv \frac{dv}{dx}$$

where  $x$  is the distance, in metres, after passing P. [3]

**(iii)** Show that the ship will momentarily stop when  $x = \frac{M}{2} \ln \frac{5}{3}$  [8]

- 7 **Fig. 3** below shows a bead B, of mass  $m$  kg, fastened to a point on a light inextensible string of length  $7x$  metres. The ends of the string are fastened to fixed points A and C, A being vertically above C.  $\angle ABC = 90^\circ$ ,  $AB = 4x$  and  $BC = 3x$ .



**Fig. 3**

B travels in a horizontal circle with constant angular velocity  $\omega$  rad  $s^{-1}$ , where  $\omega = \sqrt{\frac{5g}{6x}}$ . The string is taut.

- (i) Draw a diagram showing the external forces acting on B. [1]
- (ii) Show that B travels in a circular path of radius  $\frac{12x}{5}$  metres. [2]
- (iii) Find, in terms of  $m$  and  $g$ , the tensions in the two parts of the string. [9]

---

**THIS IS THE END OF THE QUESTION PAPER**

---

