

Pure Core 1 Past Paper Questions Pack A

Taken from MAME

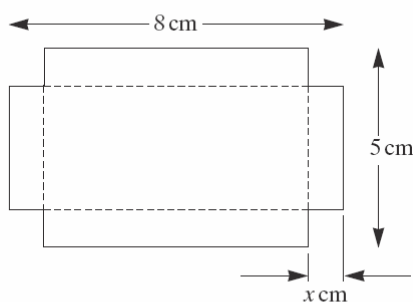
January 2001

- 1 Given that $f(x) = x^3 - 4x^2 - x + 4$,
- (a) find $f(1)$ and $f(2)$, (2 marks)
- (b) factorise $f(x)$ into the product of three linear factors. (3 marks)

- 2 (a) Express $x^2 - 6x + 7$ in the form $(x + a)^2 + b$, finding the values of a and b . (2 marks)
- (b) Hence, or otherwise, find the range of values of x for which

$$x^2 - 6x + 7 < 0. \quad (3 \text{ marks})$$

- 5 Small trays are to be made from rectangular pieces of card. Each piece of card is 8 cm by 5 cm and the tray is formed by removing squares of side x cm from each corner and folding the remaining card along the dashed lines, as shown in the diagram, to form an open-topped box.

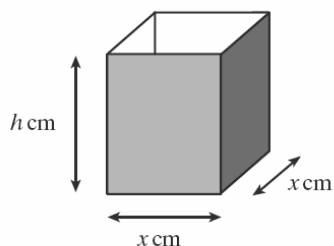


- (a) Explain why $0 < x < 2.5$. (1 mark)
- (b) Show that the volume, $V \text{ cm}^3$, of a tray is given by
- $$V = 4x^3 - 26x^2 + 40x. \quad (3 \text{ marks})$$
- (c) Find the value of x for which $\frac{dV}{dx} = 0$. (5 marks)
- (d) Calculate the greatest possible volume of a tray. (1 mark)

June 2001

- 3 (a) Express $x^2 + 4x - 5$ in the form $(x + a)^2 + b$, finding the values of the constants a and b . (2 marks)
- (b) Find the values of x for which $x^2 + 4x - 5 > 0$. (3 marks)
- 4 The cubic polynomial $x^3 + ax^2 + bx + 4$, where a and b are constants, has factors $x - 2$ and $x + 1$. Use the factor theorem to find the values of a and b . (6 marks)

- 6 An open-topped box has height h cm and a square base of side x cm.



The box has capacity V cm³. The area of its **external** surface, consisting of its horizontal base and four vertical faces, is A cm².

- (a) Find expressions for V and A in terms of x and h . (3 marks)
- (b) It is given that $A = 3000$.
- (i) Show that $V = 750x - \frac{1}{4}x^3$. (2 marks)
- (ii) Find the positive value of x for which $\frac{dV}{dx} = 0$, giving your answer in surd form. (3 marks)
- (iii) Hence find the maximum possible value of V , giving your answer in the form $p\sqrt{10}$, where p is an integer. (2 marks)
 [You do not need to show that your answer is a maximum.]

January 2002

- 3 Solve the simultaneous equations

$$\begin{aligned} y &= 2 - x \\ x^2 + 2xy &= 3. \end{aligned} \quad (5 \text{ marks})$$

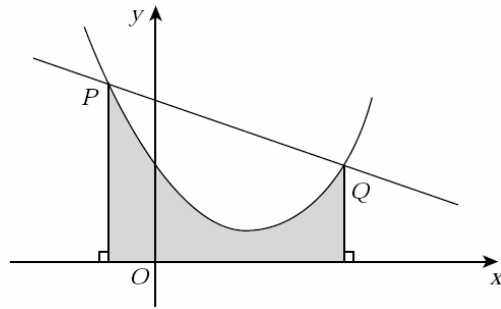
- 4 The size of a population, P , of birds on an island is modelled by

$$P = 59 + 117t + 57t^2 - t^3,$$

where t is the time in years after 1970.

- (a) Find $\frac{dP}{dt}$. (2 marks)
- (b) (i) Find the positive value of t for which P has a stationary value. (3 marks)
 (ii) Determine whether this stationary value is a maximum or a minimum. (2 marks)
- (c) (i) State the year when the model predicts that the population will reach its maximum value. (1 mark)
 (ii) Determine what the model predicts will happen in the year 2029. (1 mark)

- 8 The diagram shows the curve $y = x^2 - 4x + 6$, the points $P(-1, 11)$ and $Q(4, 6)$ and the line PQ .



- (a) Show that the length of PQ is $5\sqrt{2}$. (3 marks)
- (b) Find the equation of the tangent to the curve at Q in the form $y = mx + c$. (6 marks)
- (c) Find the area of the shaded region in the diagram. (5 marks)

June 2002

- 1 Given that $f(x) = x^3 + 4x^2 + x - 6$:

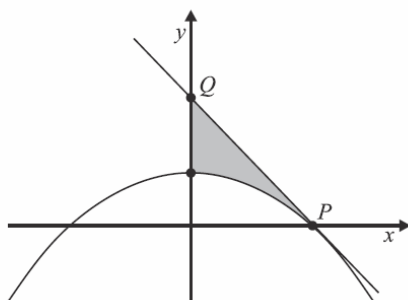
- (a) find $f(1)$ and $f(-1)$; (2 marks)
- (b) factorise $f(x)$ into the product of three linear factors. (4 marks)

- 3 Find the values of x and y that satisfy the simultaneous equations

$$\begin{aligned} y &= 2 - x^2 \\ x + 2y &= 1 \end{aligned} \quad (5 \text{ marks})$$

- 5 (a) (i) Solve $2x^2 + 8x + 7 = 0$, giving your answers in surd form. (2 marks)
- (ii) Hence solve $2x^2 + 8x + 7 > 0$. (2 marks)
- (b) Express $2x^2 + 8x + 7$ in the form $A(x + B)^2 + C$, where A , B and C are constants. (3 marks)
- (c) (i) State the minimum value of $2x^2 + 8x + 7$. (1 mark)
- (ii) State the value of x which gives this minimum value. (1 mark)

- 7 The diagram shows the graph of $y = 12 - 3x^2$ and the tangent to the curve at the point $P(2, 0)$. The region enclosed by the tangent, the curve and the y -axis is shaded.



- (a) Find $\int_0^2 (12 - 3x^2) dx$. (3 marks)
- (b) (i) Find the gradient of the curve $y = 12 - 3x^2$ at the point P . (2 marks)
(ii) Find the coordinates of the point Q where the tangent at P crosses the y -axis. (2 marks)
- (c) Find the area of the shaded region. (2 marks)

November 2002

- 3 It is given that

$$f(x) = x^3 + 3x^2 - 6x - 8.$$

- (a) Find the value of $f(2)$. (1 mark)
- (b) Use the Factor Theorem to write down a factor of $f(x)$. (1 mark)
- (c) Hence express $f(x)$ as a product of three linear factors. (4 marks)

- 5 (a) Solve the equation

$$2x^2 + 32x + 119 = 0.$$

Write your answers in the form $p + q\sqrt{2}$, where p and q are rational numbers. (3 marks)

- (b) (i) Express

$$2x^2 + 32x + 119$$

in the form

$$2(x + m)^2 + n,$$

where m and n are integers. (2 marks)

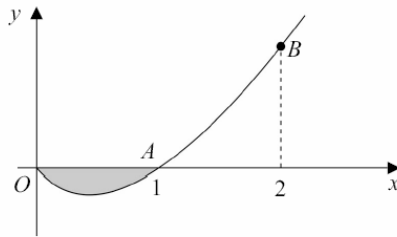
- (ii) Hence write down the minimum value of

$$2x^2 + 32x + 119. \quad (1 \text{ mark})$$

7 The diagram shows the graph of

$$y = x^3 - x, \quad x \geq 0.$$

The points on the graph for which $x = 1$ and $x = 2$ are labelled A and B , respectively.



- (a) Find the y -coordinate of B and hence find the equation of the straight line AB , giving your answer in the form

$$ax + by + c = 0. \quad (4 \text{ marks})$$

- (b) Find, by integration, the area of the shaded region. (5 marks)

8 An office worker can leave home at any time between 6.00 am and 10.00 am each morning. When he leaves home x hours after 6.00 am ($0 \leq x \leq 4$), his journey time to the office is y minutes, where

$$y = x^4 - 8x^3 + 16x^2 + 8.$$

- (a) Find $\frac{dy}{dx}$. (3 marks)
- (b) Find the **three** values of x for which $\frac{dy}{dx} = 0$. (4 marks)
- (c) Show that y has a maximum value when $x = 2$. (3 marks)
- (d) Find the time at which the office worker arrives at the office on a day when his journey time is a maximum. (2 marks)

January 2003

3 The numbers x and y satisfy the simultaneous equations

$$\begin{aligned} y &= 2x + 1 \\ xy &= 3 \end{aligned}$$

- (a) Show that

$$2x^2 + x - 3 = 0. \quad (2 \text{ marks})$$

- (b) Hence solve the simultaneous equations. (3 marks)

5 The line

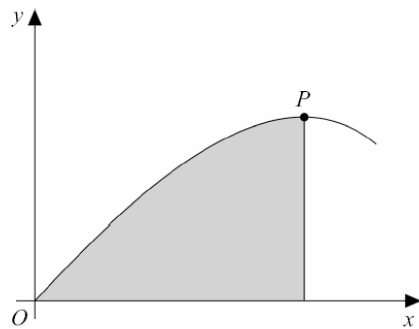
$$2x - y + 6 = 0$$

intersects the coordinate axes at two points, $A(a, 0)$ and $B(0, b)$.

- (a) Find the values of a and b . (2 marks)
- (b) Find the coordinates of M , the midpoint of AB . (2 marks)
- (c) Find the equation of the line through M perpendicular to AB , giving your answer in the form $y = mx + c$. (4 marks)

7 The diagram shows a part of the graph of

$$y = x - 2x^4.$$



- (a) (i) Find $\frac{dy}{dx}$. (2 marks)
- (ii) Show that the x -coordinate of the stationary point P is $\frac{1}{2}$. (2 marks)
- (iii) Find the y -coordinate of P . (1 mark)
- (b) (i) Find $\int (x - 2x^4) dx$. (2 marks)
- (ii) Hence find the area of the shaded region. (3 marks)
- 8 (a) Express $\frac{\sqrt{2} + 1}{\sqrt{2} - 1}$ in the form $a\sqrt{2} + b$, where a and b are integers. (4 marks)
- (b) Solve the inequality

$$\sqrt{2}(x - \sqrt{2}) < x + 2\sqrt{2}. \quad (3 \text{ marks})$$

June 2003

- 2 The function f is defined for all x by

$$f(x) = x^2 + 6x + 7.$$

- (a) Express $f(x)$ in the form

$$(x + A)^2 + B,$$

where A and B are constants.

(2 marks)

- (b) Hence, or otherwise, solve the equation

$$f(x) = 0,$$

giving your answers in surd form.

(3 marks)

- 4 The point A has coordinates $(2, 3)$ and O is the origin.

- (a) Write down the gradient of OA and hence find the equation of the line OA . (2 marks)

- (b) Show that the line which has equation

$$4x + 6y = 13:$$

- (i) is perpendicular to OA ;

(2 marks)

- (ii) passes through the midpoint of OA .

(3 marks)

- 6 (a) Express each of the following as a power of 3:

(i) $\sqrt{3}$;

(1 mark)

(ii) $\frac{3^x}{\sqrt{3}}$.

(1 mark)

- (b) Hence, or otherwise, solve the equation

$$\frac{3^x}{\sqrt{3}} = \frac{1}{3}.$$

(3 marks)

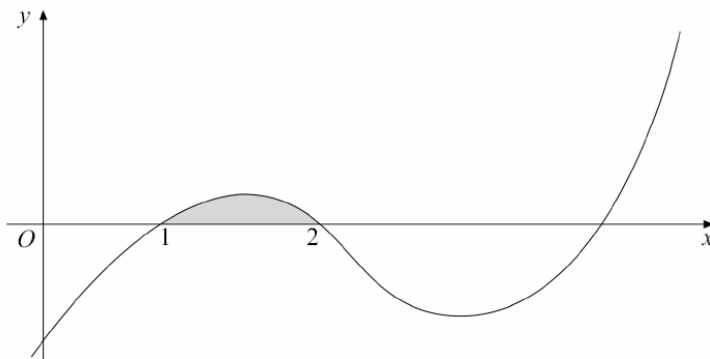
8 The function f is defined for all values of x by

$$f(x) = x^3 - 7x^2 + 14x - 8.$$

It is given that $f(1) = 0$ and $f(2) = 0$.

- (a) Find the values of $f(3)$ and $f(4)$. (2 marks)
- (b) Write $f(x)$ as a product of **three** linear factors. (2 marks)
- (c) The diagram shows the graph of

$$y = x^3 - 7x^2 + 14x - 8.$$



- (i) Find $\frac{dy}{dx}$. (3 marks)
- (ii) State, giving a reason, whether the function f is increasing or decreasing at the point where $x = 3$. (2 marks)
- (iii) Find $\int (x^3 - 7x^2 + 14x - 8) dx$. (3 marks)
- (iv) Hence find the area of the shaded region enclosed by the graph of $y = f(x)$, for $1 \leq x \leq 2$, and the x -axis. (3 marks)

November 2003

2 (a) Solve the equation

$$2x^2 - 12x + 17 = 0,$$

giving your answers in surd form. (3 marks)

(b) Show that the equation

$$2x^2 - 12x + 21 = 0$$

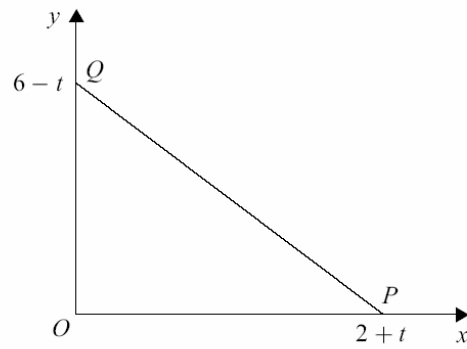
has no real roots. (2 marks)

(c) Find the value of p for which the equation

$$2x^2 - 12x + p = 0$$

has equal roots. (2 marks)

- 4 The diagram shows the points $O(0,0)$, $P(2+t,0)$ and $Q(0,6-t)$, where $0 \leq t \leq 6$.



- (a) The area of the triangle OPQ is A . Show that

$$A = 6 + 2t - \frac{1}{2}t^2. \quad (2 \text{ marks})$$

- (b) (i) Find $\frac{dA}{dt}$. (2 marks)

- (ii) Show that A has a stationary value when $t = 2$. (1 mark)

- (c) In the case when $t = 2$, find:

- (i) the coordinates of P and Q ; (1 mark)

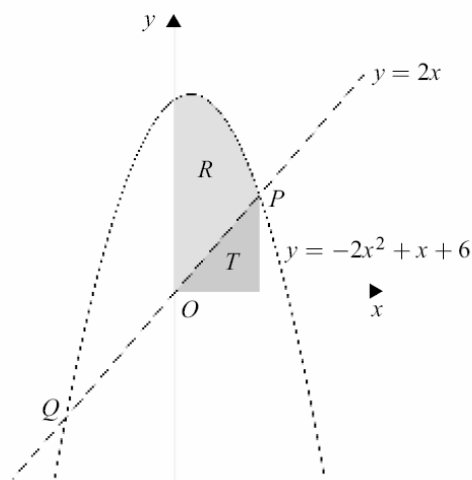
- (ii) the gradient of the line PQ ; (1 mark)

- (iii) the equation of the line PQ . (2 marks)

7 The diagram shows the graphs of

$$y = 2x \text{ and } y = -2x^2 + x + 6,$$

intersecting at two points P and Q .



- (a) Show that P has x -coordinate $\frac{3}{2}$ and find the x -coordinate of Q . (4 marks)
- (b) Calculate the area of the shaded triangle T . (2 marks)
- (c) (i) Find $\int (-2x^2 + x + 6) dx$. (3 marks)
- (ii) Hence find the area of the shaded region R . (3 marks)

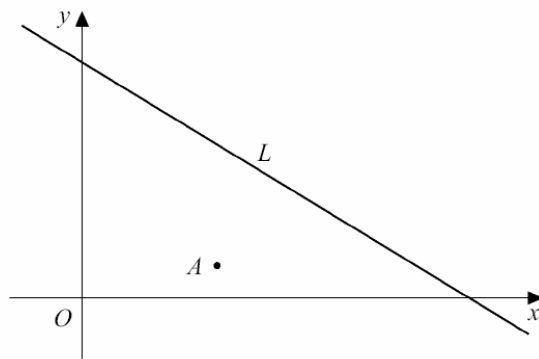
January 2004

3 It is given that

$$f(x) = x^3 + 4x^2 - 3x - 18.$$

- (a) Find the value of $f(2)$. (1 mark)
- (b) Use the Factor Theorem to write down a factor of $f(x)$. (1 mark)
- (c) Hence express $f(x)$ as a product of three linear factors. (4 marks)

- 5 The diagram shows a line L which represents a pipeline, and a point A which is to be connected to the pipeline by the shortest possible connection.



The equation of the line L is

$$2x + 3y = 24,$$

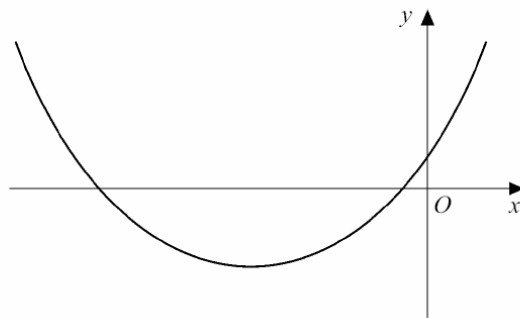
and A is the point $(4, 1)$.

- (a) Find the gradient of the line L . *(2 marks)*
- (b) Hence write down the gradient of a line perpendicular to L . *(1 mark)*
- (c) Show that the line through A perpendicular to L has equation

$$3x - 2y = 10. \quad \text{span style="float: right;">*(2 marks)*$$

- (d) Hence calculate the coordinates of the point of intersection of the two lines. *(3 marks)*
- (e) Find the length of the shortest possible connection from A to the pipeline. *(2 marks)*

- 7 The diagram shows the graph of $y = f(x)$, where $f(x) = x^2 + 6x + 1$.



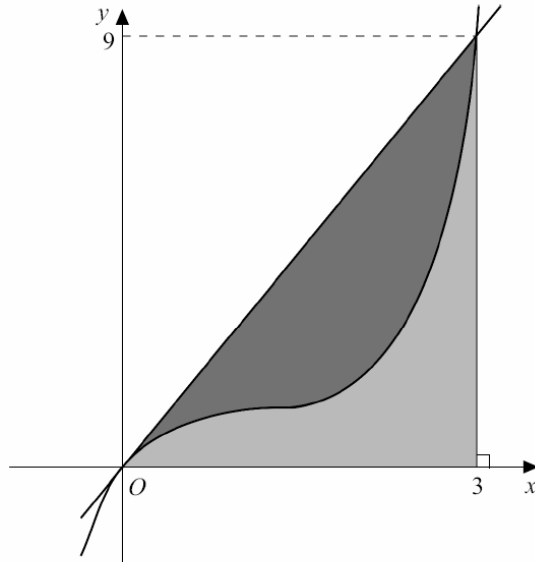
- (a) Express $f(x)$ in the form $(x + m)^2 + n$, where m and n are integers. *(2 marks)*
- (b) Solve the equation $f(x) = 0$, giving your answers in the form $p + q\sqrt{2}$, where p and q are integers. *(3 marks)*
- (c) Solve the inequality $f(x) < 0$. *(1 mark)*

8 The diagram shows the straight line

$$y = 3x$$

and the curve

$$y = x^3 - 3x^2 + 3x.$$



- (a) (i) Differentiate $x^3 - 3x^2 + 3x$. (2 marks)
- (ii) Find the coordinates of the stationary point on the curve
- $$y = x^3 - 3x^2 + 3x. \quad (3 \text{ marks})$$
- (b) (i) Find $\int (x^3 - 3x^2 + 3x) dx$. (3 marks)
- (ii) Show that the areas of the two shaded regions are equal. (3 marks)

June 2004

1 The numbers x and y satisfy the simultaneous equations

$$2x - y = 1$$

$$x^2 + y = 2.$$

(a) Show that

$$x^2 + 2x - 3 = 0. \quad (1 \text{ mark})$$

(b) Hence solve the simultaneous equations. (3 marks)

5 (a) Simplify the expression $(\sqrt{3} - \sqrt{2})(\sqrt{3} + \sqrt{2})$. (1 mark)

(b) It is given that

$$k = \frac{\sqrt{3} - \sqrt{2}}{\sqrt{3} + \sqrt{2}}.$$

(i) Express k in the form $p + q\sqrt{6}$, where p and q are integers. (3 marks)

(ii) Express $\frac{1}{k}$ in the form $r + s\sqrt{6}$, where r and s are integers. (2 marks)

6 A curve is defined by

$$y = x^3 - 3x^2 + 6x.$$

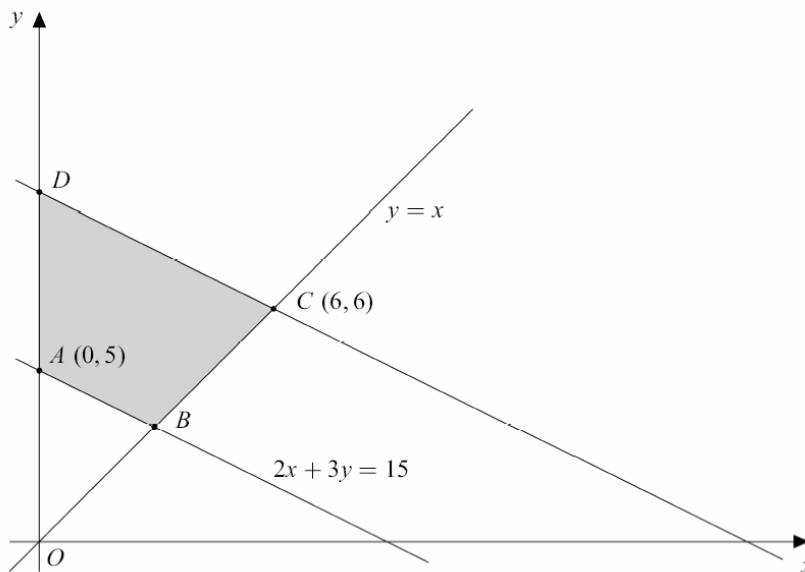
(a) (i) Find $\int (x^3 - 3x^2 + 6x) dx$. (2 marks)

(ii) Hence find $\int_1^3 (x^3 - 3x^2 + 6x) dx$. (3 marks)

(b) (i) Find $\frac{dy}{dx}$. (2 marks)

(ii) Show that y is an increasing function of x for all values of x . (3 marks)

7 The diagram shows a trapezium $ABCD$. The vertices A and C have coordinates $(0, 5)$ and $(6, 6)$ respectively. The sides AB and BC have equations $2x + 3y = 15$ and $y = x$ respectively.



Find:

(a) the coordinates of B ; (2 marks)

(b) the equation of the side CD , which is parallel to AB ; (3 marks)

(c) the coordinates of D , which lies on the y -axis; (1 mark)

(d) the area of $ABCD$. (4 marks)