

Centre Number						Candidate Number				
Surname										
Other Names										
Candidate Signature										

For Examiner's Use	
Examiner's Initials	
Question	Mark
1	
2	
3	
4	
5	
6	
7	
8	
TOTAL	



General Certificate of Education  
Advanced Level Examination  
June 2014

# Mathematics

# MD02

## Unit Decision 2

Tuesday 24 June 2014 9.00 am to 10.30 am

**For this paper you must have:**

- the blue AQA booklet of formulae and statistical tables.

You may use a graphics calculator.

### Time allowed

- 1 hour 30 minutes

### Instructions

- Use black ink or black ball-point pen. Pencil should only be used for drawing.
- Fill in the boxes at the top of this page.
- Answer **all** questions.
- Write the question part reference (eg (a), (b)(i) etc) in the left-hand margin.
- You must answer each question in the space provided for that question. If you require extra space, use an AQA supplementary answer book; do **not** use the space provided for a different question.
- Do not write outside the box around each page.
- Show all necessary working; otherwise marks for method may be lost.
- Do all rough work in this book. Cross through any work that you do not want to be marked.
- The **final** answer to questions requiring the use of calculators should be given to three significant figures, unless stated otherwise.

### Information

- The marks for questions are shown in brackets.
- The maximum mark for this paper is 75.

### Advice

- You do not necessarily need to use all the space provided.



J U N 1 4 M D O 2 0 1

Answer **all** questions.

Answer each question in the space provided for that question.

- 1** A major project has been divided into a number of tasks, as shown in the table. The minimum time required to complete each task is also shown.

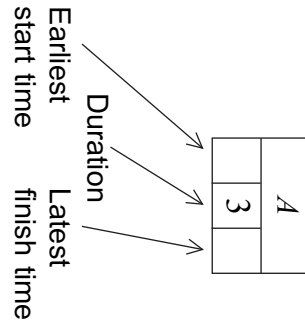
Activity	Immediate predecessor	Duration (hours)
<i>A</i>	–	3
<i>B</i>	<i>A</i>	3
<i>C</i>	<i>A</i>	4
<i>D</i>	<i>B, C</i>	6
<i>E</i>	<i>B, C</i>	5
<i>F</i>	<i>C</i>	2
<i>G</i>	<i>C</i>	1
<i>H</i>	<i>A</i>	15
<i>I</i>	<i>D, E</i>	4
<i>J</i>	<i>F</i>	6
<i>K</i>	<i>G</i>	10
<i>L</i>	<i>H, I, J, K</i>	1

- (a) On the page opposite, construct an activity network for the project. (Activity *A* has already been drawn.) **[3 marks]**
- (b) Find the earliest start time for each activity. **[2 marks]**
- (c) Find the latest finish time for each activity. **[2 marks]**
- (d) List the critical activities. **[2 marks]**

QUESTION  
PART  
REFERENCE

**Answer space for question 1**



**Answer space for question 1****Turn over ►**

QUESTION  
PART  
REFERENCE

**Answer space for question 1**

A large rectangular area with horizontal dotted lines for writing an answer.



QUESTION  
PART  
REFERENCE

**Answer space for question 1**

A large rectangular area containing horizontal dotted lines for writing an answer.

**Turn over ►**



2 Alex and Roberto play a zero-sum game. The game is represented by the following pay-off matrix for Alex.

		Roberto			
		D	E	F	G
Alex	Strategy	5	-4	-1	1
	A	4	3	0	1
	B	-3	0	-5	-2
C					

(a) Show that this game has a stable solution and state the play-safe strategy for each player.

[4 marks]

(b) List any saddle points.

[1 mark]

QUESTION  
PART  
REFERENCE

Answer space for question 2



QUESTION  
PART  
REFERENCE

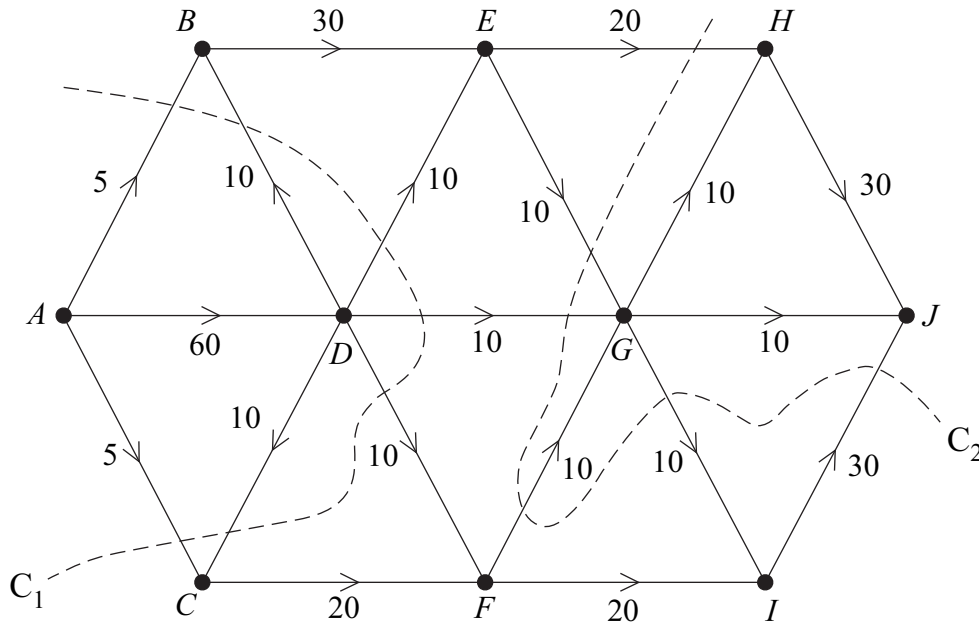
**Answer space for question 2**

A large rectangular area with horizontal dotted lines for writing an answer.



3

The diagram below shows a network of pipes with source  $A$  and sink  $J$ . The capacity of each pipe is given by the number on each edge.



(a) Find the values of the cuts  $C_1$  and  $C_2$ . [2 marks]

(b) Find by inspection a flow of 60 units, with flows of 25, 10 and 25 along  $HJ$ ,  $GJ$  and  $IJ$  respectively. Illustrate your answer on **Figure 1**. [2 marks]

(c) (i) On a certain day the section  $EH$  is blocked, as shown on **Figure 2**.  
Find, by inspection or otherwise, the maximum flow on this day and illustrate your answer on **Figure 2**. [3 marks]

(ii) Show that the flow obtained in part (c)(i) is maximal. [2 marks]

QUESTION  
PART  
REFERENCE

Answer space for question 3

.....

.....

.....

.....

.....

.....

.....

.....

.....

.....



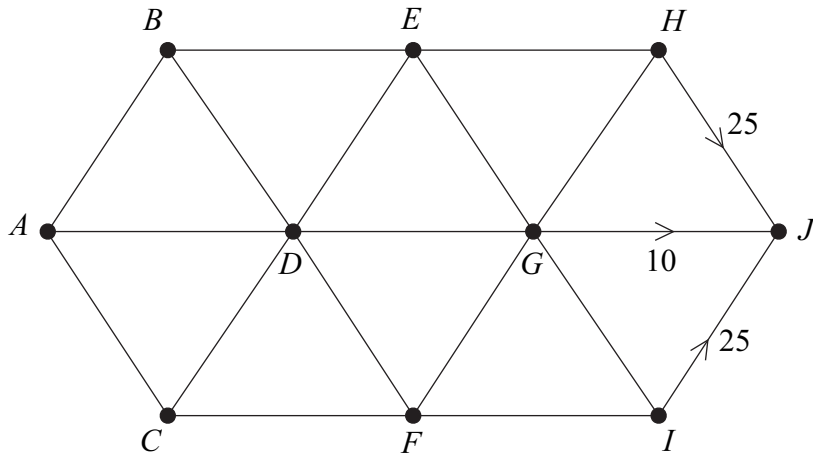


QUESTION PART REFERENCE

Answer space for question 3

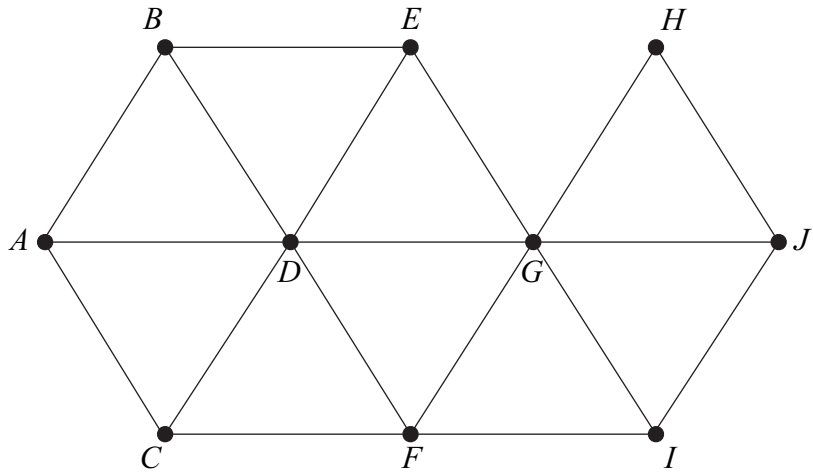
(b)

Figure 1



(c)

Figure 2



Maximum flow = \_\_\_\_\_

.....

.....

.....

.....

.....

.....

.....

.....

.....

.....



Turn over ►

QUESTION  
PART  
REFERENCE

**Answer space for question 3**

A large rectangular area with horizontal dotted lines for writing an answer.



QUESTION  
PART  
REFERENCE

**Answer space for question 3**

A large rectangular area with horizontal dotted lines for writing the answer to question 3.

**Turn over ►**





QUESTION  
PART  
REFERENCE

**Answer space for question 4**

A large rectangular area with horizontal dotted lines for writing an answer.

**Turn over ►**





QUESTION  
PART  
REFERENCE

**Answer space for question 5**

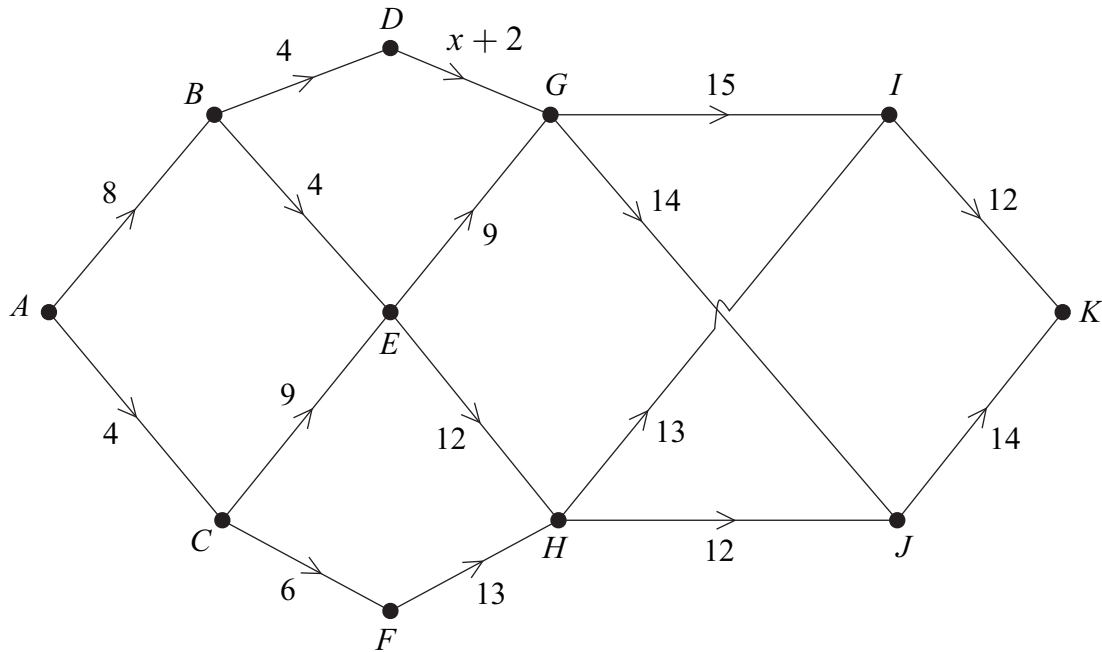
A large rectangular area with horizontal dotted lines for writing the answer to question 5.



6

The network below has 11 vertices and 16 edges connecting some pairs of vertices. The numbers on the edges are their weights. The weight of the edge  $DG$  is given in terms of  $x$ .

There are three routes from  $A$  to  $K$  that have the same minimum total weight.



Working backwards from  $K$ , use dynamic programming, to find:

- (a) the minimum total weight from  $A$  to  $K$ ;
- (b) the value of  $x$ ;
- (c) the three routes corresponding to the minimum total weight.

You must complete the table opposite as your solution.

[12 marks]

QUESTION  
PART  
REFERENCE

Answer space for question 6

.....

.....

.....

.....

.....

.....

.....

.....

.....

.....







QUESTION  
PART  
REFERENCE

**Answer space for question 6**

A large rectangular area containing horizontal dotted lines for writing an answer.



QUESTION  
PART  
REFERENCE

**Answer space for question 6**

A large rectangular area with horizontal dotted lines for writing an answer.

**Turn over ►**





QUESTION  
PART  
REFERENCE

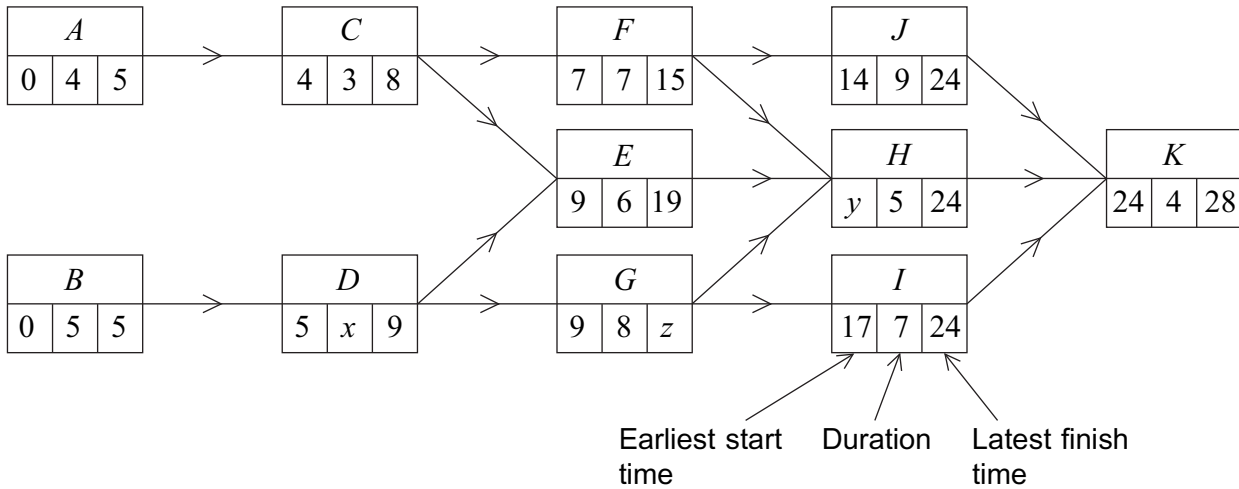
**Answer space for question 7**

A large rectangular area with horizontal dotted lines for writing an answer.

**Turn over ►**



- 8 An activity diagram for a project is shown below. The duration of each activity is given in weeks. The earliest start time and the latest finish time for each activity are shown on the diagram.



- (a) Find the values of  $x$ ,  $y$  and  $z$ .

[2 marks]

- (b) State the critical path.

[1 mark]

- (c) Some of the activities can be speeded up at an additional cost. The following table lists the activities that can be speeded up together with the minimum possible duration of these activities. The table also shows the additional cost of reducing the duration of each of these activities by one week.

Activity	Additional cost per week (£)	Minimum completion time (weeks)
<i>E</i>	8000	1
<i>F</i>	7000	4
<i>G</i>	6000	5

The company wishes to complete the project as soon as possible.

- Find which activities should be speeded up. For **each** such activity, state, with justification, the reduction in the number of weeks.
- Hence state the revised minimum time for the completion of the whole project.
- Calculate the total additional cost that the company would incur in meeting this revised completion time.

[7 marks]



QUESTION  
PART  
REFERENCE

**Answer space for question 8**

A large rectangular area with horizontal dotted lines for writing an answer.



