

Candidate forename		Candidate surname	
-----------------------	--	----------------------	--

Centre number						Candidate number				
------------------	--	--	--	--	--	---------------------	--	--	--	--

**OXFORD CAMBRIDGE AND RSA EXAMINATIONS
AS GCE**

G001/01

HOME ECONOMICS

Food, Nutrition and Health

Society and Health

TUESDAY 10 JANUARY 2012: Afternoon

DURATION: 1 hour 30 minutes

SUITABLE FOR VISUALLY IMPAIRED CANDIDATES

Candidates answer on the Question Paper.

OCR SUPPLIED MATERIALS:

None

OTHER MATERIALS REQUIRED:

None

READ INSTRUCTIONS OVERLEAF

INSTRUCTIONS TO CANDIDATES

- Write your name, centre number and candidate number in the boxes on the first page. Please write clearly and in capital letters.
- Use black ink. HB pencil may be used for graphs and diagrams only.
- Read each question carefully. Make sure you know what you have to do before starting your answer.
- Write your answer to each question in the space provided. Additional paper may be used if necessary but you must clearly show your candidate number, centre number and question number(s).
- There are TWO sections in this paper.
- **SECTION A 25 MARKS**
- Answer Question 1.
- **SECTION B 50 MARKS.**
- Answer TWO questions only.

INFORMATION FOR CANDIDATES

- The number of marks is given in brackets [] at the end of each question or part question.
- The total number of marks for this paper is 75.
- You will be awarded marks for the quality of written communication in your answers to the questions in Section B.

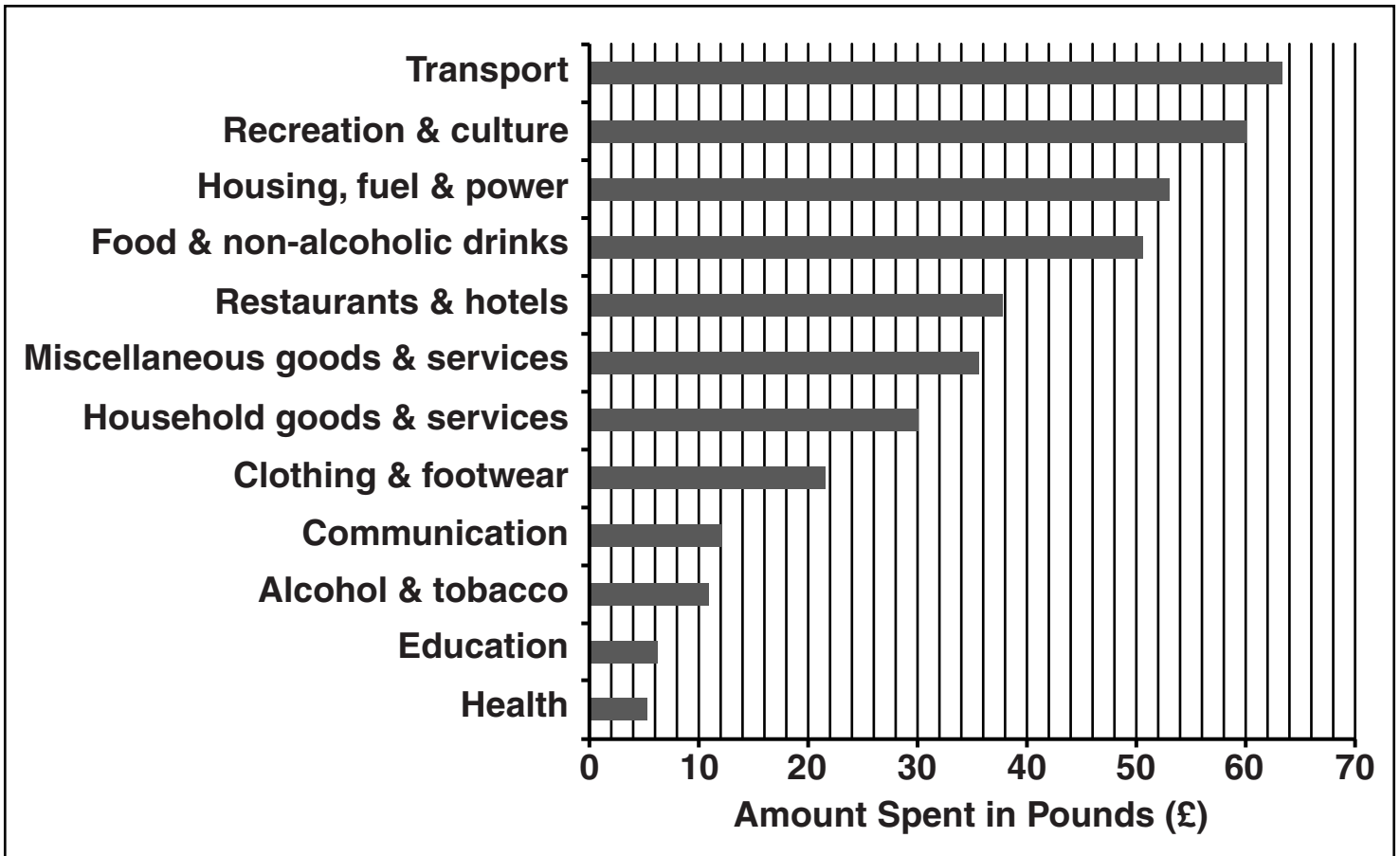
BLANK PAGE

SECTION A

Answer ALL questions.

1 The data below shows:

Total weekly household spend for 2008



Source adapted from Living Costs and Food Survey,
Office for National Statistics

Using the data:

(a) (i) State the amount spent on recreation and culture. [1]

(ii) State the largest household expense. [1]

(iii) State the amount spent on household goods and services. [1]

(b) (i) What is meant by the term Type 2 diabetes? [1]

(ii) State ONE reason why the incidence of Type 2 diabetes has increased. [1]

(c) Identify and explain TWO dietary changes which are recommended for people with Type 2 diabetes. [2; 2]

1 _____

2 _____

(d) Describe TWO government initiatives that aim to encourage us to make healthier choices. [2; 2]

1 _____

2 _____

(e) Explain TWO support services available for the unemployed. [2; 2]

1 _____

2 _____

[4]

(f) Explain TWO different reasons how each of the following factors can affect the standard of living for households.

Geographical location of housing [2; 2]

1 _____

2 _____

The number of people living in a household [2; 2]

1 _____

2 _____

SECTION A TOTAL [25]


SECTION B


Answer TWO questions only.


The quality of written communication will be assessed in your answers to the questions in Section B.

- 2 (a) Describe factors that may affect current patterns of employment. [10]**
- (b) Explain possible effects of unemployment on families. [15]**
- 3 (a) Explain the advantages AND disadvantages of renting accommodation. [10]**
- (b) Describe how housing design can be adapted to meet the changing needs of different individuals and household groups. [15]**
- 4 (a) Explain the purpose of health education policies to individuals and society. [10]**
- (b) Describe the role of private, statutory AND voluntary services in the provision of health care. [15]**

SECTION B TOTAL [50]









BLANK PAGE



Copyright Information

OCR is committed to seeking permission to reproduce all third-party content that it uses in its assessment materials. OCR has attempted to identify and contact all copyright holders whose work is used in this paper. To avoid the issue of disclosure of answer-related information to candidates, all copyright acknowledgements are reproduced in the OCR Copyright Acknowledgements Booklet. This is produced for each series of examinations and is freely available to download from our public website (www.ocr.org.uk) after the live examination series.

If OCR has unwittingly failed to correctly acknowledge or clear any third-party content in this assessment material, OCR will be happy to correct its mistake at the earliest possible opportunity.

For queries or further information please contact the Copyright Team, First Floor, 9 Hills Road, Cambridge CB2 1GE.

OCR is part of the Cambridge Assessment Group; Cambridge Assessment is the brand name of University of Cambridge Local Examinations Syndicate (UCLES), which is itself a department of the University of Cambridge.