



GCE AS/A level

1202/01

GEOGRAPHY – G2
Changing Human Environments

P.M. FRIDAY, 16 May 2014

1 hour 30 minutes

1202
010001

ADDITIONAL MATERIALS

In addition to this examination paper, you will need **one** 12 page answer book.

INSTRUCTIONS TO CANDIDATES

Use black ink or black ball-point pen.

Answer **all** questions.

Write your answers in the separate answer book provided.

Write your name, centre number and candidate number in the spaces at the top of the answer book.

INFORMATION FOR CANDIDATES

Each question carries **25** marks.

The number of marks is given in brackets at the end of each question or part-question.

You are reminded that assessment will take into account the quality of written communication used in your answers.

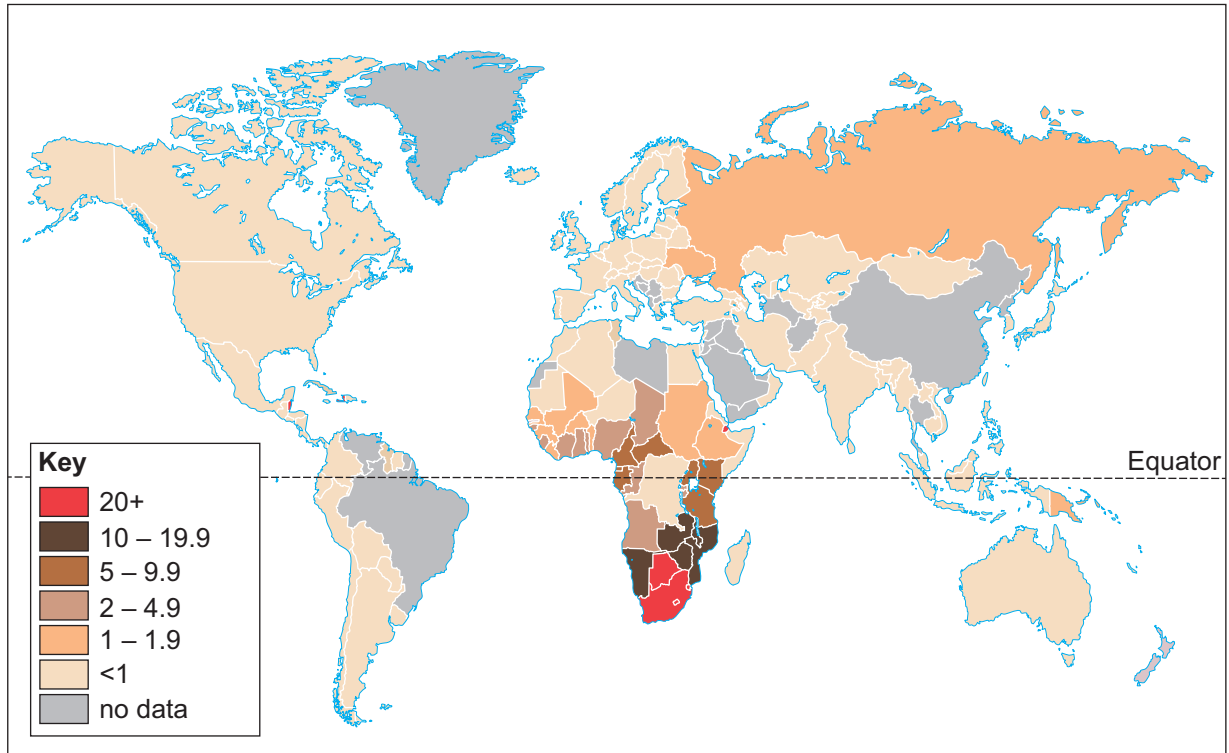
THIS PAPER REQUIRES THAT YOU MAKE THE FULLEST POSSIBLE USE OF APPROPRIATE EXAMPLES IN SUPPORT OF YOUR ANSWERS. SKETCH-MAPS AND DIAGRAMS SHOULD BE INCLUDED WHERE RELEVANT.

G2 – CHANGING HUMAN ENVIRONMENTS

Answer all questions.

Make the fullest possible use of examples in support of your answers.

Figure 1: Percentage of women aged 15–49 with HIV



POPULATION REFERENCE BUREAU
Washington, DC
www.prb.org

Source: 2012 world-population-data-sheet

1. (a) Use **Figure 1** to describe the global pattern of the percentage of women aged 15–49 with HIV. [5]
- (b) Outline some consequences of high mortality rates. [10]
- (c) Contrast the characteristics of **two** types of migration. [10]

Figure 2: Annual percentage change in retail space in use in the UK, 2001-2011



Source: adapted from *The Portas Review*
An independent review into the future of our high streets, December 2011

2. (a) Use **Figure 2** to describe changes in retail space in use in the UK. [5]
- (b) Outline the impacts of changes in the rural-urban fringe. [10]
- (c) Explain why different groups of people live in different areas within settlements. [10]

Figures 3a and 3b: Showing land use in a part of a city in England



RGB Aerial Photography © GeoPerspectives

Figure 3a

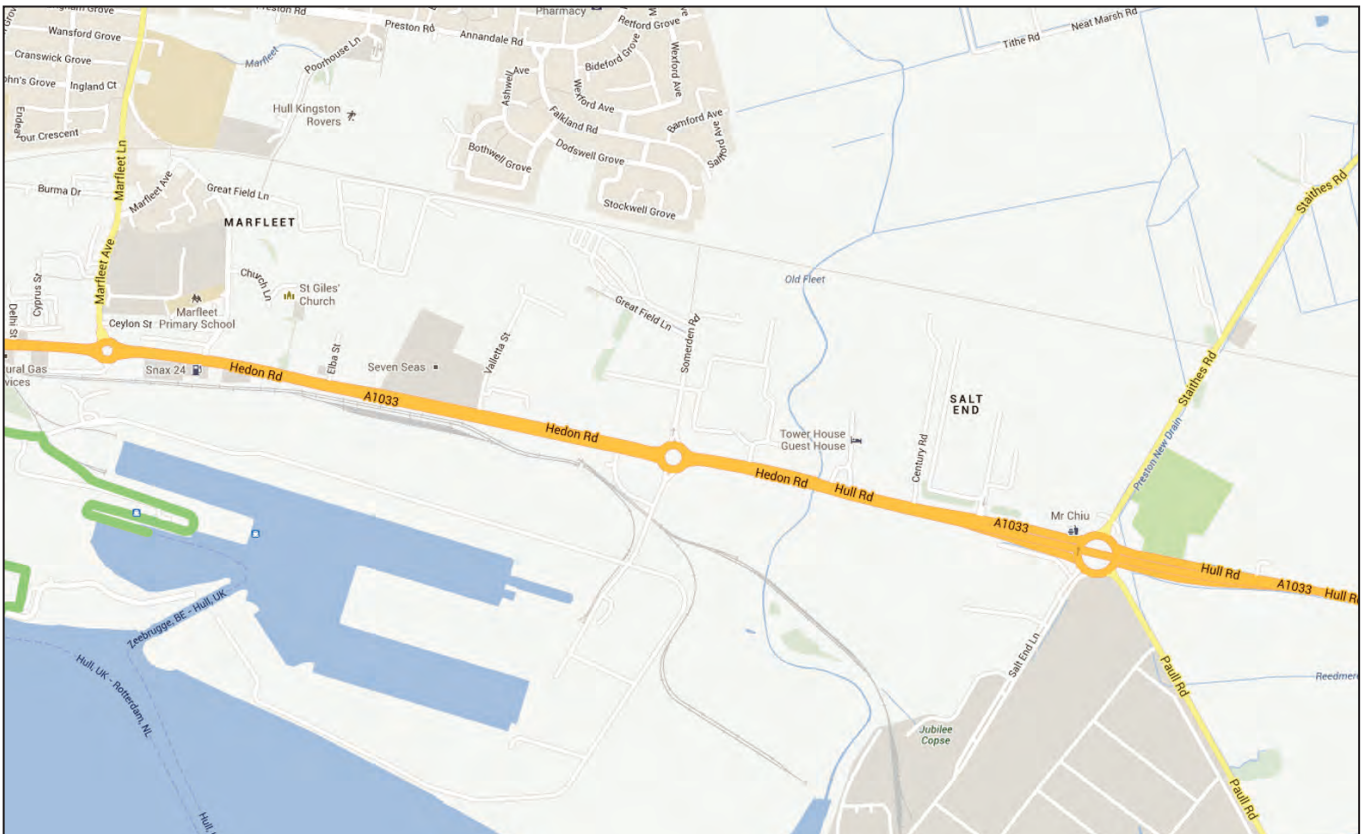
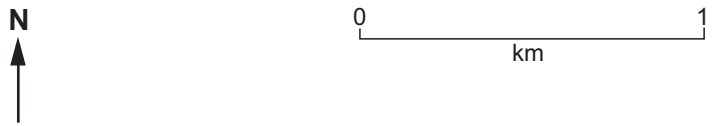


Figure 3b

3. (a) Use **Figures 3a and 3b** to describe the advantages of interpreting land use from the aerial photograph rather than from the map. [7]
- (b) Outline how a questionnaire survey may be undertaken in an investigation within the area shown **in Figure 3a**. [8]
- (c) Outline the conclusions of your investigation into a changing human environment.
You should state clearly the question that you have investigated. [10]

END OF PAPER