

ADVANCED SUBSIDIARY GCE
GEOGRAPHY
Managing Physical Environments

F761/I

INSERT

Tuesday 17 May 2011
Afternoon

Duration: 1 hour 30 minutes



INFORMATION FOR CANDIDATES

- This document consists of **8** pages. Any blank pages are indicated.

INSTRUCTION TO EXAMS OFFICER/INVIGILATOR

- Do not send this insert for marking; it should be retained in the centre or destroyed.

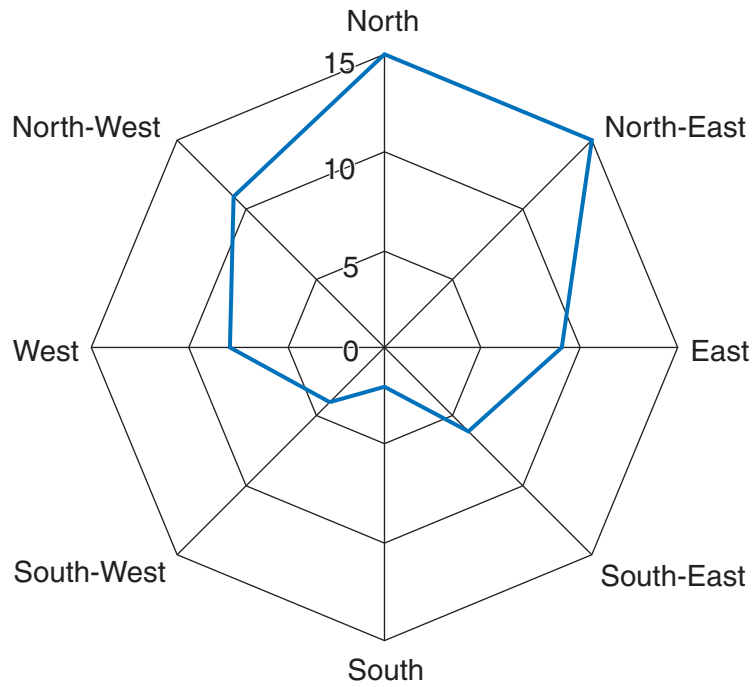
Fig. 1 Part of the valley of the River Rhine in Germany



Fig. 2 The coastline at Budleigh Salterton, Devon



Fig. 3 Orientation* of cirques in an area of the Lake District



* Orientation = direction faced

Key:

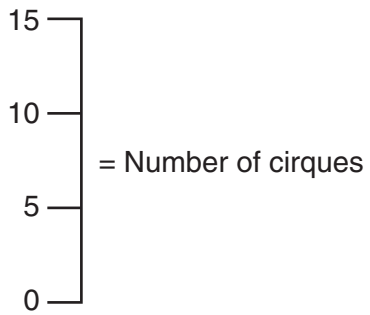
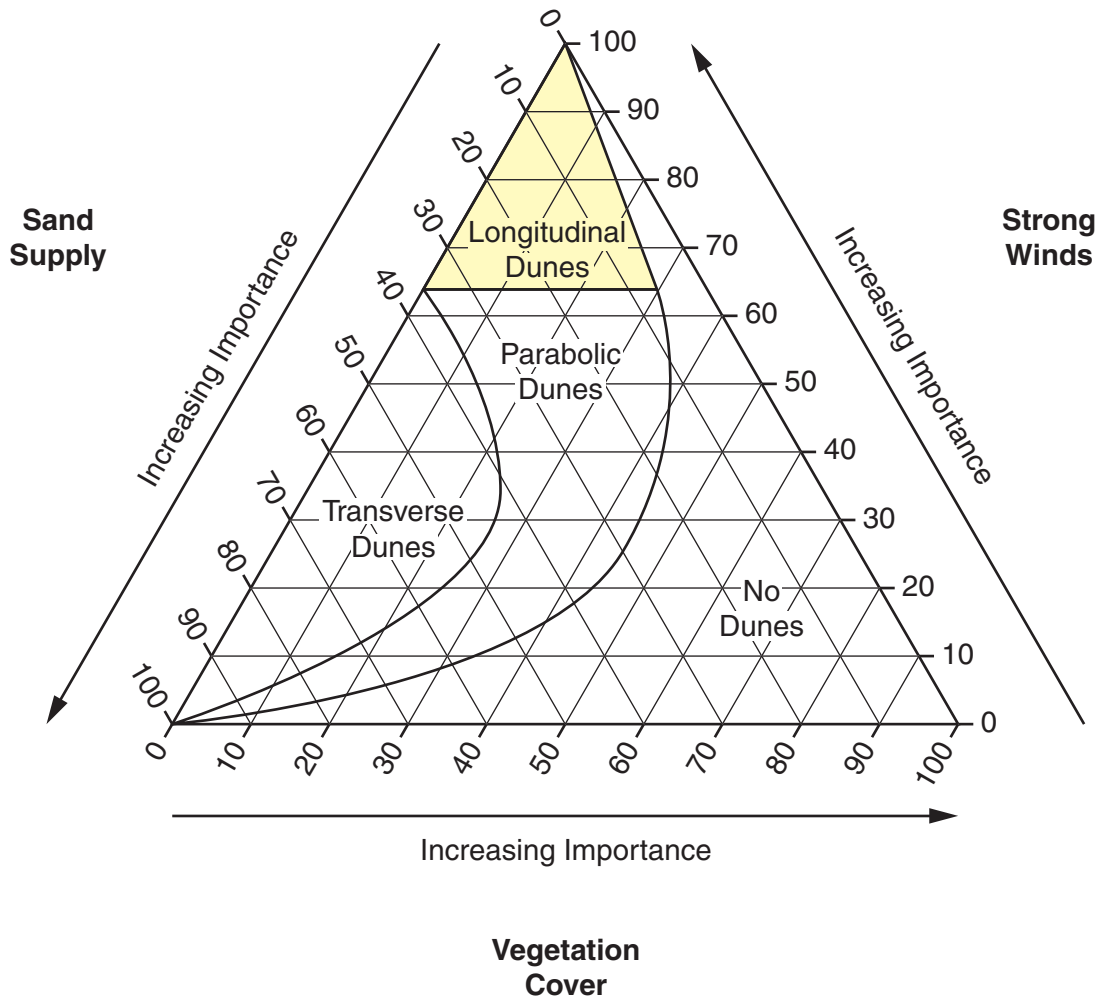


Fig. 4 Relative importance of factors influencing sand dune formation



**Copyright Information**

OCR is committed to seeking permission to reproduce all third-party content that it uses in its assessment materials. OCR has attempted to identify and contact all copyright holders whose work is used in this paper. To avoid the issue of disclosure of answer-related information to candidates, all copyright acknowledgements are reproduced in the OCR Copyright Acknowledgements Booklet. This is produced for each series of examinations and is freely available to download from our public website (www.ocr.org.uk) after the live examination series.

If OCR has unwittingly failed to correctly acknowledge or clear any third-party content in this assessment material, OCR will be happy to correct its mistake at the earliest possible opportunity.

For queries or further information please contact the Copyright Team, First Floor, 9 Hills Road, Cambridge CB2 1GE.

OCR is part of the Cambridge Assessment Group; Cambridge Assessment is the brand name of University of Cambridge Local Examinations Syndicate (UCLES), which is itself a department of the University of Cambridge.