



UNIVERSITY OF CAMBRIDGE INTERNATIONAL EXAMINATIONS
General Certificate of Education Advanced Subsidiary Level and Advanced Level

GEOGRAPHY

9696/03

Paper 3 Advanced Human Options

May/June 2008

INSERT

1 hour 30 minutes

READ THESE INSTRUCTIONS FIRST

This Insert contains all the Figures and the Table referred to in the questions.

This document consists of **4** printed pages.



Table 1 for Question 1

Length of fallow period on arable farms in three villages in south-east Nigeria, 2003

fallow period (years)	farms (percentage)		
	village A	village B	village C
less than 5	32.7	77.8	27.0
6-10	7.7	15.6	68.2
11-15	57.7	6.6	4.8
16-20	1.9	0	0
sample size: number of farms surveyed	52	45	63

Fig. 1 for Question 3

Generation of electricity by energy source for selected European countries, 2001

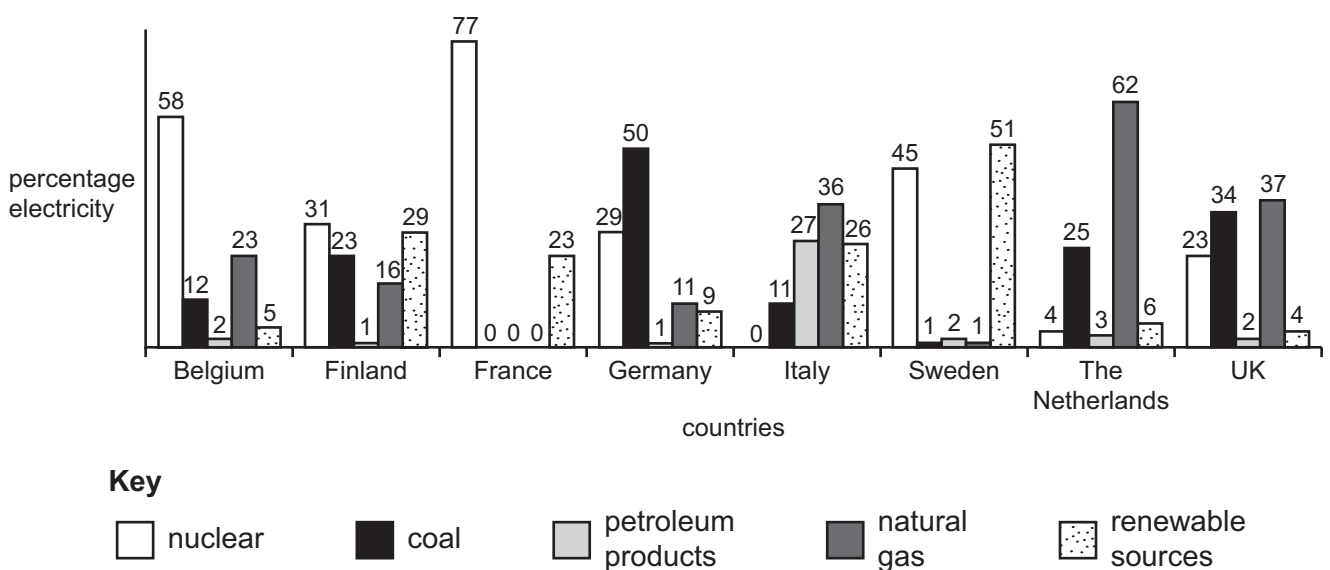


Fig. 2 for Question 6

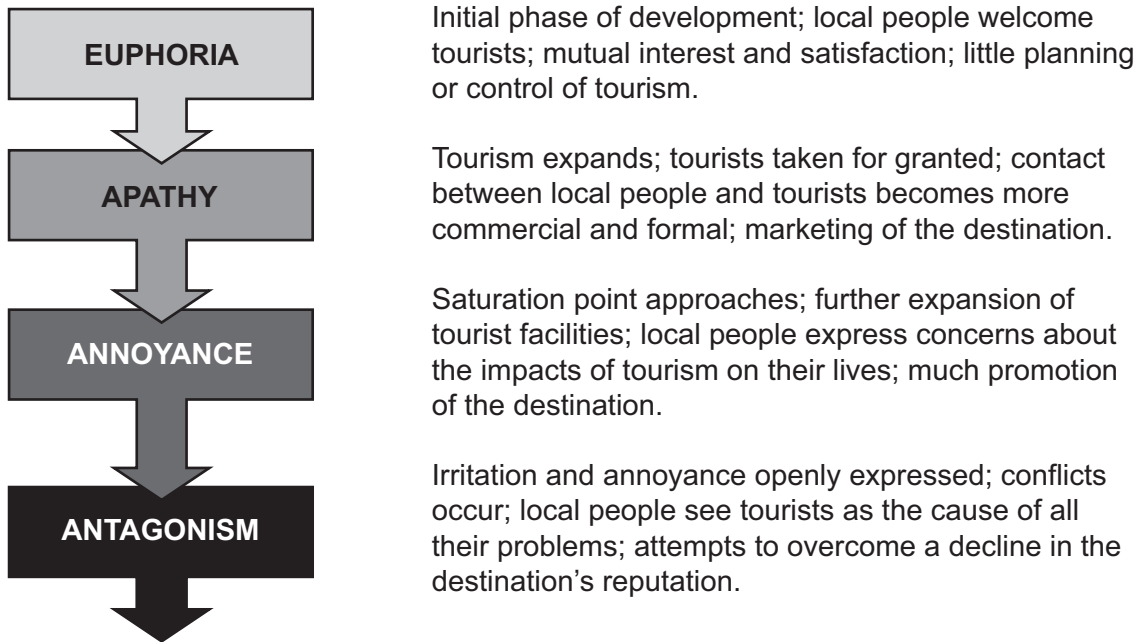
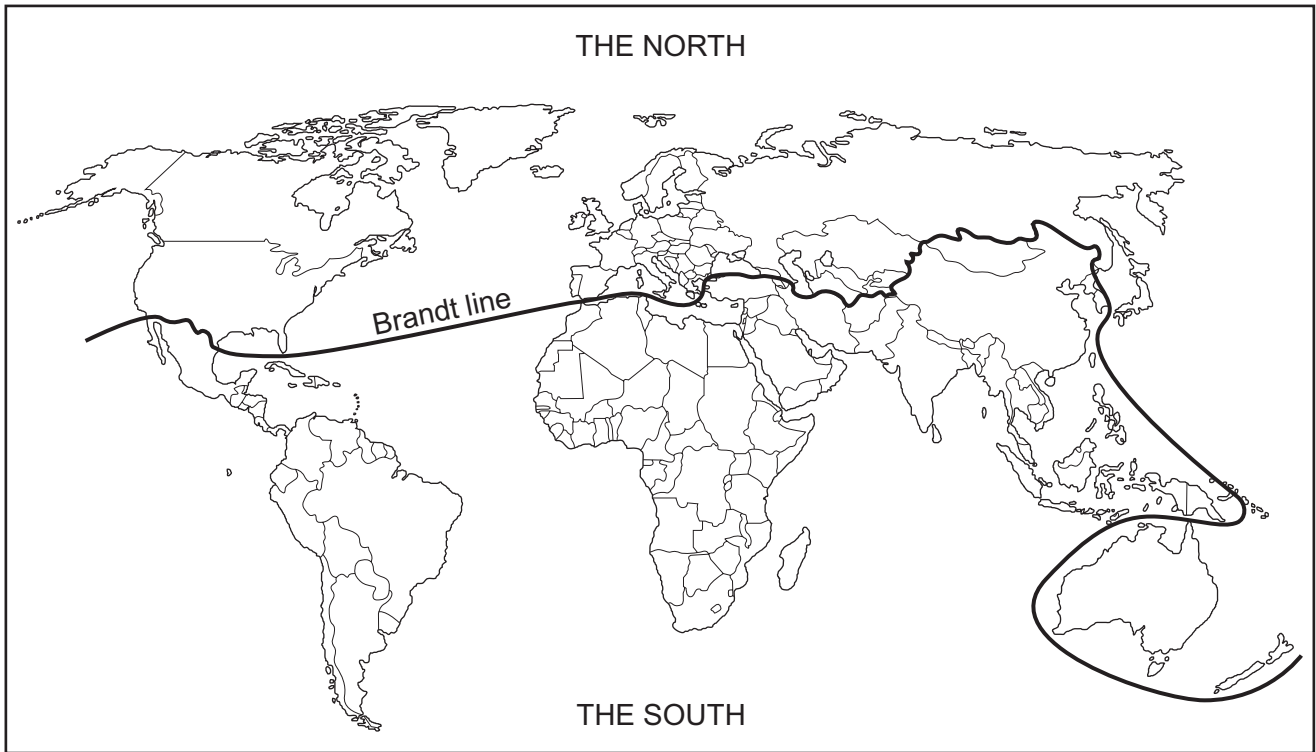
Possible changes in local people's attitudes to tourism as a destination develops

Fig. 3 for Question 7

The North-South divide, from the Brandt Report, 1980



Permission to reproduce items where third-party owned material protected by copyright is included has been sought and cleared where possible. Every reasonable effort has been made by the publisher (UCLES) to trace copyright holders, but if any items requiring clearance have unwittingly been included the publisher will be pleased to make amends at the earliest possible opportunity.

University of Cambridge International Examinations is part of the Cambridge Assessment Group. Cambridge Assessment is the brand name of University of Cambridge Local Examinations Syndicate (UCLES), which is itself a department of the University of Cambridge.