

Surname						Other Names					
Centre Number						Candidate Number					
Candidate Signature											

Leave blank

General Certificate of Education
 January 2006
 Advanced Subsidiary Examination



GEOGRAPHY (SPECIFICATION B)
Unit 3 The Human Options

GGB3

Friday 13 January 2006 9.00 am to 10.00 am

<p>For this paper you must have:</p> <ul style="list-style-type: none"> the insert (enclosed) <p>You may use a calculator.</p>

Time allowed: 1 hour

Instructions

- Use blue or black ink or ball-point pen. You may use pencil for maps, diagram and graphs.
- Fill in the boxes at the top of this page.
- Answer **one** question, on **either** Option **S** or Option **T**.
- Option **S**: Urban Change in the UK and the Wider World in the Last 30 years – page 2.
- Option **T**: The Historical Rural and Urban Landscapes of England and Wales – page 8.
- Do all rough work in this book. Cross through any work you do not want marked.
- Give sketch maps, diagrams and specific examples, where appropriate.
- If there is not enough space for your answer(s), use the extra page(s) at the end of the book. If you do this, make sure that you show the number of the question you are answering.

For Examiner's Use			
Number	Mark	Number	Mark
S	X		
1			
T	X		
2			
Total (Column 1)		→	
Total (Column 2)		→	
TOTAL			
Examiner's Initials			

Information

- The maximum mark for this paper is 50.
- The marks for questions are shown in brackets.
- You are expected to use a calculator where appropriate.
- You are reminded of the need for good English and clear presentation in your answers. All questions should be answered in continuous prose. Quality of Written Communication will be assessed in all answers.

Answer the question on **either** Option S or Option T.

OPTION S: URBAN CHANGE IN THE UK AND THE WIDER WORLD IN THE LAST 30 YEARS

1 (a) Study **Figure 1** on the insert. It shows models of a large urban area in a More Economically Developed Country (MEDC) for 1980 and 2000.

(i) Identify and explain **two** processes that might have led to the form of the city in **1980**.

.....

.....

.....

.....

.....

.....

.....

.....

.....

.....

.....

.....

.....

.....

.....

.....

.....

.....

.....

.....

.....

.....

(6 marks)

(ii) Describe and comment on **three** changes that have taken place in the area shown between 1980 and 2000.

.....

.....

.....

.....

.....

.....

.....

.....

.....

.....

.....

.....

.....

.....

.....

.....

.....

.....

.....

.....

.....

.....

.....

.....

.....

(8 marks)

(b) Urbanisation is a major feature of Less Economically Developed Countries (LEDCs).

Name **one** major urban area in an LEDC that you have studied.

.....

(i) Suggest reasons for the growth of that urban area.

.....

.....

.....

.....

.....

.....

.....

.....

.....

.....

.....

.....

.....

.....

.....

Question 1 continues on the next page

Turn over ►

.....
.....
.....
.....

(6 marks)

(ii) Outline the problems that have arisen from the growth of that urban area.

.....
.....
.....
.....
.....
.....
.....
.....
.....
.....
.....
.....
.....
.....
.....
.....
.....
.....
.....
.....
.....
.....
.....

(7 marks)

(iii) Describe the way(s) in which **one** of these problems has been addressed.

.....

.....

.....

.....

.....

.....

.....

.....

.....

.....

.....

(5 marks)

(c) **Figure 1**, on the insert, shows a number of ways in which urban regeneration can take place.

These include:

- Property-led regeneration (eg flagship project)
- Gentrification
- Partnership strategies of the 21st century (eg new sustainable neighbourhoods).

Choose **one** of these, and with reference to **one** case study, describe its aims and comment on its effectiveness.

.....

.....

.....

.....

.....

.....

.....

Question 1 continues on the next page

Turn over ►

.....

.....

.....

.....

.....

.....

.....

.....

.....

.....

.....

.....

.....

.....

.....

.....

.....

.....

(8 marks)

(d) (i) Outline reasons for the development of out-of-town retailing in the UK.

.....

.....

.....

.....

.....

.....

.....

.....

.....

.....

.....

.....

.....

.....

.....

.....

.....

.....

.....

.....

.....

.....

(6 marks)

(ii) Identify **two** effects of out-of-town retailing on the rural–urban fringe.

.....

.....

.....

.....

.....

.....

.....

.....

.....

.....

.....

.....

.....

.....

.....

.....

.....

.....

.....

.....

.....

(4 marks)

End of Question 1

Answer the question on **either** Option S **or** Option T.

**OPTION T: THE HISTORICAL RURAL AND URBAN
LANDSCAPES OF ENGLAND AND WALES**

- 2 (a) (i) Study **Figure 2a**, on the insert, a map of the parish of Padbury (Buckinghamshire) in 1590.

Describe the landscape suggested by the map of the parish at this time.

.....

.....

.....

.....

.....

.....

.....

.....

.....

.....

.....

.....

.....

.....

.....

.....

(6 marks)

- (ii) Study **Figure 2b**, on the insert, a map of the same parish 280 years later.

Using **only** the map, describe the changes that appear to have taken place in the landscape.

.....

.....

.....

.....

.....

.....

.....

.....

.....

.....

.....

.....

.....

(6 marks)

(iii) Suggest **two** reasons why these changes have taken place.

.....

.....

.....

.....

.....

.....

.....

.....

.....

(4 marks)

Question 2 continues on the next page

Turn over ►

- (b) (i) Using **only** an annotated diagram and/or sketch map, illustrate the main features of an industrial town of the 19th century.

(7 marks)

(ii) With reference to **one or more** examples, describe ways in which towns designed by enlightened industrialists were different from the typical industrial town of the 19th century.

.....

.....

.....

.....

.....

.....

.....

.....

.....

.....

.....

.....

.....

.....

.....

.....

.....

.....

.....

.....

.....

.....

.....

.....

.....

.....

(8 marks)

Question 2 continues on the next page

(c) In the context of historical geography, what is meant by each of the following terms?

(i) New Town

.....
.....
.....
.....

(ii) New building technologies since 1900

.....
.....
.....
.....

(4 marks)

(d) With reference to **either** a historic city **or** an industrial heritage site **or** a National Park **or** an Area of Outstanding Natural Beauty:

(i) Describe the various aspects of the landscape that are being preserved.

.....
.....
.....
.....
.....
.....
.....
.....
.....
.....
.....
.....
.....
.....

(5 marks)

(ii) Suggest how they are developed and exploited as a source of tourist income.

.....

.....

.....

.....

.....

.....

.....

.....

.....

.....

.....

(5 marks)

(iii) Explain how conflicts have arisen over the protection of aspects of the landscape.

.....

.....

.....

.....

.....

.....

.....

.....

.....

.....

.....

(5 marks)

END OF QUESTIONS

QUESTION
NUMBER

Write the question number in the left hand margin

A series of horizontal dotted lines for writing, spanning the width of the page below the instruction.

QUESTION
NUMBER

Write the question number in the left hand margin

A series of horizontal dotted lines for writing, spanning the width of the page below the instruction.

There are no questions printed on this page

ACKNOWLEDGEMENT OF COPYRIGHT-HOLDERS AND PUBLISHERS

Permission to reproduce all copyright material has been applied for. In some cases, efforts to contact copyright-holders have been unsuccessful and AQA will be happy to rectify any omissions of acknowledgements in future papers if notified.

Question 1 Figure 1: Edexcel Limited
Question 2 Figures 2a & 2b: M W Beresford, J K S Joseph, Medieval England, An Aerial Survey (1979), Cambridge University Press

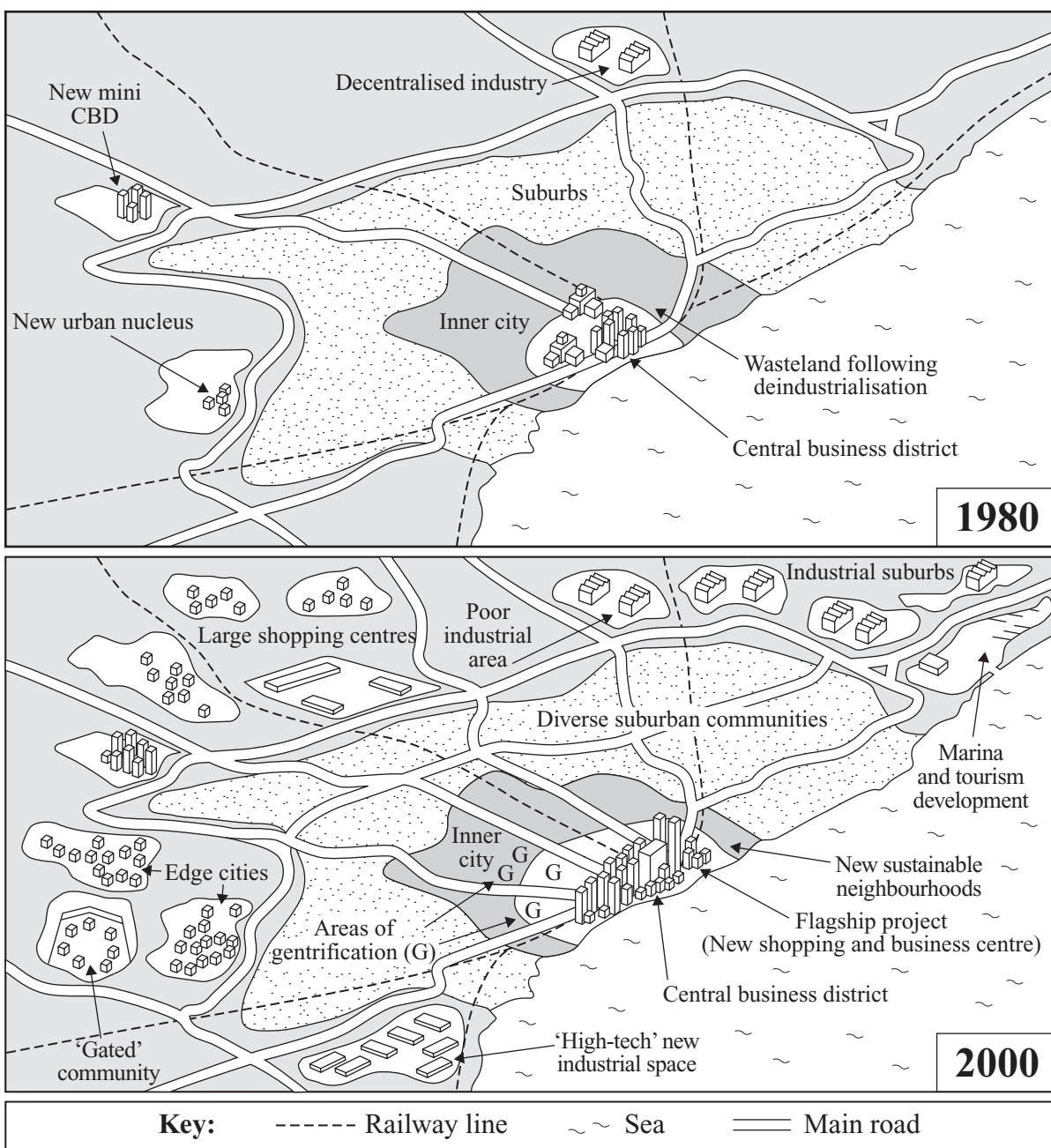
Copyright © 2006 AQA and its licensors. All rights reserved.

GEOGRAPHY (SPECIFICATION B)
Unit 3 The Human Options

GGB3

Insert

Figure 1
(for use with Question 1)



Turn over ►

Figure 2a
(for use with Question 2)

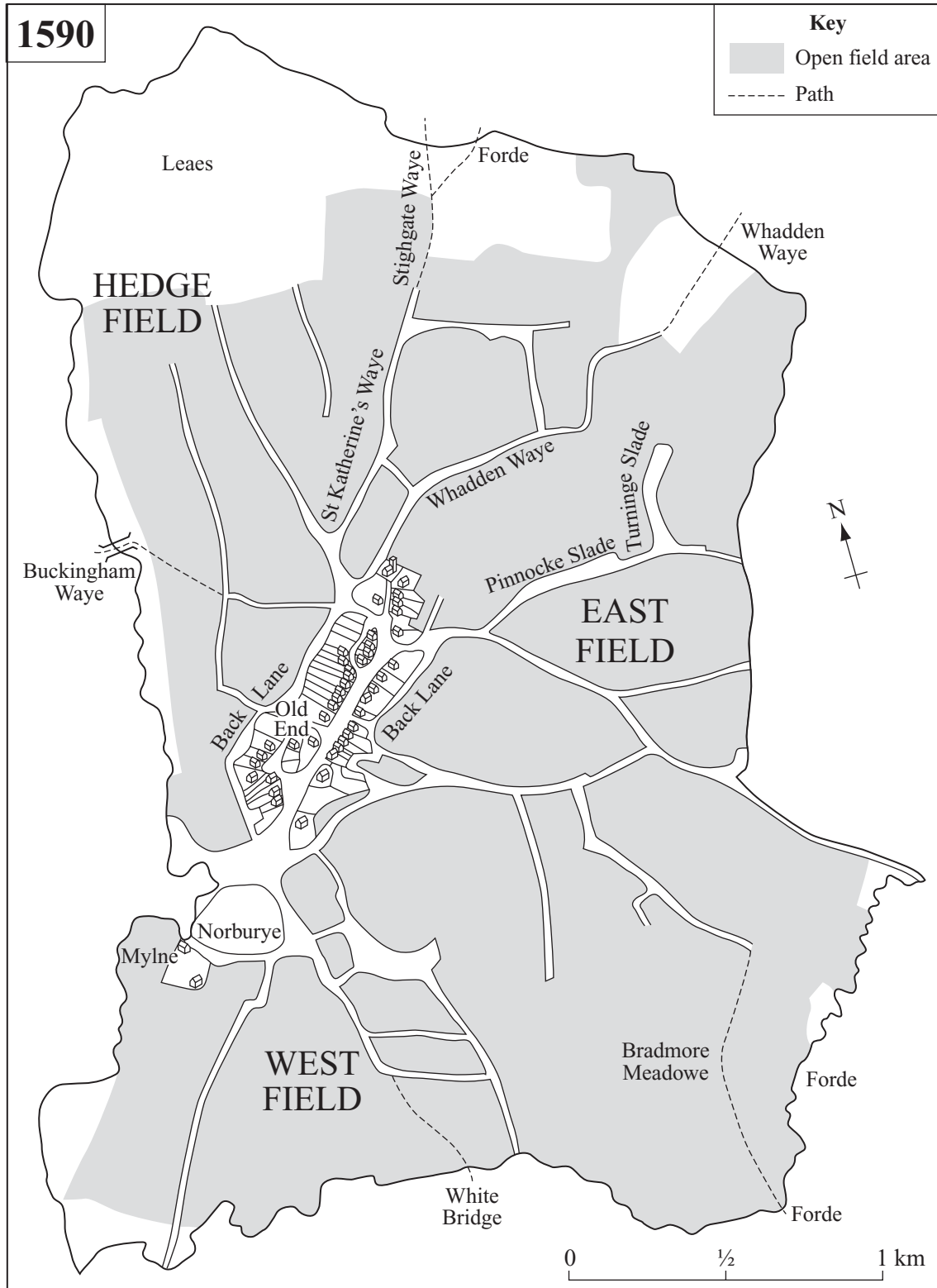
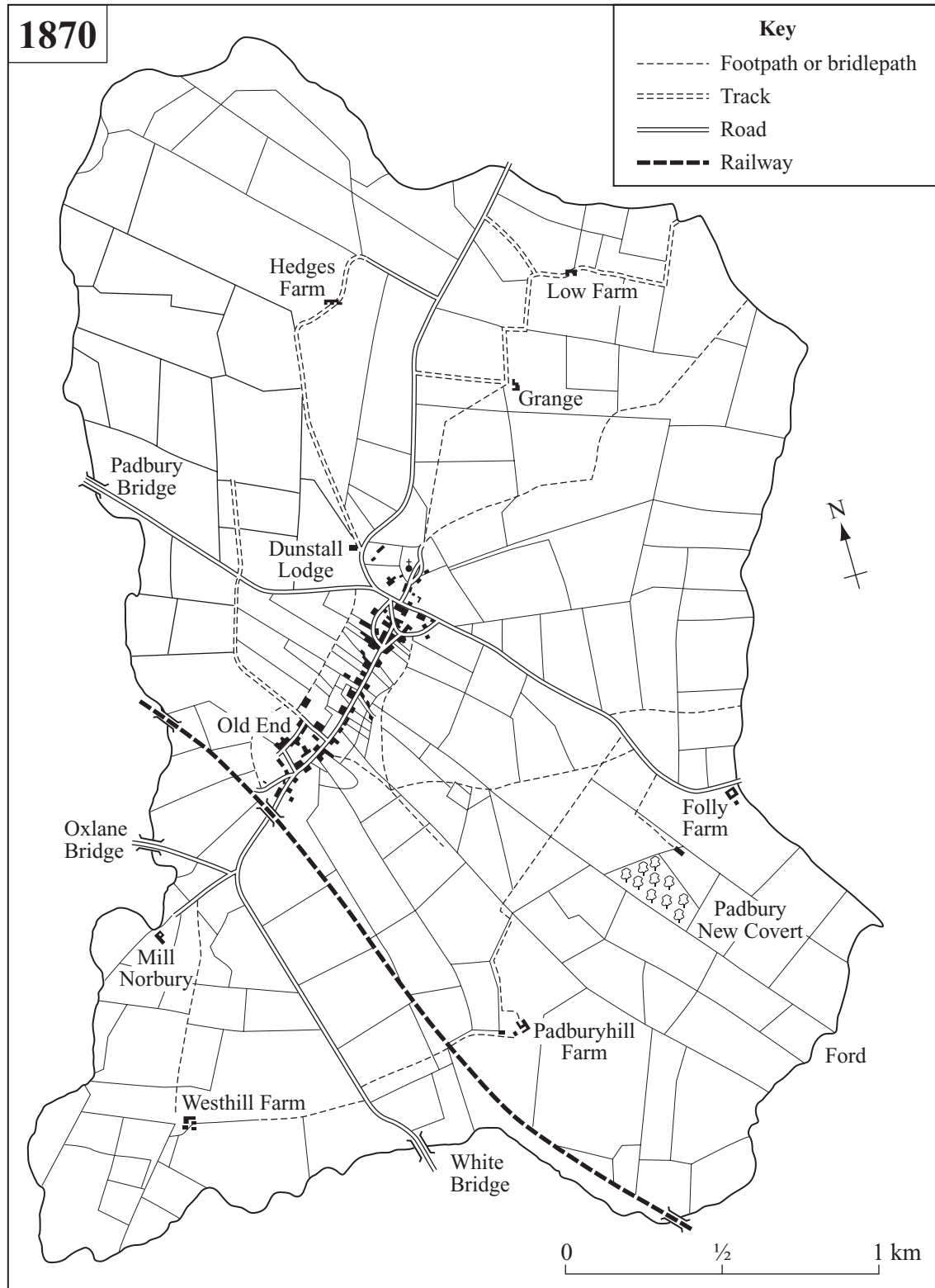


Figure 2b
(for use with Question 2)



Turn over ►

There is no text printed on this page