



**SECTION A**

**Answer ALL the questions in Section A. Write your answers in the spaces provided.**

**You are advised to spend no more than 25 minutes on this section.**

**For Questions 4 to 7, choose an answer, A, B, C, D or E, and put a cross in the box (☒). If you change your mind, put a line through the box (☒) and then put a cross in another box (☒).**

1. A sports training week is organised in Devon. Nine people sign up to take part. The table below gives information about their ages, the distance they travelled to attend the event and the favourite sport in which each wishes to develop their skills.

Sports Training in Devon			
name	age (years)	distance travelled (miles)	favourite sport
Anna	18	144	tennis
Bo	21	22	relay running
Carlos	19	60	swimming
Cathy	13	270	swimming
Emma	11	345	tennis
Imran	16	52	swimming
Jack	22	84	relay running
Sam	10	3	swimming
Yasmin	14	82	tennis

- (a) (i) What is the **median** number of miles for ‘distance travelled’ by the nine people who attend the training week?

.....  
 .....  
 .....

**(1)**

- (ii) What is the **mode** for ‘favourite sport’? (You should state both the mode and the type of sport it represents.)

.....  
 .....  
 .....

**(1)**



Leave  
blank

(iii) Calculate the **mean** age of the nine people on the training week.

.....  
.....  
.....

(1)

(b) Just before the training week commences, two people of the same age join the programme. They both live 1 mile from the Sports Centre and have the same favourite sport.

(i) If the **mean** age now changes to 18, what is the age of the new members?  
Show all your working.

.....  
.....  
.....  
.....  
.....  
.....  
.....  
.....  
.....

(2)

(ii) What is the **median** for 'distance travelled' by the enlarged group?

.....  
.....  
.....

(1)

(iii) The **mode** for 'favourite sport' changes to 5. What is the favourite sport of the new members?

.....  
.....  
.....

(1)

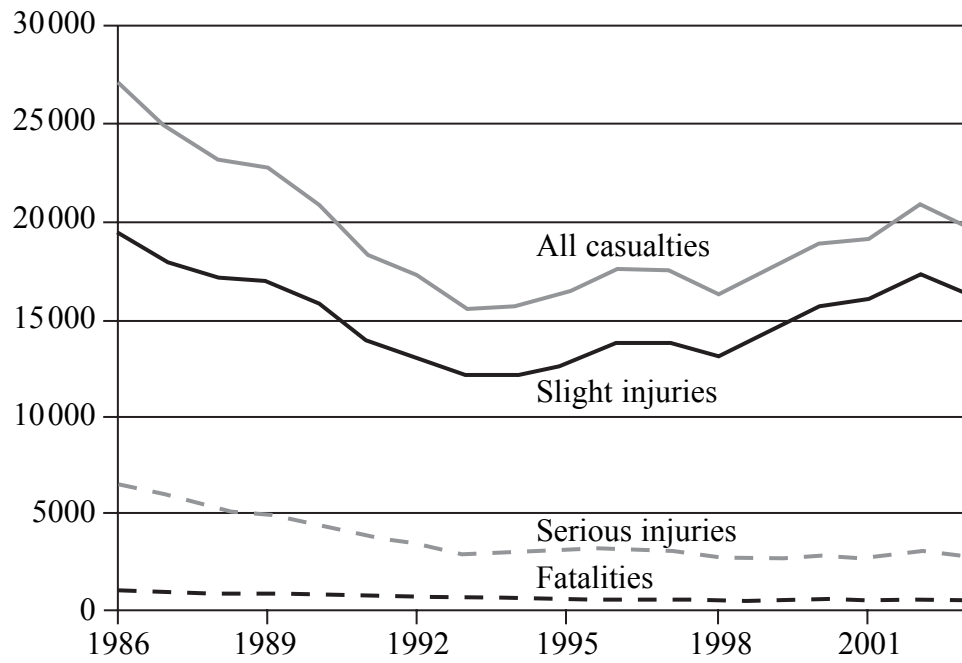
(Total 7 marks)

Q1



Leave blank

2. **Casualties from road accidents involving illegal alcohol levels in the United Kingdom**



Source: adapted from *Social Trends 35* © Office of National Statistics, 2005.

(a) Estimate the **number** of casualties which involved 'serious injury' in 1998.

.....  
.....  
(1)

(b) Calculate the percentage change in the **number** of 'serious injuries' between 1989 and 1998. Show all your working.

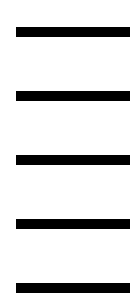
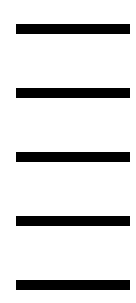
.....  
.....  
.....  
.....  
(2)

(Total 3 marks)

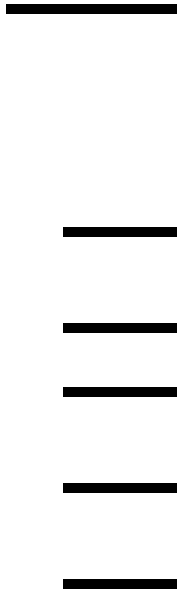
Q2



<p>3. What is 'socialisation'?</p> <p>.....</p> <p>.....</p> <p>.....</p> <p style="text-align: right;"><b>(Total 1 mark)</b></p>	<p>Leave blank</p> <p><b>Q3</b></p> <input type="text"/>
<p>4. Which of the following political parties in the UK has the closest links with trade unions?</p> <p><input type="checkbox"/> A Conservative</p> <p><input type="checkbox"/> B Green</p> <p><input type="checkbox"/> C Labour</p> <p><input type="checkbox"/> D Liberal Democrat</p> <p><input type="checkbox"/> E Ulster Unionist</p> <p style="text-align: right;"><b>(Total 1 mark)</b></p>	<p><b>Q4</b></p> <input type="text"/>
<p>5. Which UK political party started the policy of selling off nationalised industries such as telephones, gas and electricity?</p> <p><input type="checkbox"/> A Conservative</p> <p><input type="checkbox"/> B British National (BNP)</p> <p><input type="checkbox"/> C Labour</p> <p><input type="checkbox"/> D Liberal Democrat</p> <p><input type="checkbox"/> E Scottish Nationalist (SNP)</p> <p style="text-align: right;"><b>(Total 1 mark)</b></p>	<p><b>Q5</b></p> <input type="text"/>



N 2 3 7 6 1 A 0 5 1 6



<p>6. Which <b>one</b> of the following statements about the European Union and the European Parliament is correct?</p> <ul style="list-style-type: none"><li><input type="checkbox"/> A The European Union pays an annual salary of £198,000 to every elected Member of the European Parliament.</li><li><input type="checkbox"/> B All the business of the European Parliament is conducted in French.</li><li><input type="checkbox"/> C The European Parliament is the main legislative body for the European Union and no laws can be passed without its approval.</li><li><input type="checkbox"/> D There are 2,009 elected members of the European Parliament from all the member countries.</li><li><input type="checkbox"/> E The European Parliament is elected by proportional representation in all member countries for renewable terms of five years.</li></ul> <p style="text-align: right;"><b>(Total 1 mark)</b></p>	Leave blank          <b>Q6</b> <input type="text"/>
<p>7. A society is secular if it is:</p> <ul style="list-style-type: none"><li><input type="checkbox"/> A an organisation with fewer than ten members</li><li><input type="checkbox"/> B an organisation with broad religious beliefs</li><li><input type="checkbox"/> C a non-religious society</li><li><input type="checkbox"/> D dominated by a religious cult</li><li><input type="checkbox"/> E a society with no middle class</li></ul> <p style="text-align: right;"><b>(Total 1 mark)</b></p>	          <b>Q7</b> <input type="text"/>



For Question 8, choose two of answers A, B, C, D, E or F and put a cross in the two boxes (☒). If you change your mind, put a line through the box (☒) and put a cross in another box (☒).

8. Which **two** of the following explain why the UK has an 'ageing population'?

- A The number of people getting married has declined.
- B The number of people getting divorced and then re-married has increased.
- C The birth rate has fallen as more women choose to concentrate on their careers.
- D Co-habitation has increased.
- E Improved healthcare means the elderly are now living longer than before.
- F The government has decided to increase the age at which workers are allowed to retire and draw their pensions.

(Total 2 marks)

Leave blank

Q8

**TOTAL FOR SECTION A: 17 MARKS**



**SECTION B**

**Answer ALL the parts of Question 9. Write your answers in the spaces provided.**

**Read the sources on the separate insert and answer the following questions.**

**For Questions 9(a) to (c), choose an answer, A, B, C, D or E, and put a cross in the box (☒). If you change your mind, put a line through the box (☒) and then put a cross in another box (☒).**

9. (a) What type of argument is used in the first paragraph of Source 1? (lines 1–3)

- A argument from analogy
- B argument from authority
- C deductive argument
- D inductive argument
- E none of these

(1)

(b) What type of argument is used in the first paragraph of Source 3? (lines 21–27)

- A argument from analogy
- B argument from authority
- C deductive argument
- D inductive argument
- E none of these

(1)





Leave  
blank

(c) An **opinion** may be described in some or all of the following ways.

- (i) it is a moral claim
- (ii) it is a value judgment
- (iii) it has been demonstrated to be false
- (iv) it is not agreed by everyone
- (v) it is unsupported by evidence

Which **two** of these descriptions correctly apply to **all** opinions? (You do not need to read the passage to answer this question.)

- A (i) and (iii)
- B (i) and (iv)
- C (ii) and (iv)
- D (ii) and (v)
- E (iii) and (v)

(1)

(d) Identify **one** fact from the first paragraph of Source 2. (lines 13–15)

.....

.....

.....

(1)



Leave blank

- (e) ‘While voters are often not keen to chat to candidates, the situation might be different in prisons, especially among those with a sense of grievance or injustice.’  
(lines 17–18)

Explain whether this statement is factual **or** opinion **or** both.

.....  
.....  
.....  
.....  
.....  
.....

(2)

- (f) In each of **Source 2** and **Source 3** the final sentence is the conclusion. Explain which of these conclusions is best justified by the **nature** of the supporting argument and specific **evidence** used.

*You are not being asked to give your own opinions. Using thinking and analytical skills, you should consider and explain which of the two conclusions is best supported by evidence and the nature of the argument in its source and why.*

.....  
.....  
.....  
.....  
.....  
.....  
.....  
.....  
.....  
.....  
.....  
.....  
.....  
.....  
.....  
.....  
.....  
.....  
.....  
.....  
.....





SECTION C

There are three questions in this section. You should answer ONE of them. Write your answer in the space provided.

Put a cross in the box indicating the question you have chosen (☒).  
If you change your mind, put a line through the box (☒) and then put a cross in the other box (☒).

You are reminded that an appropriate conclusion to your argument is required.  
In answering the question you should consider arguments for and against the statement.

Chosen question number:    Question 10 ☒    Question 11 ☒    Question 12 ☒

10. 'Protest groups allow excessive power and influence to noisy and often irresponsible minorities so we would be better off without such groups.'

Examine the arguments **for** and **against** this view.

(17)

11. 'The government should create enough jobs to guarantee full employment.'

Consider arguments **for** and **against** this statement.

(17)

12. 'Since parents are responsible for their children, if the children misbehave it is the parents, not the children, who should be blamed.'

Assess arguments **for** and **against** this view.

(17)

**Quality of Written Communication.**

(3)

**(Total 20 marks)**









