

A-level

DESIGN AND TECHNOLOGY: PRODUCT DESIGN (TEXTILES)

Unit 3 Design and Manufacture

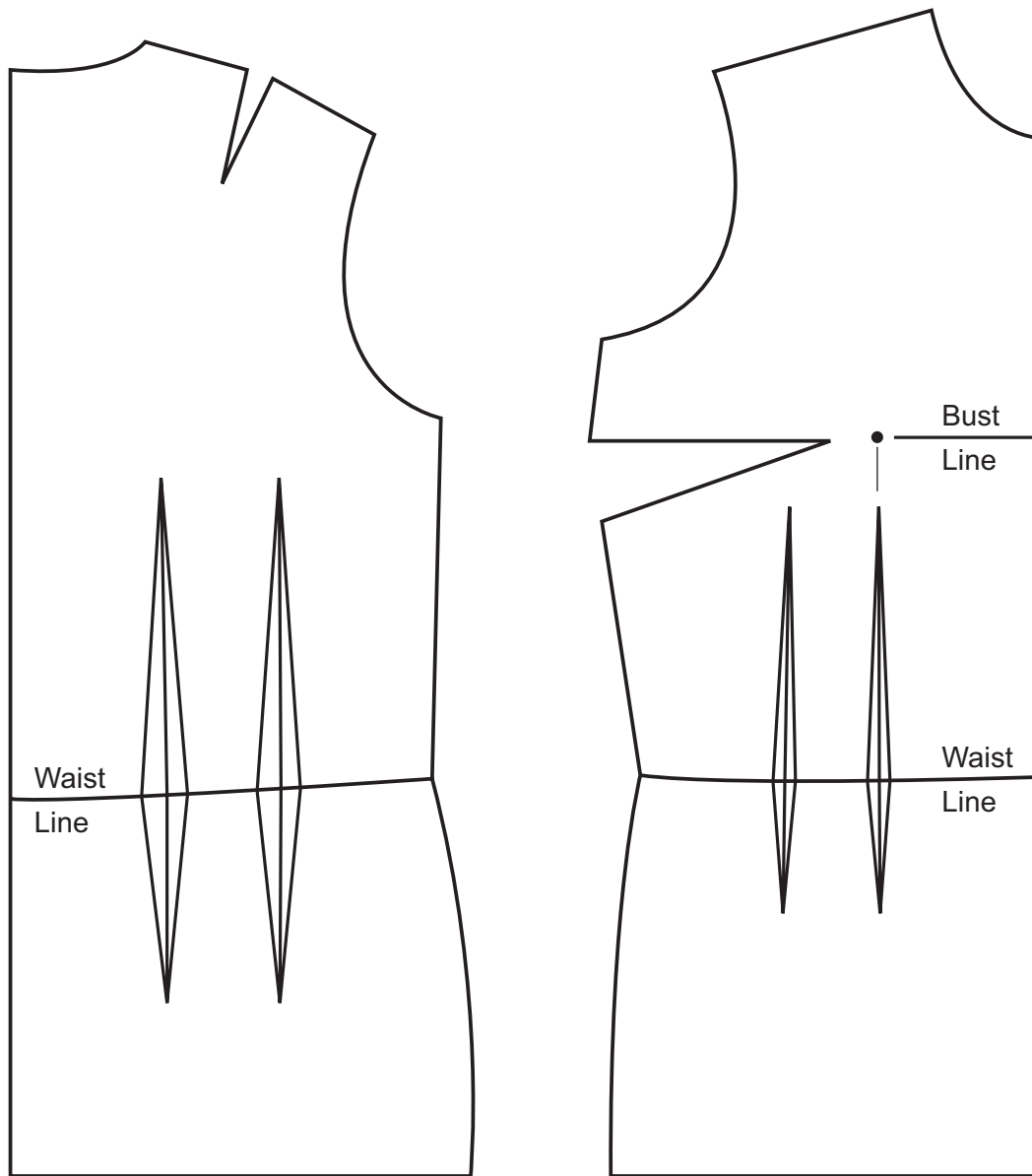
Insert

Turn over for information about Question 6 part

1	7
---	---

.

Figure 1 – Bodice Blocks



Back Bodice
Template (1/4 scale)

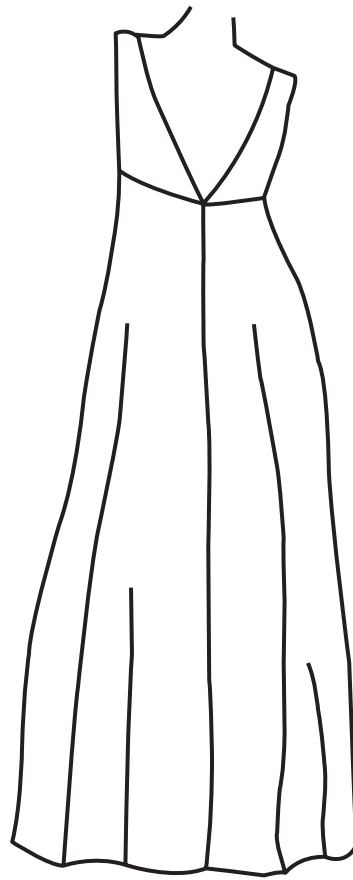

Front Bodice
Template (1/4 scale)

Figure 2 – Front of Nightdress

Figure 3 – Back of Nightdress

Sleeveless style

Bias cut



Copyright information

For confidentiality purposes, from the November 2015 examination series, acknowledgements of third party copyright material will be published in a separate booklet rather than including them on the examination paper or support materials. This booklet is published after each examination series and is available for free download from www.aqa.org.uk after the live examination series.

Permission to reproduce all copyright material has been applied for. In some cases, efforts to contact copyright-holders may have been unsuccessful and AQA will be happy to rectify any omissions of acknowledgements. If you have any queries please contact the Copyright Team, AQA, Stag Hill House, Guildford, GU2 7XJ.

Copyright © 2016 AQA and its licensors. All rights reserved.