



**Friday 20 June 2014 – Morning**

**A2 GCE CLASSICS: CLASSICAL CIVILISATION**

**F387/01** Roman Britain: life in the outpost of the Empire

Candidates answer on the Answer Booklet.

**OCR supplied materials:**

- 12 page Answer Booklet (OCR12)  
(sent with general stationery)

**Other materials required:**

None

**Duration: 2 hours**



**INSTRUCTIONS TO CANDIDATES**

- Complete the boxes on the Answer Booklet with your name, centre number and candidate number.
- Use black ink. HB pencil may be used for graphs and diagrams only.
- Answer **one** question from Section A and **one** question from Section B.
- Read each question carefully. Make sure you know what you have to do before starting your answer.
- Start your answer to each question on a new page.
- Write the number of each question answered in the margin.
- Do **not** write in the bar codes.

**INFORMATION FOR CANDIDATES**

- The number of marks is given in brackets [ ] at the end of each question or part question.
- In this paper you are encouraged to use diagrams, sketches etc., where appropriate, to illustrate your answers.
- The total number of marks for this paper is **100**.
- This document consists of **8** pages. Any blank pages are indicated.

**INSTRUCTION TO EXAMS OFFICER/INVIGILATOR**

- Do not send this Question Paper for marking; it should be retained in the centre or recycled. Please contact OCR Copyright should you wish to re-use this document.

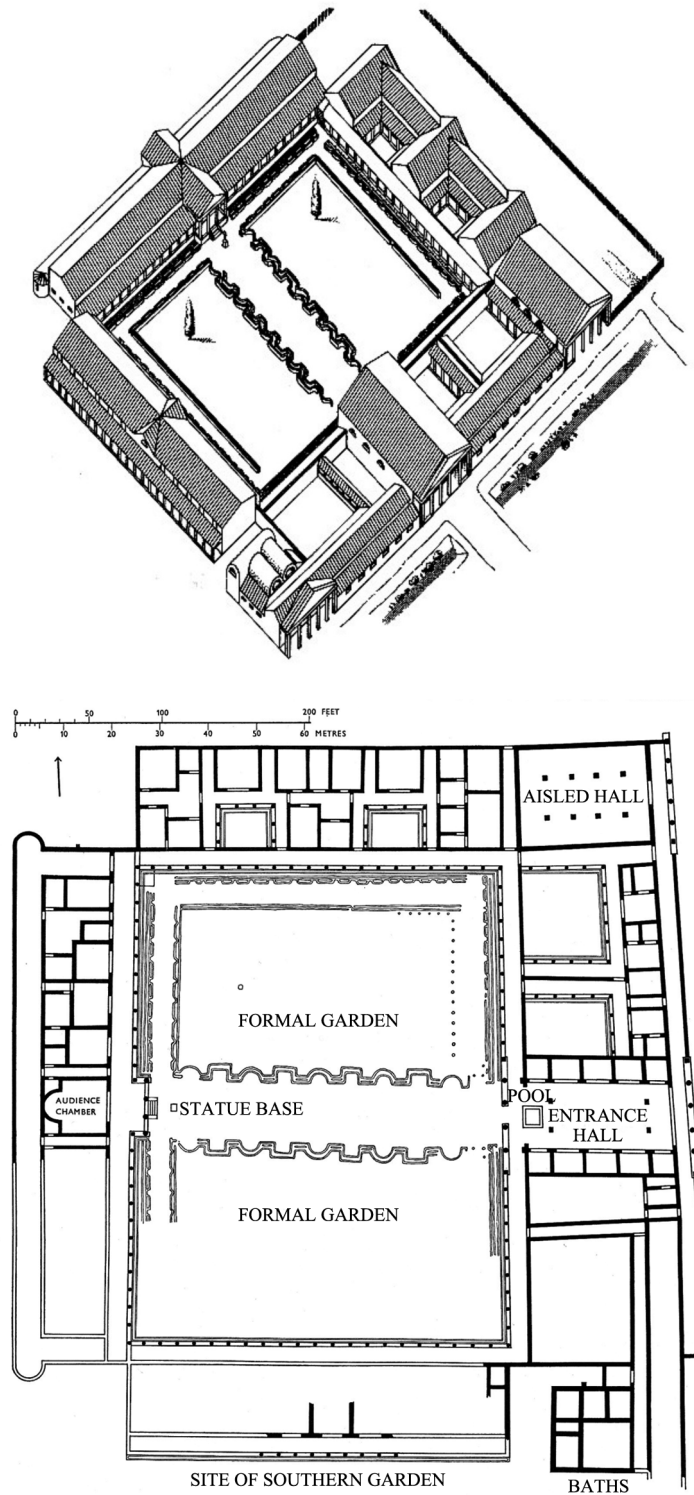
Answer **one** question from Section A and **one** question from Section B.

### SECTION A – Commentary Questions

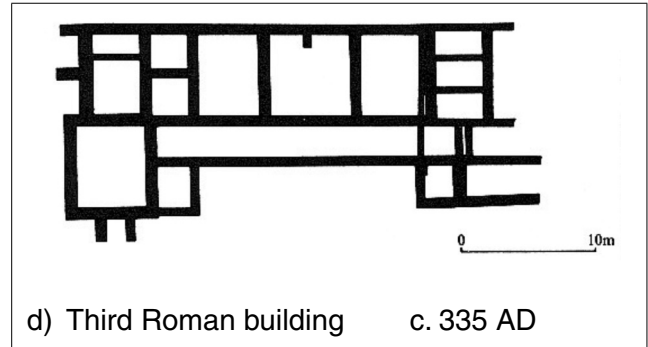
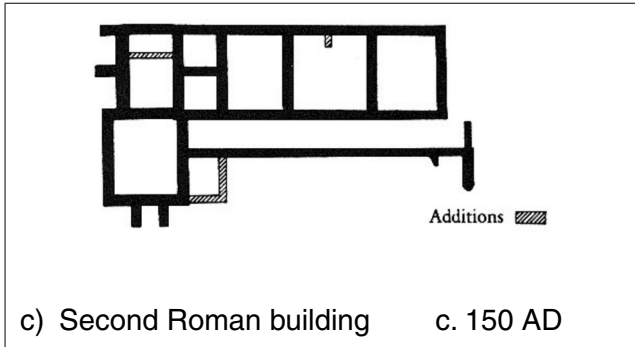
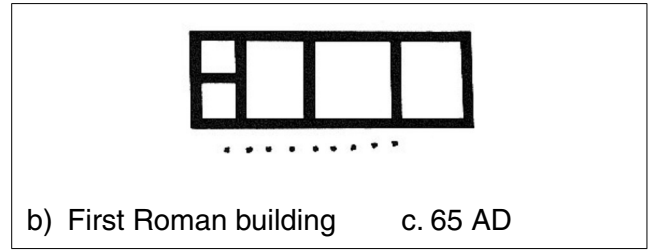
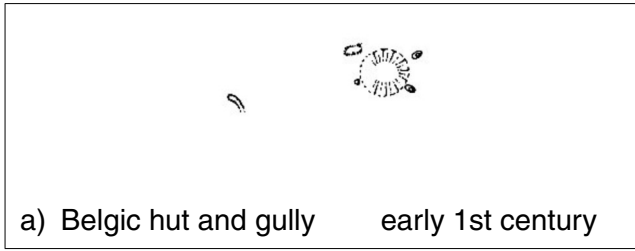
Answer **either** Question 1 **or** Question 2.

**Marks are awarded for the quality of written communication in your answer.**

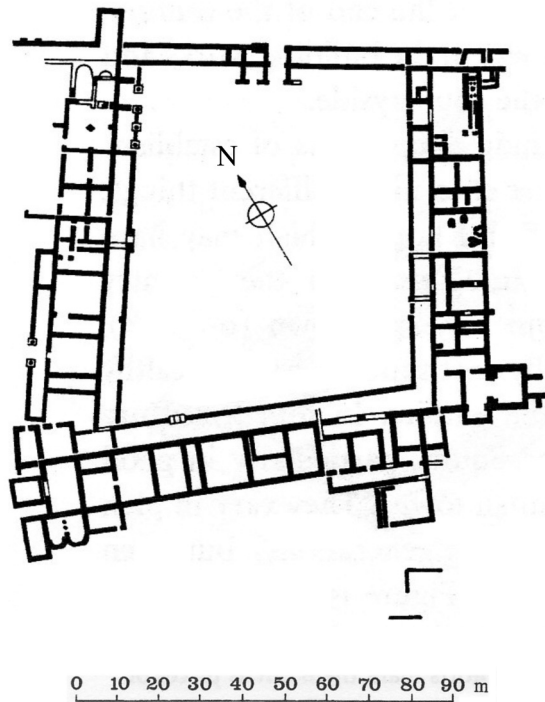
- 1 Study the diagrams and answer the questions.



**Fishbourne Roman Palace: isometric drawing (top), plan of the Flavian palace (bottom)**



### Lockleys Roman Villa, showing stages of development



### The villa at North Leigh

- (a) With reference to these diagrams, explain how useful these villas are in helping us to understand how villas developed in Roman Britain. [25]
- (b) 'The villas in Britain are proof that the way of life for native Britons had changed completely by the end of the period of Roman rule.' How far do you agree with this view? [25]

Do **not** answer this question if you have already answered Question 1.

**Marks are awarded for the quality of written communication in your answer.**

**2** Study the inscriptions and answer the questions.

Sacred to Brigantia: Amandus, engineer, by command fulfilled the order.

*Birrens (Blatobulgium), Dumfriesshire. Statue of the goddess Brigantia.  
Mid 2<sup>nd</sup> or possibly early 3<sup>rd</sup> century.*

Iulius Vitalis, armourer of the Twentieth Legion Valeria Victrix, of 9 years' service, aged 29, by origin a Belga, with funeral at the cost of the guild of armourers. Here he lies.

*Bath (Aquae Sulis). Tombstone found near the Fosse Way.  
Date uncertain – possibly 3<sup>rd</sup> century AD.*

To the African, Italian and Gallic Mother Goddesses, Marcus Minucius Audens, soldier of the Sixth Legion Victrix, pilot in the Sixth Legion, willingly, gladly and deservedly fulfilled his vow.

*An altar found in Micklegate, opposite Holy Trinity Church, York. ? Severan (early 3<sup>rd</sup> century).*

To the spirits of the departed (and) to Anicius Ingenuus, *medicus ordinarius* of the First Tungrian Cohort: he lived 25 years. (*Medicus ordinarius* is most probably a doctor with the rank equivalent to that of a centurion.)

*Housesteads. 3<sup>rd</sup> century AD.*

To Neptune and the Genius of the place and the Spirits of the Emperors, Lucius Viducius Placidus, the son of Viducius, from the Velio-casses in the province of Lugdunensis, trader with Britain, presented the arch and gate on behalf of himself and his descendants in the consulship of Gratus and Seleucus.

*York (Eboracum). AD 221.*

- (a) How useful are these inscriptions in showing how the Roman army helped the development of the economy of Britain during the occupation? [25]
- (b) How far does other evidence support the view that the economy of Britain flourished during the Roman occupation? [25]

**[Section A Total: 50]**

**SECTION B – Essays**

Answer **one** question.

Start your answer on a new page.

**Marks are awarded for the quality of written communication in your answer.**

- 3** How far do you agree that the network of roads built by the Romans was the most significant factor in the development of the province of Britain under Roman rule? **[50]**
- 4** ‘As the Roman occupation of Britain progressed, Classical Roman styles of art became more popular than native British ones.’ To what extent do you agree with this view? **[50]**

**[Section B Total: 50]**

**BLANK PAGE**



**Copyright Information**

OCR is committed to seeking permission to reproduce all third-party content that it uses in its assessment materials. OCR has attempted to identify and contact all copyright holders whose work is used in this paper. To avoid the issue of disclosure of answer-related information to candidates, all copyright acknowledgements are reproduced in the OCR Copyright Acknowledgements Booklet. This is produced for each series of examinations and is freely available to download from our public website ([www.ocr.org.uk](http://www.ocr.org.uk)) after the live examination series.

If OCR has unwittingly failed to correctly acknowledge or clear any third-party content in this assessment material, OCR will be happy to correct its mistake at the earliest possible opportunity.

For queries or further information please contact the Copyright Team, First Floor, 9 Hills Road, Cambridge CB2 1GE.

OCR is part of the Cambridge Assessment Group; Cambridge Assessment is the brand name of University of Cambridge Local Examinations Syndicate (UCLES), which is itself a department of the University of Cambridge.