

OXFORD CAMBRIDGE AND RSA EXAMINATIONS**Advanced GCE****CHEMISTRY**

Unifying Concepts

2816/01

Monday

19 JUNE 2006

Afternoon

1 hour 15 minutes

Candidates answer on the question paper.

Additional materials:

Data Sheet for Chemistry

Scientific calculator

Candidate Name	Centre Number	Candidate Number										
	<table border="1" style="width: 100%; border-collapse: collapse;"> <tr><td style="width: 20px; height: 20px;"></td><td style="width: 20px; height: 20px;"></td><td style="width: 20px; height: 20px;"></td><td style="width: 20px; height: 20px;"></td><td style="width: 20px; height: 20px;"></td></tr> </table>						<table border="1" style="width: 100%; border-collapse: collapse;"> <tr><td style="width: 20px; height: 20px;"></td><td style="width: 20px; height: 20px;"></td><td style="width: 20px; height: 20px;"></td><td style="width: 20px; height: 20px;"></td><td style="width: 20px; height: 20px;"></td></tr> </table>					

TIME 1 hour 15 minutes**INSTRUCTIONS TO CANDIDATES**

- Write your name in the space above.
- Write your Centre number and Candidate number in the boxes above.
- Answer **all** the questions.
- Write your answers in the spaces provided on the question paper.
- Read each question carefully and make sure you know what you have to do before starting your answer.

INFORMATION FOR CANDIDATES


- The number of marks is given in brackets [] at the end of each question or part question.
- You will be awarded marks for the quality of written communication where this is indicated in the question.
- You may use a scientific calculator.
- You may use the *Data Sheet for Chemistry*.
- You are advised to show all the steps in any calculations.

FOR EXAMINER'S USE		
Qu.	Max.	Mark
1	11	
2	13	
3	14	
4	7	
5	15	
TOTAL	60	

This question paper consists of 11 printed pages and 1 blank page.

Answer **all** the questions.

- 1 When heated, chlorine gas, Cl_2 dissociates into gaseous chlorine atoms.



A chemist placed some chlorine gas in a container which was heated to 1400 K. The container was left until equilibrium had been reached.

Under these conditions, the equilibrium partial pressure of $Cl_2(g)$ is 85.0 kPa and that of $Cl(g)$ is 3.0 kPa.

- (a) What is meant by *partial pressure*?

.....
..... [1]

- (b) Determine the mole fraction of Cl in the equilibrium mixture.

[1]

- (c) (i) Write an expression for K_p for this equilibrium.

[1]

- (ii) Calculate K_p for this equilibrium. State the units.

answer units [2]

- (d) The chemist compressed the reaction mixture and allowed it to reach equilibrium under these new conditions.

Explain what happened to the composition of the equilibrium mixture.

.....

.....

.....

.....[2]

- (e) The chemist changed the temperature of the reaction mixture. The value of K_p decreased.

Explain how this change affected the composition of the equilibrium mixture.

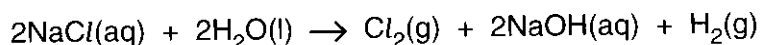
.....

.....

.....

.....[1]

- (f) Industrially, chlorine is prepared by passing an electric current through a 4.00 mol dm^{-3} solution of sodium chloride, known as brine.



Each year in the UK, 1.6 million tonnes of Cl_2 is produced for many uses, including water treatment and the manufacture of plastics.

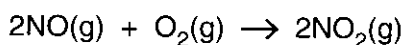
Calculate the volume of brine required each year for Cl_2 production in the UK.

1 tonne = 10^6 g.

answer[3]

[Total: 11]

- 2 Nitrogen dioxide is one of the major pollutants in air, formed by reaction of nitrogen monoxide with oxygen.



- (a) What is meant by the *rate of reaction*?

.....
 [1]

- (b) A series of experiments was carried out to investigate the kinetics of this reaction. The results are shown in the table below.

Experiment	[O ₂] / mol dm ⁻³	[NO] / mol dm ⁻³	initial rate / mol dm ⁻³ s ⁻¹
1	0.00100	0.00100	7.10
2	0.00400	0.00100	28.4
3	0.00400	0.00300	256

- (i) For each reactant, deduce the order of reaction. Show your reasoning.

O₂(g)

NO(g)

 [4]

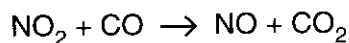
- (ii) Deduce the rate equation for this reaction.

..... [1]

- (iii) Calculate the rate constant, *k*, for this reaction. State the units for *k*.

k = units [2]

- (c) Nitrogen dioxide reacts with carbon monoxide emitted from car exhausts in the following reaction.



The rate equation for this reaction is $\text{rate} = k[\text{NO}_2]^2$.

This is a multi-step reaction. The first step is the rate-determining step.

- (i) What is meant by the *rate-determining step*?

.....
.....[1]

- (ii) Suggest a two-step reaction mechanism for this reaction that is consistent with the kinetic data and the overall reaction.

[2]

- (d) NO_2 reacts with oxygen and water to form nitric acid, HNO_3 . In the atmosphere, this contributes to acid rain. Construct a balanced equation for this formation of nitric acid and use oxidation numbers to show that this is a redox reaction.

.....
.....
.....
.....
.....[2]

[Total: 13]

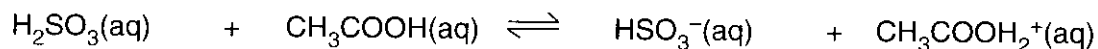
- 3 The K_a values for three acids are shown in the table below.

acid		$K_a / \text{mol dm}^{-3}$
ethanoic acid	CH_3COOH	1.70×10^{-5}
phenol	$\text{C}_6\text{H}_5\text{OH}$	1.28×10^{-10}
sulphurous acid	H_2SO_3	1.50×10^{-2}

- (a) What information is provided by K_a values?

.....
 [1]

- (b) When sulphurous acid and ethanoic acid are mixed together, an acid-base reaction takes place.



.....

- (i) In the spaces above

- label one **conjugate acid-base pair** as acid 1 and base 1,
- label the other **conjugate acid-base pair** as acid 2 and base 2.

[2]

- (ii) Predict and explain the acid-base reaction that would take place if ethanoic acid were mixed with phenol. Include an equation in your answer.

.....

 [2]

- (c) The pH value of 0.0450mol dm^{-3} hydrochloric acid is different from that of 0.0450mol dm^{-3} ethanoic acid.

Calculate the pH values of these two acids. Show all your working.

[5]

- (d) An excess of magnesium was added to 100cm^3 of 0.0450mol dm^{-3} hydrochloric acid. The same mass of magnesium was added to 100cm^3 of 0.0450mol dm^{-3} ethanoic acid.

Both reactions produced 54cm^3 of hydrogen gas, measured at room temperature and pressure, but the reaction with ethanoic acid took much longer to produce this gas volume.

Explain why the reactions produced the same volume of a gas but at different rates.

Use equations in your answer.

.....

.....

.....

.....

.....

.....

.....

.....

.....

.....

.....

.....[4]

[Total: 14]

BLANK PAGE

Turn over for Question 5

- 5 This question looks at some chemicals found in food.

1 mole of gas molecules occupies 24.0 dm^3 at room temperature and pressure.

The Avogadro constant = $6.02 \times 10^{23} \text{ mol}^{-1}$.

- (a) A chemistry student bought a bar of chocolate. The student looked on the label and found that the main ingredient listed was 'sugars', making up 47.0% by mass of the 43.0 g chocolate bar. Throughout this question you can assume that all the sugars are present as sucrose, $\text{C}_{12}\text{H}_{22}\text{O}_{11}$.

- (i) How many sucrose molecules were in the bar of chocolate?

[4]

- (ii) The student ate the bar of chocolate. The standard enthalpy change of combustion of sucrose is $-5640 \text{ kJ mol}^{-1}$. On food labels, the energy content is measured in Calories. 1 Calorie = 4.18 kJ.

- Write an equation for the chemical change involved in the standard enthalpy change of combustion of sucrose.
- How much energy, in Calories, is available to the student from the sugars in the chocolate bar?

energy = Calories [3]

- (b) An oxide of nitrogen is used as the propellant in whipped cream. This oxide contains 63.64% N by mass, and has a density of 1.833 g dm^{-3} at room temperature and pressure.

What is the molecular formula of this gas? Show your working.

[3]

- (c) Chocolate mousse contains gelatine and a compound to promote fast setting of the mousse.

Compound **A** is such a setting agent. It has two acidic hydrogen atoms per molecule and is one of the six acids listed below.

oxalic acid	HOOC ₂ COOH
malonic acid	HOOCCH ₂ COOH
succinic acid	HOOC(CH ₂) ₂ COOH
glutaric acid	HOOC(CH ₂) ₃ COOH
adipic acid	HOOC(CH ₂) ₄ COOH
pimelic acid	HOOC(CH ₂) ₅ COOH

The student analysed a sample of compound **A** by titration.

The student dissolved 2.82 g of compound **A** in water and made the solution up to 250 cm³ in a volumetric flask. He titrated 25.0 cm³ of this solution with 0.175 mol dm⁻³ NaOH.

22.05 cm³ of NaOH were required for complete neutralisation.

Use the results of the student's analysis to identify compound **A** from the list above.

Show all of your working.

[5]

[Total: 15]

END OF QUESTION PAPER

