



Rewarding Learning

ADVANCED
General Certificate of Education
January 2010

Centre Number

71	
----	--

Candidate Number

--

Biology

Assessment Unit A2 3A

assessing

Module 6A: Synoptic Paper

[A2B31]



THURSDAY 28 JANUARY, MORNING

TIME

1 hour.

INSTRUCTIONS TO CANDIDATES

Write your Centre Number and Candidate Number in the spaces provided at the top of this page.
Write your answers in the spaces provided in this question paper.
Answer **all four** questions.

INFORMATION FOR CANDIDATES

The total mark for this paper is 50.
Section A carries 35 marks.
Section B carries 15 marks.
You should spend approximately **20 minutes** on Section B.
You are expected to answer Section B in continuous prose.
Quality of written communication will be assessed in **Section B**.
Figures in brackets printed down the right-hand side of pages indicate the marks awarded to each question or part question.
A **data sheet** is provided for use with this paper.

For Examiner's use only	
Question Number	Marks
1	
2	
3	
4	

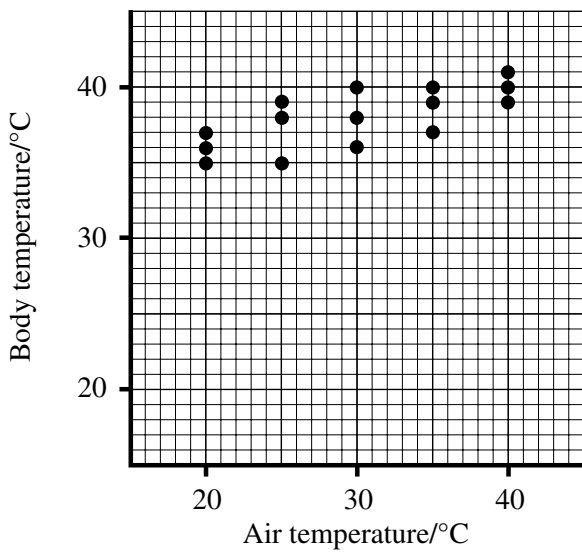
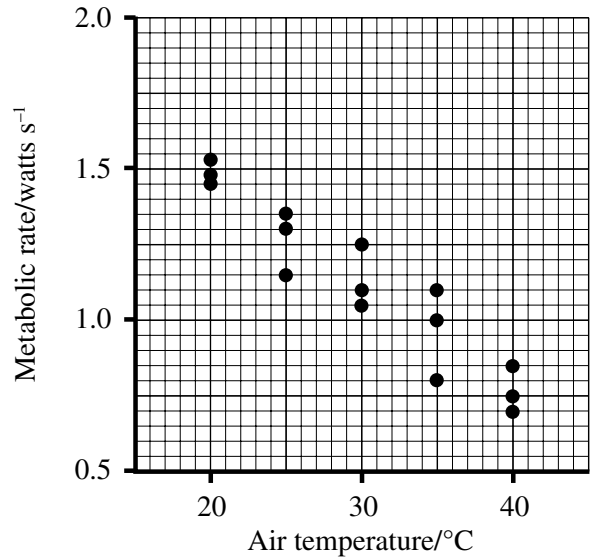
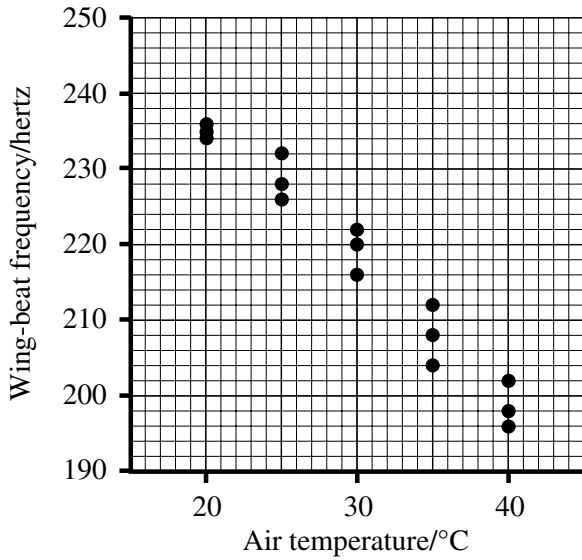
Total Marks	
--------------------	--

BLANK PAGE

(c) Honeybees are able to fly even when the air temperature is relatively low. To investigate this, honeybees were exposed to air temperatures between 20° and 40°C, and the following were measured:

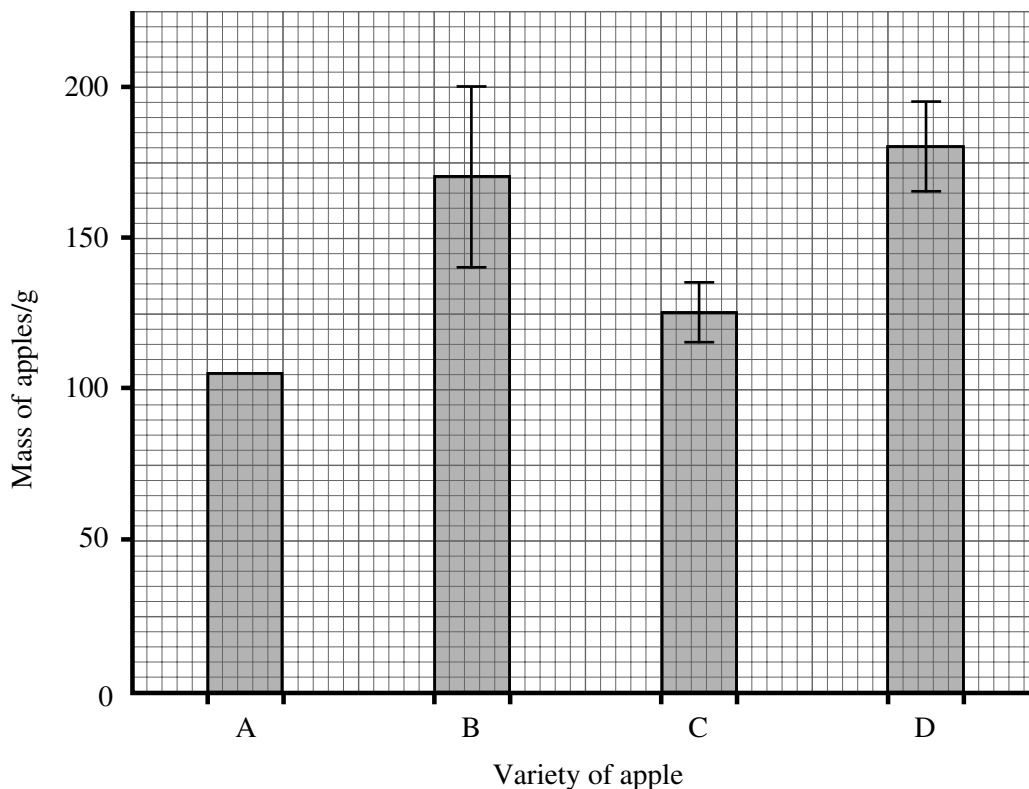
- wing-beat frequency
- metabolic rate
- body temperature

The results of this study are shown in the graphs below.



- 2 An orchard contained four varieties of apple tree. To compare fruit production for the four varieties, 30 apples of each variety were randomly chosen and weighed.

From the data for each variety, the means and standard deviation of the means were calculated and, for three of the varieties, the 95% confidence limits were determined. The means and 95% confidence limits are shown in the graph below.



- (a) For the **variety A** sample (of 30 apples), the mean was 105, while the standard deviation of the mean ($\hat{\sigma}_{\bar{x}}$) was 12.2. (Units are grams.)

Calculate the 95% confidence limits, and **plot** these on the graph. (Use the space below for your calculation.)

Upper limit _____

Lower limit _____

[3]

Examiner Only	
Marks	Remark

(e) Apple variety D is diploid though it has a triploid strain. It was expected that fruit mass for the triploid strain would be 50% greater than that of the diploid strain. To test this hypothesis the total mass of 600 apples of each strain was compared using a χ^2 test.

(i) Complete the table below to calculate the χ^2 value for the test. (Units are kg.)

Strain	Observed mass (O)	Expected mass (E)	(O - E)	$\frac{(O - E)^2}{E}$
Diploid	109	100	9	
Triploid	141	150	-9	

χ^2 value _____ [2]

(ii) What does the calculated χ^2 value suggest about the expected greater mass of triploid apples compared with diploid apples? Justify your decision with reference to the probability value for the calculated χ^2 value.

[2]

(iii) Explain why it might be expected that the triploid apples would be 50% greater in mass than the diploid apples.

[1]

Examiner Only	
Marks	Remark

BLANK PAGE

(Questions continue overleaf)

3 Read the passage below and then use the information in the passage, and your own understanding, to answer the questions which follow.

Fungi belong to their own kingdom since they differ from all other organisms. They exist either as single cells or as chains of cells organised to form hyphae. Hyphae are organised into a branching network of filaments to form a mycelium – the living body of a fungus. Fungi reproduce asexually by the production of spores. The spore producing bodies are often elaborate structures. 5

Most species of fungi obtain their nutrients by breaking down dead organic matter, though some grow as parasites on other organisms. Fungi have eukaryotic cells, though none of their cells ever possess flagella, and have a rigid cell wall.

Phytophthora infestans is the fungus which infects potato plants. The fungal spores germinate on the surface of the leaf and developing hyphae invade the leaf through stomata. Once inside, the hyphae form a mycelium which proliferates through the entire plant and absorbs nutrients from within the cells. The bracket fungus, *Ganoderma applanatum*, invades the damaged bark of trees and its spore producing bodies appear as thick shelves on the trunk. Its destruction of tissue may lead to the death of the tree which it can feed off for years ahead. 10 15

Nevertheless most fungi may be seen as beneficial. Their most important role is as major decomposers in ecosystems. Their actions, along with those of many other microorganisms, release carbon and nitrogen back into the environment, thus playing an essential role in both the carbon and nitrogen cycles. Some are directly used by man. The yeast, *Saccharomyces cerevisiae* – strains of which are known as baker's or brewer's yeast – is used in both bread making and the fermentation process needed to produce beer and wine. Several species of fungi provide a major source of the antibiotics used to treat human bacterial infections. *Penicillium notatum* is the source of penicillin, while streptomycin is derived from *Streptomyces griseus*. Penicillin works by disrupting bacterial cell wall synthesis resulting in cell lysis. Streptomycin interferes with bacterial ribosomes and so inhibits protein synthesis. 20 25

(a) Fungi are distinctive from organisms in the other kingdoms [line 1].

(i) State **two** differences between fungi and plants.

1. _____
 2. _____
- [2]

(ii) State **two** differences between fungi and animals.

1. _____
 2. _____
- [2]

Examiner Only	
Marks	Remark

(e) Explain why streptomycin does not affect the metabolism of human cells while it is effective against bacteria [line 25 and 26].

[1]

(f) Explain why penicillin is rarely used nowadays to counter bacterial infections.

[1]

Examiner Only	
Marks	Remark

THIS IS THE END OF THE QUESTION PAPER

Permission to reproduce all copyright material has been applied for.
In some cases, efforts to contact copyright holders may have been unsuccessful and CCEA
will be happy to rectify any omissions of acknowledgement in future if notified.