

**OXFORD CAMBRIDGE AND RSA EXAMINATIONS
AS GCE**

F212/01

BIOLOGY

**Molecules, Biodiversity, Food
and Health**

MONDAY 2 JUNE 2014: Afternoon

**DURATION: 1 hour 45 minutes
plus your additional time allowance**

MODIFIED ENLARGED

Candidate forename		Candidate surname	
-------------------------------	--	------------------------------	--

Centre number						Candidate number				
--------------------------	--	--	--	--	--	-----------------------------	--	--	--	--

Candidates answer on the Question Paper.

OCR SUPPLIED MATERIALS:

None

OTHER MATERIALS REQUIRED:

**Electronic calculator
Ruler (cm/mm)**

READ INSTRUCTIONS OVERLEAF

INSTRUCTIONS TO CANDIDATES

Write your name, centre number and candidate number in the boxes on the first page. Please write clearly and in capital letters.

Use black ink. HB pencil may be used for graphs and diagrams only.

Answer ALL the questions.

Read each question carefully. Make sure you know what you have to do before starting your answer.

Write your answer to each question in the space provided. If additional space is required, you should use the lined pages at the end of this booklet. The question number(s) must be clearly shown.

INFORMATION FOR CANDIDATES

The number of marks is given in brackets [] at the end of each question or part question.

The total number of marks for this paper is 100.



Where you see this icon you will be awarded marks for the quality of written communication in your answer.

You may use an electronic calculator.

You are advised to show all the steps in any calculations.

Any blank pages are indicated.

BLANK PAGE

Answer ALL the questions.

- 1** In 2006, the scientific journal, *Nature*, reported the discovery of a fossil from around 380 million years ago. It was given the name *Tiktaalik roseae*.

This fossil has some features in common with fish and some features in common with amphibians.

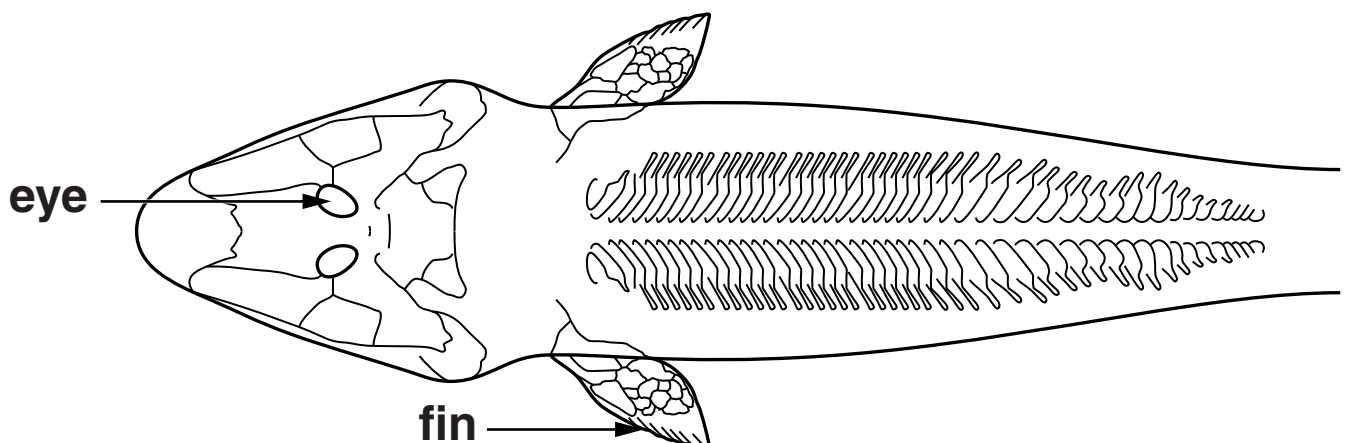
A photograph of the fossil is shown in Fig. 1.1.

FIG. 1.1



A diagram of the fossil viewed from above is shown in Fig. 1.2.

FIG. 1.2



- (a) (i) Suggest ONE adaptation, VISIBLE IN FIG. 1.1 AND FIG. 1.2, which would be an advantage for life under water.

_____ [1]

- (ii) Suggest ONE adaptation, VISIBLE IN FIG. 1.1 AND FIG. 1.2, which would be useful for an animal that lives on the sea bed.

_____ [1]

- (b) *Tiktaalik roseae* is a member of the kingdom Animalia. The structure of its individual cells has not been preserved by fossilisation.

State TWO features of cells of an organism from the kingdom PLANTAE that would NOT have been present in the cells of *T. roseae*.

1 _____

2 _____

[2]

(c) Fossils provide strong evidence that organisms have evolved over time.

Describe OTHER types of evidence that support the theory of evolution.



In your answer you should describe some different types of evidence.

[6]

[illegible]

[TOTAL: 10]

- 2 Many reactions in living organisms are catalysed by enzymes.**

Amylase is an extracellular enzyme that catalyses the breakdown of the polysaccharide starch (amylose) in the digestive system of many animals.

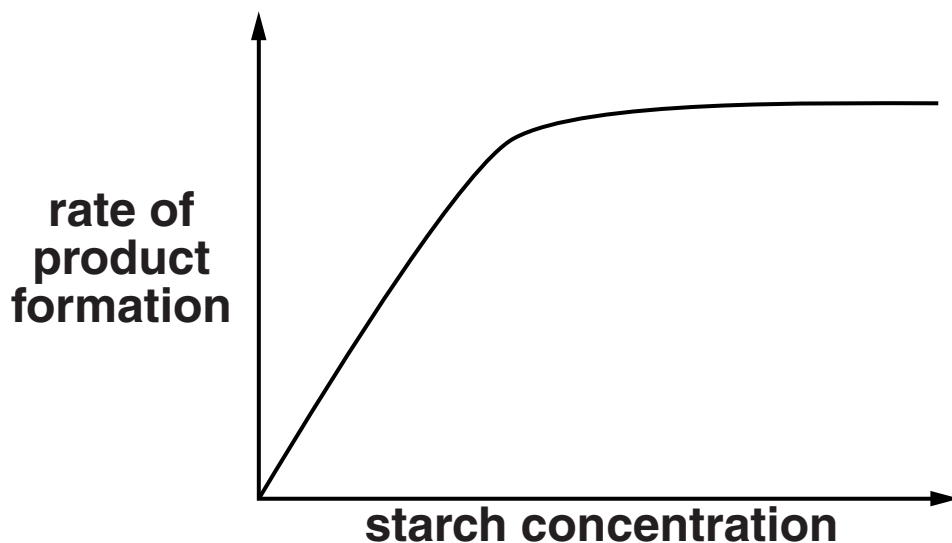
- (a) Why is the enzyme amylase described as being extracellular?**

[1]

- (b) A student investigated the effect of changing the concentration of starch on the rate of starch breakdown by amylase.**

The results of the investigation are shown in Fig. 2.1.

FIG. 2.1



- (i) To calculate the rate of starch breakdown, the student measured the concentration of the breakdown **PRODUCT**.

State the other variable the student needed to know in order to calculate the **RATE** of this reaction.

_____ [1]

- (ii) **EXPLAIN** the shape of the graph shown in Fig. 2.1.

_____ [5]

- (iii) The student kept the pH of the solution constant during the experiment.**

Explain why it is important that the pH was kept constant.

[3]

- (iv) Suggest TWO other variables the student should have kept constant during the experiment.**

1

2

[2]

(c) Cellulose is another polysaccharide that is present in some living organisms.

(i) Complete the following table to show THREE other differences in the STRUCTURES of starch (amylose) and cellulose molecules.

AMYLOSE	CELLULOSE
coiled	no coiling

[3]

(ii) Which properties of cellulose make it suitable for forming cell walls?

[2]

[TOTAL: 17]

- 3 The Royal Botanic Gardens at Kew plays an important role in plant conservation. One plant that has been conserved at Kew is the world's smallest water lily, the thermal lily, *Nymphaea thermarum*.**

In its natural habitat, the thermal lily grows in hot water springs in central Africa.

- (a) State the genus to which the thermal lily belongs.**

_____ **[1]**

- (b) Explain why it is sometimes necessary to conserve a plant species, such as *N. thermarum*, outside its natural habitat (*ex situ*).**

_____ **[3]**

- (c) The Royal Botanic Gardens also manages the Millennium Seed Bank, which aims to store seeds from one quarter of all plant species.**

Give THREE advantages of conserving plant species as seeds and NOT as adult plants.

1 _____

2 _____

3 _____

[3]

- (d) When measuring the biodiversity of a habitat, it is difficult to count every organism. It is therefore necessary to sample a proportion of the habitat. The sampling process must not be biased.**

Outline an unbiased sampling method that can be used to measure the biodiversity of plant species in grassland.

[4]

(e) Scientists try to estimate the total number of species on Earth.

Suggest THREE reasons why such estimates are not likely to be accurate.

1 _____

2 _____

3 _____

[3]

[TOTAL: 14]

4 Proteins are important biological molecules.

- (a) Protein structure can be represented at four levels: primary, secondary, tertiary and quaternary.**

Below is a set of features that may be used when describing the structure of a protein such as haemoglobin.

Features	Letter
hydrogen bonds	A
peptide bonds	B
α and β subunits	C
the sequence of amino acids	D
the initial folding of the polypeptide chain	E
the overall 3D shape	F
ionic bonds	G

- (i) Select the letters of the features that describe the primary level of protein structure.**

_____ [1]

- (ii) Select the letter or letters of the feature(s) found in the secondary level of protein structure that are NOT present in the primary structure.**

_____ [1]

- (iii) Select the letter or letters of the feature(s) that are found in the tertiary level of protein structure that are NOT present in the primary and secondary structures.**

_____ [1]

- (iv) Select the letter or letters of the feature(s) found only in the quaternary level of protein structure.**

_____ [1]

(b) Hydrogen bonds also form between water molecules.

(i) Describe the formation of a hydrogen bond between two molecules of water and explain why water can form these bonds.

[3]

(ii) Hydrogen bonds allow water to act as a solvent.

Why is the ability of water to act as a solvent important for the survival of organisms?

[3]

[TOTAL: 10]

5 Charles Darwin sailed on HMS Beagle on its voyage around the world between 1831 and 1836.

(a) Darwin made the following observation:

'offspring generally appear similar to their parents'

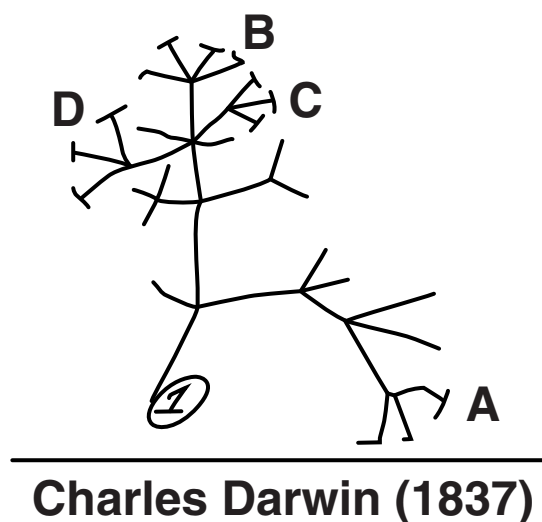
State the conclusion that Darwin drew from this observation.

[1]

(b) Shortly after the voyage, Darwin sketched a diagram in his notebook.

His sketch is shown in Fig. 5.1.

FIG. 5.1



A, B, C and D represent different modern day organisms.

① represents an ancestral organism.

Explain what the sketch shows about the relationship between organisms A, B, C, and D.

[2]

- (c) In 1859, Darwin published his book, 'On the Origin of Species', in which he explained how organisms evolve by natural selection:**

Darwin's book caused controversy at the time of its publication

his theory of natural selection is now widely accepted by scientists.

Why is natural selection now more widely accepted by scientists than it was in the 19th Century?

[1]

- (d) Genes are important in the process of natural selection. Genes are made of DNA.**

(i) State the role of a gene.

[1]

[illegible]

- (e) During the voyage of HMS Beagle, Darwin visited the Galapagos Islands off the coast of South America.**

He observed that many of the closely related species showed significant variation.

- (i) State the name given to the evolution of a new species.**

_____ **[1]**

- (ii) Suggest why a higher number of species have evolved in the Galapagos Islands, compared with an area of the same size on the South American mainland.**

_____ **[1]**

[TOTAL: 12]

BLANK PAGE

6 Smoking has a number of negative effects on a person's health.

(a) State what is meant by the term 'health'.

[2]

(b) An investigation was carried out on the causes of death in a large number of heavy smokers.

The investigators recorded the number of deaths from a range of diseases within the group of smokers.

This was compared with the expected number of deaths from the same number of people across the population as a whole.

The results are shown in Table 6.1.

TABLE 6.1

Cause of death	Recorded deaths	Expected deaths	Percentage by which deaths are increased in smokers
Coronary heart disease (CHD)	3361	1973	70.3
Lung cancer	397	37	973.0
Other lung diseases e.g. COPD	231	81	

- (i) Calculate the percentage by which deaths from **OTHER LUNG DISEASES** was increased in the smoking group. Show your working and **WRITE YOUR ANSWER IN THE TABLE.**

[2]

- (ii) Outline **TWO** conclusions that could be drawn from the data in Table 6.1 about the effects of smoking on lung cancer or CHD.

1 _____

2 _____

[2]

(c) Describe how the components of tobacco smoke can affect the CARDIOVASCULAR SYSTEM of smokers.



In your answer you should link the chemicals in tobacco smoke to their effects on the cardiovascular system. [7]

[illegible]

[TOTAL: 13]

- 7 A breed of cattle, known as Chillingham cattle, is thought to resemble the wild cattle from which modern domestic breeds have been produced.**

Fig. 7.1 shows one of the Chillingham cows and Fig. 7.2 shows a modern cow.

FIG. 7.1 Chillingham cow



FIG. 7.2 modern cow



- (a) (i) Suggest ONE feature of the Chillingham cow that is likely to have changed during selective breeding to increase productivity.**

[1]

- (ii) Describe how modern cattle have been produced from less productive wild cattle ancestors.**

[4]

- (b) Many people in the UK consume large amounts of milk and beef.**

Over-consumption of milk and beef can lead to an unbalanced diet and malnutrition.

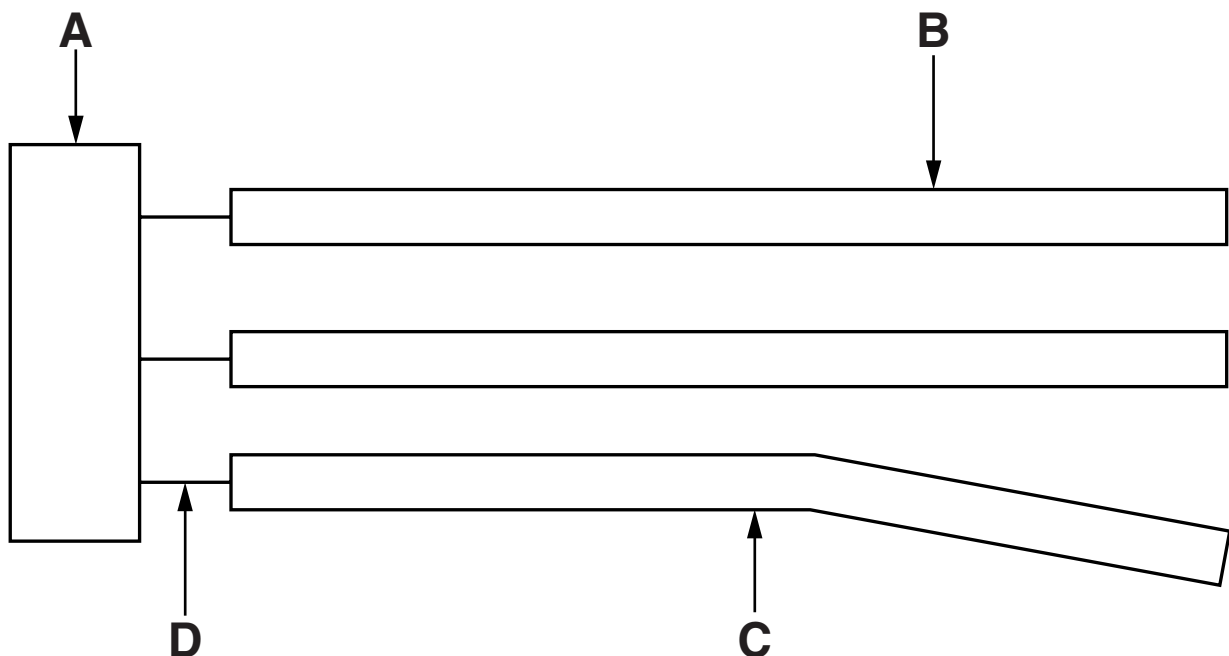
- (i) Define the term ‘balanced diet’.**

[2]

- (ii) Milk and beef both contain triglyceride molecules.**

Fig. 7.3 represents a triglyceride molecule.

FIG. 7.3



Identify A, C and D on Fig. 7.3.

A _____

C _____

D _____

[3]

(iii) Suggest and explain why over-consumption of milk and beef can lead to malnutrition.

_____ **[3]**

(c) In the past, beef was preserved by adding salt.

Explain how salting preserves food.

[3]

[TOTAL: 16]

8 Vaccination can provide immunity to disease.

(a) Complete the following passage by using the most appropriate term from the list.

active	antigen(s)	double-helix
membrane(s)	memory	mutation
passive	phagocytic	receptor(s)
species	specific	strand
strain	white blood	

Some vaccines contain a dead or weakened form of a pathogen. The _____ on the cell surface of the pathogen are still able to trigger the production of _____ antibodies in the person being vaccinated.

Cells called _____ cells are also produced, which retain the ability to divide and produce the antibodies quickly, should the pathogen return.

A new _____ of pathogen can arise if there is a _____ in the DNA of the pathogen. If this happens, the original vaccine is not likely to be effective.

[5]

- (b) The term ‘immunity’ is often used when describing how vaccines work.

In a piece of school homework a student wrote:

“Bacteria can evolve quickly and many are now immune to antibiotics.”

Explain why the student’s use of the word ‘immune’ was incorrect.

[3]

[TOTAL: 8]

END OF QUESTION PAPER

ADDITIONAL ANSWER SPACE

If additional answer space is required, you should use the following lined page(s). The question number(s) must be clearly shown in the margins.

[illegible]

[illegible]

ADDITIONAL ANSWER SPACE



Copyright Information

OCR is committed to seeking permission to reproduce all third-party content that it uses in its assessment materials. OCR has attempted to identify and contact all copyright holders whose work is used in this paper. To avoid the issue of disclosure of answer-related information to candidates, all copyright acknowledgements are reproduced in the OCR Copyright Acknowledgements Booklet. This is produced for each series of examinations and is freely available to download from our public website (www.ocr.org.uk) after the live examination series.

If OCR has unwittingly failed to correctly acknowledge or clear any third-party content in this assessment material, OCR will be happy to correct its mistake at the earliest possible opportunity.

For queries or further information please contact the Copyright Team, First Floor, 9 Hills Road, Cambridge CB2 1GE.

OCR is part of the Cambridge Assessment Group; Cambridge Assessment is the brand name of University of Cambridge Local Examinations Syndicate (UCLES), which is itself a department of the University of Cambridge.

