

**ADVANCED SUBSIDIARY GCE**  
**HEALTH AND SOCIAL CARE**  
Unit 4: Health and Safety in Care Settings

**F913**

Candidates answer on the question paper

**OCR Supplied Materials:**  
None

**Other Materials Required:**  
None

**Wednesday 3 June 2009**  
**Morning**

**Duration:** 1 hour 30 minutes



Candidate Forename		Candidate Surname	
--------------------	--	-------------------	--

Centre Number						Candidate Number				
---------------	--	--	--	--	--	------------------	--	--	--	--

**INSTRUCTIONS TO CANDIDATES**

- Write your name clearly in capital letters, your Centre Number and Candidate Number in the boxes above.
- Use black ink. Pencil may be used for graphs and diagrams only.
- Read each question carefully and make sure that you know what you have to do before starting your answer.
- Answer **all** the questions.
- Do **not** write in the bar codes.
- Write your answer to each question in the space provided, however additional paper may be used if necessary.

**INFORMATION FOR CANDIDATES**

- The number of marks is given in brackets [ ] at the end of each question or part question.
- The total number of marks for this paper is **100**.
- You will be awarded marks for the quality of written communication where an answer requires a piece of extended writing.
- This document consists of **16** pages. Any blank pages are indicated.

Examiner's Use Only:			
1			
2			
3			
4			
5			
6			
<b>Total</b>			

1 (a) (i) Identify the legislation which regulates the handling and storage of many dangerous substances (date not required).

..... [1]

(ii) Identify **three** substances which are governed by this legislation. For each, describe **one** feature of how the substance should be handled or stored.

1 .....

.....

.....

.....

2 .....

.....

.....

.....

3 .....

.....

.....

..... [6]

(b) (i) Identify the legislation which controls the reporting of certain accidents at work (date not required).

..... [1]

(ii) Give examples of **three** accidents that should be reported under this legislation.

1 .....

.....

2 .....

.....

3 .....

..... [3]

(c) Identify **two** pieces of information that should be present in an accident report and explain why each is useful.

1 .....

.....

.....

.....

2 .....

.....

.....

..... [4]

[Total: 15]



A



B



C

2 (a) Three different types of safety sign are shown above.

For each, identify the type of sign and explain how risk is reduced.

A .....

.....

.....

.....

.....

.....

.....

B .....

.....

.....

.....

.....

.....

.....

C .....

.....

.....

.....

.....

.....

.....

[9]



**3 (a)** Identify **three** procedures or equipment that could be present in a care setting to assist evacuation in the event of an outbreak of fire. Explain how each helps to improve safety.

1 .....  
.....  
.....  
.....  
.....  
.....

2 .....  
.....  
.....  
.....  
.....  
.....

3 .....  
.....  
.....  
.....  
.....

..... **[6]**

**(b)** Identify **three** different pieces of equipment that could be used to extinguish a small fire. Describe the circumstances in which each could be used.

1 .....  
.....  
.....  
.....  
.....  
.....

2 .....  
.....  
.....  
.....  
.....  
.....

3 .....  
.....  
.....  
.....  
.....

..... **[6]**

(c) Explain factors that should be considered in the event of a fire in:

**Either** a school for children with learning difficulties

**Or** a hospital

Circle your choice of setting.

.....

.....

.....

.....

.....

.....

.....

.....

.....

.....

.....

.....

.....

.....

.....

.....

.....

.....

.....

.....

.....

.....

.....

.....

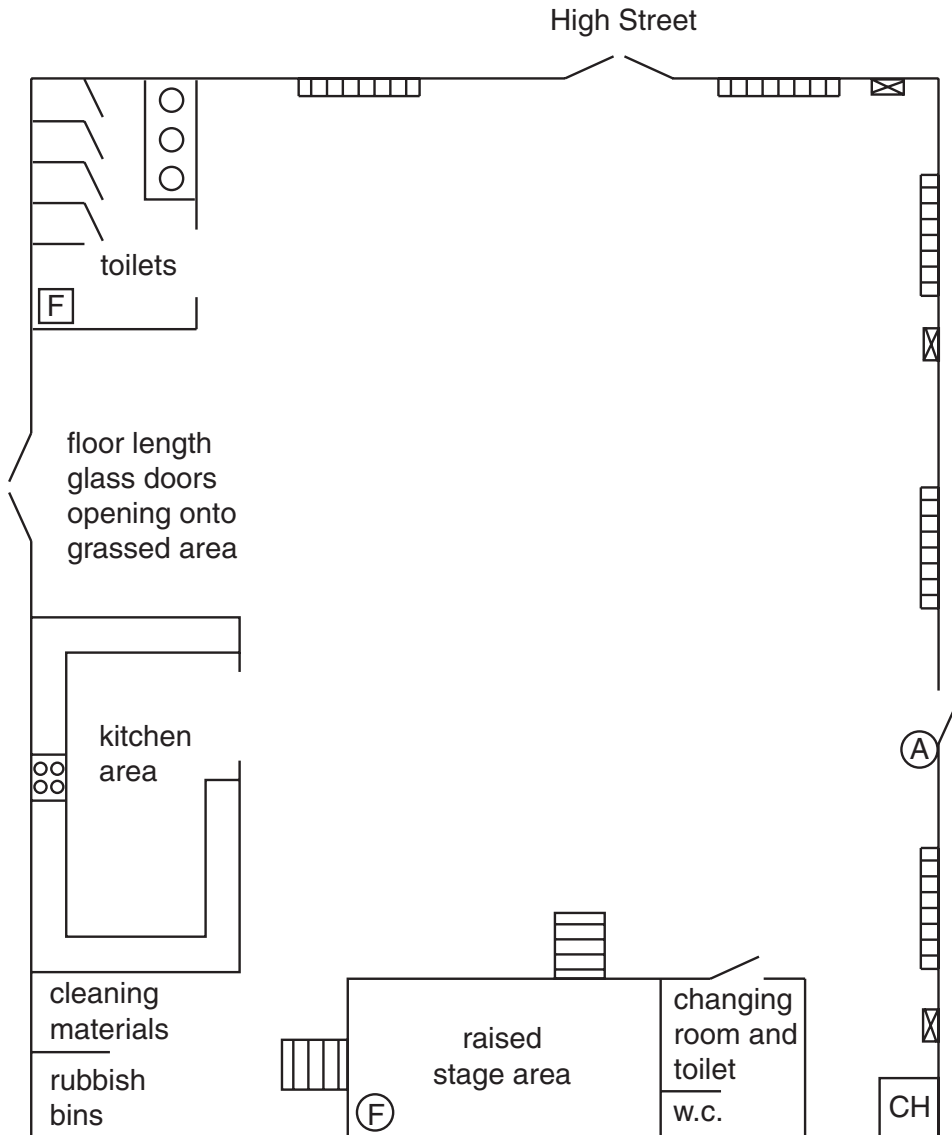
.....











..... [8]

[Total: 20]

4 The Church Hall shown is to be used for a playgroup.

**Floor Plan of Church Hall**



- |   |                        |   |                                       |
|---|------------------------|---|---------------------------------------|
|  | radiator               |  | hand basin                            |
|  | plug socket            |  | freestanding steps leading onto stage |
|  | alarm on door opener   |  | opening door                          |
|  | central heating boiler |  | fire extinguisher                     |
|  | first aid box          |  | cooker                                |





.....  
.....  
.....  
.....  
.....  
.....  
.....  
.....  
.....  
.....  
..... [15]

**(b)** The fourth stage of risk assessment is to document the findings. Assess the value of this stage of risk assessment to care workers in a care setting.

.....  
.....  
.....  
.....  
.....  
.....  
.....  
.....  
.....  
.....  
.....  
.....  
.....  
.....  
.....  
.....  
.....  
.....  
..... [5]

**[Total: 20]**

11  
BLANK PAGE

PLEASE DO NOT WRITE ON THIS PAGE

5 (a) Explain, with examples, how using Personal Protective Equipment (PPE) reduces the risk of cross-contamination in a care setting.

.....

.....

.....

.....

.....

.....

.....

.....

.....

.....

.....

.....

.....

.....

.....

.....

.....

.....

.....

.....

.....

..... [6]







**PLEASE DO NOT WRITE ON THIS PAGE**



**Copyright Information**

OCR is committed to seeking permission to reproduce all third-party content that it uses in its assessment materials. OCR has attempted to identify and contact all copyright holders whose work is used in this paper. To avoid the issue of disclosure of answer-related information to candidates, all copyright acknowledgements are reproduced in the OCR Copyright Acknowledgements Booklet. This is produced for each series of examinations, is given to all schools that receive assessment material and is freely available to download from our public website ([www.ocr.org.uk](http://www.ocr.org.uk)) after the live examination series.

If OCR has unwittingly failed to correctly acknowledge or clear any third-party content in this assessment material, OCR will be happy to correct its mistake at the earliest possible opportunity.

For queries or further information please contact the Copyright Team, First Floor, 9 Hills Road, Cambridge CB2 1PB.

OCR is part of the Cambridge Assessment Group; Cambridge Assessment is the brand name of University of Cambridge Local Examinations Syndicate (UCLES), which is itself a department of the University of Cambridge.