

# 7 + Entrance Examination

## Sample Paper

### Mathematics

Total Marks: 71

Time allowed: 1 hour

#### Information for parents:

**This sample paper has been created for children who are embarking on the 7+ exam. We recommend that these papers are only used in the final run up to the exam.**

The questions within the paper follow Level 3 of the National Curriculum and cover the entirety of the Year 2 Maths curriculum, therefore we strongly advise that students younger than Year 2 do not attempt these papers.

The papers are designed to be challenging, and it is not expected that students will achieve full marks. Although the 7+ exams are highly competitive, it is important to remember that schools are likely to be looking for potential rather than 100% accuracy.

Should you wish for your child to prepare for the 7+ exam before Year 2, we suggest revising individual concepts and playing active Maths games before embarking on more formal revision or sample papers.

Full name .....

1. Write these numbers in figures.

a. forty five

---

b. seven hundred and six

---

c. ninety eight

---

d. three hundred and forty one

---

4 marks

2. Write these numbers in words:

57

---

102

---

587

---

922

---

4 marks

3. Circle the even numbers:

15 22 50 79 99 102

1 mark

4. Circle the odd numbers:

11 25 62 30 563 100

1 mark

5. Using the digits 4, 6 and 7, write:

a. The largest number you can make:

\_\_\_\_\_

b. The smallest number you can make:

\_\_\_\_\_

2 marks

6. Use the numbers 2, 8 and 10 to make different number stories:

eg.  $\boxed{2} + \boxed{8} = \boxed{\quad}$

$$\boxed{\quad} - \boxed{\quad} = \boxed{\quad}$$

$$\boxed{\quad} + \boxed{\quad} = \boxed{\quad}$$

$$\boxed{\quad} - \boxed{\quad} = \boxed{\quad}$$

3 marks

7. Complete the number sequences

1, 3, 5, 7,

0, 4, 8, ,

100, 99, , 97, ,

3 marks

8a. Write a number between 21 and 33.

\_\_\_\_\_

b. Write a number between 89 and 99

\_\_\_\_\_ 2 marks

9a.  $8 + 8 =$

b.  $17 + 10 =$

c.  $215 + 5 =$

d.  $85 + 10 =$

e.  $90 - 8 =$

f.  $87 - 10 =$

g.  $18 \div 3 =$

h.  $45 \div 9 =$

i.  $54 \div 2 =$

9 marks

10. A jar of jam weighs 38 grams. A jar of marmalade weighs 48 grams.

a. Which is lighter?

\_\_\_\_\_

b. How much lighter?

\_\_\_\_\_

2 marks

11a. If John has 40 footballs and gives half of them away, how many footballs does he have left? \_\_\_\_\_

b. James has 15p and his brother has double that amount. How much does his brother have? \_\_\_\_\_

4 marks


12.



25p



16p



30p



11p

- a. How much would the Lego and the robot cost altogether?

\_\_\_\_\_ 2 marks

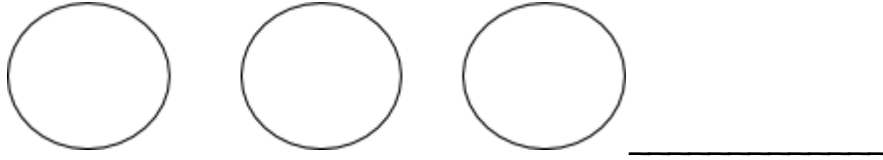
- b. What is the difference in price between the jigsaw and the football?

\_\_\_\_\_ 2 marks

- c. How much change would you receive from £1 if you bought the robot?

\_\_\_\_\_ 2 marks

13a. Which 3 coins would add to a total of 13p?



1 mark

b. Amy has 3 coins to put in her piggy bank. How much does she have altogether?



1 mark

14a.  $17 + 3 =$

b.  $52 + 73 =$

c.  $16 - 8 =$

d.  $71 - 19 =$

4 marks



e.  $52$

$+ 22$

$92$

$- 40$

$61$

$+ 36$

$61$

$- 25$

4 marks


15a.  $4$  multiplied by  $3 =$  \_\_\_\_\_

b.  $5$  lots of  $5 =$  \_\_\_\_\_

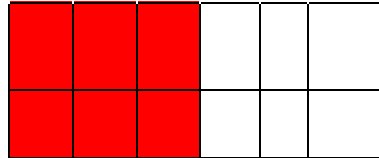
c.  $2$  multiplied by  $8 =$  \_\_\_\_\_ 3 marks

16. Match the fractions to the pictures:

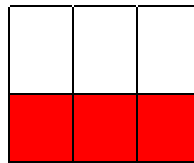
$\frac{1}{4}$



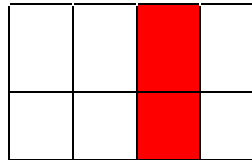
$\frac{1}{2}$



$\frac{3}{4}$



$\frac{1}{5}$



4 marks

17. Match the digital and analogue times.

3:00

$\frac{1}{2}$  past five

4:30

three o'clock

6:00

half past one

5:30

six o'clock

1:30

half past 4

5 marks

18. The owl flew from his nest in June and returned three months later. In what month did the owl return to the nest?

\_\_\_\_\_

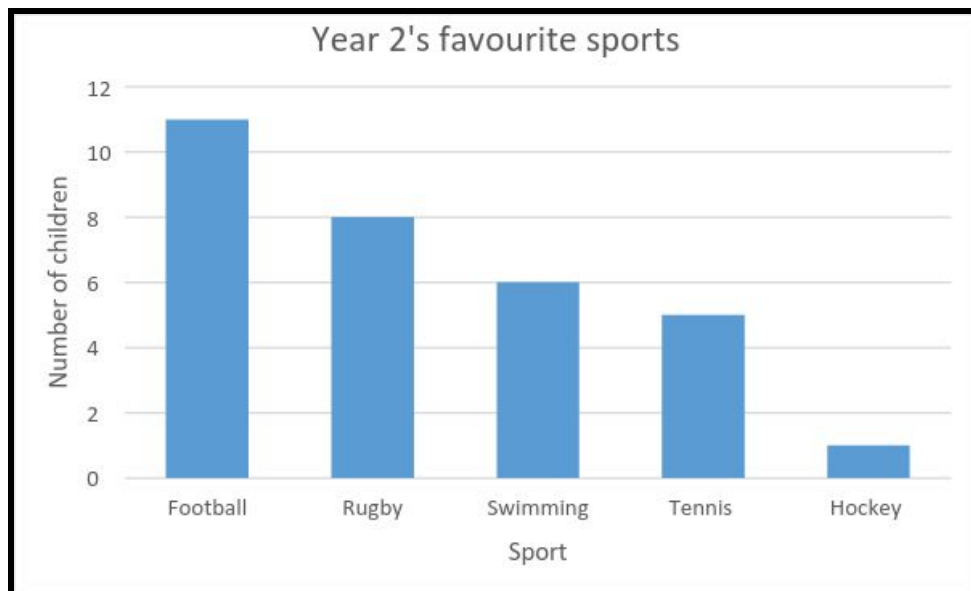
2 marks

19. Tick the shapes that have at least one right angle.



2 marks

20. The bar graph below shows the favourite sports of Year 2.



a. Which sport is most popular?

\_\_\_\_\_

1 mark

b. How many children voted for rugby as their favourite sport? \_\_\_\_\_ 1 mark

c. How many more children prefer swimming to tennis? \_\_\_\_\_ 1 mark

d. How many children are in Year 2?  
\_\_\_\_\_ 1 mark

**7 + Entrance Examination  
Sample Paper  
Mathematics Marking Scheme**

**Total Marks: 71**

- 1a. 45**
- b. 706**
- c. 98**
- d. 341**

- 2a. fifty seven**
- b. one hundred and two**
- c. five hundred and eighty seven**
- d. nine hundred and twenty two**

**3. 22, 50, 102**

**4. 11, 25, 563**

- 5a. 764**
- b. 467**

- 6. 10-2=8**
- 10-8=2**
- 8+2=10**

7. 1, 3, 5, 7,

0, 4, 8,

100, 99,  97,

8a. 22 - 32

b. 90-98

9a. 16

b. 27

c. 220

d. 95

e. 82

f. 77

g. 6

h. 5

i. 27

10a. The jar of jam

b. 10 grams (Half a mark deducted if there is no unit of measure)

11. In question 11, one mark is given for a correct answer, and one mark is given for showing working.

a. 20

b. 30p (Half a mark deducted if there is no unit of measure)

12. In question 11, one mark is given for a correct answer, and one mark is given for showing working.

a. 55p

b. 5p

c. 70p

13a. 10p, 2p, 1p

b. 17p (Half a mark given for adding in correct unit)

14a. 20

b. 125

c. 8

d. 52

e. 74, 52, 97, 36


15a. 12

b. 25

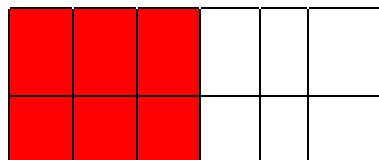
c. 16

16.

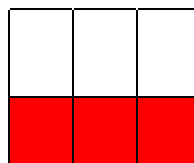
$\frac{1}{5}$



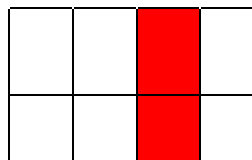
$\frac{3}{4}$



$\frac{1}{2}$



$\frac{1}{4}$



17. 3:00 = three o'clock, 4:30 = half past 4, 6:00 = six o'clock, 5:30 =  $\frac{1}{2}$  past five, 1:30 = half past one
18. September
19. The triangle and the rectangle
- 20a. Football
- b. 8
- c. 1
- d. 31